

**Solve each problem.**

- 1) A clown gave away 40 balloons to girls and 26 balloons to boys. How many balloons did he give away total?

- 2) There were 49 people in line at lunch when 17 more got in line. How many people were there total in line?

- 3) A grocery store had 10 bottles of regular soda and 45 bottles of diet soda. How many bottles did they have total?

- 4) Henry was playing basketball with his friend. Henry scored 10 points and his friend scored 30 points. How many points did they score total?

- 5) A pet store had 39 kittens. If they got another 30 kittens, how many would they have total?

- 6) A restaurant sold 27 sodas in the morning and 28 in the afternoon. How many sodas did they sell total?

- 7) Emily has 34 Playstation games and 37 Xbox games. How many games does she have total?

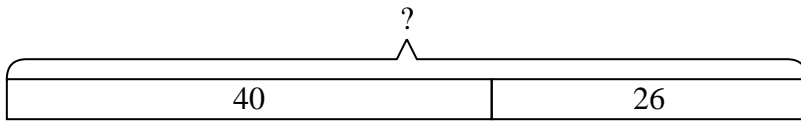
Answers

1. _____
2. _____
3. _____
4. _____
5. _____
6. _____
7. _____

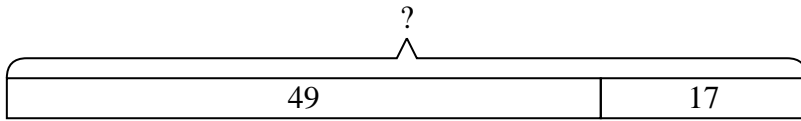


Solve each problem.

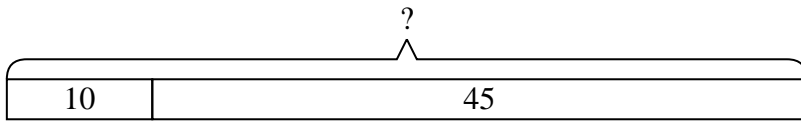
- 1) A clown gave away 40 balloons to girls and 26 balloons to boys. How many balloons did he give away total?



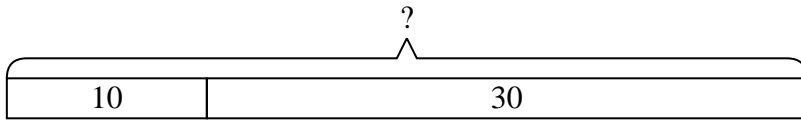
- 2) There were 49 people in line at lunch when 17 more got in line. How many people were there total in line?



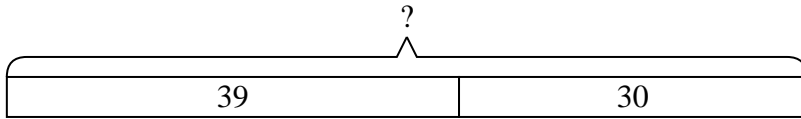
- 3) A grocery store had 10 bottles of regular soda and 45 bottles of diet soda. How many bottles did they have total?



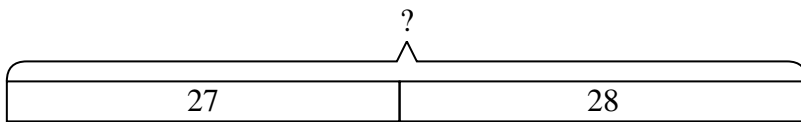
- 4) Henry was playing basketball with his friend. Henry scored 10 points and his friend scored 30 points. How many points did they score total?



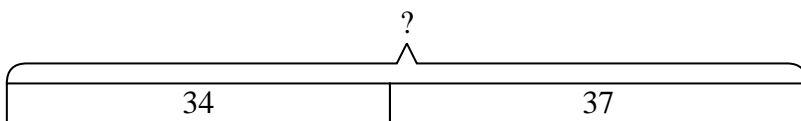
- 5) A pet store had 39 kittens. If they got another 30 kittens, how many would they have total?



- 6) A restaurant sold 27 sodas in the morning and 28 in the afternoon. How many sodas did they sell total?



- 7) Emily has 34 Playstation games and 37 Xbox games. How many games does she have total?



Answers

1. 66
2. 66
3. 55
4. 40
5. 69
6. 55
7. 71