

**Solve each problem.**

- 1) A pet store had 50 birds that talked and 27 that didn't. How many birds did the pet store have total?

- 2) A fast food restaurant sold 13 small hotdogs and 28 large hotdogs. How many hotdogs did they sell total?

- 3) In the first half of a trivia game Roger scored 32 points. In the second half he scored 24 points. How many points did he score total?

- 4) At the zoo Amy took 50 pictures. If her sister took another 19 pictures, how many did they take total?

- 5) Kristine had \$47 and Tiffany had \$17. If they combined their money, how much would they have?

- 6) On Saturday Adam bought 27 trading cards. On Sunday he bought 50 more. How many cards did he buy total?

- 7) A clown gave away 49 balloons to girls and 46 balloons to boys. How many balloons did he give away total?

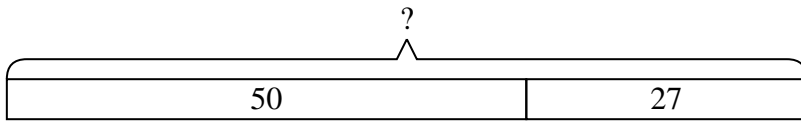
Answers

1. _____
2. _____
3. _____
4. _____
5. _____
6. _____
7. _____

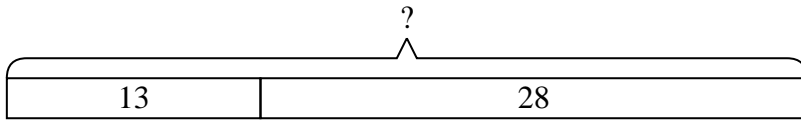


Solve each problem.

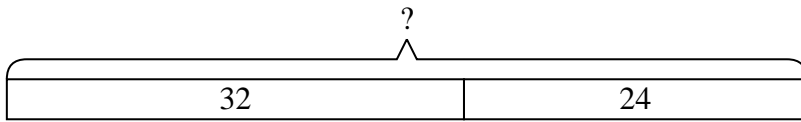
- 1) A pet store had 50 birds that talked and 27 that didn't. How many birds did the pet store have total?



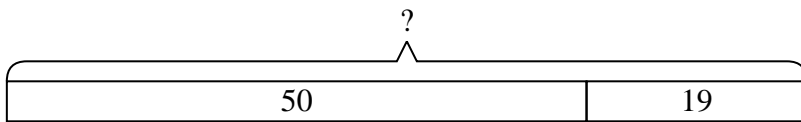
- 2) A fast food restaurant sold 13 small hotdogs and 28 large hotdogs. How many hotdogs did they sell total?



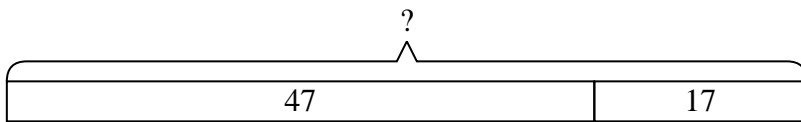
- 3) In the first half of a trivia game Roger scored 32 points. In the second half he scored 24 points. How many points did he score total?



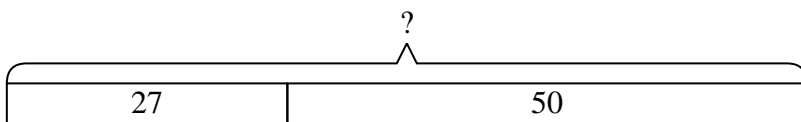
- 4) At the zoo Amy took 50 pictures. If her sister took another 19 pictures, how many did they take total?



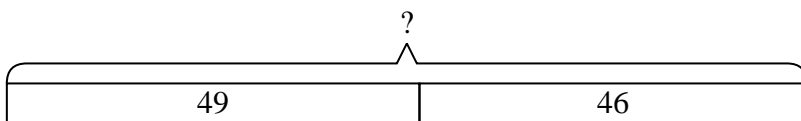
- 5) Kristine had \$47 and Tiffany had \$17. If they combined their money, how much would they have?



- 6) On Saturday Adam bought 27 trading cards. On Sunday he bought 50 more. How many cards did he buy total?



- 7) A clown gave away 49 balloons to girls and 46 balloons to boys. How many balloons did he give away total?



Answers

- 1. 77
- 2. 41
- 3. 56
- 4. 69
- 5. 64
- 6. 77
- 7. 95