

**Solve each problem.**

- 1) There were 40 people in line at lunch when 16 more got in line. How many people were there total in line?

- 2) A pet store had 32 birds that talked and 19 that didn't. How many birds did the pet store have total?

- 3) A store has 11 shirts. Later they got in 40 more shirts. How many shirts does the store have now?

- 4) A baker already had 35 cakes but made 17 extra. How many cakes did the baker have total?

- 5) At the arcade George had won 19 tickets. Later he won 21 more tickets. How many tickets did George have total?

- 6) Adam had \$49. Later he sold some of his old toys and got another \$29. How much money does he have total?

- 7) For Halloween Jerry got 45 ounces of candy and Emily got 46 ounces of candy. What is the combined weight they received?

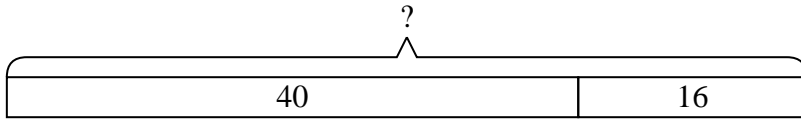
Answers

1. _____
2. _____
3. _____
4. _____
5. _____
6. _____
7. _____

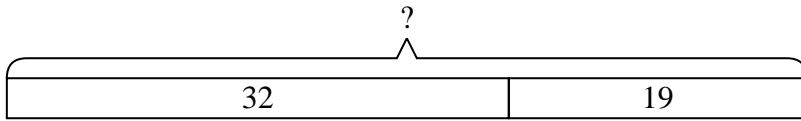


Solve each problem.

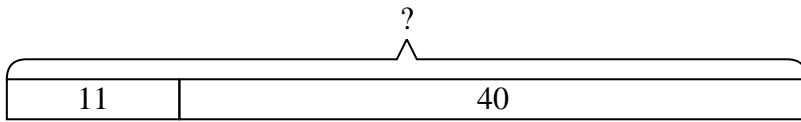
- 1) There were 40 people in line at lunch when 16 more got in line. How many people were there total in line?



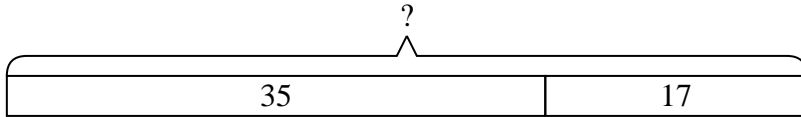
- 2) A pet store had 32 birds that talked and 19 that didn't. How many birds did the pet store have total?



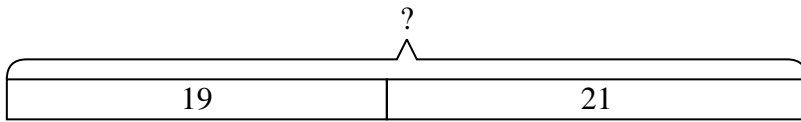
- 3) A store has 11 shirts. Later they got in 40 more shirts. How many shirts does the store have now?



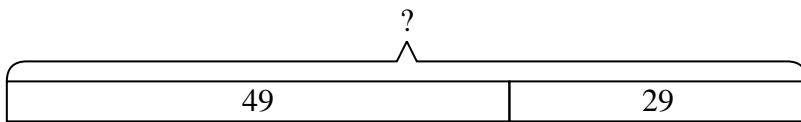
- 4) A baker already had 35 cakes but made 17 extra. How many cakes did the baker have total?



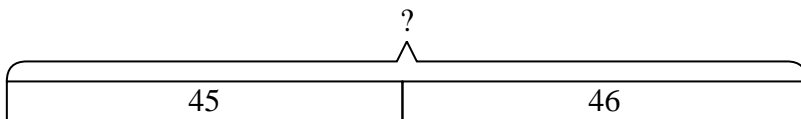
- 5) At the arcade George had won 19 tickets. Later he won 21 more tickets. How many tickets did George have total?



- 6) Adam had \$49. Later he sold some of his old toys and got another \$29. How much money does he have total?



- 7) For Halloween Jerry got 45 ounces of candy and Emily got 46 ounces of candy. What is the combined weight they received?

**Answers**

1. 56
2. 51
3. 51
4. 52
5. 40
6. 78
7. 91