

**Solve each problem.**

- 1) Paul was playing basketball with his friend. Paul scored 22 points and his friend scored 13 points. How many points did they score total?
  
- 2) A fast food restaurant sold 15 small hotdogs and 13 large hotdogs. How many hotdogs did they sell total?
  
- 3) A pet store had 15 kittens. If they got another 18 kittens, how many would they have total?
  
- 4) A store sold 50 cold drinks and 15 hot drinks. How many drinks did they sell total?
  
- 5) George had 45 books. During the book fair he bought 23 more. How many books did George have total?
  
- 6) At the fair Haley started with 24 tickets and then bought 35 more. How many tickets did Haley have total?
  
- 7) For a party Jerry spent 12 dollars on food and 17 dollars on drinks. How much did Jerry spend total?

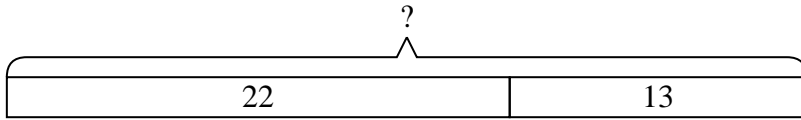
**Answers**

1. \_\_\_\_\_
2. \_\_\_\_\_
3. \_\_\_\_\_
4. \_\_\_\_\_
5. \_\_\_\_\_
6. \_\_\_\_\_
7. \_\_\_\_\_

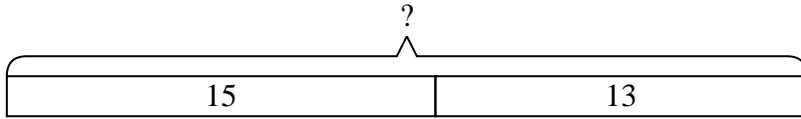


Solve each problem.

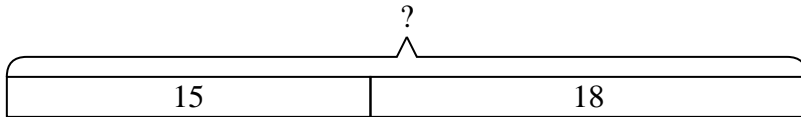
- 1) Paul was playing basketball with his friend. Paul scored 22 points and his friend scored 13 points. How many points did they score total?



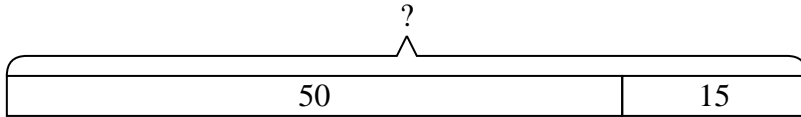
- 2) A fast food restaurant sold 15 small hotdogs and 13 large hotdogs. How many hotdogs did they sell total?



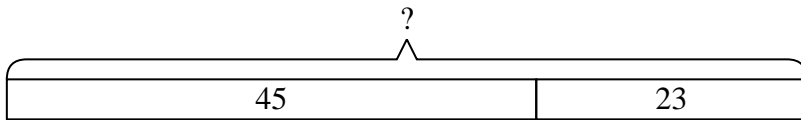
- 3) A pet store had 15 kittens. If they got another 18 kittens, how many would they have total?



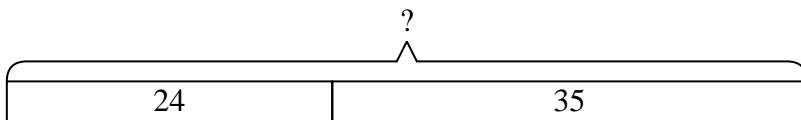
- 4) A store sold 50 cold drinks and 15 hot drinks. How many drinks did they sell total?



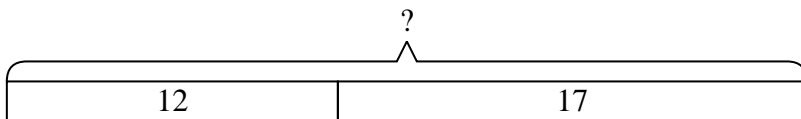
- 5) George had 45 books. During the book fair he bought 23 more. How many books did George have total?



- 6) At the fair Haley started with 24 tickets and then bought 35 more. How many tickets did Haley have total?



- 7) For a party Jerry spent 12 dollars on food and 17 dollars on drinks. How much did Jerry spend total?

Answers

1. 35
2. 28
3. 33
4. 65
5. 68
6. 59
7. 29