

**Solve each problem.**

- 1) Paul collected 25 cans to recycle on Monday and 44 more on Tuesday. How many cans did Paul collect all together?

- 2) A fast food restaurant sold 11 small hotdogs and 15 large hotdogs. How many hotdogs did they sell total?

- 3) For a party Roger spent 39 dollars on food and 28 dollars on drinks. How much did Roger spend total?

- 4) Henry was playing basketball with his friend. Henry scored 47 points and his friend scored 35 points. How many points did they score total?

- 5) Kristine had \$24 and Tiffany had \$19. If they combined their money, how much would they have?

- 6) Haley had 40 sheets of paper in her desk and 30 more in her backpack. How many did she have total?

- 7) Jerry had \$30. Later he sold some of his old toys and got another \$50. How much money does he have total?

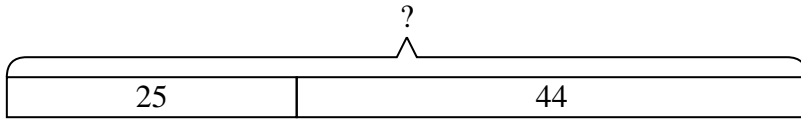
Answers

1. _____
2. _____
3. _____
4. _____
5. _____
6. _____
7. _____

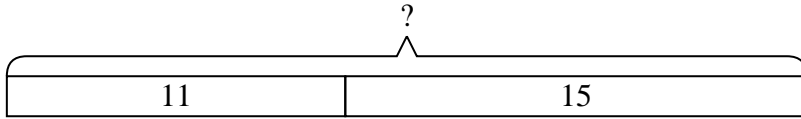


Solve each problem.

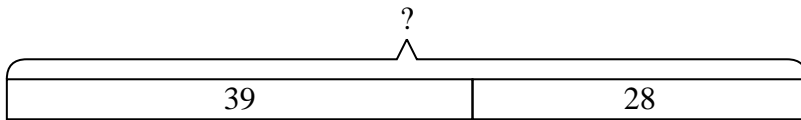
- 1) Paul collected 25 cans to recycle on Monday and 44 more on Tuesday. How many cans did Paul collect all together?



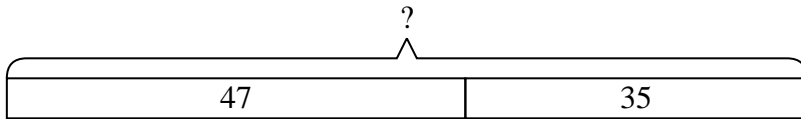
- 2) A fast food restaurant sold 11 small hotdogs and 15 large hotdogs. How many hotdogs did they sell total?



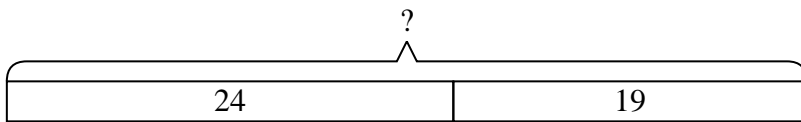
- 3) For a party Roger spent 39 dollars on food and 28 dollars on drinks. How much did Roger spend total?



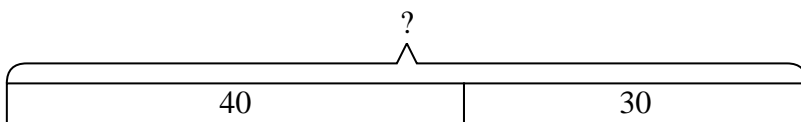
- 4) Henry was playing basketball with his friend. Henry scored 47 points and his friend scored 35 points. How many points did they score total?



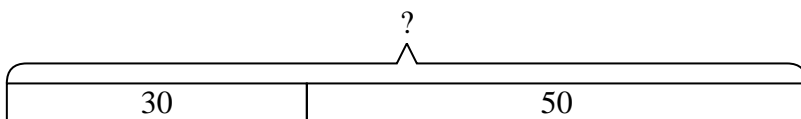
- 5) Kristine had \$24 and Tiffany had \$19. If they combined their money, how much would they have?



- 6) Haley had 40 sheets of paper in her desk and 30 more in her backpack. How many did she have total?



- 7) Jerry had \$30. Later he sold some of his old toys and got another \$50. How much money does he have total?

Answers

1. 69
2. 26
3. 67
4. 82
5. 43
6. 70
7. 80