

**Solve each problem.**

- 1) While exercising Paul did 29 push-ups in the morning and 18 more in the afternoon. How many push-ups did Paul do total?

- 2) A baker already had 40 cakes but made 15 extra. How many cakes did the baker have total?

- 3) A grocery store had 35 bottles of regular soda and 14 bottles of diet soda. How many bottles did they have total?

- 4) A store has 39 shirts. Later they got in 33 more shirts. How many shirts does the store have now?

- 5) Gwen went to the movies 45 times last year and 39 times this year. How many times did Gwen go to the movies total?

- 6) At the zoo Haley took 48 pictures. If her sister took another 28 pictures, how many did they take total?

- 7) Jerry collected 28 cans to recycle on Monday and 46 more on Tuesday. How many cans did Jerry collect all together?

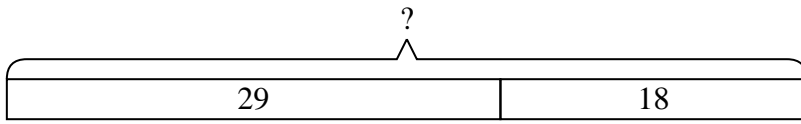
Answers

1. _____
2. _____
3. _____
4. _____
5. _____
6. _____
7. _____

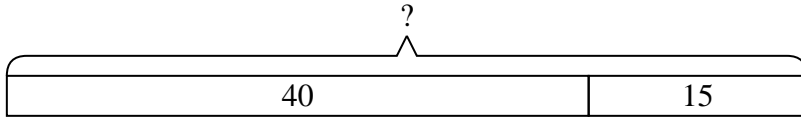


Solve each problem.

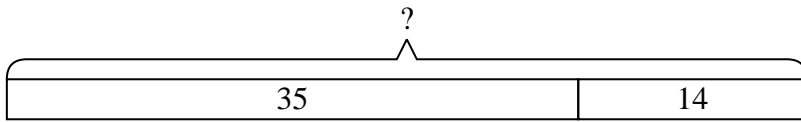
- 1) While exercising Paul did 29 push-ups in the morning and 18 more in the afternoon. How many push-ups did Paul do total?



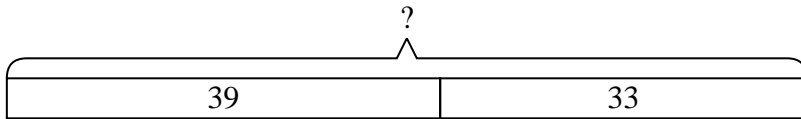
- 2) A baker already had 40 cakes but made 15 extra. How many cakes did the baker have total?



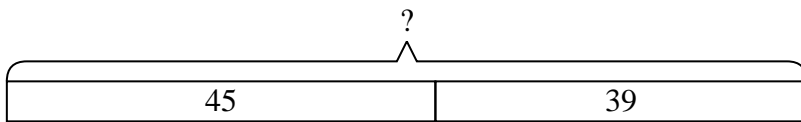
- 3) A grocery store had 35 bottles of regular soda and 14 bottles of diet soda. How many bottles did they have total?



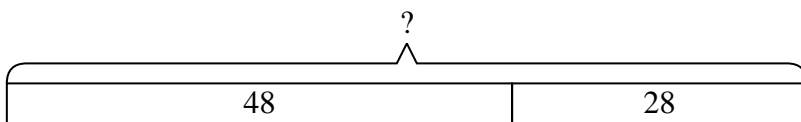
- 4) A store has 39 shirts. Later they got in 33 more shirts. How many shirts does the store have now?



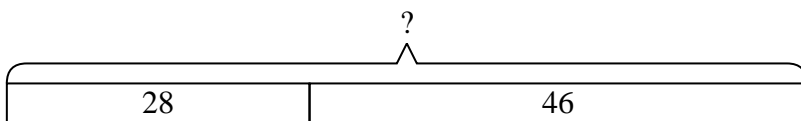
- 5) Gwen went to the movies 45 times last year and 39 times this year. How many times did Gwen go to the movies total?



- 6) At the zoo Haley took 48 pictures. If her sister took another 28 pictures, how many did they take total?



- 7) Jerry collected 28 cans to recycle on Monday and 46 more on Tuesday. How many cans did Jerry collect all together?



Answers

1. 47
2. 55
3. 49
4. 72
5. 84
6. 76
7. 74