



Match each table with the appropriate graph.

1)

Team	Pies Eaten
Alpha	
Beta	
Delta	
Gamma	
Zeta	

2)

Team	Pies Eaten
Alpha	
Beta	
Delta	
Gamma	
Zeta	

3)

Team	Pies Eaten
Alpha	
Beta	
Delta	
Gamma	
Zeta	

4)

Team	Pies Eaten
Alpha	
Beta	
Delta	
Gamma	
Zeta	

5)







Team	Pies Eaten
Alpha	
Beta	
Delta	
Gamma	
Zeta	

6)

Team	Pies Eaten
Alpha	
Beta	
Delta	
Gamma	
Zeta	

Answers

1. _____
2. _____
3. _____
4. _____
5. _____
6. _____





Match each table with the appropriate graph.

1)

Team	Pies Eaten
Alpha	
Beta	
Delta	
Gamma	
Zeta	

2)

Team	Pies Eaten
Alpha	
Beta	
Delta	
Gamma	
Zeta	

3)

Team	Pies Eaten
Alpha	
Beta	
Delta	
Gamma	
Zeta	

4)

Team	Pies Eaten
Alpha	
Beta	
Delta	
Gamma	
Zeta	

5)

Team	Pies Eaten
Alpha	
Beta	
Delta	
Gamma	
Zeta	

6)

Team	Pies Eaten
Alpha	
Beta	
Delta	
Gamma	
Zeta	

Answers

- F**
- B**
- C**
- A**
- E**
- D**

