



Match each table with the appropriate graph.

**Answers**

1)

Game	Home Runs
Game 1	
Game 2	
Game 3	
Game 4	
Game 5	

2)

Game	Home Runs
Game 1	
Game 2	
Game 3	
Game 4	
Game 5	

3)

Game	Home Runs
Game 1	
Game 2	
Game 3	
Game 4	
Game 5	

4)

Game	Home Runs
Game 1	
Game 2	
Game 3	
Game 4	
Game 5	


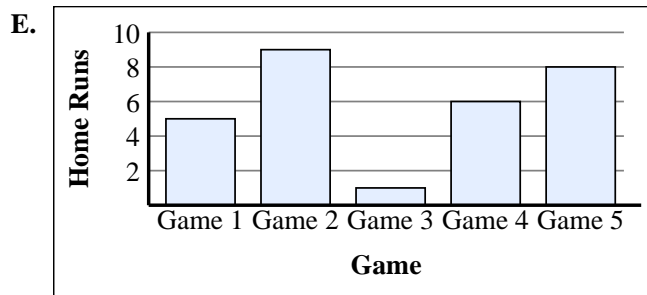
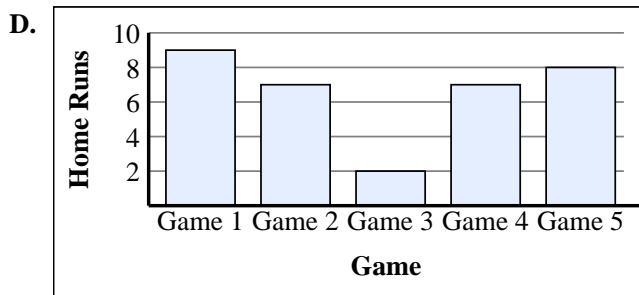
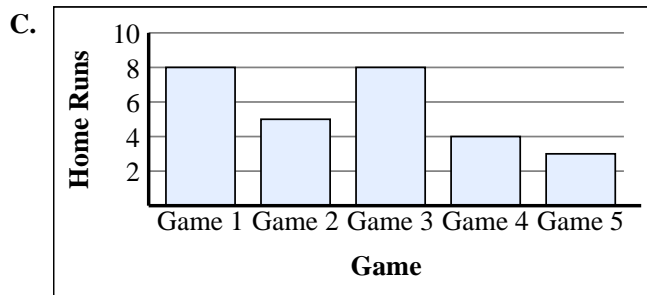
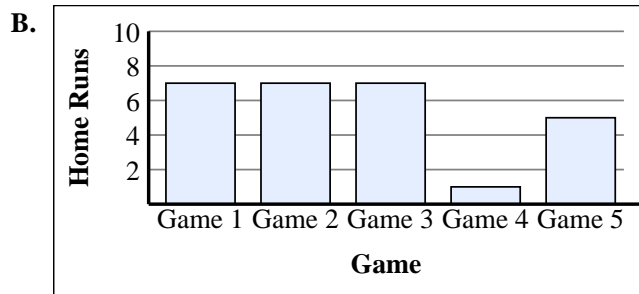
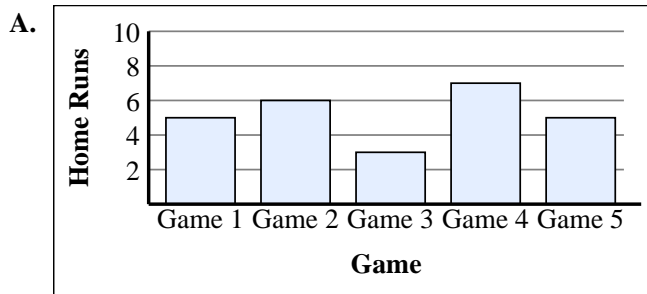
5)

Game	Home Runs
Game 1	
Game 2	
Game 3	
Game 4	
Game 5	

6)

Game	Home Runs
Game 1	
Game 2	
Game 3	
Game 4	
Game 5	

1. \_\_\_\_\_
2. \_\_\_\_\_
3. \_\_\_\_\_
4. \_\_\_\_\_
5. \_\_\_\_\_
6. \_\_\_\_\_





Match each table with the appropriate graph.

1)

Game	Home Runs
Game 1	
Game 2	
Game 3	
Game 4	
Game 5	

2)

Game	Home Runs
Game 1	
Game 2	
Game 3	
Game 4	
Game 5	

3)

Game	Home Runs
Game 1	
Game 2	
Game 3	
Game 4	
Game 5	

4)

Game	Home Runs
Game 1	
Game 2	
Game 3	
Game 4	
Game 5	

5)

Game	Home Runs
Game 1	
Game 2	
Game 3	
Game 4	
Game 5	

6)

Game	Home Runs
Game 1	
Game 2	
Game 3	
Game 4	
Game 5	

Answers

1.     **C**
2.     **A**
3.     **F**
4.     **D**
5.     **B**
6.     **E**

