



Determine the value of each set of tally marks.









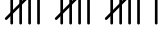
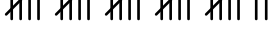
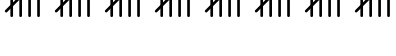
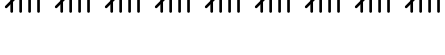
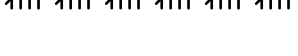





Answers

- 1) 1. _____
- 2) 2. _____
- 3) 3. _____
- 4) 4. _____
- 5) 5. _____
- 6) 6. _____
- 7) 7. _____
- 8) 8. _____
- 9) 9. _____
- 10) 10. _____
- 11) 11. _____
- 12) 12. _____
- 13) 13. _____
- 14) 14. _____
- 15) 15. _____
- 16) 16. _____
- 17) 17. _____
- 18) 18. _____



Determine the value of each set of tally marks.

Answers

- | | |
|---|---------------|
| 1)  | 1. <u>14</u> |
| 2)  | 2. <u>36</u> |
| 3)  | 3. <u>33</u> |
| 4)  | 4. <u>32</u> |
| 5)  | 5. <u>12</u> |
| 6)  | 6. <u>13</u> |
| 7)  | 7. <u>34</u> |
| 8)  | 8. <u>35</u> |
| 9)  | 9. <u>16</u> |
| 10)  | 10. <u>27</u> |
| 11)  | 11. <u>40</u> |
| 12)  | 12. <u>45</u> |
| 13)  | 13. <u>30</u> |
| 14)  | 14. <u>19</u> |
| 15)  | 15. <u>18</u> |
| 16)  | 16. <u>20</u> |
| 17)  | 17. <u>11</u> |
| 18)  | 18. <u>25</u> |