




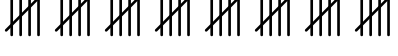
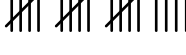
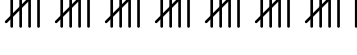
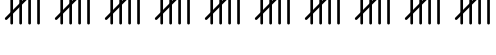
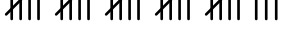
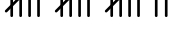
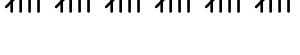


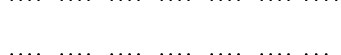







Determine the value of each set of tally marks.











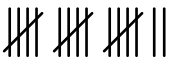







Answers

- 1)  1. _____
- 2)  2. _____
- 3)  3. _____
- 4)  4. _____
- 5)  5. _____
- 6)  6. _____
- 7)  7. _____
- 8)  8. _____
- 9)  9. _____
- 10)  10. _____
- 11)  11. _____
- 12)  12. _____
- 13)  13. _____
- 14)  14. _____
- 15)  15. _____
- 16)  16. _____
- 17)  17. _____
- 18)  18. _____



Determine the value of each set of tally marks.

Answers

- | | |
|---|---------------|
| 1)  | 1. <u>20</u> |
| 2)  | 2. <u>15</u> |
| 3)  | 3. <u>25</u> |
| 4)  | 4. <u>39</u> |
| 5)  | 5. <u>38</u> |
| 6)  | 6. <u>40</u> |
| 7)  | 7. <u>19</u> |
| 8)  | 8. <u>36</u> |
| 9)  | 9. <u>50</u> |
| 10)  | 10. <u>28</u> |
| 11)  | 11. <u>17</u> |
| 12)  | 12. <u>30</u> |
| 13)  | 13. <u>23</u> |
| 14)  | 14. <u>29</u> |
| 15)  | 15. <u>34</u> |
| 16)  | 16. <u>33</u> |
| 17)  | 17. <u>27</u> |
| 18)  | 18. <u>43</u> |