



Use the visual model to solve each problem.

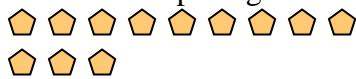
- 1) There are 9 squares below.



If you were to take away 4, how many would be left?

$9 - 4 = ?$

- 2) There are 12 pentagons below.



If you were to take away 4, how many would be left?

$12 - 4 = ?$

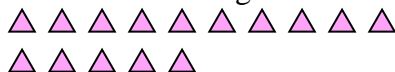
- 3) There are 10 rectangles below.



If you were to take away 9, how many would be left?

$10 - 9 = ?$

- 4) There are 15 triangles below.



If you were to take away 5, how many would be left?

$15 - 5 = ?$

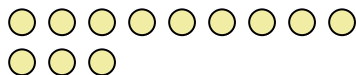
- 5) There are 15 stars below.



If you were to take away 8, how many would be left?

$15 - 8 = ?$

- 6) There are 12 circles below.



If you were to take away 10, how many would be left?

$12 - 10 = ?$

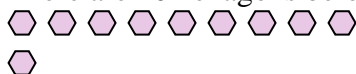
- 7) There are 4 pentagons below.



If you were to take away 3, how many would be left?

$4 - 3 = ?$

- 8) There are 10 hexagons below.



If you were to take away 4, how many would be left?

$10 - 4 = ?$

- 9) There are 18 triangles below.



If you were to take away 12, how many would be left?

$18 - 12 = ?$

- 10) There are 4 stars below.



If you were to take away 1, how many would be left?

$4 - 1 = ?$

Answers

1. _____

2. _____

3. _____

4. _____

5. _____

6. _____

7. _____

8. _____

9. _____

10. _____



Use the visual model to solve each problem.

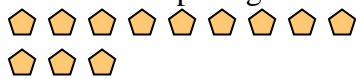
- 1) There are 9 squares below.



If you were to take away 4, how many would be left?

$9 - 4 = ?$

- 2) There are 12 pentagons below.



If you were to take away 4, how many would be left?

$12 - 4 = ?$

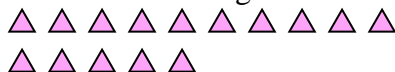
- 3) There are 10 rectangles below.



If you were to take away 9, how many would be left?

$10 - 9 = ?$

- 4) There are 15 triangles below.



If you were to take away 5, how many would be left?

$15 - 5 = ?$

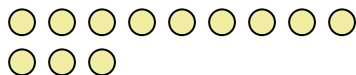
- 5) There are 15 stars below.



If you were to take away 8, how many would be left?

$15 - 8 = ?$

- 6) There are 12 circles below.



If you were to take away 10, how many would be left?

$12 - 10 = ?$

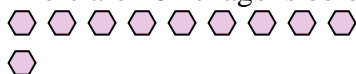
- 7) There are 4 pentagons below.



If you were to take away 3, how many would be left?

$4 - 3 = ?$

- 8) There are 10 hexagons below.



If you were to take away 4, how many would be left?

$10 - 4 = ?$

- 9) There are 18 triangles below.



If you were to take away 12, how many would be left?

$18 - 12 = ?$

- 10) There are 4 stars below.



If you were to take away 1, how many would be left?

$4 - 1 = ?$

Answers1. 52. 83. 14. 105. 76. 27. 18. 69. 610. 3