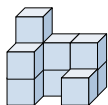







Solve each problem.

Answers

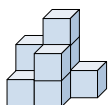
1) If you were looking at the 3d shape from the right side what would you see?






- A. 
- B. 
- C. 

1. _____

2) If you were looking at the 3d shape from the back what would you see?



- A. 
- B. 
- C. 

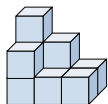
2. _____




3. _____

4. _____

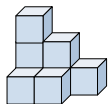
5. _____




3) If you were looking at the 3d shape from the right side what would you see?



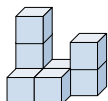
- A. 
- B. 
- C. 




4) If you were looking at the 3d shape from the back what would you see?



- A. 
- B. 
- C. 

5) If you were looking at the 3d shape from the back what would you see?

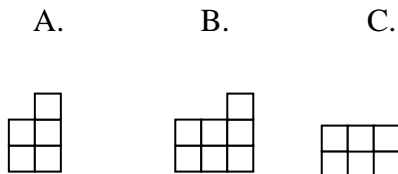
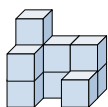


- A. 
- B. 
- C. 

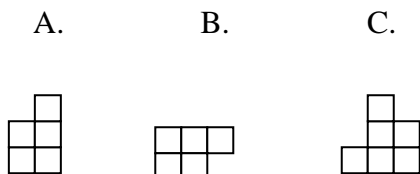
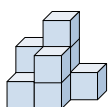


Solve each problem.

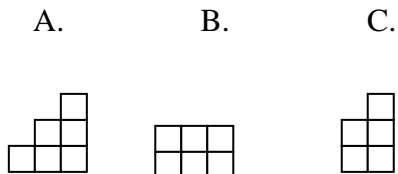
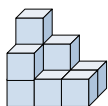
- 1) If you were looking at the 3d shape from the right side what would you see?



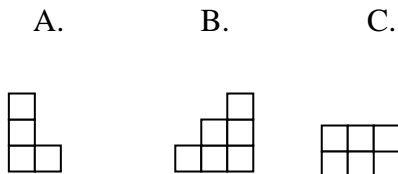
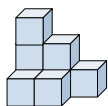
- 2) If you were looking at the 3d shape from the back what would you see?



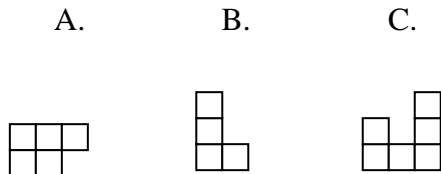
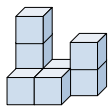
- 3) If you were looking at the 3d shape from the right side what would you see?



- 4) If you were looking at the 3d shape from the back what would you see?



- 5) If you were looking at the 3d shape from the back what would you see?



Answers

1. **A**

2. **C**

3. **C**

4. **B**

5. **C**