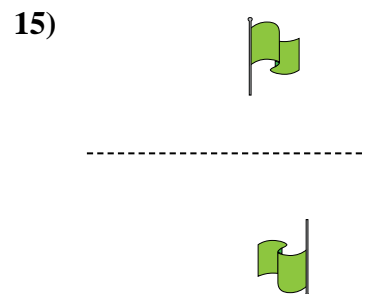
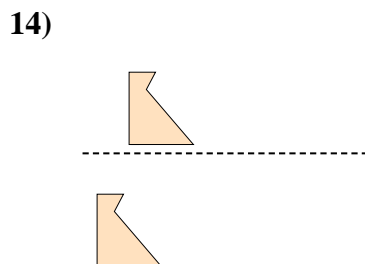
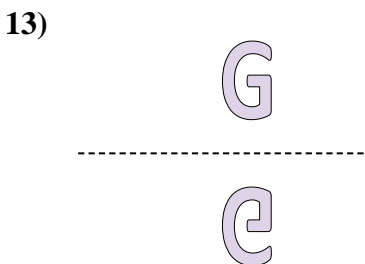
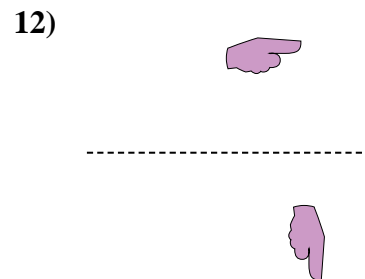
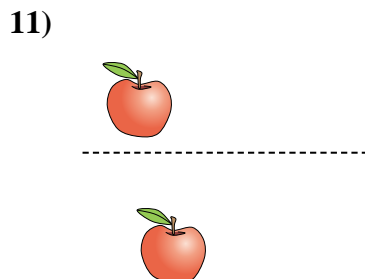
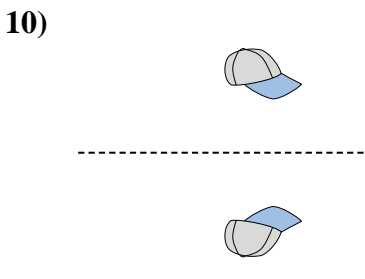
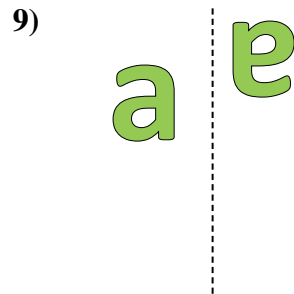
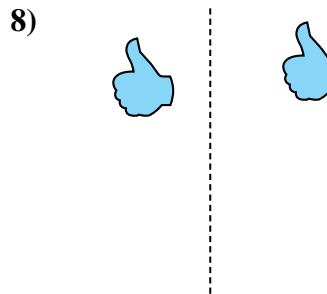
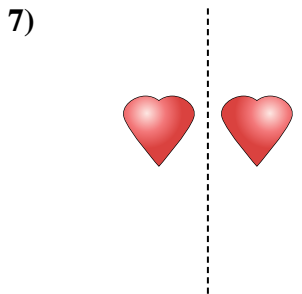
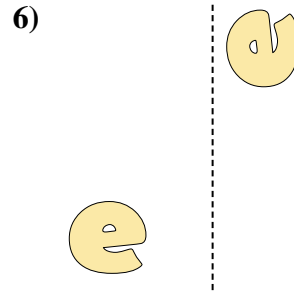
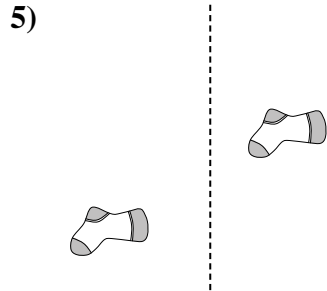
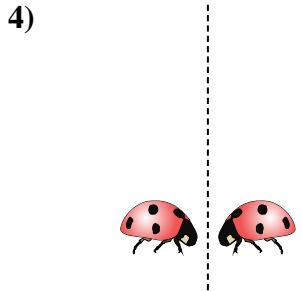
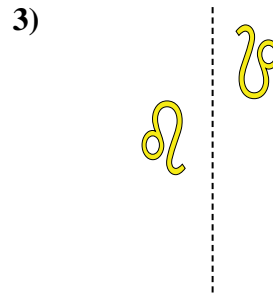
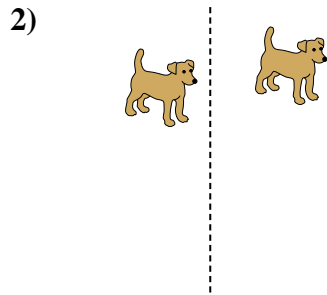
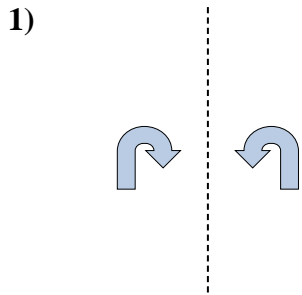




Determine if the shape is translating (slide), rotating (turn) or reflecting (flip).

Answers

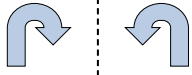


1. _____
2. _____
3. _____
4. _____
5. _____
6. _____
7. _____
8. _____
9. _____
10. _____
11. _____
12. _____
13. _____
14. _____
15. _____




Determine if the shape is translating (slide), rotating (turn) or reflecting (flip).

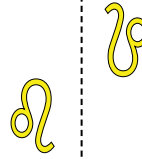
1)



2)



3)



Answers

1. **reflecting**

2. **translating**

3. **rotating**

4. **reflecting**

5. **translating**

6. **rotating**

7. **reflecting**

8. **translating**

9. **rotating**

10. **reflecting**

11. **translating**

12. **rotating**

13. **reflecting**

14. **translating**

15. **rotating**

4)



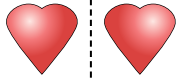
5)



6)



7)



8)



9)



10)



11)



12)



13)



14)



15)

