




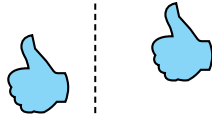
Determine if the shape is translating (slide), rotating (turn) or reflecting (flip).

Answers


1)



2)



3)




1. _____

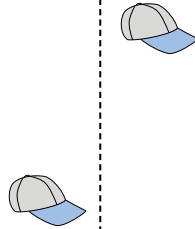
2. _____

3. _____

4)



5)



6)



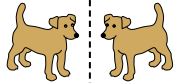
4. _____

5. _____


6. _____

7. _____

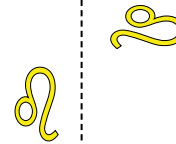
7)



8)



9)



8. _____

9. _____

10. _____

11. _____

10)



11)



12)



12. _____

13. _____

14. _____

15. _____



13)



14)



15)



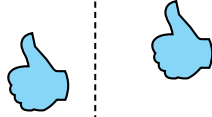


Determine if the shape is translating (slide), rotating (turn) or reflecting (flip).


1)



2)



3)



Answers

1. **reflecting**

2. **translating**

3. **rotating**

4. **reflecting**

5. **translating**

6. **rotating**

7. **reflecting**

8. **translating**

9. **rotating**

10. **reflecting**

11. **translating**


12. **rotating**

13. **reflecting**

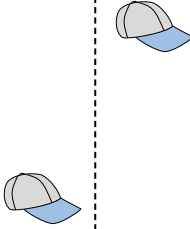
14. **translating**

15. **rotating**

4)



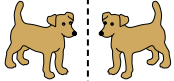
5)




6)



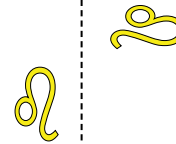
7)



8)



9)



10)



11)



12)



13)



14)



15)

