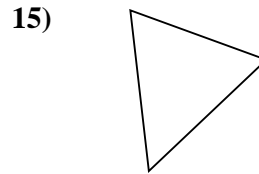
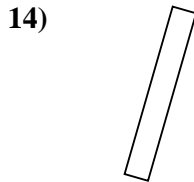
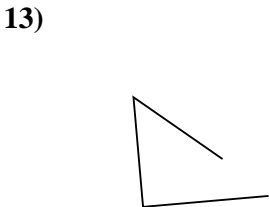
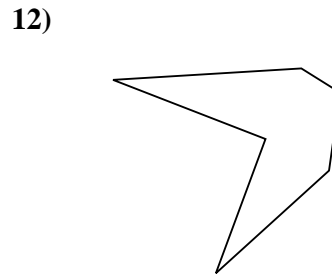
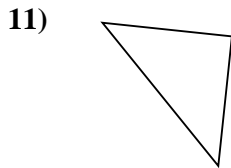
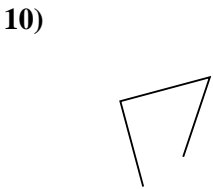
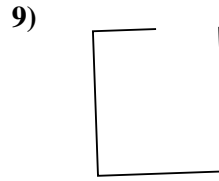
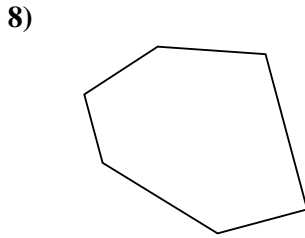
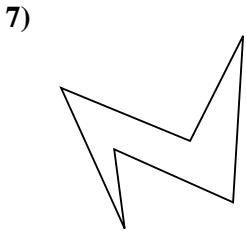
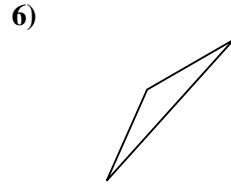
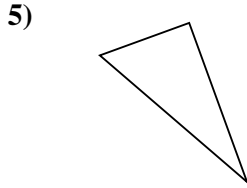
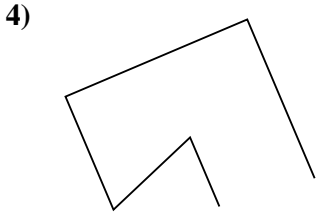
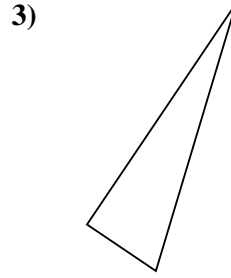
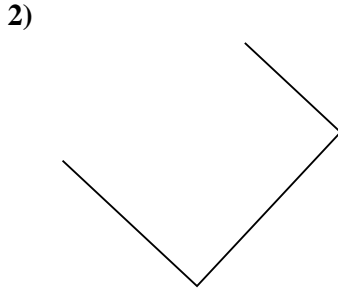
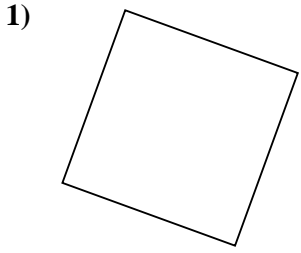




Determine if the figure shown is a 'Triangle', 'Square', 'Rectangle', 'Hexagon' or 'Other'.

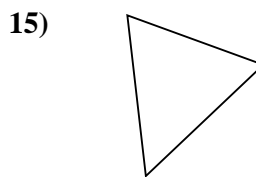
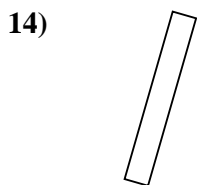
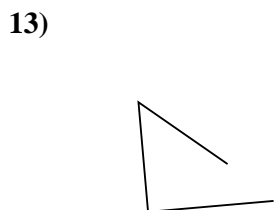
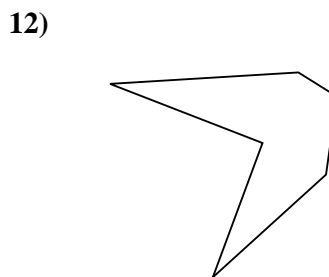
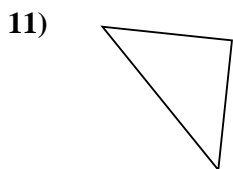
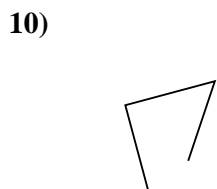
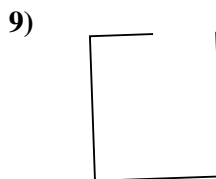
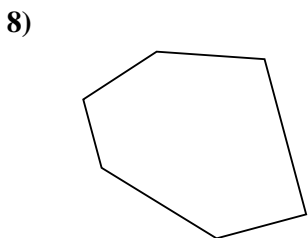
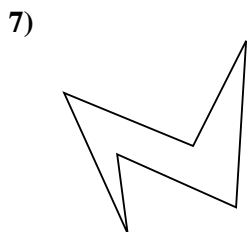
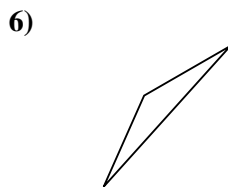
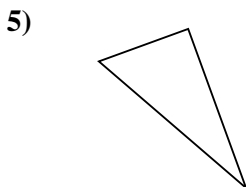
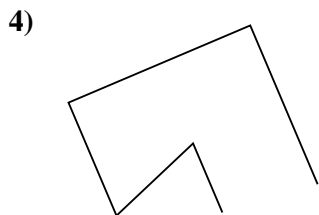
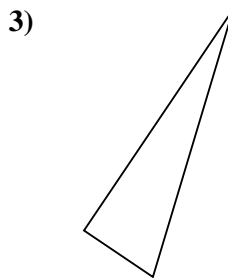
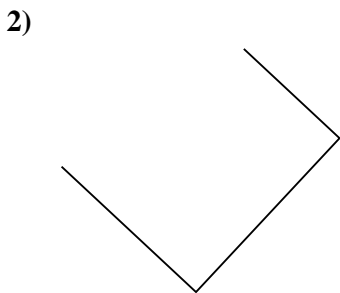
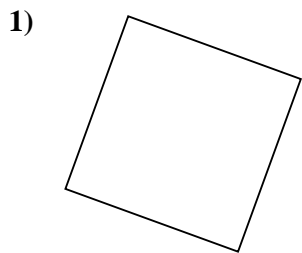
Answers



- 1. _____
- 2. _____
- 3. _____
- 4. _____
- 5. _____
- 6. _____
- 7. _____
- 8. _____
- 9. _____
- 10. _____
- 11. _____
- 12. _____
- 13. _____
- 14. _____
- 15. _____



Determine if the figure shown is a 'Triangle', 'Square', 'Rectangle', 'Hexagon' or 'Other'.



Answers

1. **Square**

2. **Other**

3. **Triangle**

4. **Other**

5. **Triangle**

6. **Triangle**

7. **Hexagon**

8. **Hexagon**

9. **Other**

10. **Other**

11. **Triangle**

12. **Hexagon**

13. **Other**

14. **Rectangle**

15. **Triangle**