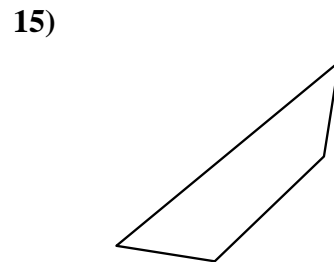
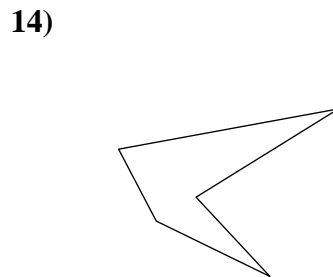
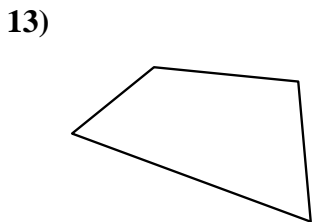

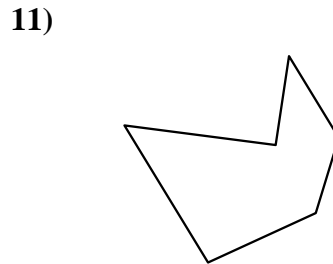
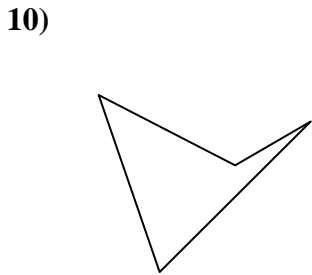
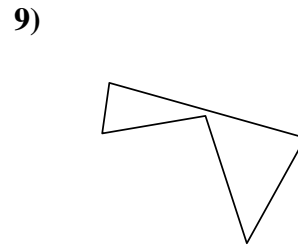
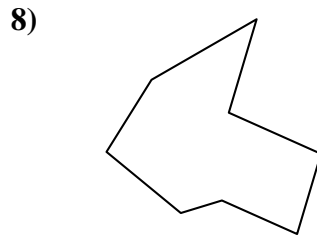
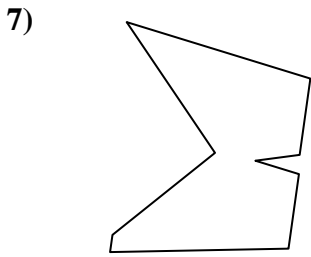
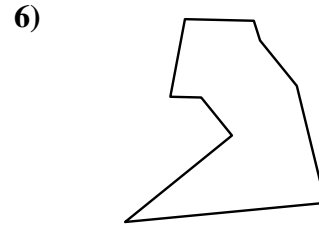
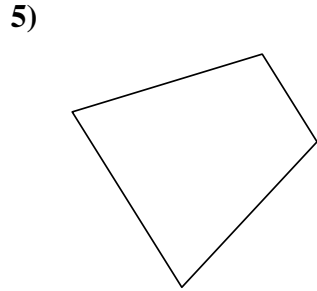
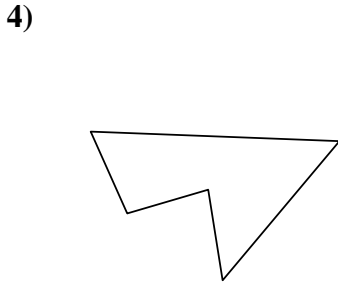
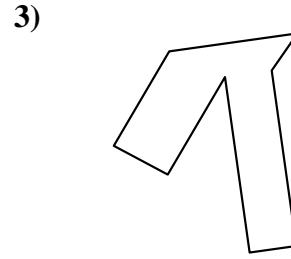
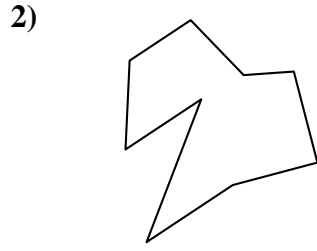
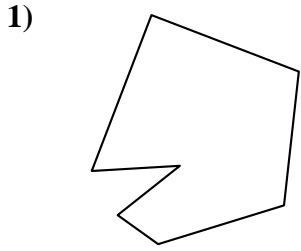




Identify the type of shape shown.

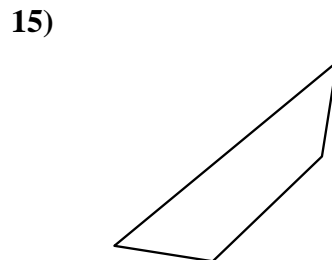
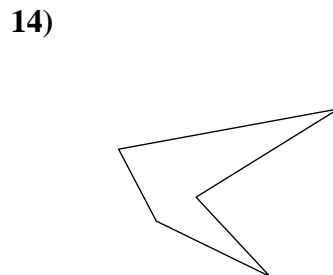
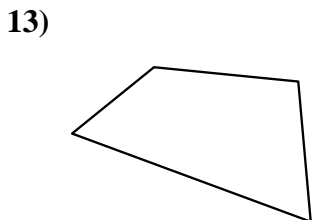

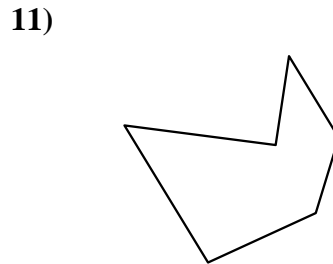
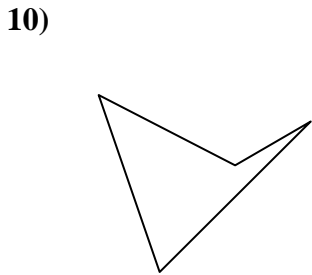
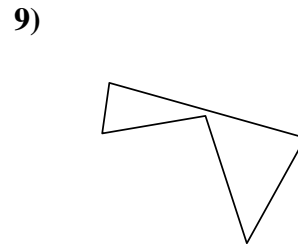
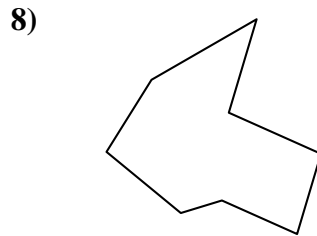
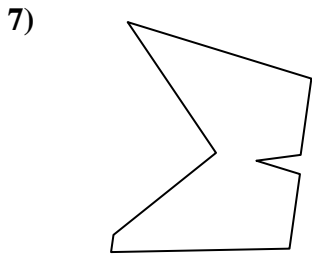
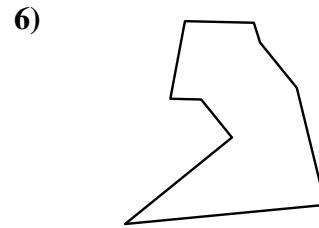
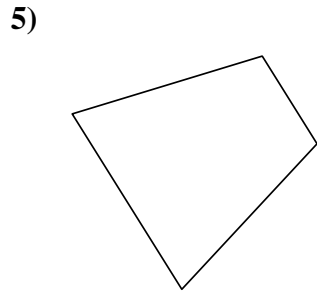
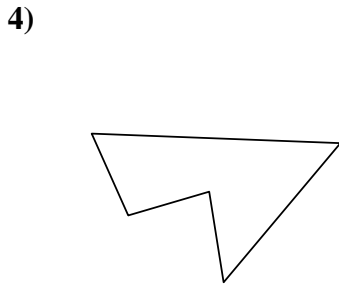
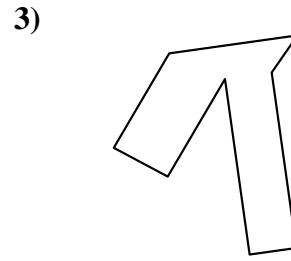
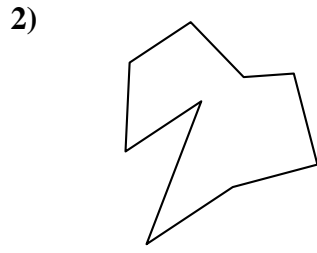
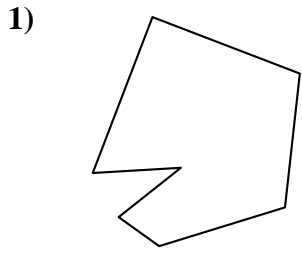
Answers



- 1. \_\_\_\_\_
- 2. \_\_\_\_\_
- 3. \_\_\_\_\_
- 4. \_\_\_\_\_
- 5. \_\_\_\_\_
- 6. \_\_\_\_\_
- 7. \_\_\_\_\_
- 8. \_\_\_\_\_
- 9. \_\_\_\_\_
- 10. \_\_\_\_\_
- 11. \_\_\_\_\_
- 12. \_\_\_\_\_
- 13. \_\_\_\_\_
- 14. \_\_\_\_\_
- 15. \_\_\_\_\_



Identify the type of shape shown.



Answers

1. heptagon

2. nonagon

3. octagon

4. pentagon

5. quadrilateral

6. nonagon

7. nonagon

8. octagon

9. pentagon

10. quadrilateral

11. hexagon

12. quadrilateral

13. quadrilateral

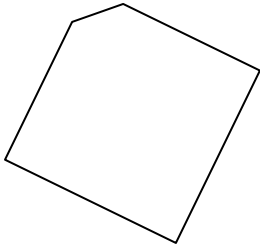
14. pentagon

15. quadrilateral

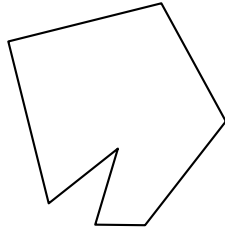


Identify the type of shape shown.


1)



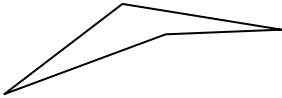
2)



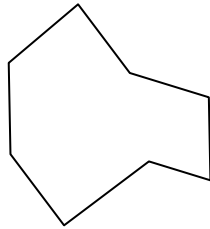
3)



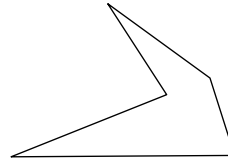
4)




5)



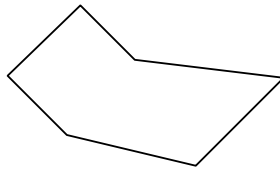
6)



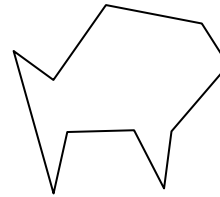
7)




8)



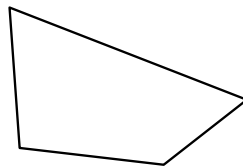
9)



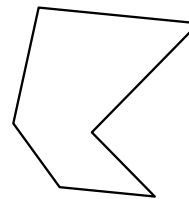
10)



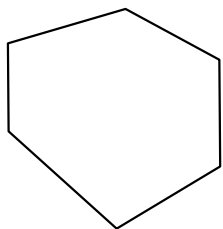
11)



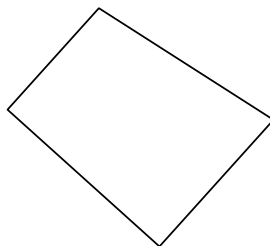
12)



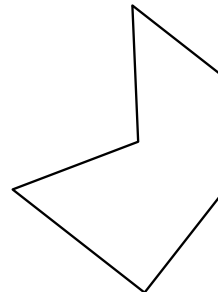
13)



14)



15)



Answers

1. \_\_\_\_\_

2. \_\_\_\_\_

3. \_\_\_\_\_

4. \_\_\_\_\_

5. \_\_\_\_\_

6. \_\_\_\_\_

7. \_\_\_\_\_

8. \_\_\_\_\_

9. \_\_\_\_\_

10. \_\_\_\_\_

11. \_\_\_\_\_

12. \_\_\_\_\_

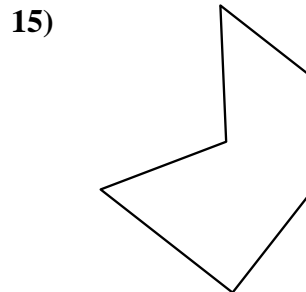
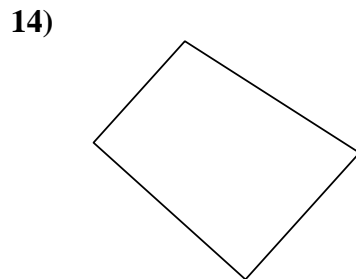
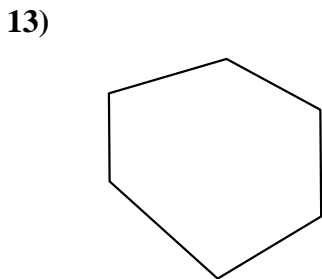
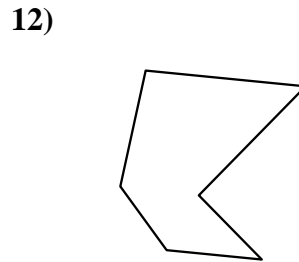
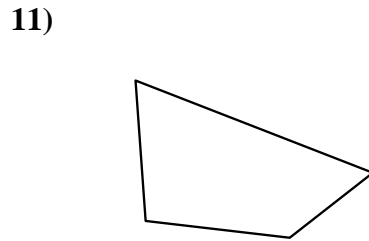
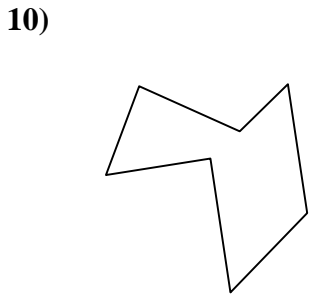
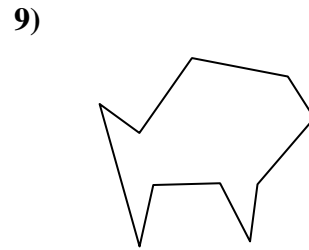
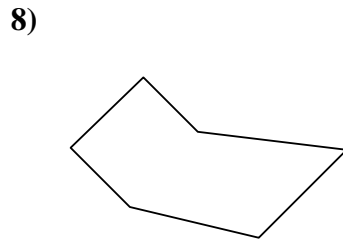
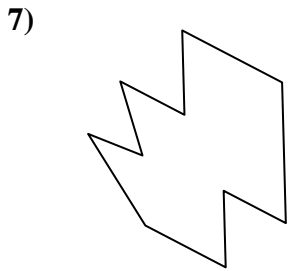
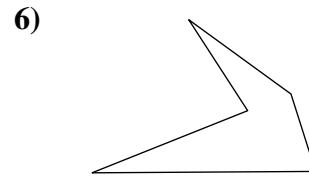
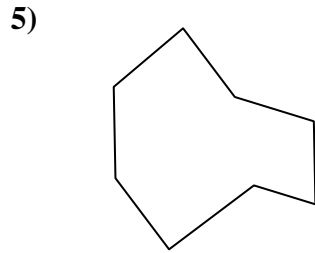
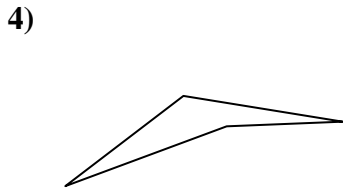
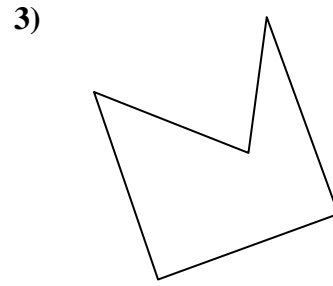
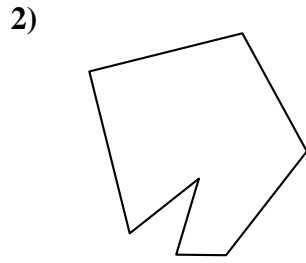
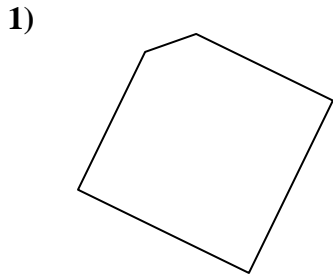
13. \_\_\_\_\_

14. \_\_\_\_\_

15. \_\_\_\_\_



Identify the type of shape shown.



Answers

1. pentagon

2. heptagon

3. pentagon

4. quadrilateral

5. octagon

6. pentagon

7. decagon

8. hexagon

9. decagon

10. heptagon

11. quadrilateral

12. hexagon

13. hexagon

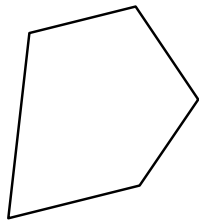
14. quadrilateral

15. hexagon

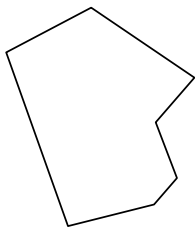


Identify the type of shape shown.


1)



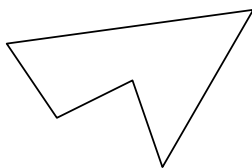
2)



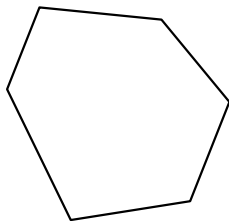
3)



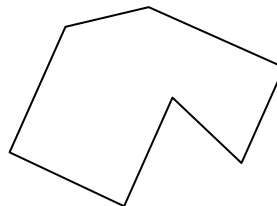
4)



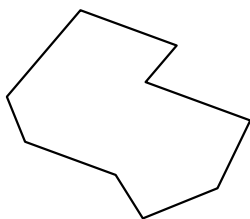
5)




6)



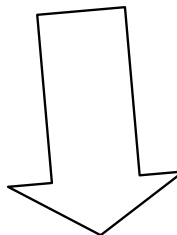
7)




8)



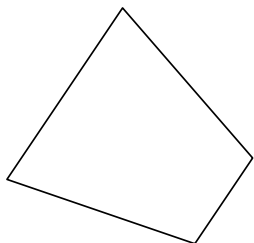
9)



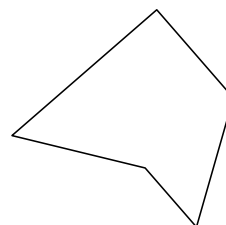
10)



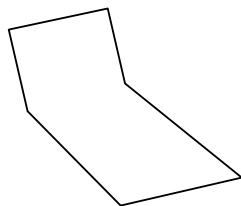
11)



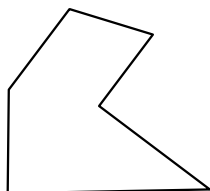
12)




13)



14)



15)



Answers

1. \_\_\_\_\_

2. \_\_\_\_\_

3. \_\_\_\_\_

4. \_\_\_\_\_

5. \_\_\_\_\_

6. \_\_\_\_\_

7. \_\_\_\_\_

8. \_\_\_\_\_

9. \_\_\_\_\_

10. \_\_\_\_\_

11. \_\_\_\_\_

12. \_\_\_\_\_

13. \_\_\_\_\_

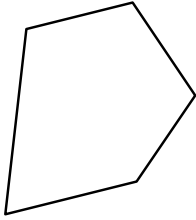
14. \_\_\_\_\_

15. \_\_\_\_\_

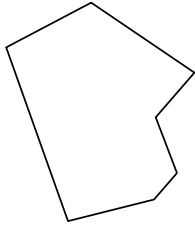


Identify the type of shape shown.


1)



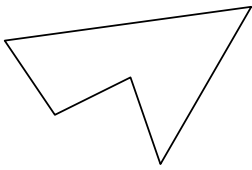
2)



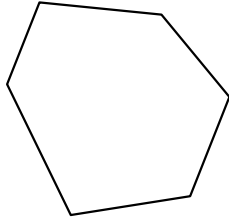
3)



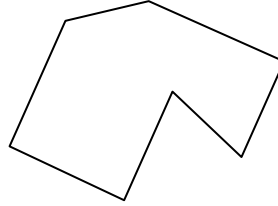
4)



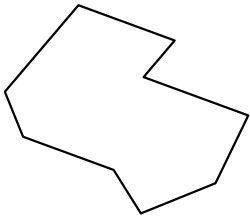
5)




6)



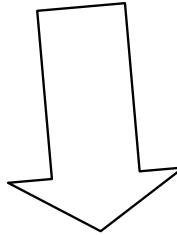
7)




8)



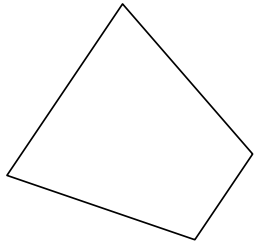
9)



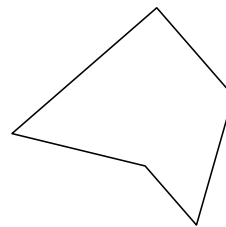
10)



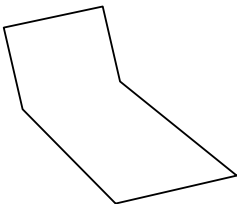
11)



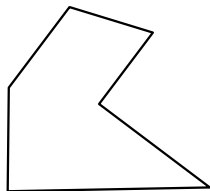
12)




13)



14)



15)



Answers

1. pentagon

2. heptagon

3. hexagon

4. pentagon

5. hexagon

6. heptagon

7. nonagon

8. decagon

9. heptagon

10. decagon

11. quadrilateral

12. pentagon

13. hexagon

14. hexagon

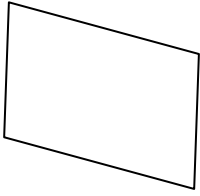
15. pentagon



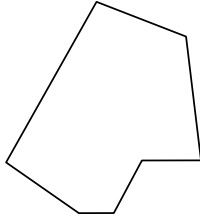
Identify the type of shape shown.

Answers


1)



2)



3)



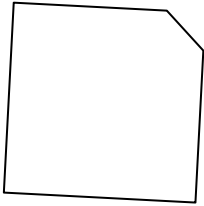
1. \_\_\_\_\_

2. \_\_\_\_\_


3. \_\_\_\_\_

4. \_\_\_\_\_

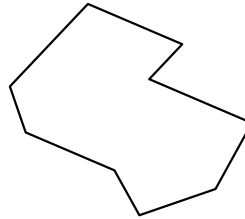
4)



5)



6)




5. \_\_\_\_\_

6. \_\_\_\_\_

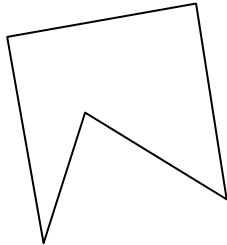
7. \_\_\_\_\_

8. \_\_\_\_\_

7)



8)



9)



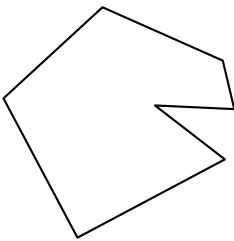
9. \_\_\_\_\_

10. \_\_\_\_\_


11. \_\_\_\_\_

12. \_\_\_\_\_


10)



11)



12)

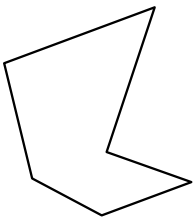


13. \_\_\_\_\_

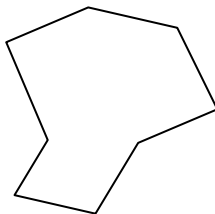
14. \_\_\_\_\_

15. \_\_\_\_\_


13)



14)


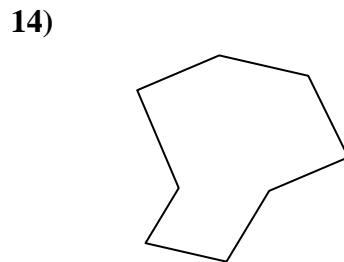
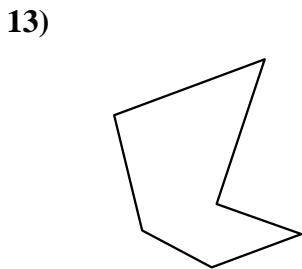
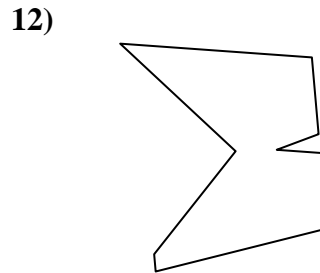
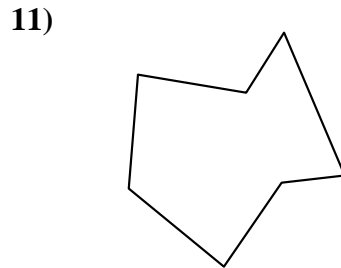
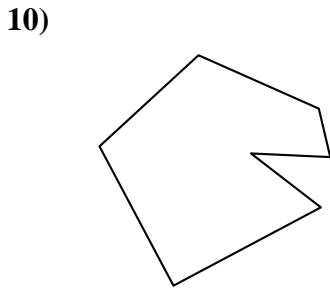
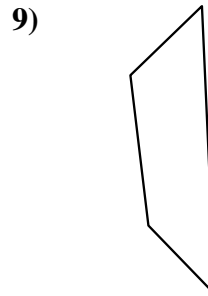
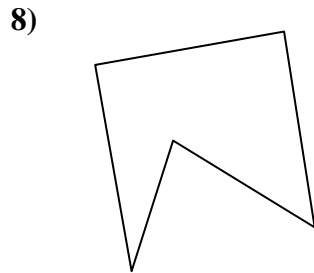

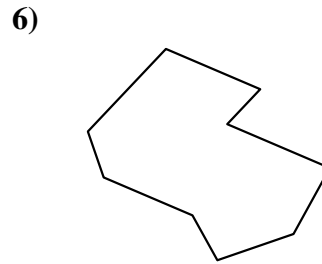
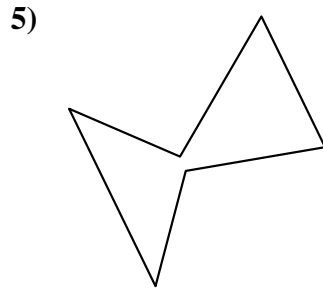
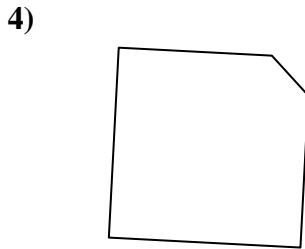
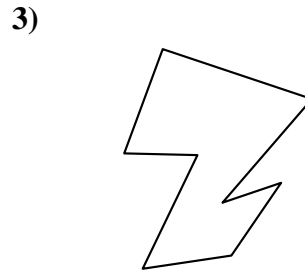
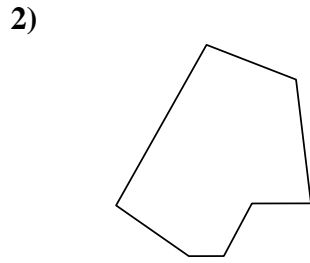
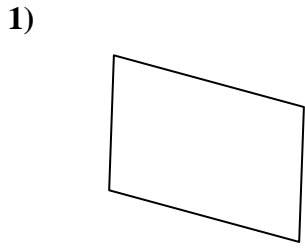


15)





Identify the type of shape shown.



Answers

1. quadrilateral

2. heptagon

3. octagon

4. pentagon

5. hexagon

6. nonagon

7. decagon

8. pentagon

9. quadrilateral

10. heptagon

11. heptagon

12. nonagon

13. hexagon

14. octagon

15. octagon

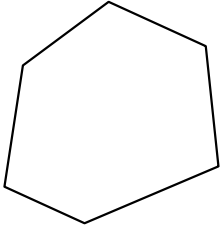




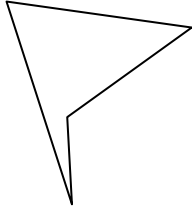
Identify the type of shape shown.

Answers

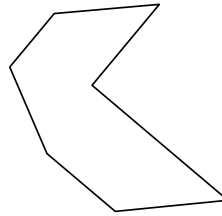
1)



2)



3)



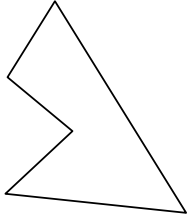
1. \_\_\_\_\_

2. \_\_\_\_\_

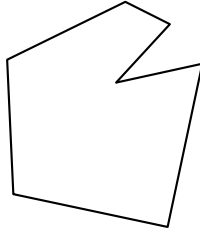
3. \_\_\_\_\_

4. \_\_\_\_\_

4)



5)



6)



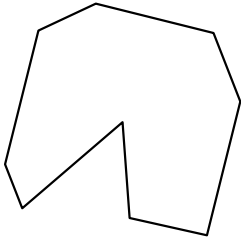
5. \_\_\_\_\_

6. \_\_\_\_\_

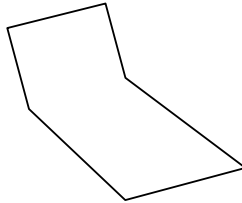
7. \_\_\_\_\_

8. \_\_\_\_\_

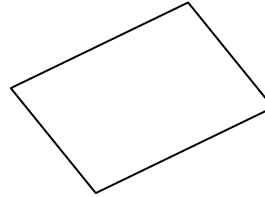
7)



8)



9)



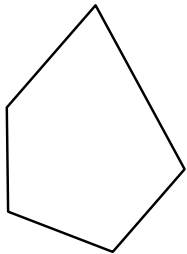
9. \_\_\_\_\_

10. \_\_\_\_\_

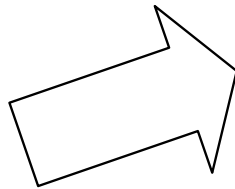
11. \_\_\_\_\_

12. \_\_\_\_\_


10)



11)



12)

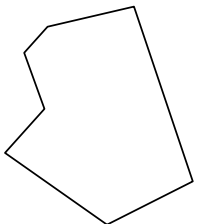


13. \_\_\_\_\_

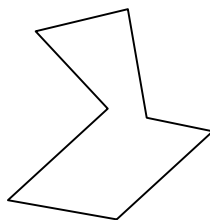
14. \_\_\_\_\_

15. \_\_\_\_\_

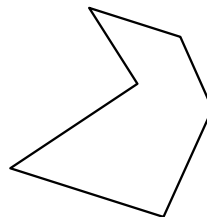
13)



14)



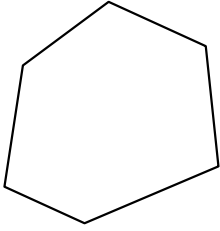
15)



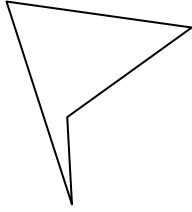


Identify the type of shape shown.

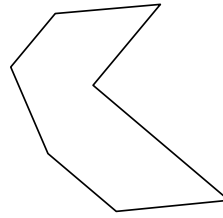
1)



2)



3)



Answers

1. hexagon

2. quadrilateral

3. heptagon

4. pentagon

5. heptagon

6. quadrilateral

7. nonagon

8. hexagon

9. quadrilateral

10. pentagon

11. heptagon

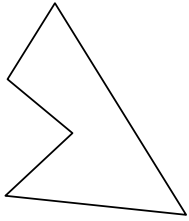
12. decagon

13. heptagon

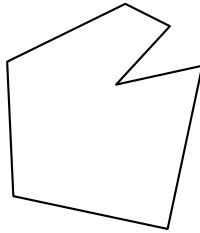
14. heptagon

15. hexagon

4)



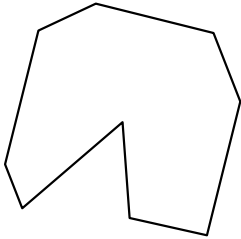
5)



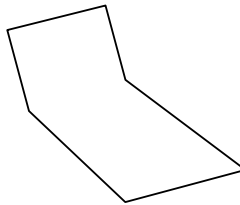
6)



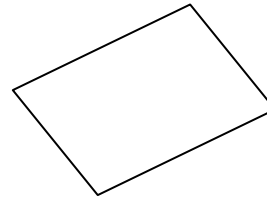
7)



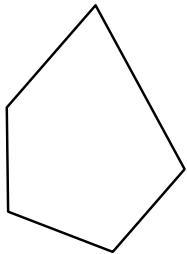
8)



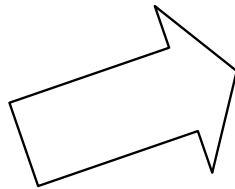
9)




10)



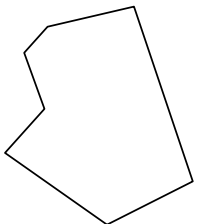
11)



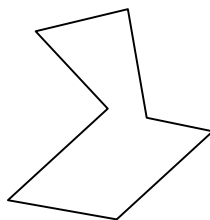
12)



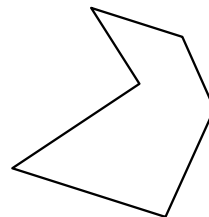
13)



14)



15)

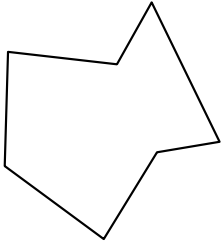




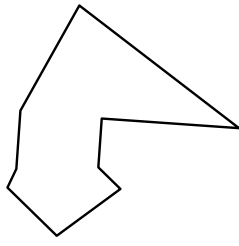
Identify the type of shape shown.

Answers

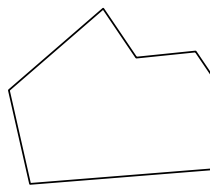
1)



2)



3)



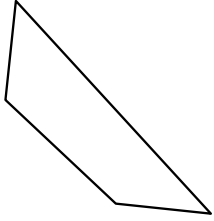
1. \_\_\_\_\_

2. \_\_\_\_\_

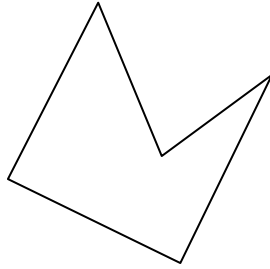
3. \_\_\_\_\_

4. \_\_\_\_\_

4)



5)



6)



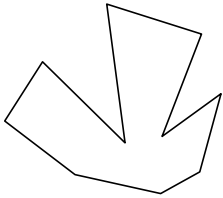
5. \_\_\_\_\_

6. \_\_\_\_\_


7. \_\_\_\_\_

8. \_\_\_\_\_

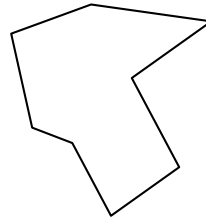
7)



8)



9)



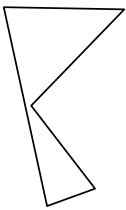
9. \_\_\_\_\_

10. \_\_\_\_\_

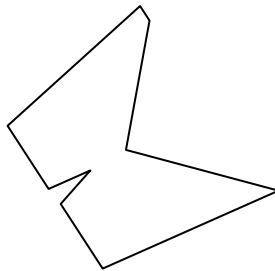
11. \_\_\_\_\_

12. \_\_\_\_\_

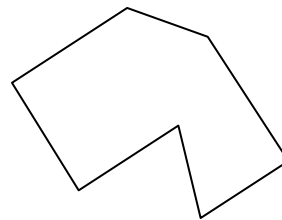
10)



11)



12)

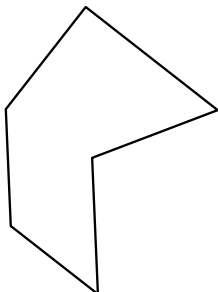


13. \_\_\_\_\_

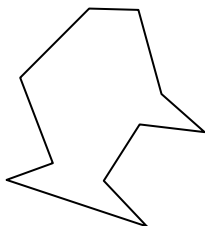
14. \_\_\_\_\_

15. \_\_\_\_\_

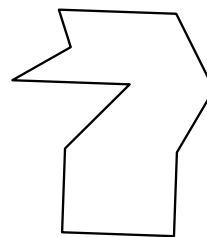
13)



14)

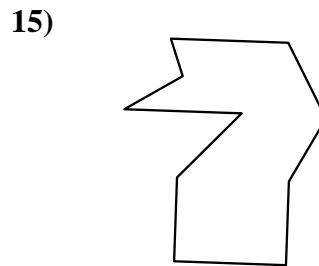
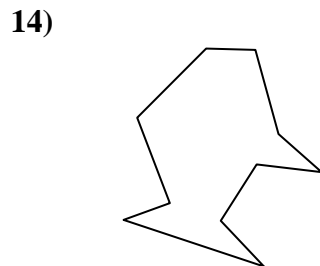
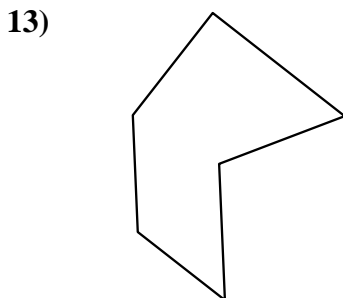
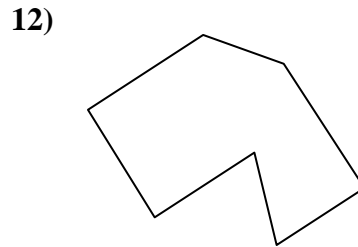
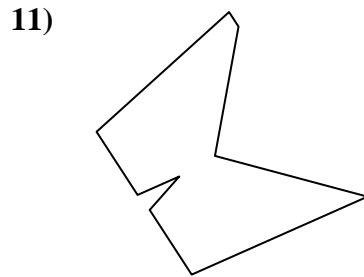
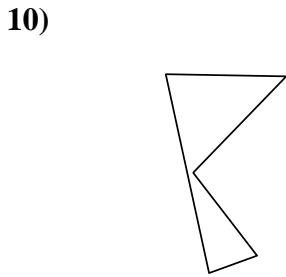
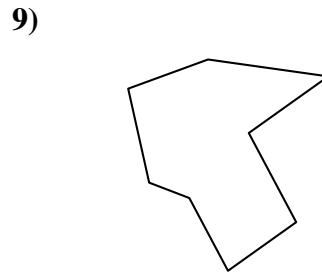
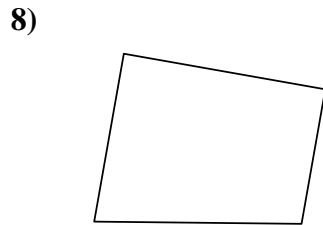
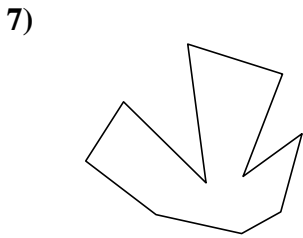
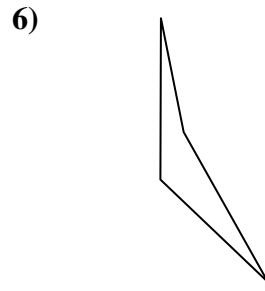
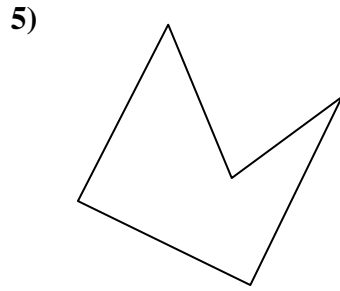
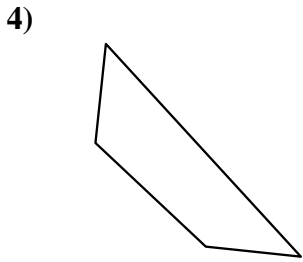
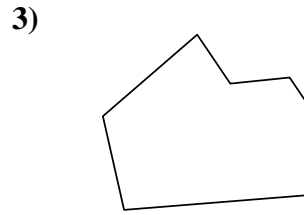
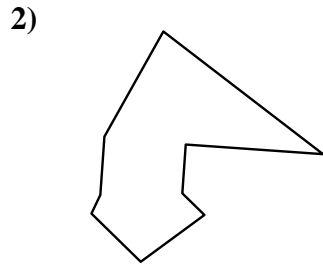
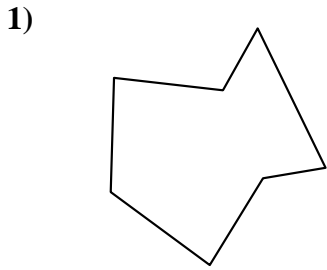


15)





Identify the type of shape shown.



Answers

1. heptagon

2. nonagon

3. heptagon

4. quadrilateral

5. pentagon

6. quadrilateral

7. decagon

8. quadrilateral

9. octagon

10. pentagon

11. nonagon

12. heptagon

13. hexagon

14. decagon

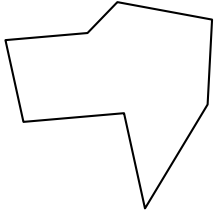
15. decagon



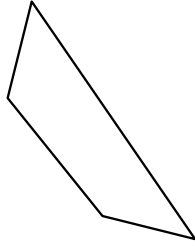
Identify the type of shape shown.

Answers

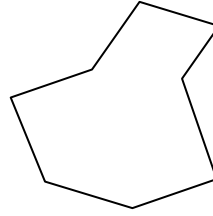
1)



2)



3)



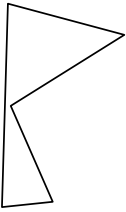
1. \_\_\_\_\_

2. \_\_\_\_\_

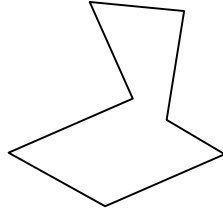
3. \_\_\_\_\_

4. \_\_\_\_\_

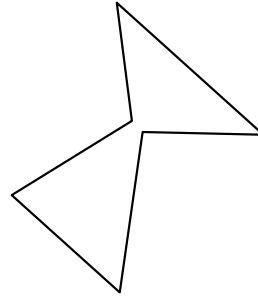
4)



5)



6)




5. \_\_\_\_\_

6. \_\_\_\_\_

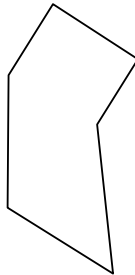
7. \_\_\_\_\_

8. \_\_\_\_\_

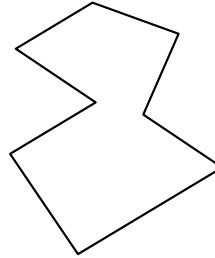
7)



8)



9)



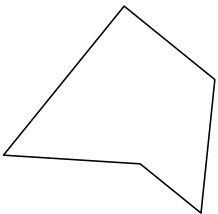
9. \_\_\_\_\_

10. \_\_\_\_\_

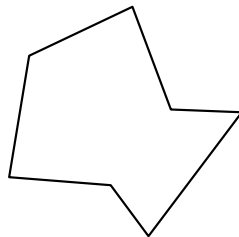
11. \_\_\_\_\_

12. \_\_\_\_\_

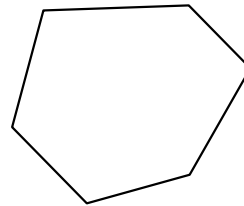
10)



11)



12)

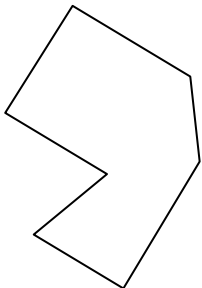


13. \_\_\_\_\_

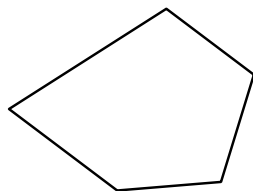
14. \_\_\_\_\_

15. \_\_\_\_\_

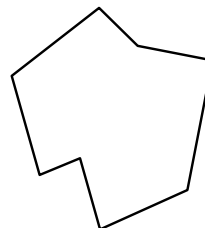
13)



14)

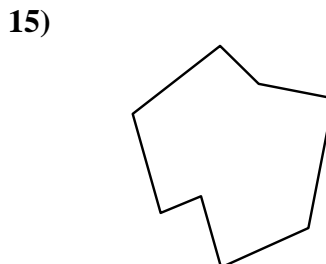
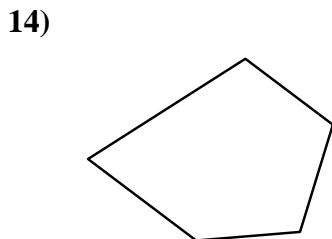
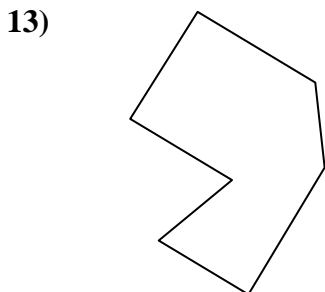
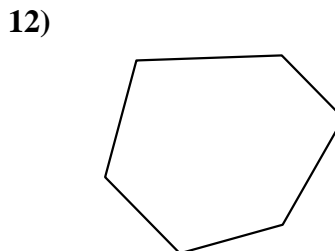
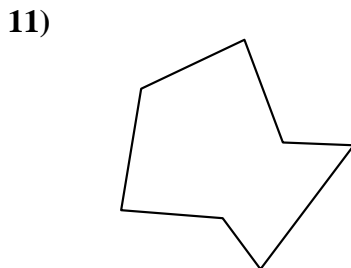
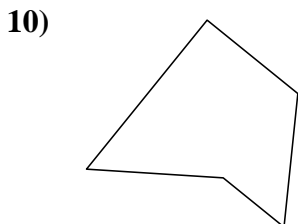
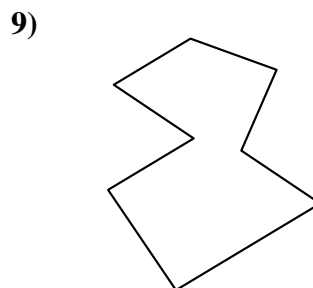
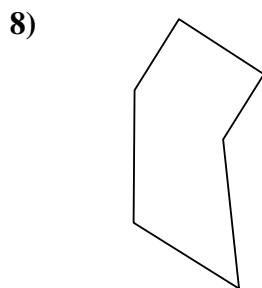

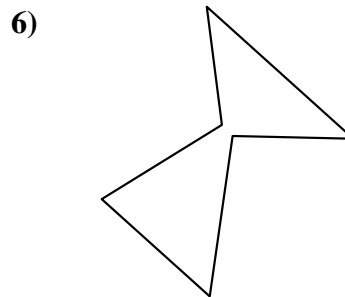
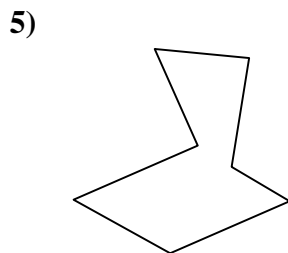
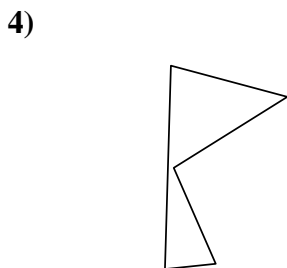
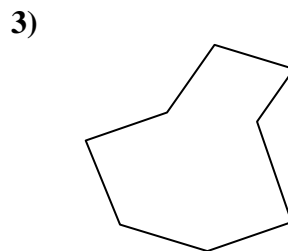
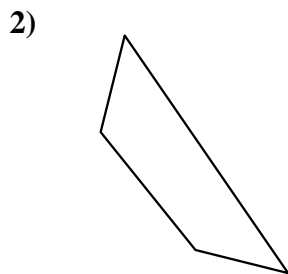
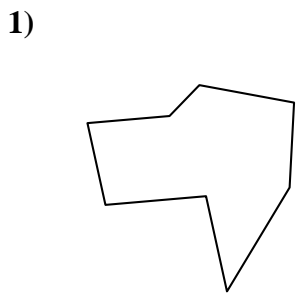


15)





Identify the type of shape shown.



Answers

1. octagon

2. quadrilateral

3. octagon

4. pentagon

5. heptagon

6. hexagon

7. quadrilateral

8. hexagon

9. octagon

10. pentagon

11. heptagon

12. hexagon

13. heptagon

14. pentagon

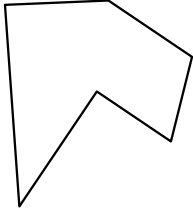
15. octagon



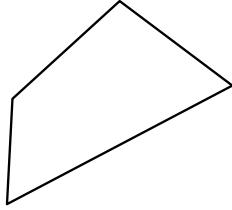
Identify the type of shape shown.

Answers

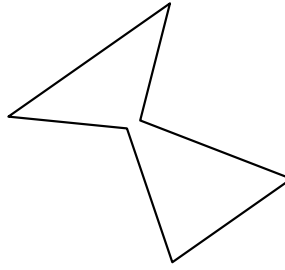
1)



2)



3)



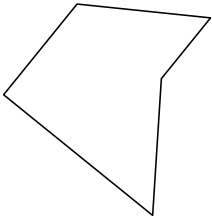
1. \_\_\_\_\_

2. \_\_\_\_\_


3. \_\_\_\_\_

4. \_\_\_\_\_

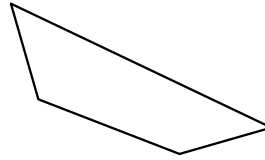
4)



5)



6)



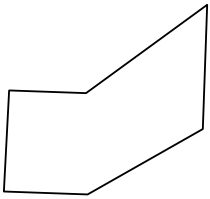
5. \_\_\_\_\_

6. \_\_\_\_\_

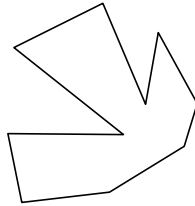
7. \_\_\_\_\_

8. \_\_\_\_\_

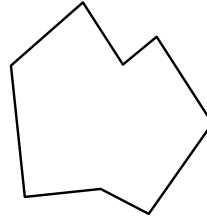
7)



8)



9)



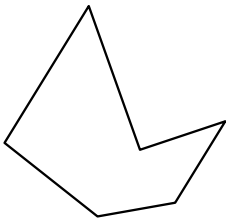
9. \_\_\_\_\_

10. \_\_\_\_\_

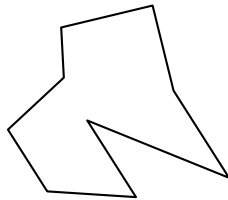
11. \_\_\_\_\_

12. \_\_\_\_\_

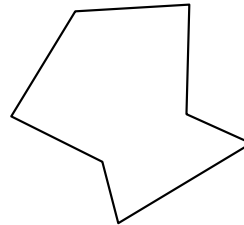
10)



11)



12)

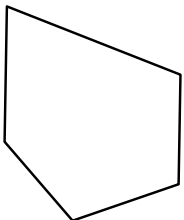


13. \_\_\_\_\_

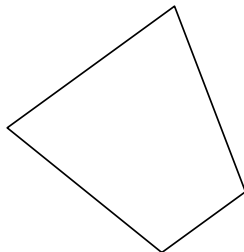
14. \_\_\_\_\_

15. \_\_\_\_\_

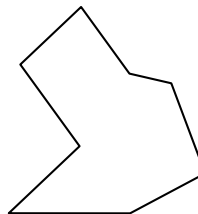
13)



14)



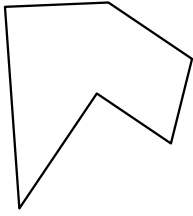
15)



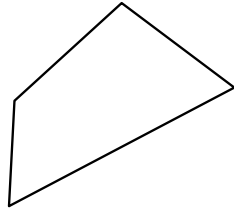


Identify the type of shape shown.

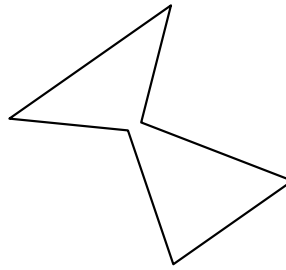
1)



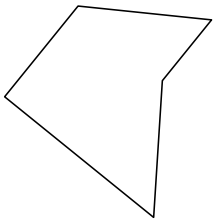
2)



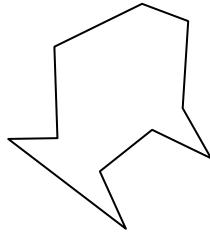
3)



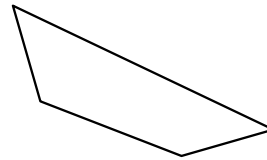
4)



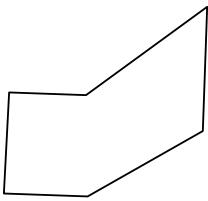
5)



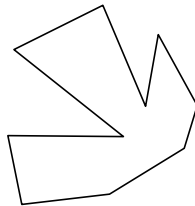
6)



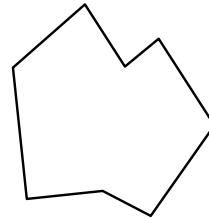
7)



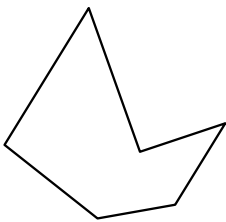
8)



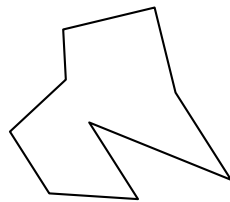
9)



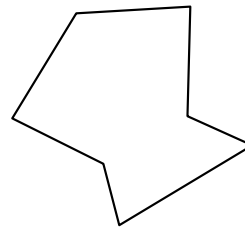
10)



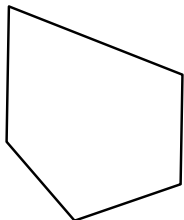
11)



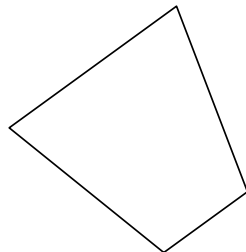
12)



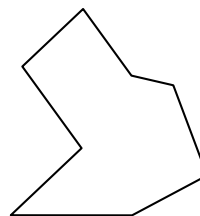
13)



14)



15)



Answers

1. hexagon

2. quadrilateral

3. hexagon

4. pentagon

5. decagon

6. quadrilateral

7. hexagon

8. decagon

9. octagon

10. hexagon

11. nonagon

12. heptagon

13. pentagon

14. quadrilateral

15. octagon

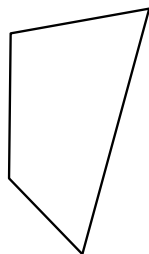




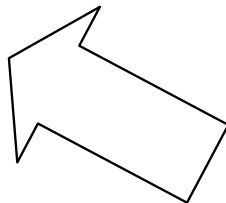
Identify the type of shape shown.

Answers


1)



2)



3)



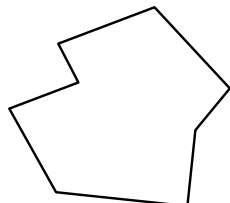
1. \_\_\_\_\_

2. \_\_\_\_\_

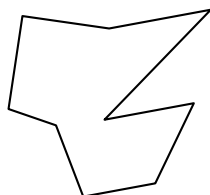
3. \_\_\_\_\_

4. \_\_\_\_\_

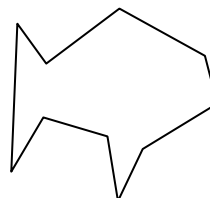
4)



5)



6)



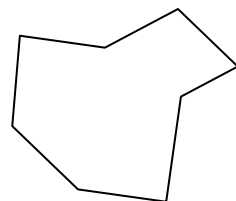
5. \_\_\_\_\_

6. \_\_\_\_\_

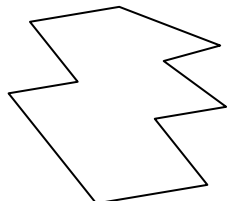
7. \_\_\_\_\_

8. \_\_\_\_\_

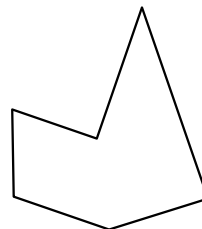
7)



8)



9)




9. \_\_\_\_\_

10. \_\_\_\_\_

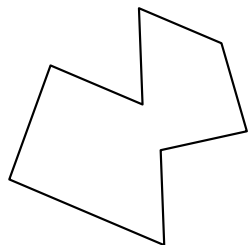
11. \_\_\_\_\_

12. \_\_\_\_\_

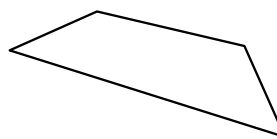
10)



11)



12)

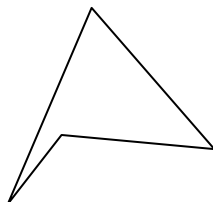


13. \_\_\_\_\_

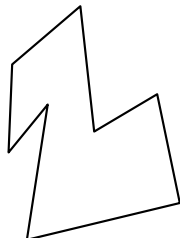
14. \_\_\_\_\_

15. \_\_\_\_\_

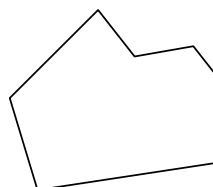
13)



14)



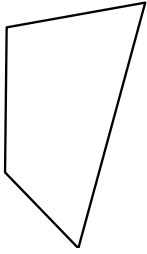
15)



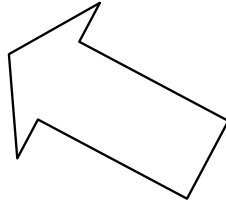


Identify the type of shape shown.

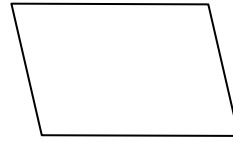
1)



2)



3)



Answers

1. quadrilateral

2. heptagon

3. quadrilateral

4. octagon

5. nonagon

6. decagon

7. octagon

8. decagon

9. hexagon

10. octagon

11. octagon

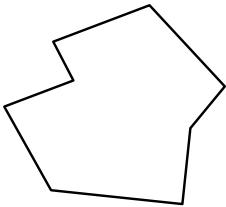
12. quadrilateral

13. quadrilateral

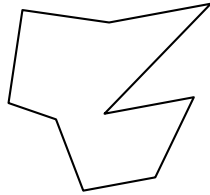
14. octagon

15. heptagon

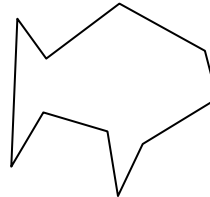
4)



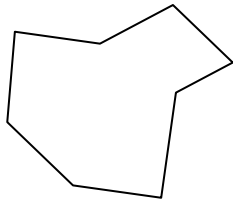
5)



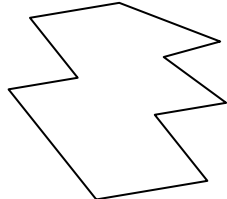
6)



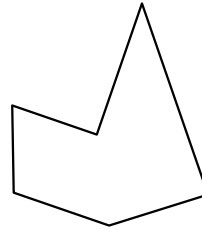
7)




8)



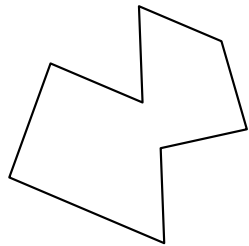
9)



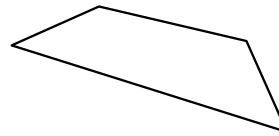
10)



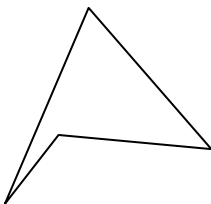
11)



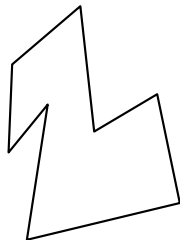
12)



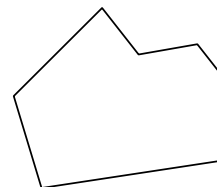
13)



14)



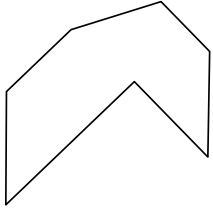
15)



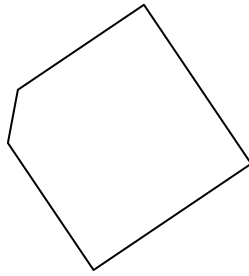


Identify the type of shape shown.

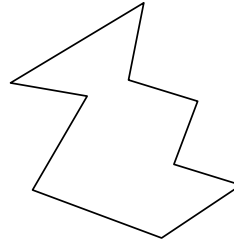
1)



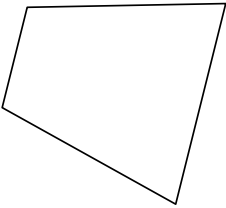
2)



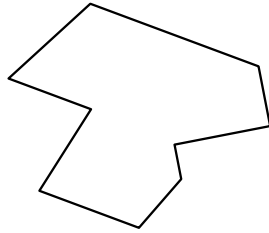
3)




4)



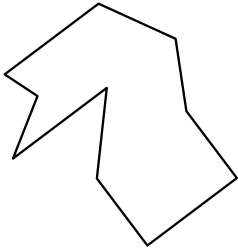
5)



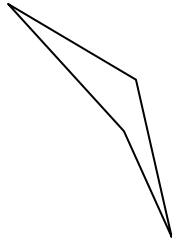
6)



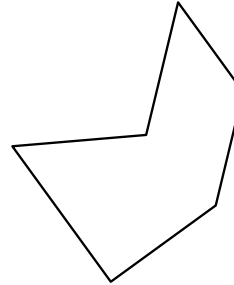
7)



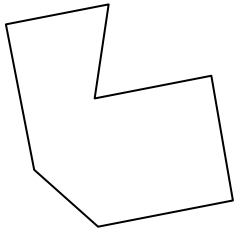
8)



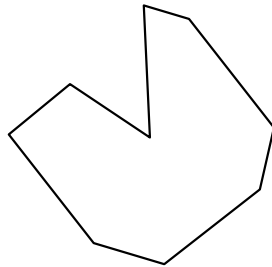
9)



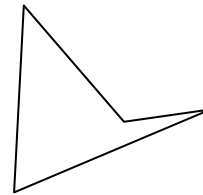
10)



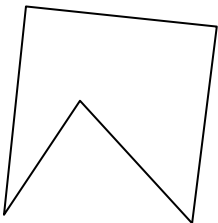
11)



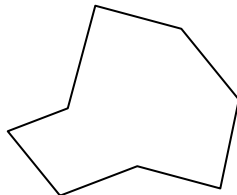
12)



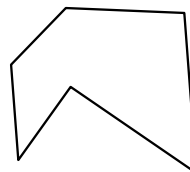
13)



14)



15)



Answers

1. \_\_\_\_\_

2. \_\_\_\_\_

3. \_\_\_\_\_

4. \_\_\_\_\_

5. \_\_\_\_\_

6. \_\_\_\_\_

7. \_\_\_\_\_

8. \_\_\_\_\_

9. \_\_\_\_\_

10. \_\_\_\_\_

11. \_\_\_\_\_

12. \_\_\_\_\_

13. \_\_\_\_\_

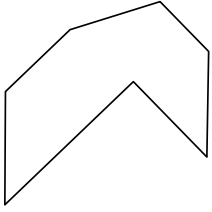
14. \_\_\_\_\_

15. \_\_\_\_\_

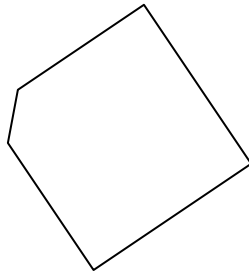


Identify the type of shape shown.

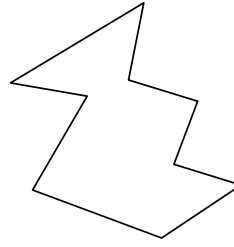
1)



2)



3)



Answers

1. heptagon

2. pentagon

3. nonagon

4. quadrilateral

5. nonagon

6. nonagon

7. decagon

8. quadrilateral

9. hexagon

10. heptagon

11. nonagon

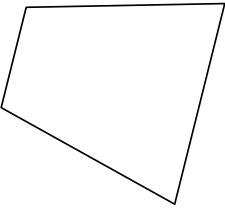
12. quadrilateral

13. pentagon

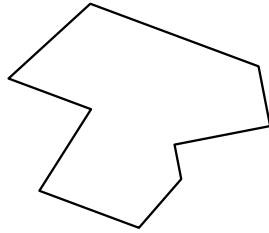
14. octagon

15. hexagon

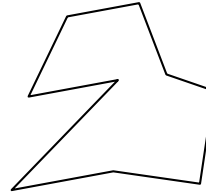
4)



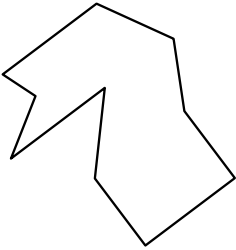
5)



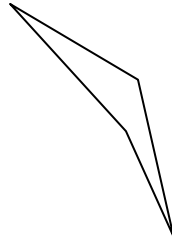
6)



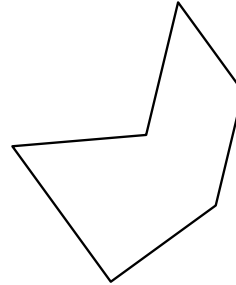
7)



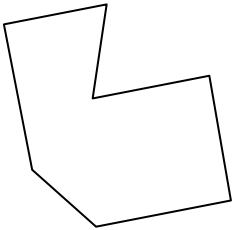
8)



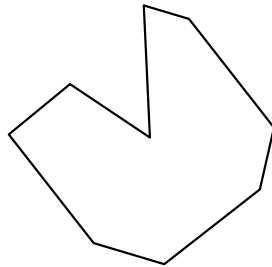
9)



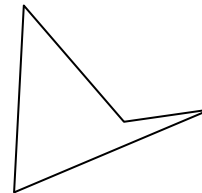
10)



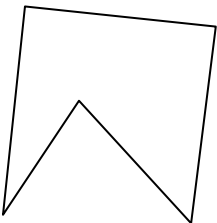
11)



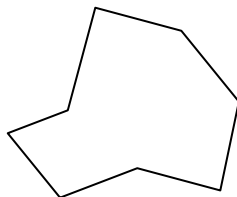
12)



13)



14)



15)

