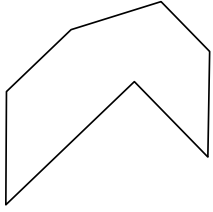


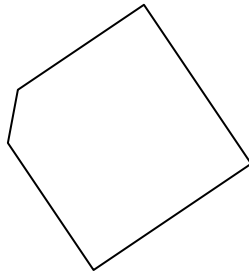


Identify the type of shape shown.

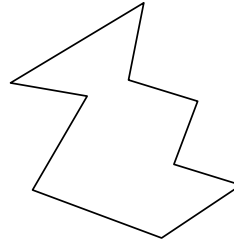
1)



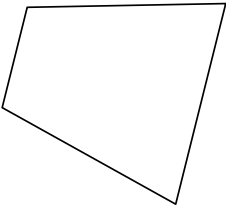
2)



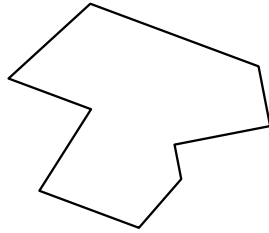
3)




4)



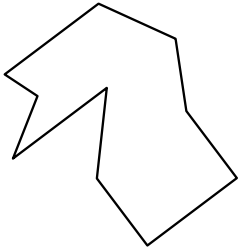
5)



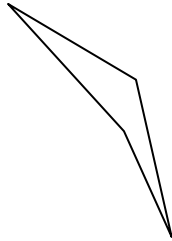
6)



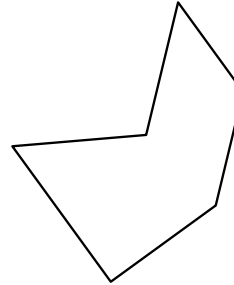
7)



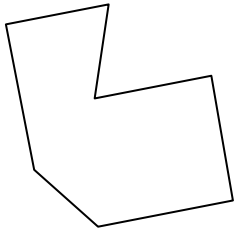
8)



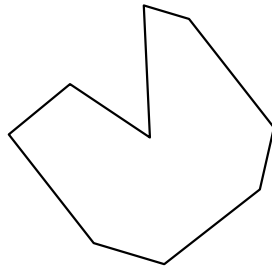
9)



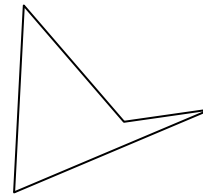
10)



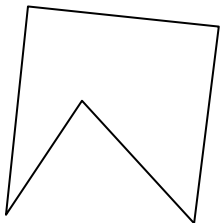
11)



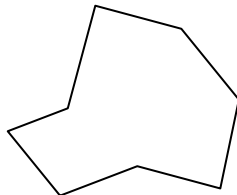
12)



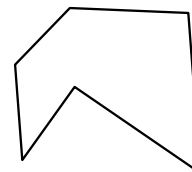
13)



14)



15)



Answers

1. \_\_\_\_\_

2. \_\_\_\_\_

3. \_\_\_\_\_

4. \_\_\_\_\_

5. \_\_\_\_\_

6. \_\_\_\_\_

7. \_\_\_\_\_

8. \_\_\_\_\_

9. \_\_\_\_\_

10. \_\_\_\_\_

11. \_\_\_\_\_

12. \_\_\_\_\_

13. \_\_\_\_\_

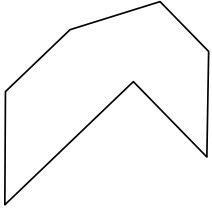
14. \_\_\_\_\_

15. \_\_\_\_\_

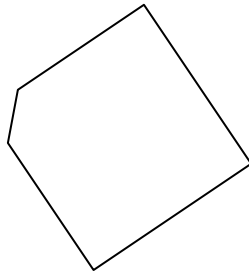


Identify the type of shape shown.

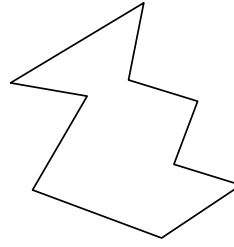
1)



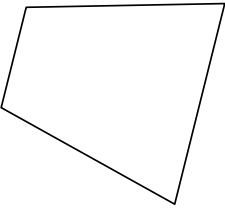
2)



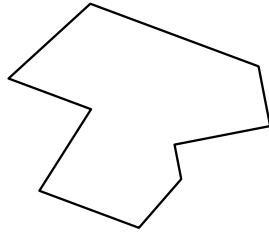
3)




4)



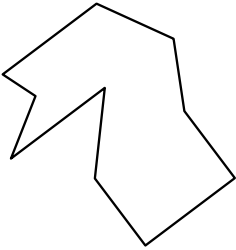
5)



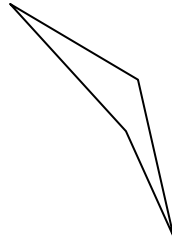
6)



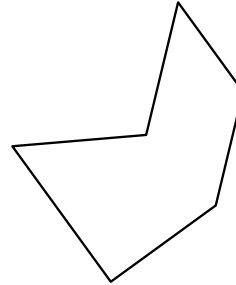
7)



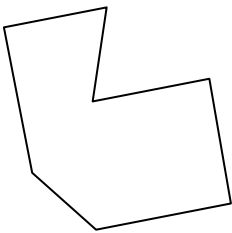
8)



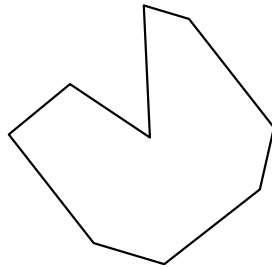
9)



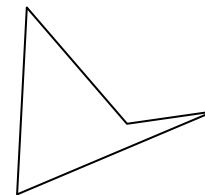
10)



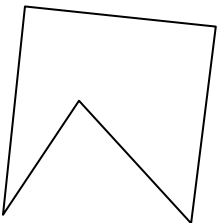
11)



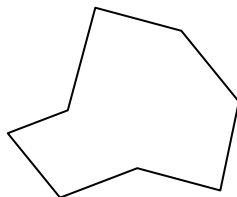
12)



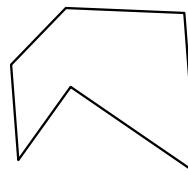
13)



14)



15)



Answers

1. heptagon

2. pentagon

3. nonagon

4. quadrilateral

5. nonagon

6. nonagon

7. decagon

8. quadrilateral

9. hexagon

10. heptagon

11. nonagon

12. quadrilateral

13. pentagon

14. octagon

15. hexagon