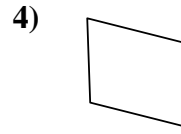
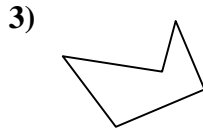
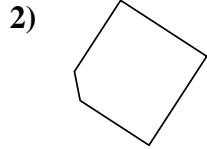
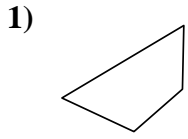




Determine if the shape shown is a quadrilateral (yes) or not (no).

Answers

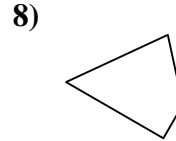
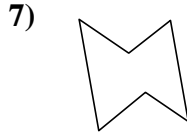
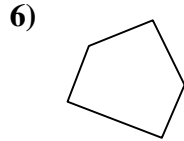
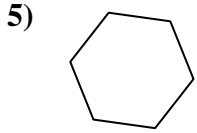


1. \_\_\_\_\_

2. \_\_\_\_\_

3. \_\_\_\_\_

4. \_\_\_\_\_

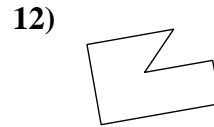
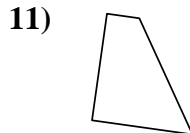
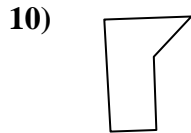
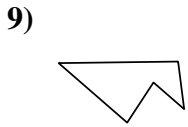


5. \_\_\_\_\_

6. \_\_\_\_\_

7. \_\_\_\_\_

8. \_\_\_\_\_

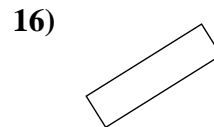
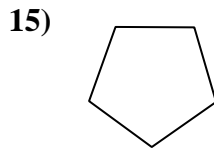
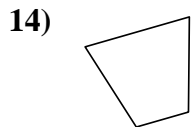
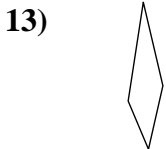


9. \_\_\_\_\_

10. \_\_\_\_\_

11. \_\_\_\_\_

12. \_\_\_\_\_

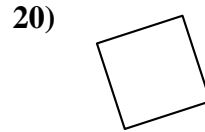
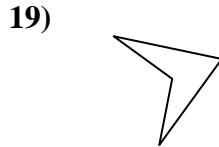
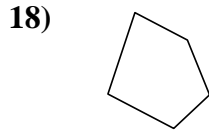
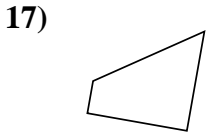


13. \_\_\_\_\_

14. \_\_\_\_\_

15. \_\_\_\_\_

16. \_\_\_\_\_



17. \_\_\_\_\_

18. \_\_\_\_\_

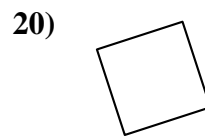
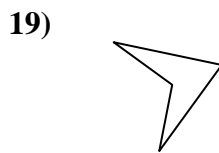
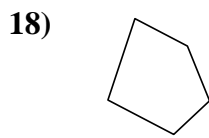
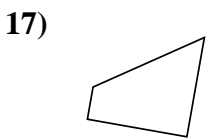
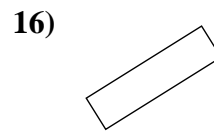
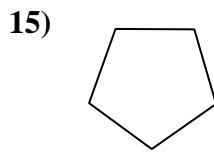
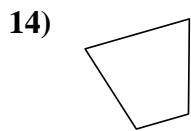
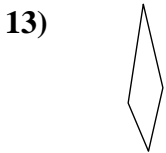
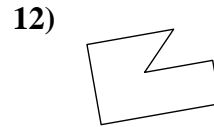
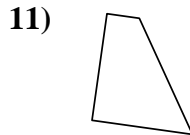
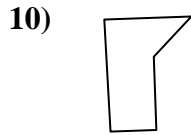
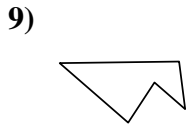
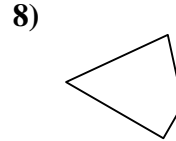
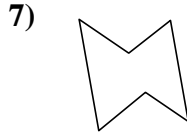
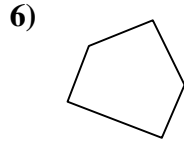
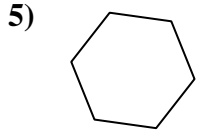
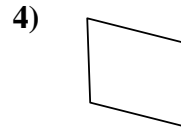
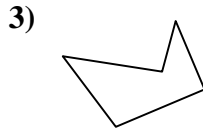
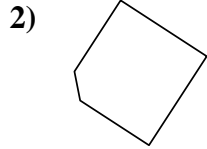
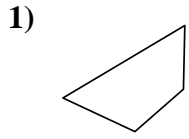
19. \_\_\_\_\_

20. \_\_\_\_\_



Determine if the shape shown is a quadrilateral (yes) or not (no).

Answers



1. yes

2. no

3. no

4. yes

5. no

6. no

7. no

8. yes

9. no

10. no

11. yes

12. no

13. yes

14. yes

15. no

16. yes

17. yes

18. no

19. yes

20. yes