

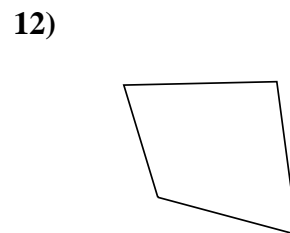
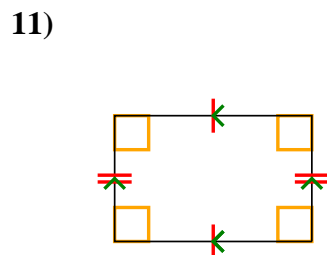
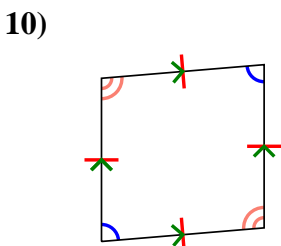
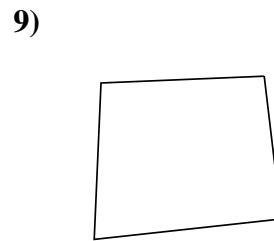
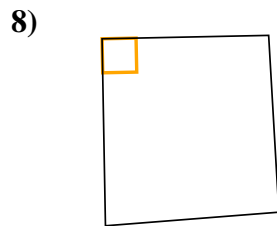
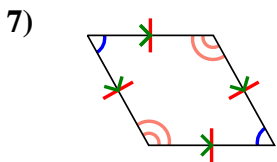
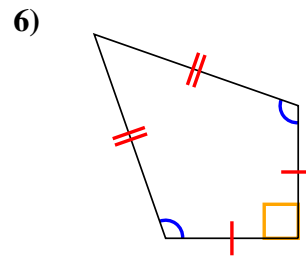
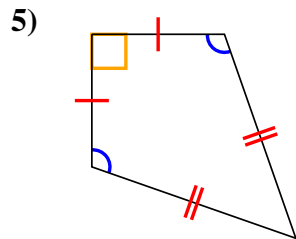
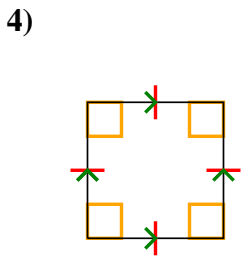
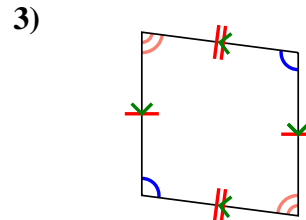
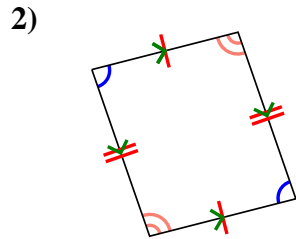
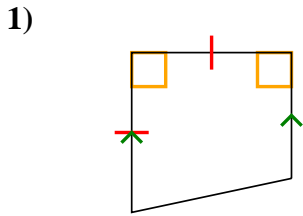


Determine if the shape shown is a Quadrilateral, Kite, Trapezoid, Parallelogram, Rhombus, Rectangle or Square (can be more than one).

Answers

	Sides / Angles	Sides	Angles
Q. Quadrilateral	4 / 4	Sides can be any length.	Angles can be any degree.
K. Kite	4 / 4	Has two pairs of adjacent sides. Each pairs sides are equal length.	One pair of opposite angles that are equal in degree.
T. Trapezoid	4 / 4	Sides can be any length. Has only 1 pair of parallel sides.	Angles can be any degree.
P. Parallelogram	4 / 4	Opposite sides are equal length. Opposite sides are parallel.	Opposite angles are the same.
H. Rhombus	4 / 4	All sides are equal length. Opposite sides are parallel.	Opposite angles are the same.
R. Rectangle	4 / 4	Opposite sides are equal length. Opposite sides are parallel.	All angles are 90°.
S. Square	4 / 4	All sides are equal length. Opposite sides are parallel.	All angles are 90°.

1. _____
2. _____
3. _____
4. _____
5. _____
6. _____
7. _____
8. _____
9. _____
10. _____
11. _____
12. _____

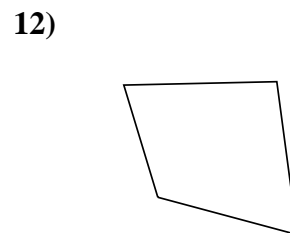
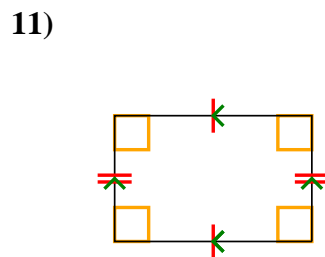
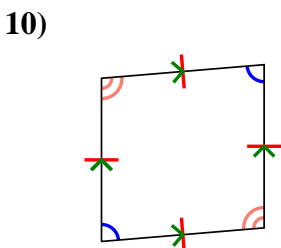
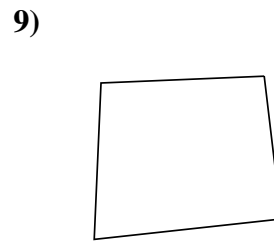
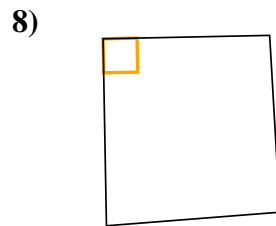
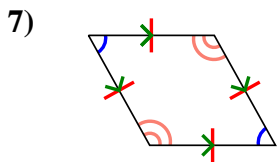
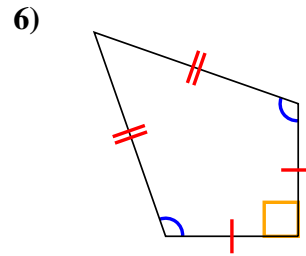
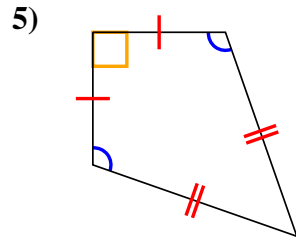
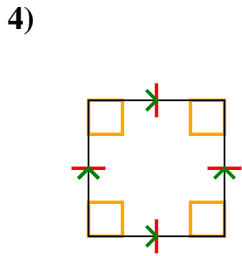
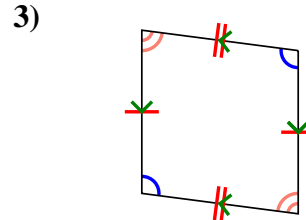
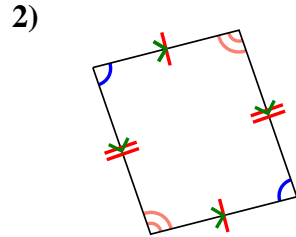
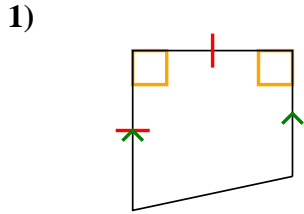




Determine if the shape shown is a Quadrilateral, Kite, Trapezoid, Parallelogram, Rhombus, Rectangle or Square (can be more than one).

Answers

	Sides / Angles	Sides	Angles
Q. Quadrilateral	4 / 4	Sides can be any length.	Angles can be any degree.
K. Kite	4 / 4	Has two pairs of adjacent sides. Each pairs sides are equal length.	One pair of opposite angles that are equal in degree.
T. Trapezoid	4 / 4	Sides can be any length. Has only 1 pair of parallel sides.	Angles can be any degree.
P. Parallelogram	4 / 4	Opposite sides are equal length. Opposite sides are parallel.	Opposite angles are the same.
H. Rhombus	4 / 4	All sides are equal length. Opposite sides are parallel.	Opposite angles are the same.
R. Rectangle	4 / 4	Opposite sides are equal length. Opposite sides are parallel.	All angles are 90°.
S. Square	4 / 4	All sides are equal length. Opposite sides are parallel.	All angles are 90°.



1. Q,T

2. Q,P

3. Q,P

4. Q,P,H,R,S

5. Q,K

6. Q,K

7. Q,P,H

8. Q

9. Q

10. Q,P,H

11. Q,P,R

12. Q

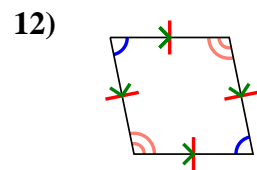
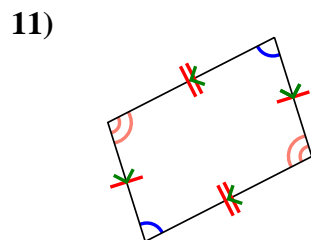
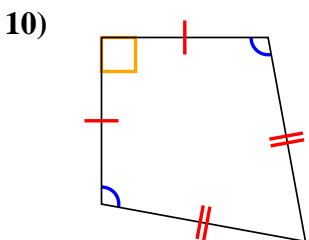
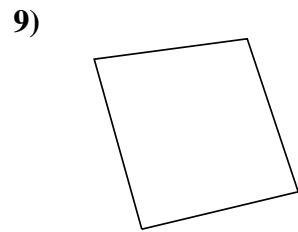
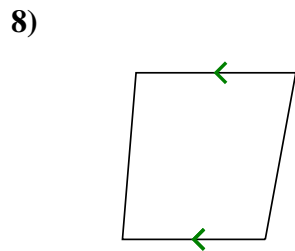
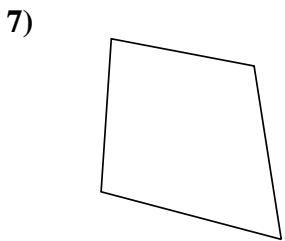
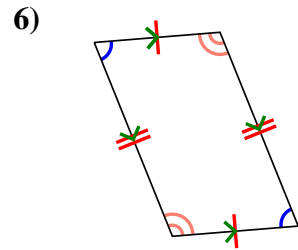
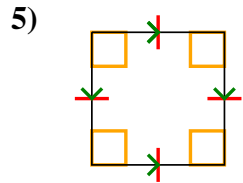
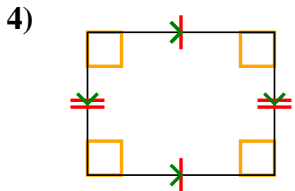
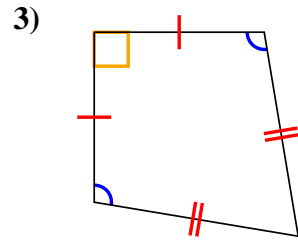
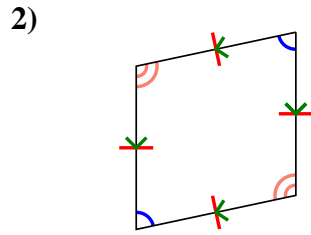
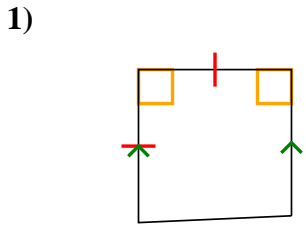


Determine if the shape shown is a Quadrilateral, Kite, Trapezoid, Parallelogram, Rhombus, Rectangle or Square (can be more than one).

Answers

	Sides / Angles	Sides	Angles
Q. Quadrilateral	4 / 4	Sides can be any length.	Angles can be any degree.
K. Kite	4 / 4	Has two pairs of adjacent sides. Each pairs sides are equal length.	One pair of opposite angles that are equal in degree.
T. Trapezoid	4 / 4	Sides can be any length. Has only 1 pair of parallel sides.	Angles can be any degree.
P. Parallelogram	4 / 4	Opposite sides are equal length. Opposite sides are parallel.	Opposite angles are the same.
H. Rhombus	4 / 4	All sides are equal length. Opposite sides are parallel.	Opposite angles are the same.
R. Rectangle	4 / 4	Opposite sides are equal length. Opposite sides are parallel.	All angles are 90°.
S. Square	4 / 4	All sides are equal length. Opposite sides are parallel.	All angles are 90°.

1. _____
2. _____
3. _____
4. _____
5. _____
6. _____
7. _____
8. _____
9. _____
10. _____
11. _____
12. _____



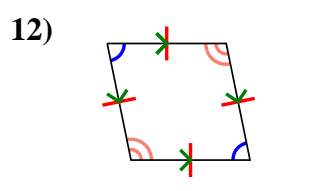
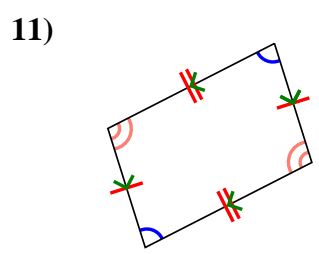
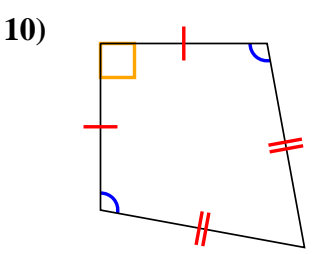
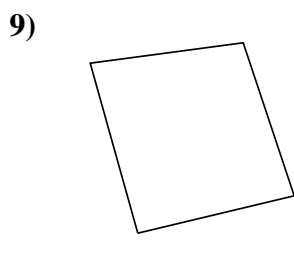
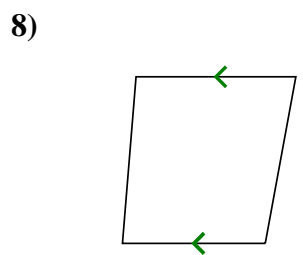
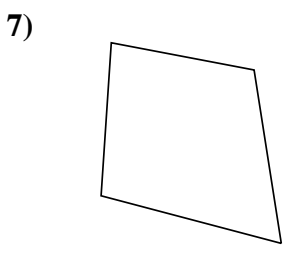
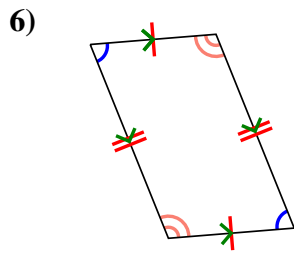
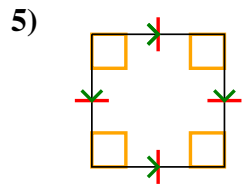
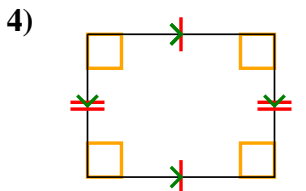
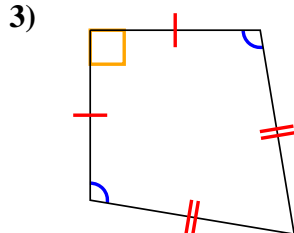
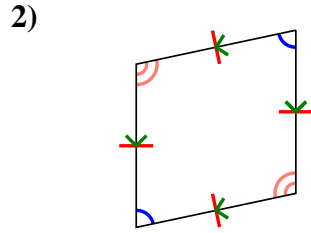
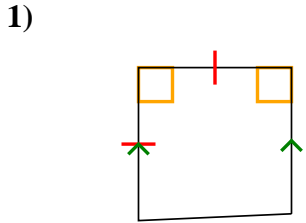


Determine if the shape shown is a Quadrilateral, Kite, Trapezoid, Parallelogram, Rhombus, Rectangle or Square (can be more than one).

Answers

	Sides / Angles	Sides	Angles
Q. Quadrilateral	4 / 4	Sides can be any length.	Angles can be any degree.
K. Kite	4 / 4	Has two pairs of adjacent sides. Each pairs sides are equal length.	One pair of opposite angles that are equal in degree.
T. Trapezoid	4 / 4	Sides can be any length. Has only 1 pair of parallel sides.	Angles can be any degree.
P. Parallelogram	4 / 4	Opposite sides are equal length. Opposite sides are parallel.	Opposite angles are the same.
H. Rhombus	4 / 4	All sides are equal length. Opposite sides are parallel.	Opposite angles are the same.
R. Rectangle	4 / 4	Opposite sides are equal length. Opposite sides are parallel.	All angles are 90°.
S. Square	4 / 4	All sides are equal length. Opposite sides are parallel.	All angles are 90°.

1. Q,T
2. Q,P,H
3. Q,K
4. Q,P,R
5. Q,P,H,R,S
6. Q,P
7. Q
8. Q,T
9. Q
10. Q,K
11. Q,P
12. Q,P,H



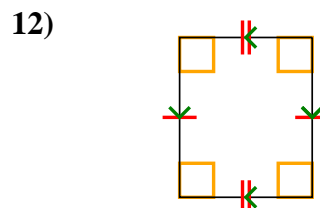
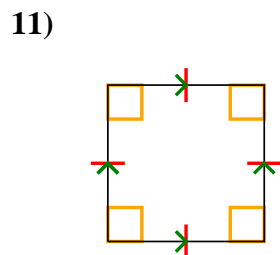
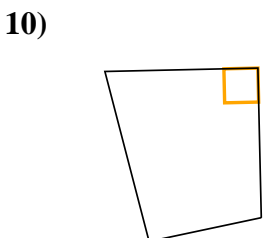
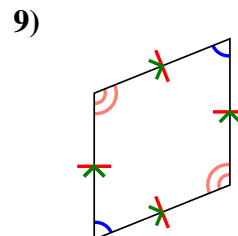
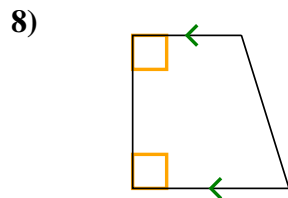
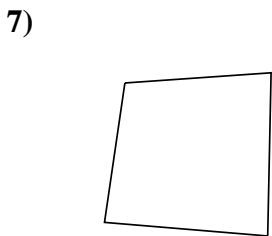
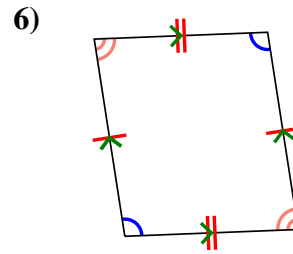
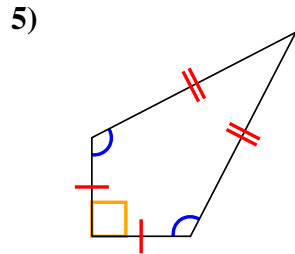
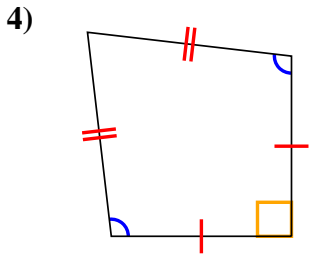
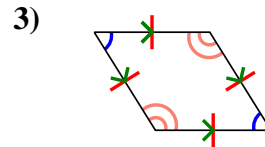
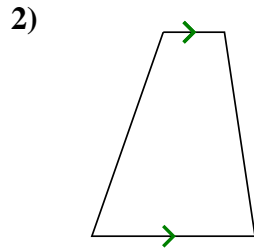
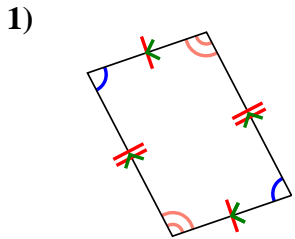


Determine if the shape shown is a Quadrilateral, Kite, Trapezoid, Parallelogram, Rhombus, Rectangle or Square (can be more than one).

Answers

	Sides / Angles	Sides	Angles
Q. Quadrilateral	4 / 4	Sides can be any length.	Angles can be any degree.
K. Kite	4 / 4	Has two pairs of adjacent sides. Each pairs sides are equal length.	One pair of opposite angles that are equal in degree.
T. Trapezoid	4 / 4	Sides can be any length. Has only 1 pair of parallel sides.	Angles can be any degree.
P. Parallelogram	4 / 4	Opposite sides are equal length. Opposite sides are parallel.	Opposite angles are the same.
H. Rhombus	4 / 4	All sides are equal length. Opposite sides are parallel.	Opposite angles are the same.
R. Rectangle	4 / 4	Opposite sides are equal length. Opposite sides are parallel.	All angles are 90°.
S. Square	4 / 4	All sides are equal length. Opposite sides are parallel.	All angles are 90°.

1. _____
2. _____
3. _____
4. _____
5. _____
6. _____
7. _____
8. _____
9. _____
10. _____
11. _____
12. _____



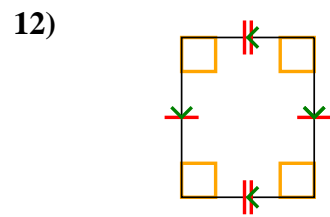
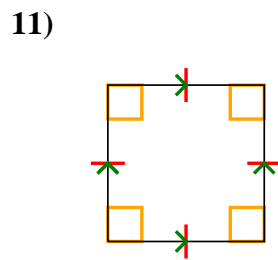
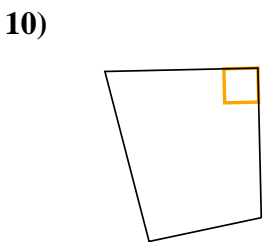
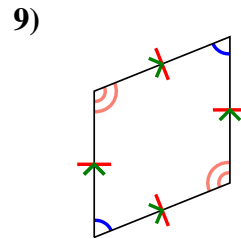
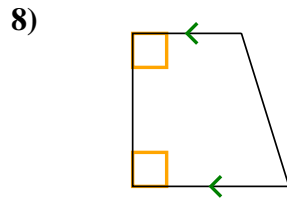
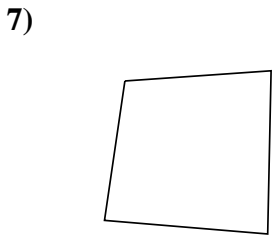
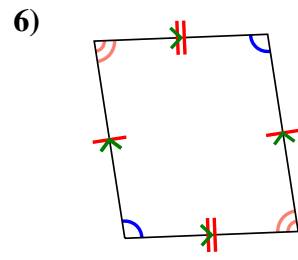
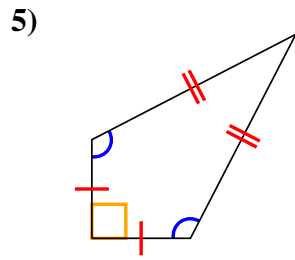
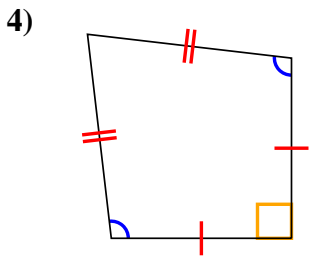
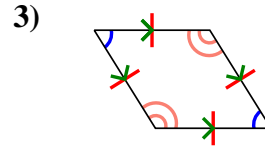
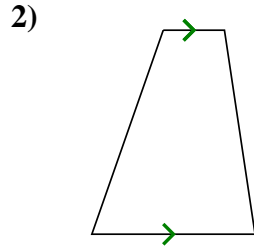
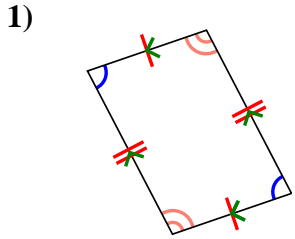


Determine if the shape shown is a Quadrilateral, Kite, Trapezoid, Parallelogram, Rhombus, Rectangle or Square (can be more than one).

Answers

	Sides / Angles	Sides	Angles
Q. Quadrilateral	4 / 4	Sides can be any length.	Angles can be any degree.
K. Kite	4 / 4	Has two pairs of adjacent sides. Each pairs sides are equal length.	One pair of opposite angles that are equal in degree.
T. Trapezoid	4 / 4	Sides can be any length. Has only 1 pair of parallel sides.	Angles can be any degree.
P. Parallelogram	4 / 4	Opposite sides are equal length. Opposite sides are parallel.	Opposite angles are the same.
H. Rhombus	4 / 4	All sides are equal length. Opposite sides are parallel.	Opposite angles are the same.
R. Rectangle	4 / 4	Opposite sides are equal length. Opposite sides are parallel.	All angles are 90°.
S. Square	4 / 4	All sides are equal length. Opposite sides are parallel.	All angles are 90°.

1. Q,P
2. Q,T
3. Q,P,H
4. Q,K
5. Q,K
6. Q,P
7. Q
8. Q,T
9. Q,P,H
10. Q
11. Q,P,H,R,S
12. Q,P,R



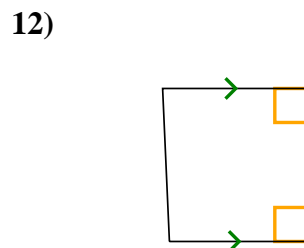
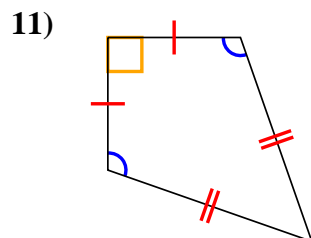
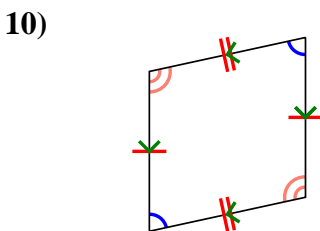
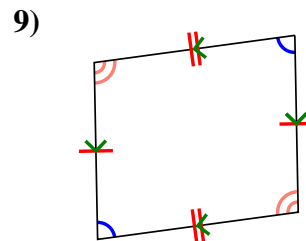
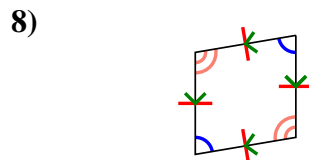
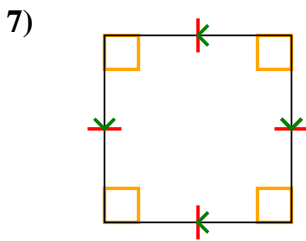
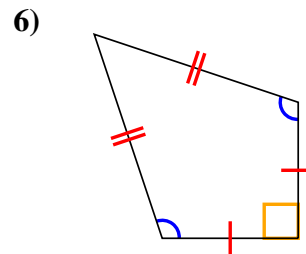
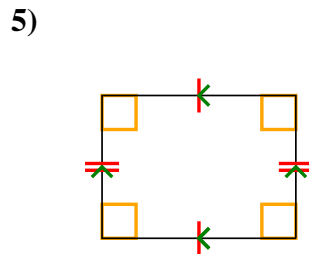
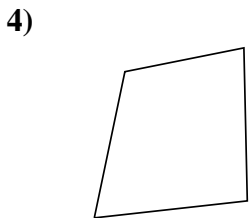
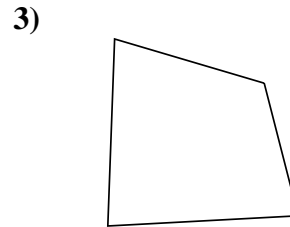
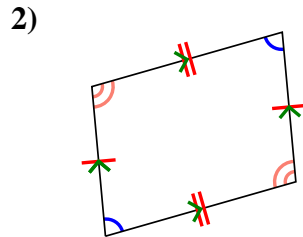
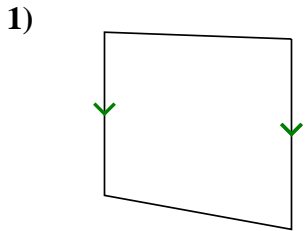


Determine if the shape shown is a Quadrilateral, Kite, Trapezoid, Parallelogram, Rhombus, Rectangle or Square (can be more than one).

Answers

	Sides / Angles	Sides	Angles
Q. Quadrilateral	4 / 4	Sides can be any length.	Angles can be any degree.
K. Kite	4 / 4	Has two pairs of adjacent sides. Each pairs sides are equal length.	One pair of opposite angles that are equal in degree.
T. Trapezoid	4 / 4	Sides can be any length. Has only 1 pair of parallel sides.	Angles can be any degree.
P. Parallelogram	4 / 4	Opposite sides are equal length. Opposite sides are parallel.	Opposite angles are the same.
H. Rhombus	4 / 4	All sides are equal length. Opposite sides are parallel.	Opposite angles are the same.
R. Rectangle	4 / 4	Opposite sides are equal length. Opposite sides are parallel.	All angles are 90°.
S. Square	4 / 4	All sides are equal length. Opposite sides are parallel.	All angles are 90°.

1. _____
2. _____
3. _____
4. _____
5. _____
6. _____
7. _____
8. _____
9. _____
10. _____
11. _____
12. _____



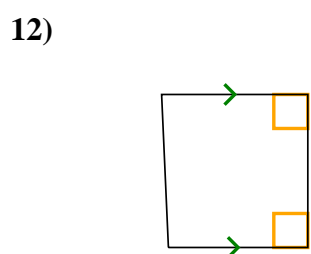
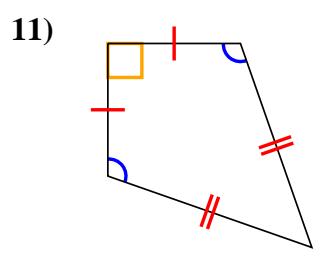
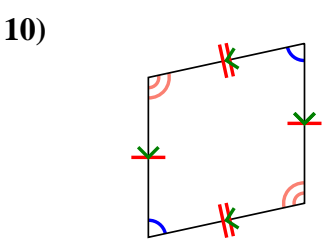
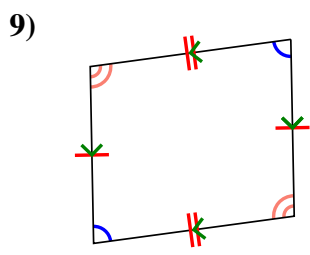
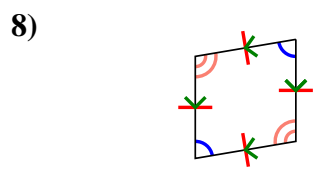
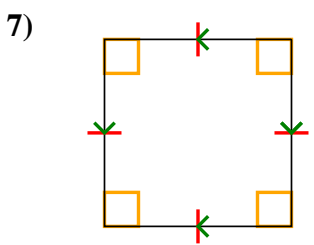
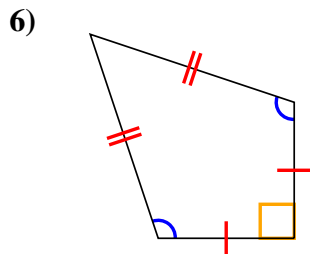
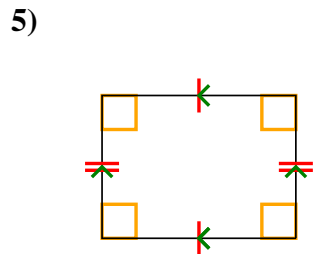
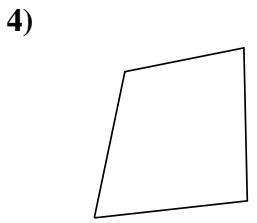
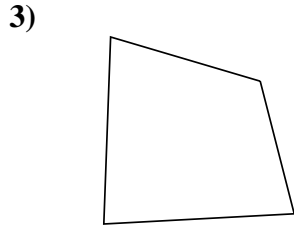
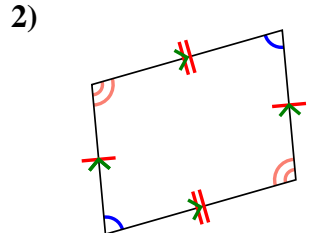
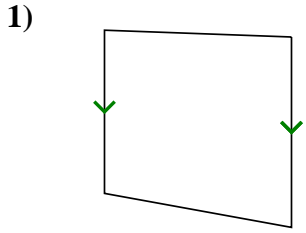


Determine if the shape shown is a Quadrilateral, Kite, Trapezoid, Parallelogram, Rhombus, Rectangle or Square (can be more than one).

Answers

	Sides / Angles	Sides	Angles
Q. Quadrilateral	4 / 4	Sides can be any length.	Angles can be any degree.
K. Kite	4 / 4	Has two pairs of adjacent sides. Each pairs sides are equal length.	One pair of opposite angles that are equal in degree.
T. Trapezoid	4 / 4	Sides can be any length. Has only 1 pair of parallel sides.	Angles can be any degree.
P. Parallelogram	4 / 4	Opposite sides are equal length. Opposite sides are parallel.	Opposite angles are the same.
H. Rhombus	4 / 4	All sides are equal length. Opposite sides are parallel.	Opposite angles are the same.
R. Rectangle	4 / 4	Opposite sides are equal length. Opposite sides are parallel.	All angles are 90°.
S. Square	4 / 4	All sides are equal length. Opposite sides are parallel.	All angles are 90°.

1. Q,T
2. Q,P
3. Q
4. Q
5. Q,P,R
6. Q,K
7. Q,P,H,R,S
8. Q,P,H
9. Q,P
10. Q,P
11. Q,K
12. Q,T



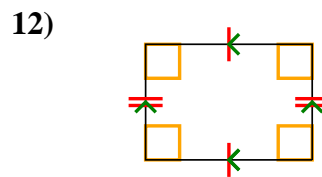
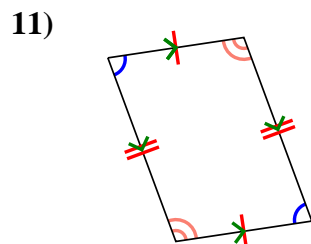
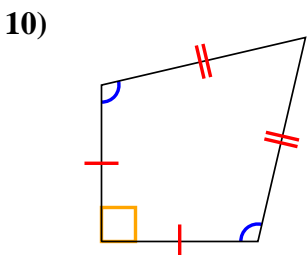
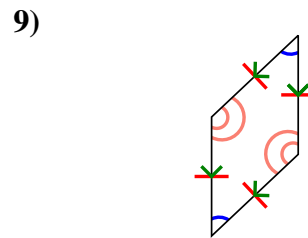
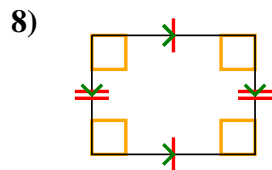
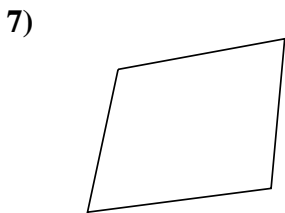
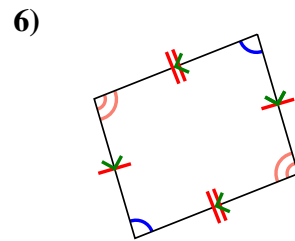
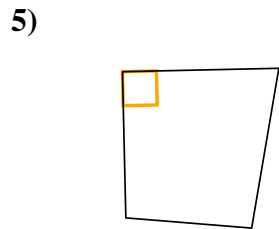
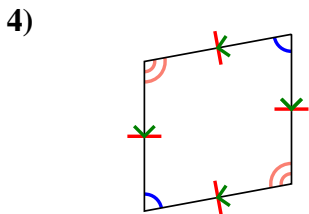
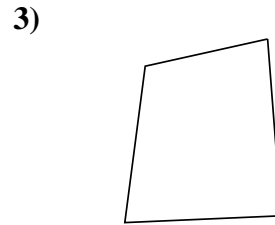
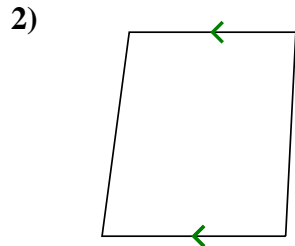
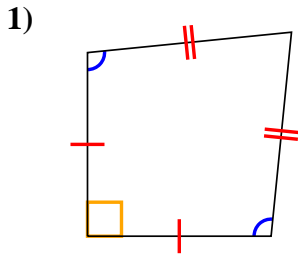


Determine if the shape shown is a Quadrilateral, Kite, Trapezoid, Parallelogram, Rhombus, Rectangle or Square (can be more than one).

Answers

	Sides / Angles	Sides	Angles
Q. Quadrilateral	4 / 4	Sides can be any length.	Angles can be any degree.
K. Kite	4 / 4	Has two pairs of adjacent sides. Each pairs sides are equal length.	One pair of opposite angles that are equal in degree.
T. Trapezoid	4 / 4	Sides can be any length. Has only 1 pair of parallel sides.	Angles can be any degree.
P. Parallelogram	4 / 4	Opposite sides are equal length. Opposite sides are parallel.	Opposite angles are the same.
H. Rhombus	4 / 4	All sides are equal length. Opposite sides are parallel.	Opposite angles are the same.
R. Rectangle	4 / 4	Opposite sides are equal length. Opposite sides are parallel.	All angles are 90°.
S. Square	4 / 4	All sides are equal length. Opposite sides are parallel.	All angles are 90°.

1. _____
2. _____
3. _____
4. _____
5. _____
6. _____
7. _____
8. _____
9. _____
10. _____
11. _____
12. _____



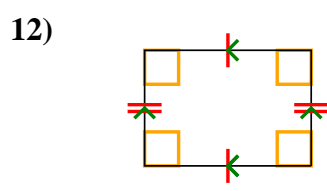
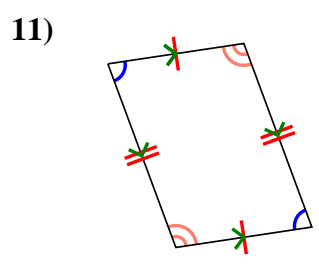
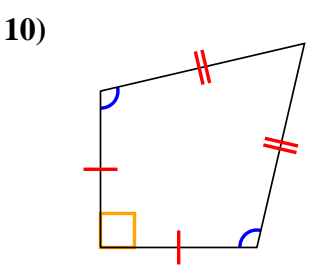
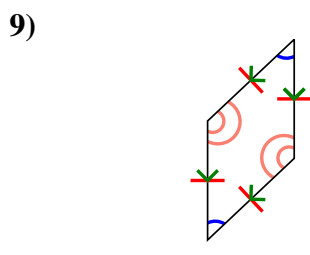
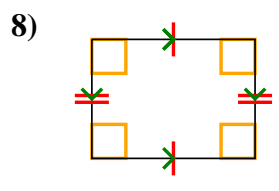
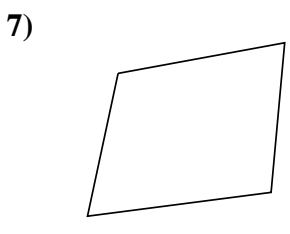
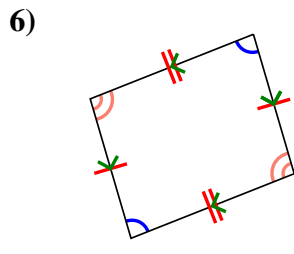
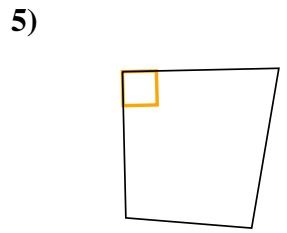
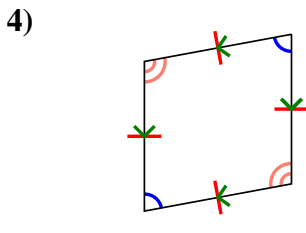
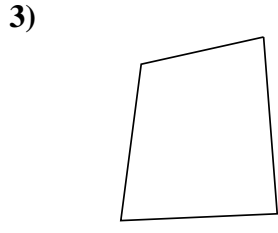
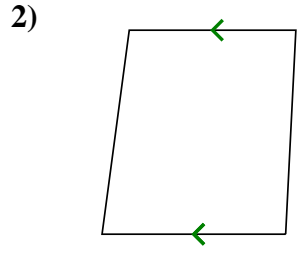
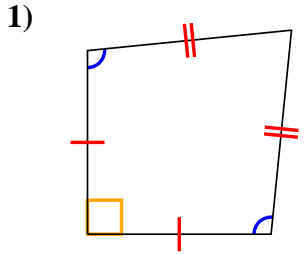


Determine if the shape shown is a Quadrilateral, Kite, Trapezoid, Parallelogram, Rhombus, Rectangle or Square (can be more than one).

Answers

	Sides / Angles	Sides	Angles
Q. Quadrilateral	4 / 4	Sides can be any length.	Angles can be any degree.
K. Kite	4 / 4	Has two pairs of adjacent sides. Each pairs sides are equal length.	One pair of opposite angles that are equal in degree.
T. Trapezoid	4 / 4	Sides can be any length. Has only 1 pair of parallel sides.	Angles can be any degree.
P. Parallelogram	4 / 4	Opposite sides are equal length. Opposite sides are parallel.	Opposite angles are the same.
H. Rhombus	4 / 4	All sides are equal length. Opposite sides are parallel.	Opposite angles are the same.
R. Rectangle	4 / 4	Opposite sides are equal length. Opposite sides are parallel.	All angles are 90°.
S. Square	4 / 4	All sides are equal length. Opposite sides are parallel.	All angles are 90°.

1. Q,K
2. Q,T
3. Q
4. Q,P,H
5. Q
6. Q,P
7. Q
8. Q,P,R
9. Q,P,H
10. Q,K
11. Q,P
12. Q,P,R



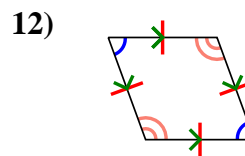
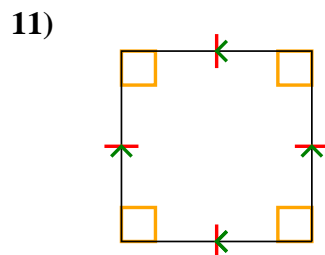
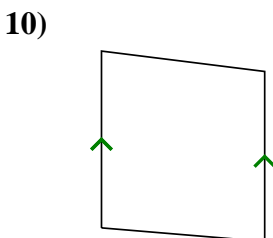
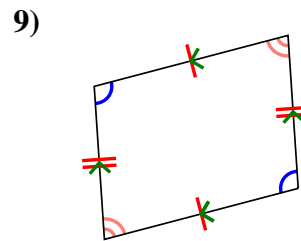
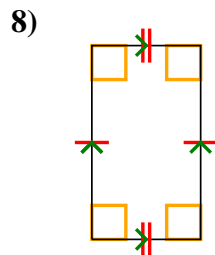
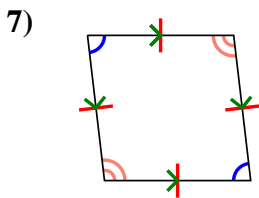
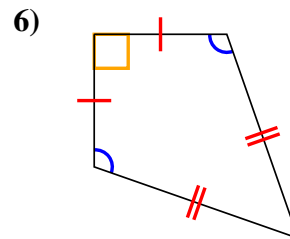
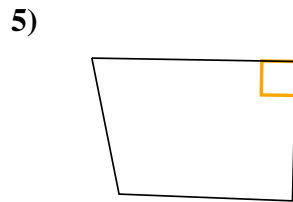
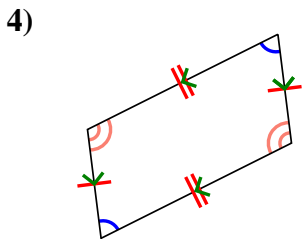
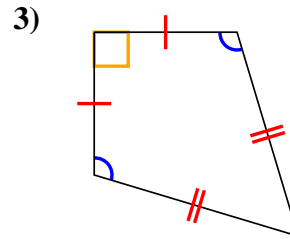
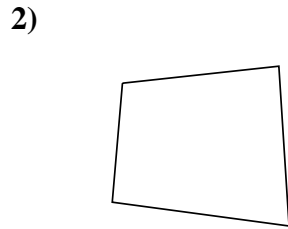
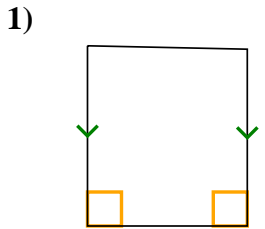


Determine if the shape shown is a Quadrilateral, Kite, Trapezoid, Parallelogram, Rhombus, Rectangle or Square (can be more than one).

Answers

	Sides / Angles	Sides	Angles
Q. Quadrilateral	4 / 4	Sides can be any length.	Angles can be any degree.
K. Kite	4 / 4	Has two pairs of adjacent sides. Each pairs sides are equal length.	One pair of opposite angles that are equal in degree.
T. Trapezoid	4 / 4	Sides can be any length. Has only 1 pair of parallel sides.	Angles can be any degree.
P. Parallelogram	4 / 4	Opposite sides are equal length. Opposite sides are parallel.	Opposite angles are the same.
H. Rhombus	4 / 4	All sides are equal length. Opposite sides are parallel.	Opposite angles are the same.
R. Rectangle	4 / 4	Opposite sides are equal length. Opposite sides are parallel.	All angles are 90°.
S. Square	4 / 4	All sides are equal length. Opposite sides are parallel.	All angles are 90°.

1. _____
2. _____
3. _____
4. _____
5. _____
6. _____
7. _____
8. _____
9. _____
10. _____
11. _____
12. _____



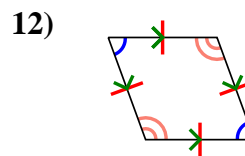
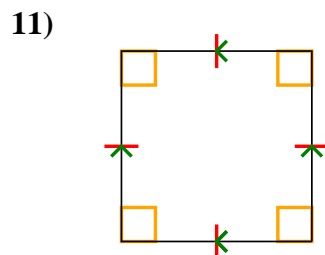
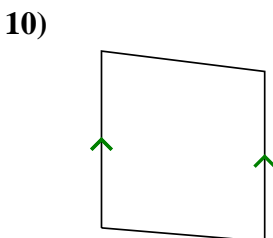
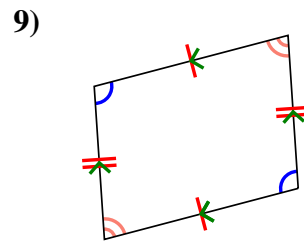
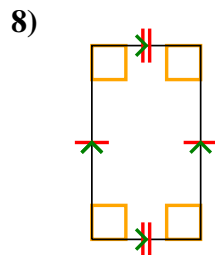
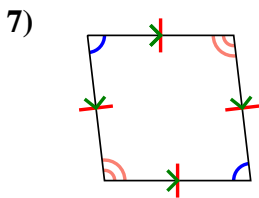
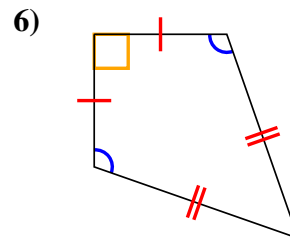
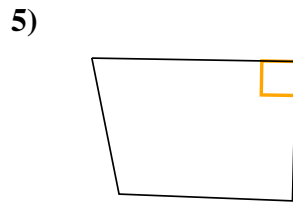
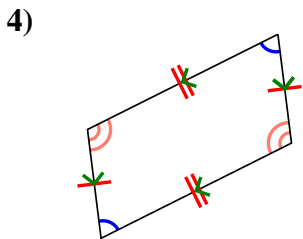
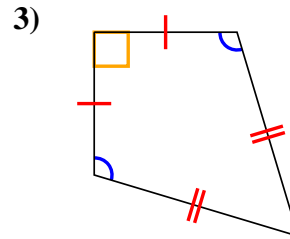
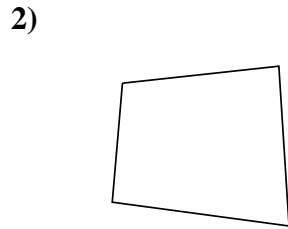
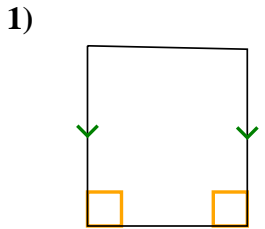


Determine if the shape shown is a Quadrilateral, Kite, Trapezoid, Parallelogram, Rhombus, Rectangle or Square (can be more than one).

Answers

	Sides / Angles	Sides	Angles
Q. Quadrilateral	4 / 4	Sides can be any length.	Angles can be any degree.
K. Kite	4 / 4	Has two pairs of adjacent sides. Each pairs sides are equal length.	One pair of opposite angles that are equal in degree.
T. Trapezoid	4 / 4	Sides can be any length. Has only 1 pair of parallel sides.	Angles can be any degree.
P. Parallelogram	4 / 4	Opposite sides are equal length. Opposite sides are parallel.	Opposite angles are the same.
H. Rhombus	4 / 4	All sides are equal length. Opposite sides are parallel.	Opposite angles are the same.
R. Rectangle	4 / 4	Opposite sides are equal length. Opposite sides are parallel.	All angles are 90°.
S. Square	4 / 4	All sides are equal length. Opposite sides are parallel.	All angles are 90°.

1. Q,T
2. Q
3. Q,K
4. Q,P
5. Q
6. Q,K
7. Q,P,H
8. Q,P,R
9. Q,P
10. Q,T
11. Q,P,H,R,S
12. Q,P,H



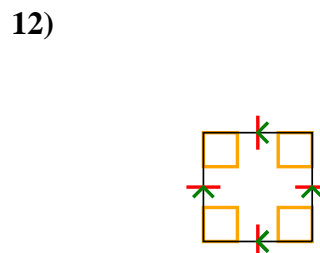
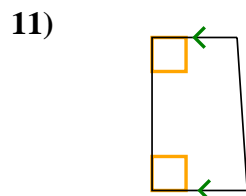
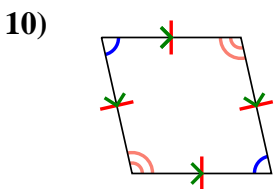
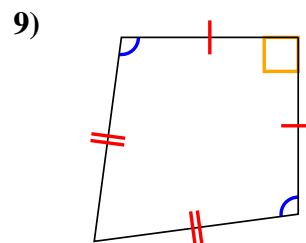
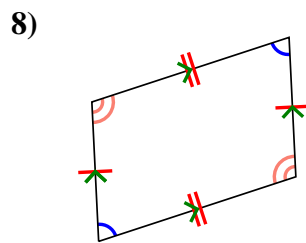
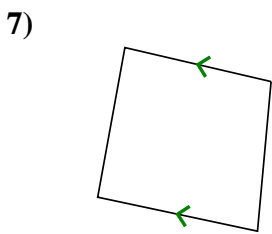
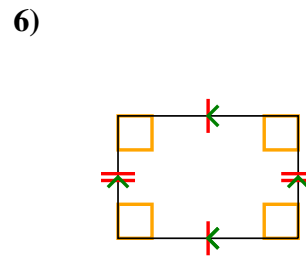
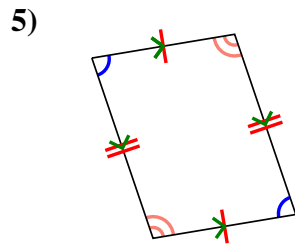
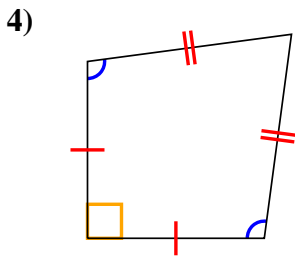
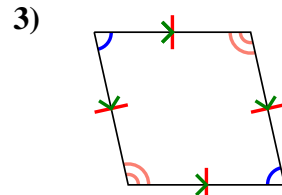
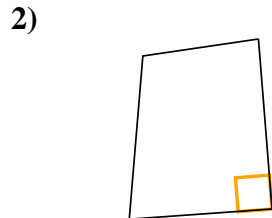
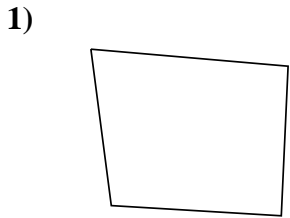


Determine if the shape shown is a Quadrilateral, Kite, Trapezoid, Parallelogram, Rhombus, Rectangle or Square (can be more than one).

Answers

	Sides / Angles	Sides	Angles
Q. Quadrilateral	4 / 4	Sides can be any length.	Angles can be any degree.
K. Kite	4 / 4	Has two pairs of adjacent sides. Each pair's sides are equal length.	One pair of opposite angles that are equal in degree.
T. Trapezoid	4 / 4	Sides can be any length. Has only 1 pair of parallel sides.	Angles can be any degree.
P. Parallelogram	4 / 4	Opposite sides are equal length. Opposite sides are parallel.	Opposite angles are the same.
H. Rhombus	4 / 4	All sides are equal length. Opposite sides are parallel.	Opposite angles are the same.
R. Rectangle	4 / 4	Opposite sides are equal length. Opposite sides are parallel.	All angles are 90°.
S. Square	4 / 4	All sides are equal length. Opposite sides are parallel.	All angles are 90°.

1. _____
2. _____
3. _____
4. _____
5. _____
6. _____
7. _____
8. _____
9. _____
10. _____
11. _____
12. _____



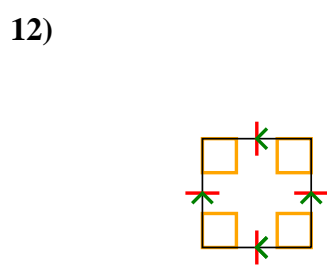
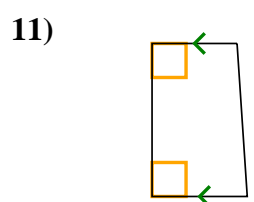
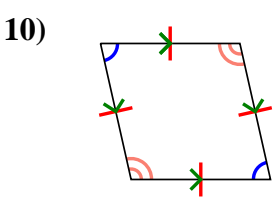
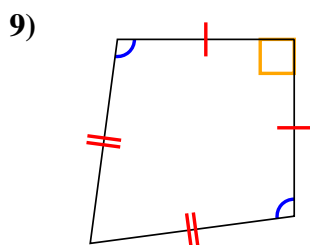
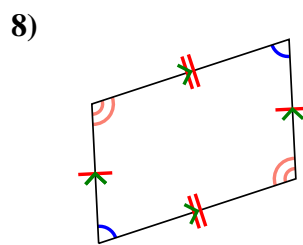
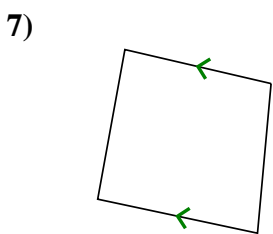
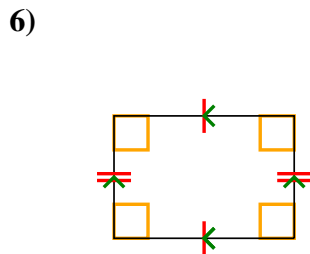
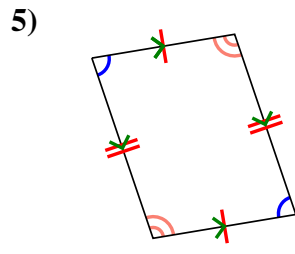
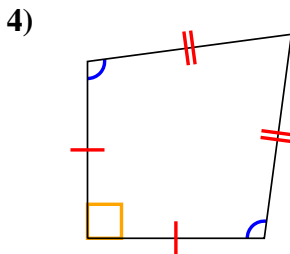
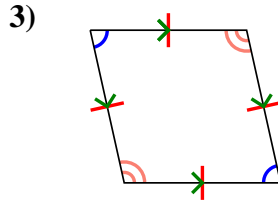
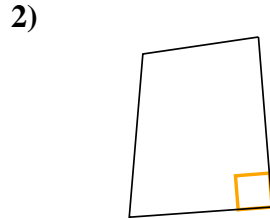
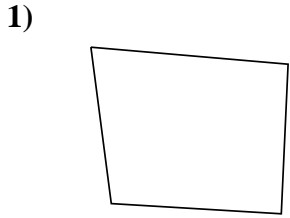


Determine if the shape shown is a Quadrilateral, Kite, Trapezoid, Parallelogram, Rhombus, Rectangle or Square (can be more than one).

Answers

	Sides / Angles	Sides	Angles
Q. Quadrilateral	4 / 4	Sides can be any length.	Angles can be any degree.
K. Kite	4 / 4	Has two pairs of adjacent sides. Each pairs sides are equal length.	One pair of opposite angles that are equal in degree.
T. Trapezoid	4 / 4	Sides can be any length. Has only 1 pair of parallel sides.	Angles can be any degree.
P. Parallelogram	4 / 4	Opposite sides are equal length. Opposite sides are parallel.	Opposite angles are the same.
H. Rhombus	4 / 4	All sides are equal length. Opposite sides are parallel.	Opposite angles are the same.
R. Rectangle	4 / 4	Opposite sides are equal length. Opposite sides are parallel.	All angles are 90°.
S. Square	4 / 4	All sides are equal length. Opposite sides are parallel.	All angles are 90°.

1. Q
2. Q
3. Q,P,H
4. Q,K
5. Q,P
6. Q,P,R
7. Q,T
8. Q,P
9. Q,K
10. Q,P,H
11. Q,T
12. Q,P,H,R,S



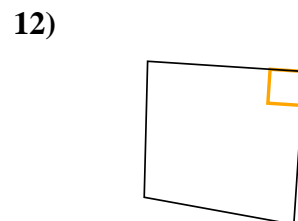
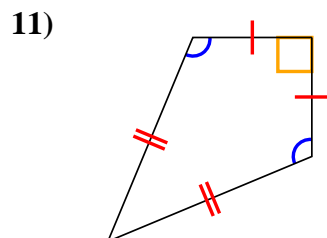
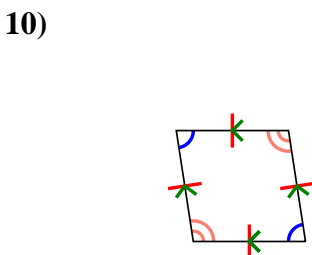
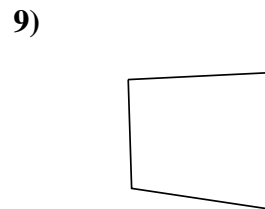
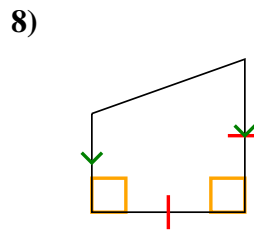
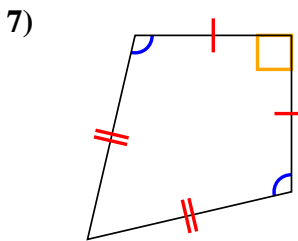
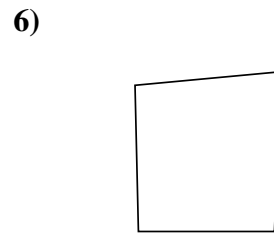
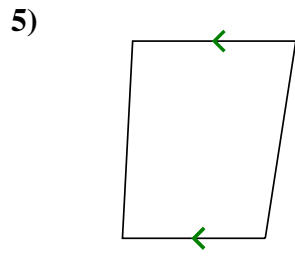
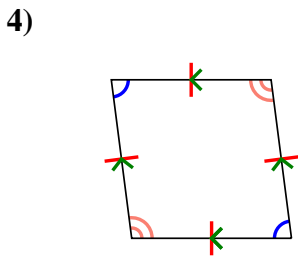
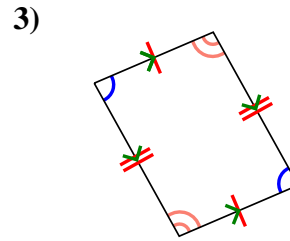
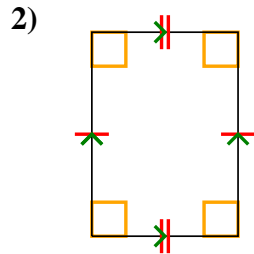
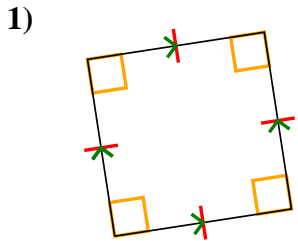


Determine if the shape shown is a Quadrilateral, Kite, Trapezoid, Parallelogram, Rhombus, Rectangle or Square (can be more than one).

Answers

	Sides / Angles	Sides	Angles
Q. Quadrilateral	4 / 4	Sides can be any length.	Angles can be any degree.
K. Kite	4 / 4	Has two pairs of adjacent sides. Each pair's sides are equal length.	One pair of opposite angles that are equal in degree.
T. Trapezoid	4 / 4	Sides can be any length. Has only 1 pair of parallel sides.	Angles can be any degree.
P. Parallelogram	4 / 4	Opposite sides are equal length. Opposite sides are parallel.	Opposite angles are the same.
H. Rhombus	4 / 4	All sides are equal length. Opposite sides are parallel.	Opposite angles are the same.
R. Rectangle	4 / 4	Opposite sides are equal length. Opposite sides are parallel.	All angles are 90°.
S. Square	4 / 4	All sides are equal length. Opposite sides are parallel.	All angles are 90°.

1. _____
2. _____
3. _____
4. _____
5. _____
6. _____
7. _____
8. _____
9. _____
10. _____
11. _____
12. _____





Determine if the shape shown is a Quadrilateral, Kite, Trapezoid, Parallelogram, Rhombus, Rectangle or Square (can be more than one).

Answers

	Sides / Angles	Sides	Angles
Q. Quadrilateral	4 / 4	Sides can be any length.	Angles can be any degree.
K. Kite	4 / 4	Has two pairs of adjacent sides. Each pairs sides are equal length.	One pair of opposite angles that are equal in degree.
T. Trapezoid	4 / 4	Sides can be any length. Has only 1 pair of parallel sides.	Angles can be any degree.
P. Parallelogram	4 / 4	Opposite sides are equal length. Opposite sides are parallel.	Opposite angles are the same.
H. Rhombus	4 / 4	All sides are equal length. Opposite sides are parallel.	Opposite angles are the same.
R. Rectangle	4 / 4	Opposite sides are equal length. Opposite sides are parallel.	All angles are 90°.
S. Square	4 / 4	All sides are equal length. Opposite sides are parallel.	All angles are 90°.

1. **Q,P,H,R,S**

2. **Q,P,R**

3. **Q,P**

4. **Q,P,H**

5. **Q,T**

6. **Q**

7. **Q,K**

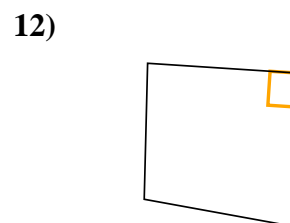
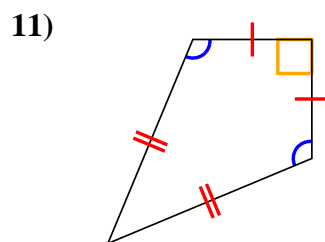
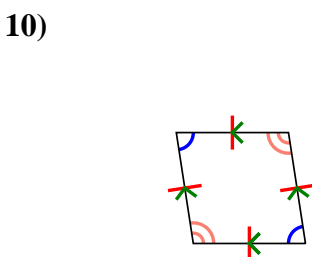
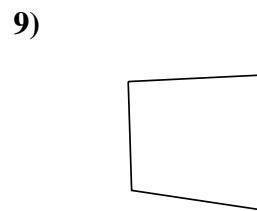
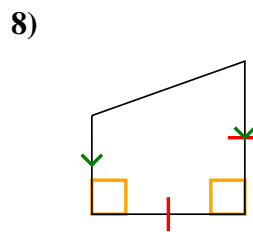
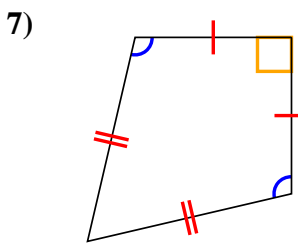
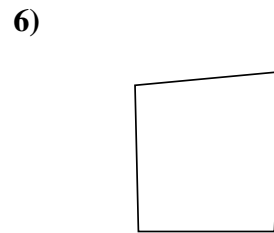
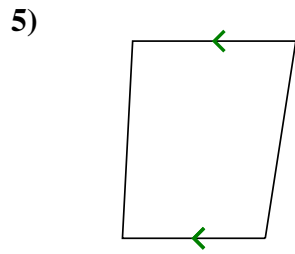
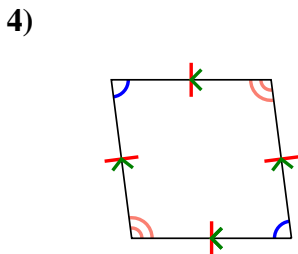
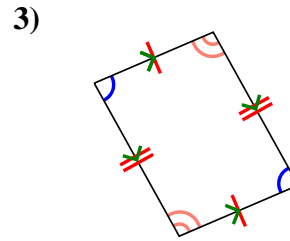
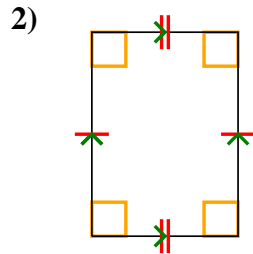
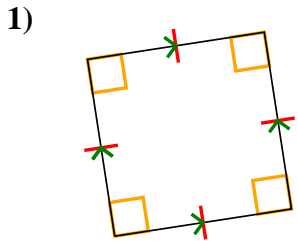
8. **Q,T**

9. **Q**

10. **Q,P,H**

11. **Q,K**

12. **Q**



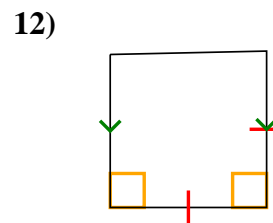
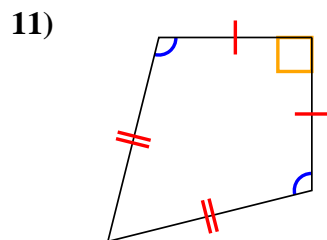
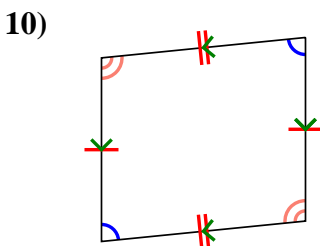
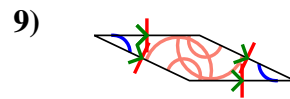
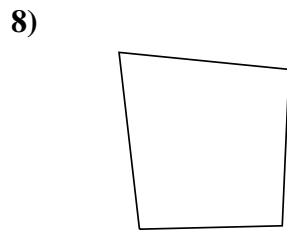
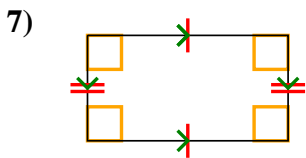
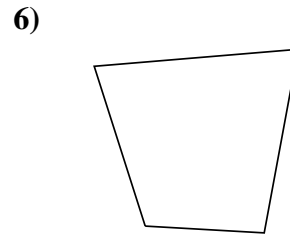
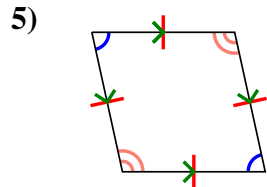
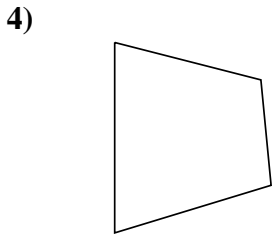
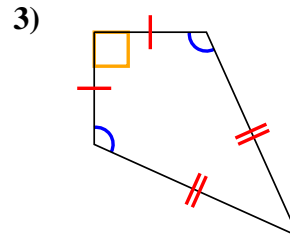
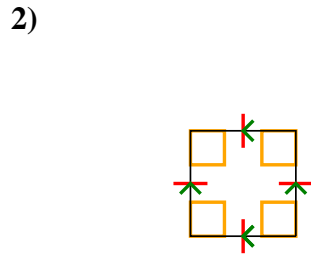
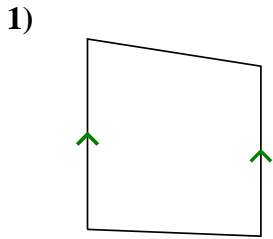


Determine if the shape shown is a Quadrilateral, Kite, Trapezoid, Parallelogram, Rhombus, Rectangle or Square (can be more than one).

Answers

	Sides / Angles	Sides	Angles
Q. Quadrilateral	4 / 4	Sides can be any length.	Angles can be any degree.
K. Kite	4 / 4	Has two pairs of adjacent sides. Each pairs sides are equal length.	One pair of opposite angles that are equal in degree.
T. Trapezoid	4 / 4	Sides can be any length. Has only 1 pair of parallel sides.	Angles can be any degree.
P. Parallelogram	4 / 4	Opposite sides are equal length. Opposite sides are parallel.	Opposite angles are the same.
H. Rhombus	4 / 4	All sides are equal length. Opposite sides are parallel.	Opposite angles are the same.
R. Rectangle	4 / 4	Opposite sides are equal length. Opposite sides are parallel.	All angles are 90°.
S. Square	4 / 4	All sides are equal length. Opposite sides are parallel.	All angles are 90°.

1. _____
2. _____
3. _____
4. _____
5. _____
6. _____
7. _____
8. _____
9. _____
10. _____
11. _____
12. _____



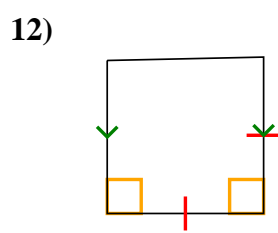
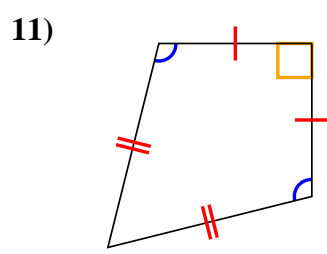
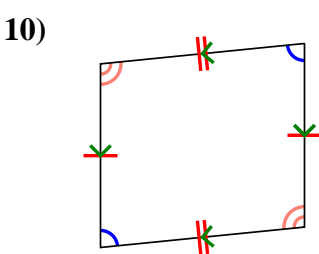
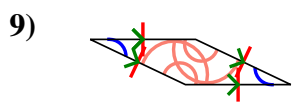
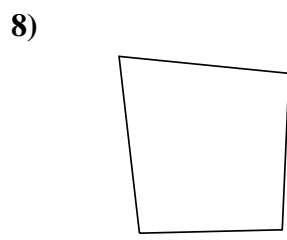
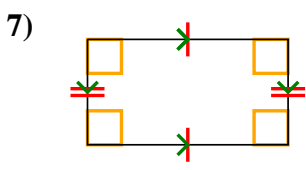
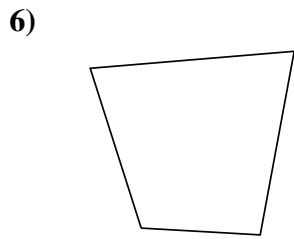
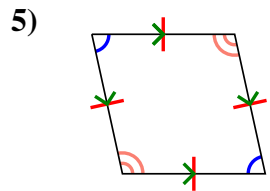
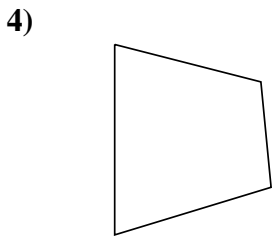
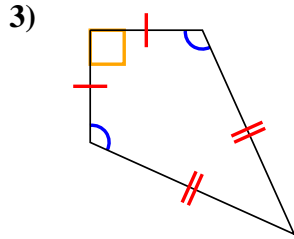
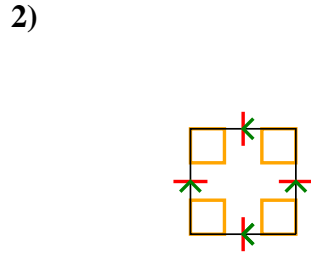
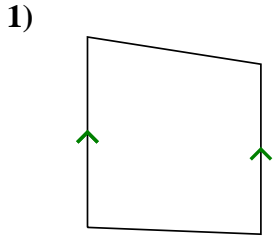


Determine if the shape shown is a Quadrilateral, Kite, Trapezoid, Parallelogram, Rhombus, Rectangle or Square (can be more than one).

Answers

	Sides / Angles	Sides	Angles
Q. Quadrilateral	4 / 4	Sides can be any length.	Angles can be any degree.
K. Kite	4 / 4	Has two pairs of adjacent sides. Each pairs sides are equal length.	One pair of opposite angles that are equal in degree.
T. Trapezoid	4 / 4	Sides can be any length. Has only 1 pair of parallel sides.	Angles can be any degree.
P. Parallelogram	4 / 4	Opposite sides are equal length. Opposite sides are parallel.	Opposite angles are the same.
H. Rhombus	4 / 4	All sides are equal length. Opposite sides are parallel.	Opposite angles are the same.
R. Rectangle	4 / 4	Opposite sides are equal length. Opposite sides are parallel.	All angles are 90°.
S. Square	4 / 4	All sides are equal length. Opposite sides are parallel.	All angles are 90°.

1. Q,T
2. Q,P,H,R,S
3. Q,K
4. Q
5. Q,P,H
6. Q
7. Q,P,R
8. Q
9. Q,P,H
10. Q,P
11. Q,K
12. Q,T



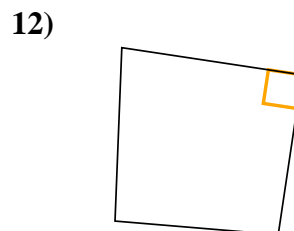
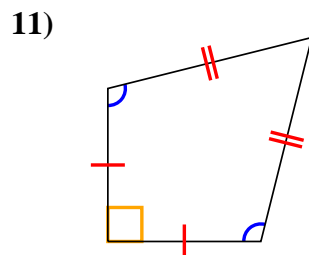
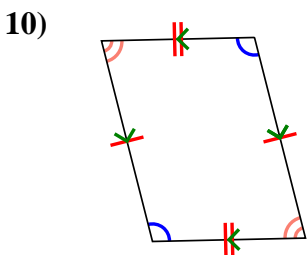
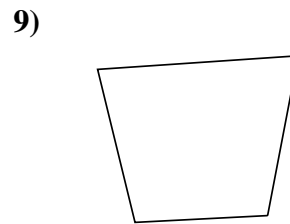
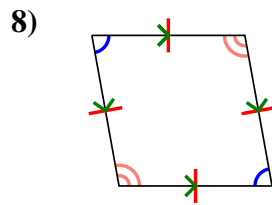
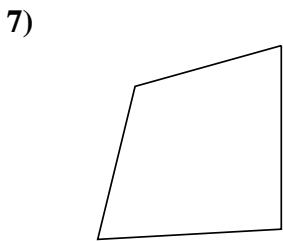
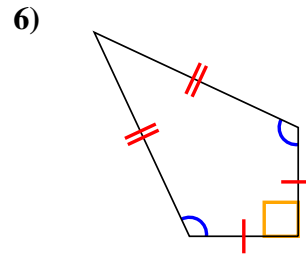
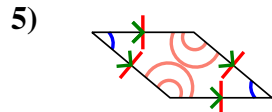
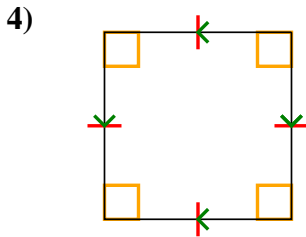
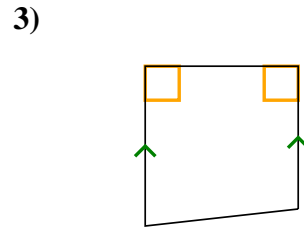
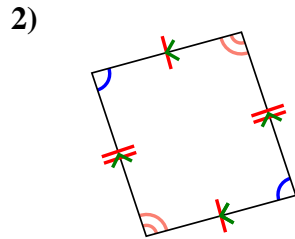
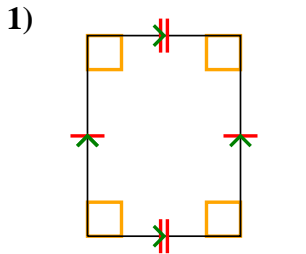


Determine if the shape shown is a Quadrilateral, Kite, Trapezoid, Parallelogram, Rhombus, Rectangle or Square (can be more than one).

Answers

	Sides / Angles	Sides	Angles
Q. Quadrilateral	4 / 4	Sides can be any length.	Angles can be any degree.
K. Kite	4 / 4	Has two pairs of adjacent sides. Each pairs sides are equal length.	One pair of opposite angles that are equal in degree.
T. Trapezoid	4 / 4	Sides can be any length. Has only 1 pair of parallel sides.	Angles can be any degree.
P. Parallelogram	4 / 4	Opposite sides are equal length. Opposite sides are parallel.	Opposite angles are the same.
H. Rhombus	4 / 4	All sides are equal length. Opposite sides are parallel.	Opposite angles are the same.
R. Rectangle	4 / 4	Opposite sides are equal length. Opposite sides are parallel.	All angles are 90°.
S. Square	4 / 4	All sides are equal length. Opposite sides are parallel.	All angles are 90°.

1. _____
2. _____
3. _____
4. _____
5. _____
6. _____
7. _____
8. _____
9. _____
10. _____
11. _____
12. _____

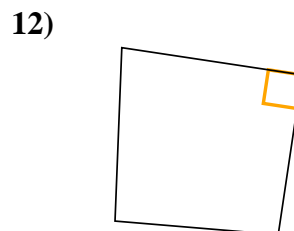
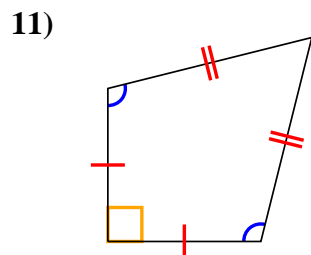
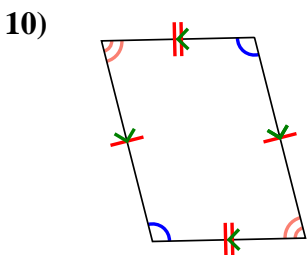
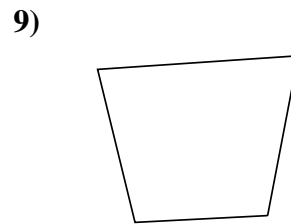
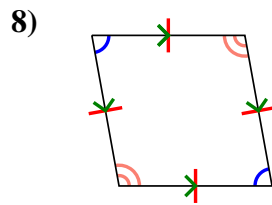
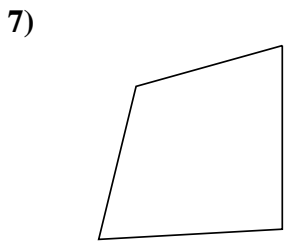
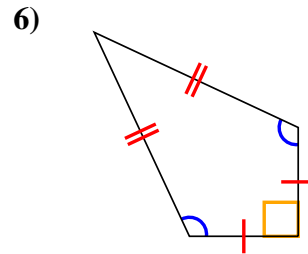
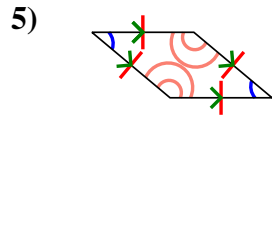
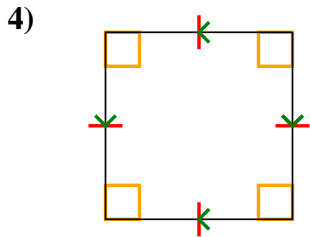
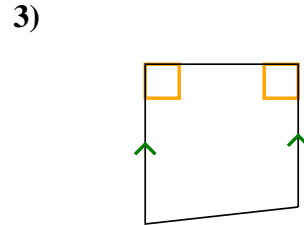
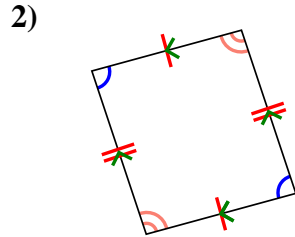
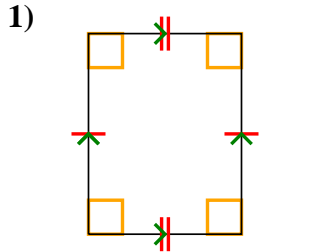




Determine if the shape shown is a Quadrilateral, Kite, Trapezoid, Parallelogram, Rhombus, Rectangle or Square (can be more than one).

Answers

	Sides / Angles	Sides	Angles
Q. Quadrilateral	4 / 4	Sides can be any length.	Angles can be any degree.
K. Kite	4 / 4	Has two pairs of adjacent sides. Each pairs sides are equal length.	One pair of opposite angles that are equal in degree.
T. Trapezoid	4 / 4	Sides can be any length. Has only 1 pair of parallel sides.	Angles can be any degree.
P. Parallelogram	4 / 4	Opposite sides are equal length. Opposite sides are parallel.	Opposite angles are the same.
H. Rhombus	4 / 4	All sides are equal length. Opposite sides are parallel.	Opposite angles are the same.
R. Rectangle	4 / 4	Opposite sides are equal length. Opposite sides are parallel.	All angles are 90°.
S. Square	4 / 4	All sides are equal length. Opposite sides are parallel.	All angles are 90°.



1. Q,P,R
2. Q,P
3. Q,T
4. Q,P,H,R,S
5. Q,P,H
6. Q,K
7. Q
8. Q,P,H
9. Q
10. Q,P
11. Q,K
12. Q