

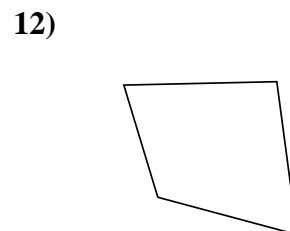
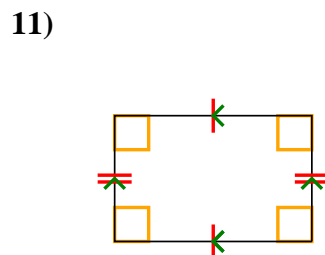
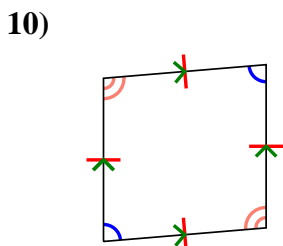
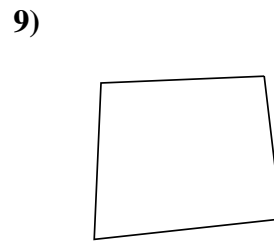
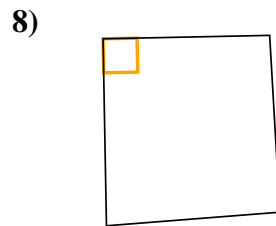
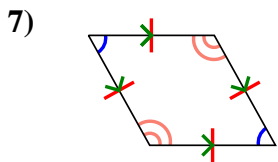
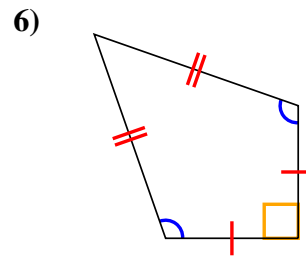
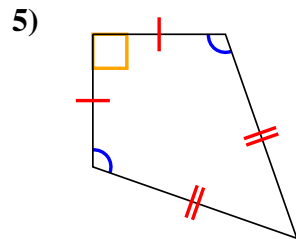
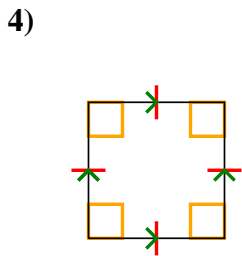
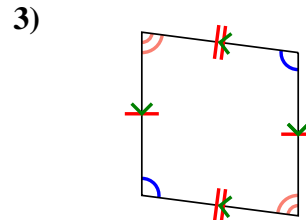
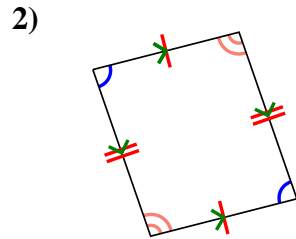
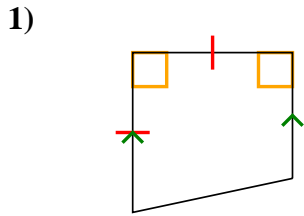


Determine if the shape shown is a Quadrilateral, Kite, Trapezoid, Parallelogram, Rhombus, Rectangle or Square (can be more than one).

Answers

	Sides / Angles	Sides	Angles
Q. Quadrilateral	4 / 4	Sides can be any length.	Angles can be any degree.
K. Kite	4 / 4	Has two pairs of adjacent sides. Each pairs sides are equal length.	One pair of opposite angles that are equal in degree.
T. Trapezoid	4 / 4	Sides can be any length. Has only 1 pair of parallel sides.	Angles can be any degree.
P. Parallelogram	4 / 4	Opposite sides are equal length. Opposite sides are parallel.	Opposite angles are the same.
H. Rhombus	4 / 4	All sides are equal length. Opposite sides are parallel.	Opposite angles are the same.
R. Rectangle	4 / 4	Opposite sides are equal length. Opposite sides are parallel.	All angles are 90°.
S. Square	4 / 4	All sides are equal length. Opposite sides are parallel.	All angles are 90°.

1. _____
2. _____
3. _____
4. _____
5. _____
6. _____
7. _____
8. _____
9. _____
10. _____
11. _____
12. _____

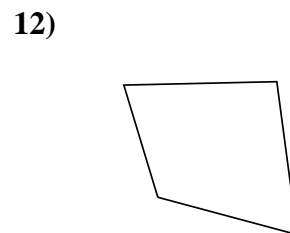
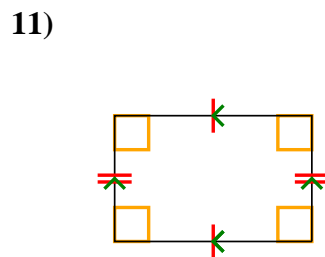
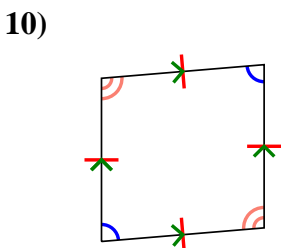
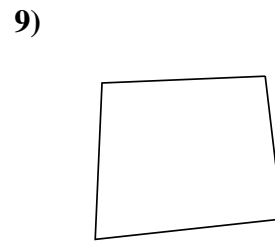
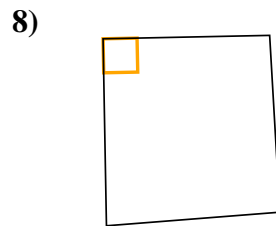
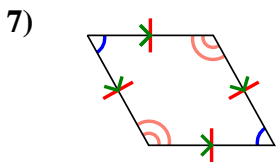
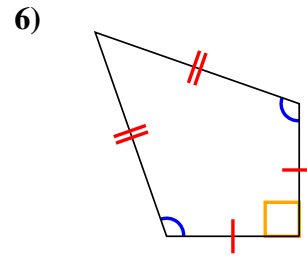
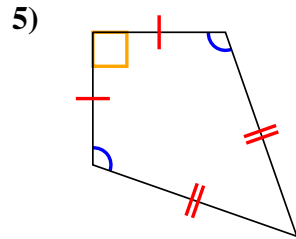
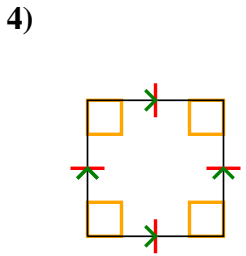
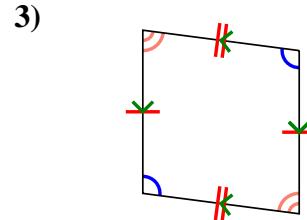
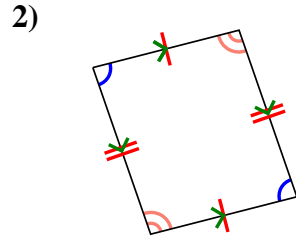
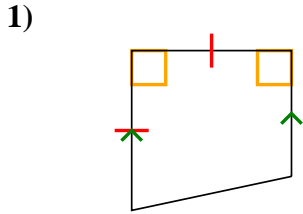




Determine if the shape shown is a Quadrilateral, Kite, Trapezoid, Parallelogram, Rhombus, Rectangle or Square (can be more than one).

Answers

	Sides / Angles	Sides	Angles
Q. Quadrilateral	4 / 4	Sides can be any length.	Angles can be any degree.
K. Kite	4 / 4	Has two pairs of adjacent sides. Each pairs sides are equal length.	One pair of opposite angles that are equal in degree.
T. Trapezoid	4 / 4	Sides can be any length. Has only 1 pair of parallel sides.	Angles can be any degree.
P. Parallelogram	4 / 4	Opposite sides are equal length. Opposite sides are parallel.	Opposite angles are the same.
H. Rhombus	4 / 4	All sides are equal length. Opposite sides are parallel.	Opposite angles are the same.
R. Rectangle	4 / 4	Opposite sides are equal length. Opposite sides are parallel.	All angles are 90°.
S. Square	4 / 4	All sides are equal length. Opposite sides are parallel.	All angles are 90°.



1. Q,T

2. Q,P

3. Q,P

4. Q,P,H,R,S

5. Q,K

6. Q,K

7. Q,P,H

8. Q

9. Q

10. Q,P,H

11. Q,P,R

12. Q