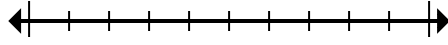




Mark the location (approximate) on the numberline and then solve.

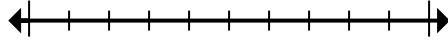
Answers

1) Round 822,598 to the nearest hundred thousand.



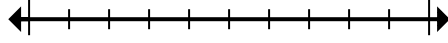
1. _____

2) Round 9,444 to the nearest thousand.



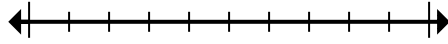
2. _____

3) Round 9,800,048 to the nearest hundred thousand.



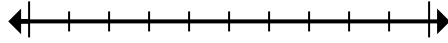
3. _____

4) Round 3,970 to the nearest thousand.



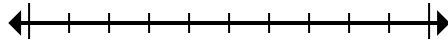
4. _____

5) Round 1,362,274 to the nearest hundred.



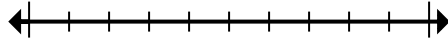
5. _____

6) Round 576 to the nearest hundred.



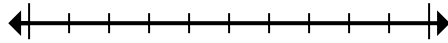
6. _____

7) Round 89,063 to the nearest thousand.



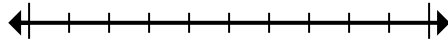
7. _____

8) Round 6,150,390 to the nearest ten thousand.



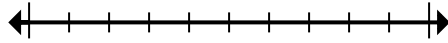
8. _____

9) Round 778,323 to the nearest hundred thousand.



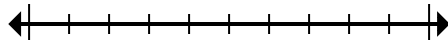
9. _____

10) Round 33,724 to the nearest ten thousand.



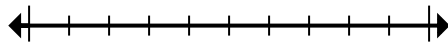
10. _____

11) Round 5,037,475 to the nearest ten thousand.



11. _____

12) Round 17,879 to the nearest ten thousand.

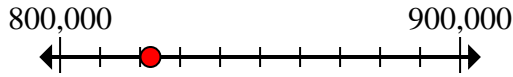


12. _____

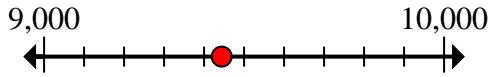


Mark the location (approximate) on the numberline and then solve.

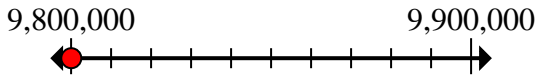
1) Round 822,598 to the nearest hundred thousand.



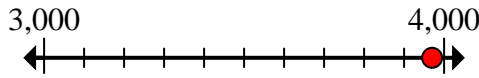
2) Round 9,444 to the nearest thousand.



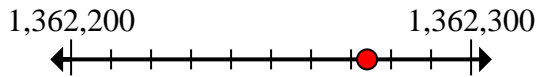
3) Round 9,800,048 to the nearest hundred thousand.



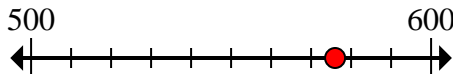
4) Round 3,970 to the nearest thousand.



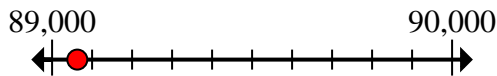
5) Round 1,362,274 to the nearest hundred.



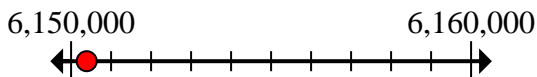
6) Round 576 to the nearest hundred.



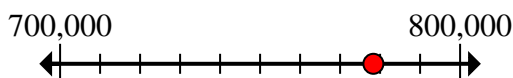
7) Round 89,063 to the nearest thousand.



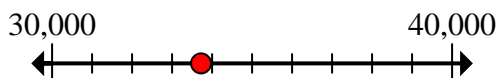
8) Round 6,150,390 to the nearest ten thousand.



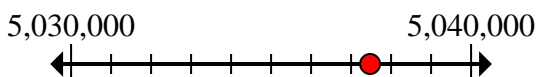
9) Round 778,323 to the nearest hundred thousand.



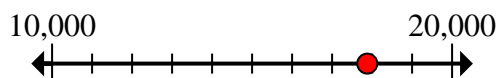
10) Round 33,724 to the nearest ten thousand.



11) Round 5,037,475 to the nearest ten thousand.



12) Round 17,879 to the nearest ten thousand.



Answers

1. **800,000**

2. **9,000**

3. **9,800,000**

4. **4,000**

5. **1,362,300**

6. **600**

7. **89,000**

8. **6,150,000**

9. **800,000**

10. **30,000**

11. **5,040,000**

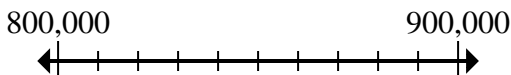
12. **20,000**



Mark the location (approximate) on the numberline and then solve.

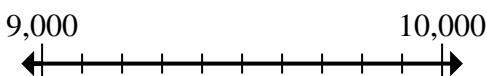
Answers

1) Round 822,598 to the nearest hundred thousand.



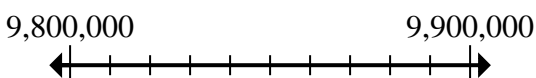
1. _____

2) Round 9,444 to the nearest thousand.



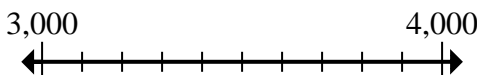
2. _____

3) Round 9,800,048 to the nearest hundred thousand.



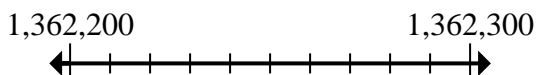
3. _____

4) Round 3,970 to the nearest thousand.



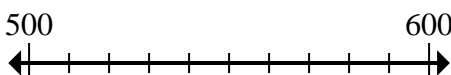
4. _____

5) Round 1,362,274 to the nearest hundred.



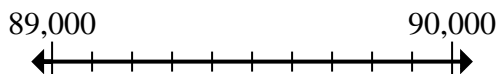
5. _____

6) Round 576 to the nearest hundred.



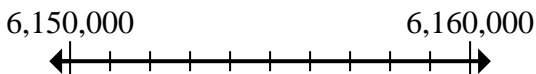
6. _____

7) Round 89,063 to the nearest thousand.



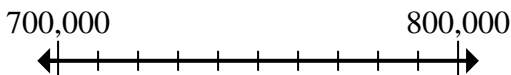
7. _____

8) Round 6,150,390 to the nearest ten thousand.



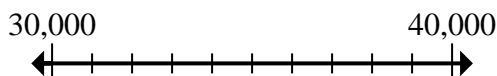
8. _____

9) Round 778,323 to the nearest hundred thousand.



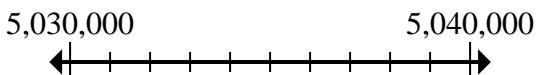
9. _____

10) Round 33,724 to the nearest ten thousand.



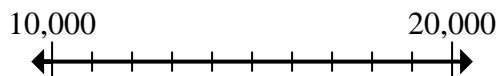
10. _____

11) Round 5,037,475 to the nearest ten thousand.



11. _____

12) Round 17,879 to the nearest ten thousand.



12. _____