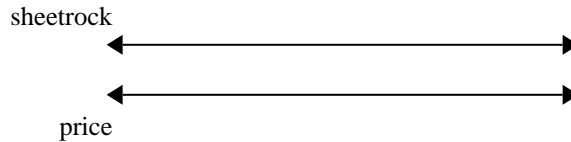




Use the double numberline to solve the problems.

Answers

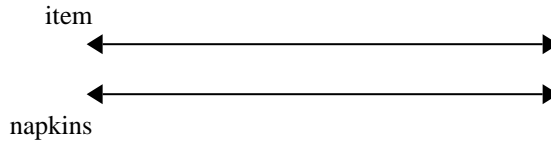
1) A builder could get 6 sheets of sheetrock for \$9. If he bought 12 sheets, how much money would he have spent?



1. \_\_\_\_\_

2. \_\_\_\_\_

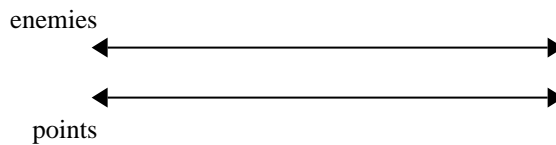
2) A sloppy joe restaurant gave 3 napkins for every 7 items ordered. If someone bought 14 items, how many napkins should they get?



3. \_\_\_\_\_

4. \_\_\_\_\_

3) In a video game for every 6 enemies defeat, you earned 3 points. If you defeated 48 enemies, how many points would you have earned?

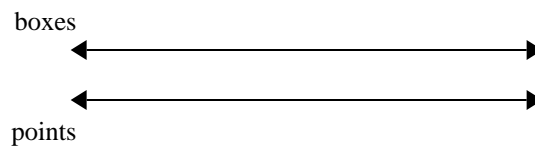


5. \_\_\_\_\_

6. \_\_\_\_\_

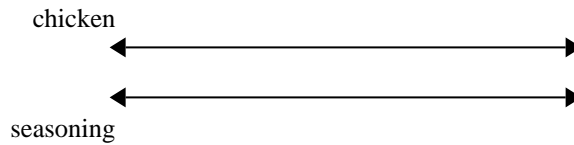
7. \_\_\_\_\_

4) At a school fundraiser for every 9 boxes of chocolate sold you earn 5 points. If you were to sell 72 boxes, how many points would you have earned?

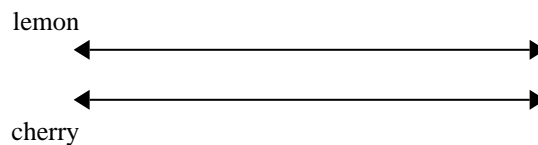


8. \_\_\_\_\_

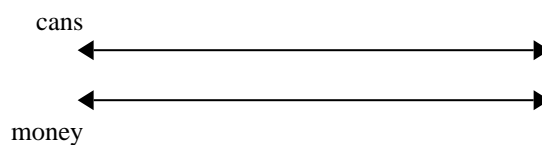
5) A recipe call for 5 teaspoons of seasoning for every 6 batches of chicken. If you have 12 batches of chicken, how many teaspoons of seasoning will you need?




6) A box of candy had 4 cherry pieces for every 9 lemon pieces. If the box had 45 lemon pieces, how many cherry pieces would there be?



7) For every 6 cans Oliver collected for recycling he earned 9 cents. After he collected 60 cans, how much money would he have earned?



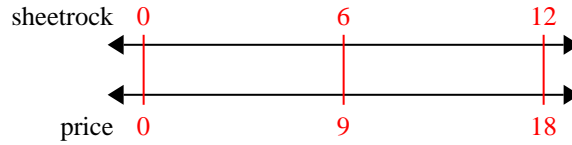
8) The ratio of boys to girls at the park was 9 to 6. If there were 45 boys, how many girls were there?



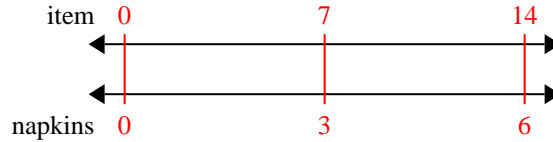


Use the double numberline to solve the problems.

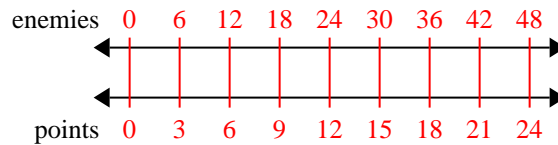
- 1) A builder could get 6 sheets of sheetrock for \$9. If he bought 12 sheets, how much money would he have spent?



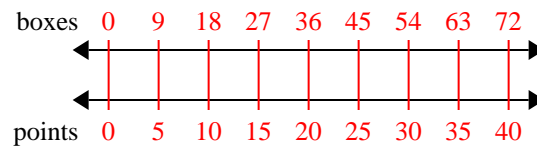
- 2) A sloppy joe restaurant gave 3 napkins for every 7 items ordered. If someone bought 14 items, how many napkins should they get?



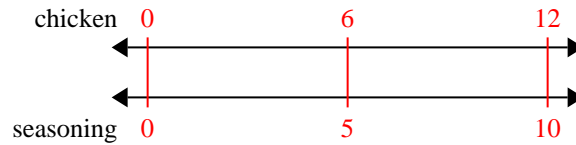
- 3) In a video game for every 6 enemies defeat, you earned 3 points. If you defeated 48 enemies, how many points would you have earned?



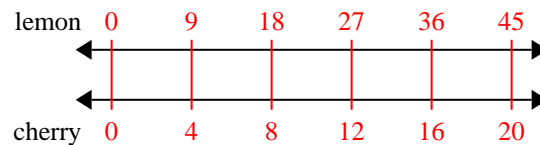
- 4) At a school fundraiser for every 9 boxes of chocolate sold you earn 5 points. If you were to sell 72 boxes, how many points would you have earned?



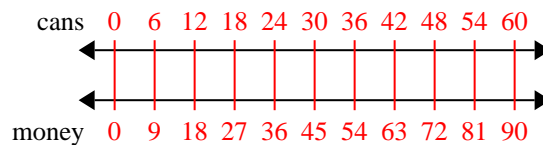
- 5) A recipe call for 5 teaspoons of seasoning for every 6 batches of chicken. If you have 12 batches of chicken, how many teaspoons of seasoning will you need?



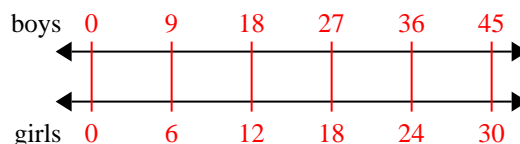
- 6) A box of candy had 4 cherry pieces for every 9 lemon pieces. If the box had 45 lemon pieces, how many cherry pieces would there be?



- 7) For every 6 cans Oliver collected for recycling he earned 9 cents. After he collected 60 cans, how much money would he have earned?



- 8) The ratio of boys to girls at the park was 9 to 6. If there were 45 boys, how many girls were there?

**Answers**

1. **18**
2. **6**
3. **24**
4. **40**
5. **10**
6. **20**
7. **90**
8. **30**