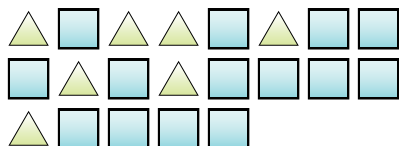





Solve each problem.

Ex) What is the ratio of triangles to squares?



1) What is the ratio of triangles to hearts?



**Answers**

Ex. **7:14**

1. \_\_\_\_\_

2. \_\_\_\_\_

3. \_\_\_\_\_

4. \_\_\_\_\_

5. \_\_\_\_\_

6. \_\_\_\_\_

7. \_\_\_\_\_


8. \_\_\_\_\_

9. \_\_\_\_\_


10. \_\_\_\_\_

11. \_\_\_\_\_

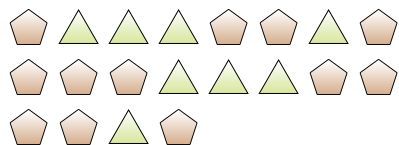
2) What is the ratio of circles to stars?



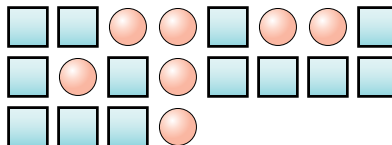
3) What is the ratio of moons to triangles?



4) What is the ratio of pentagons to triangles?



5) What is the ratio of circles to squares?



6) What is the ratio of stars to hearts?



7) What is the ratio of stars to squares?



8) What is the ratio of stars to hearts?



9) What is the ratio of stars to hearts?



10) What is the ratio of stars to squares?



11) What is the ratio of stars to pentagons?



