

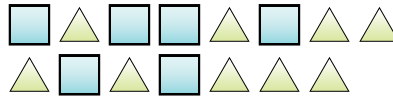


Solve each problem.

Ex) What is the ratio of moons to stars?




1) What is the ratio of squares to triangles?




Answers

Ex. 8:4

2) What is the ratio of stars to circles?



3) What is the ratio of stars to squares?



1. \_\_\_\_\_

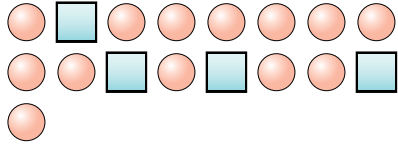
2. \_\_\_\_\_

3. \_\_\_\_\_


4. \_\_\_\_\_

5. \_\_\_\_\_

4) What is the ratio of circles to squares?



5) What is the ratio of triangles to hearts?




6. \_\_\_\_\_

7. \_\_\_\_\_


8. \_\_\_\_\_

9. \_\_\_\_\_

6) What is the ratio of stars to squares?




7) What is the ratio of pentagons to hearts?



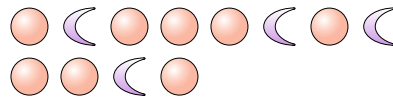
10. \_\_\_\_\_

11. \_\_\_\_\_

8) What is the ratio of circles to hearts?




9) What is the ratio of moons to circles?



10) What is the ratio of moons to stars?



11) What is the ratio of stars to circles?



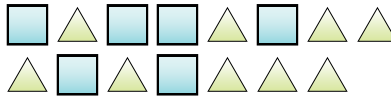


Solve each problem.

Ex) What is the ratio of moons to stars?




1) What is the ratio of squares to triangles?



Answers

Ex. 8:4

2) What is the ratio of stars to circles?

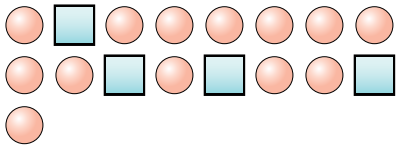


3) What is the ratio of stars to squares?




1. 6:9

4) What is the ratio of circles to squares?



5) What is the ratio of triangles to hearts?



2. 10:12

3. 4:12

4. 13:4

5. 13:12


6. 8:15

7. 8:5


8. 5:14

9. 4:8

6) What is the ratio of stars to squares?




7) What is the ratio of pentagons to hearts?



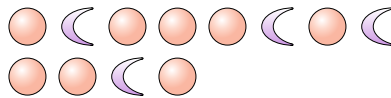
10. 12:12

11. 8:15

8) What is the ratio of circles to hearts?



9) What is the ratio of moons to circles?



10) What is the ratio of moons to stars?



11) What is the ratio of stars to circles?

