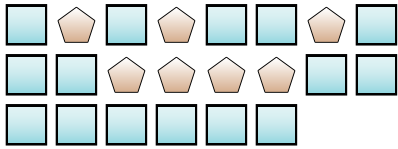


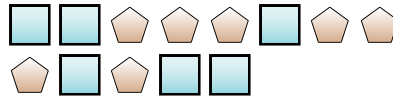


Solve each problem.

Ex) What is the ratio of pentagons to squares?



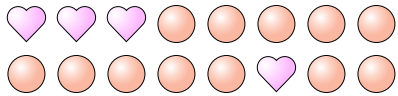
1) What is the ratio of pentagons to squares?



Answers

Ex. 7:15

2) What is the ratio of hearts to circles?



3) What is the ratio of stars to hearts?



1. \_\_\_\_\_

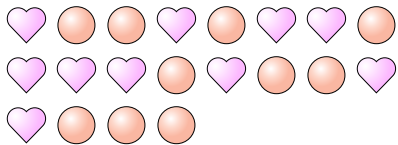
2. \_\_\_\_\_

3. \_\_\_\_\_

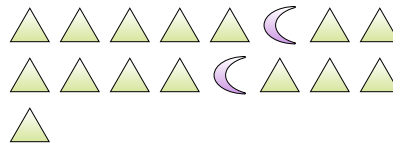
4. \_\_\_\_\_

5. \_\_\_\_\_

4) What is the ratio of hearts to circles?



5) What is the ratio of moons to triangles?



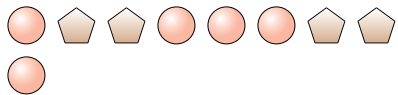
6. \_\_\_\_\_

7. \_\_\_\_\_

8. \_\_\_\_\_

9. \_\_\_\_\_

6) What is the ratio of pentagons to circles?



7) What is the ratio of hearts to moons?




10. \_\_\_\_\_

11. \_\_\_\_\_

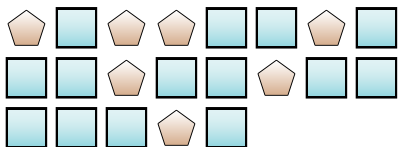
8) What is the ratio of triangles to hearts?




9) What is the ratio of hearts to circles?



10) What is the ratio of squares to pentagons?



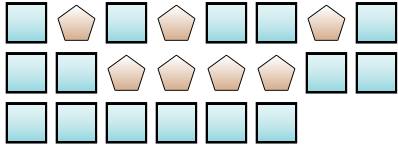
11) What is the ratio of circles to stars?



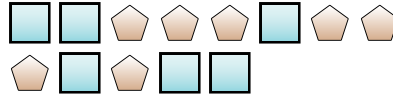


Solve each problem.

Ex) What is the ratio of pentagons to squares?



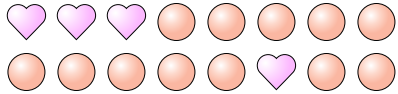
1) What is the ratio of pentagons to squares?




Answers

Ex. 7:15

2) What is the ratio of hearts to circles?



3) What is the ratio of stars to hearts?



1. 7:6

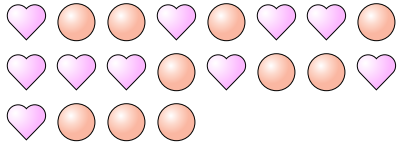
2. 4:12

3. 7:11

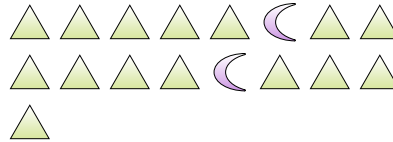
4. 10:10

5. 2:15

4) What is the ratio of hearts to circles?



5) What is the ratio of moons to triangles?

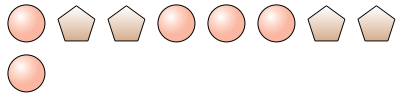


6. 4:5


7. 11:11

8. 2:5

6) What is the ratio of pentagons to circles?



7) What is the ratio of hearts to moons?



9. 15:13


10. 14:7

11. 14:7

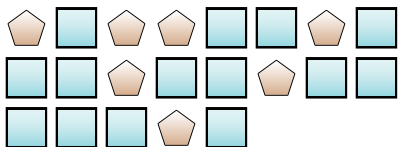
8) What is the ratio of triangles to hearts?



9) What is the ratio of hearts to circles?



10) What is the ratio of squares to pentagons?



11) What is the ratio of circles to stars?

