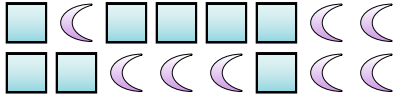




Solve each problem.

Ex) What is the ratio of squares to moons?



1) What is the ratio of triangles to stars?



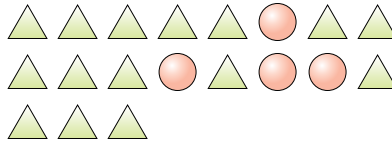
Answers

Ex. 8:8

2) What is the ratio of squares to stars?



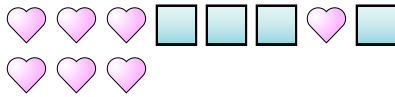
3) What is the ratio of circles to triangles?



1. \_\_\_\_\_

2. \_\_\_\_\_

4) What is the ratio of hearts to squares?



5) What is the ratio of moons to hearts?



3. \_\_\_\_\_

4. \_\_\_\_\_

5. \_\_\_\_\_

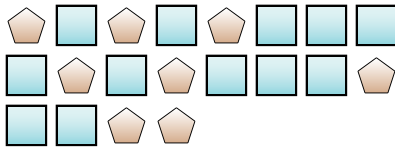
6. \_\_\_\_\_

7. \_\_\_\_\_


8. \_\_\_\_\_

9. \_\_\_\_\_

6) What is the ratio of pentagons to squares?



7) What is the ratio of squares to stars?




10. \_\_\_\_\_

11. \_\_\_\_\_

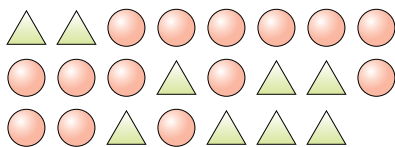
8) What is the ratio of hearts to moons?



9) What is the ratio of pentagons to hearts?



10) What is the ratio of triangles to circles?



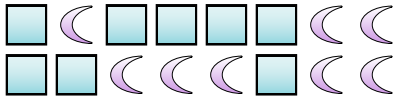
11) What is the ratio of stars to moons?





Solve each problem.

Ex) What is the ratio of squares to moons?



1) What is the ratio of triangles to stars?



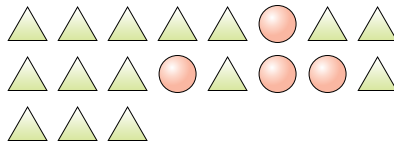
Answers

Ex. 8:8

2) What is the ratio of squares to stars?



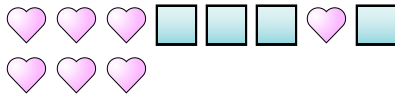
3) What is the ratio of circles to triangles?



1. 13:11

2. 2:2

4) What is the ratio of hearts to squares?



5) What is the ratio of moons to hearts?



3. 4:15

4. 7:4

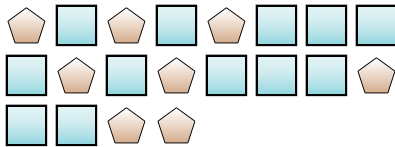
5. 9:3

6. 8:12


7. 11:10

8. 6:15

6) What is the ratio of pentagons to squares?



7) What is the ratio of squares to stars?



9. 12:14


10. 9:14

11. 11:11

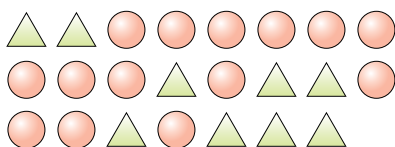
8) What is the ratio of hearts to moons?



9) What is the ratio of pentagons to hearts?



10) What is the ratio of triangles to circles?



11) What is the ratio of stars to moons?

