



Solve each problem using the distributive property of division.

1) $400 \div 5 =$

2) $368 \div 8 =$

3) $204 \div 3 =$

4) $84 \div 3 =$

5) $297 \div 3 =$

6) $474 \div 6 =$

7) $402 \div 6 =$

8) $175 \div 7 =$

9) $600 \div 6 =$

10) $864 \div 9 =$

Answers

1. _____

2. _____

3. _____

4. _____

5. _____

6. _____

7. _____

8. _____


9. _____

10. _____

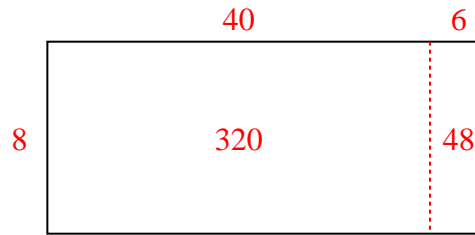


Solve each problem using the distributive property of division.

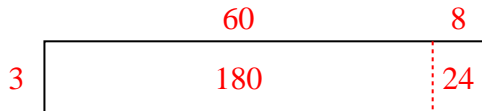
1) $400 \div 5 =$



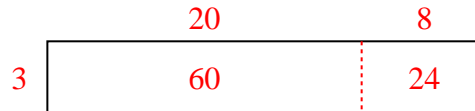
2) $368 \div 8 =$



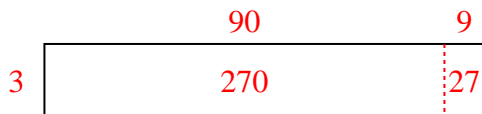
3) $204 \div 3 =$



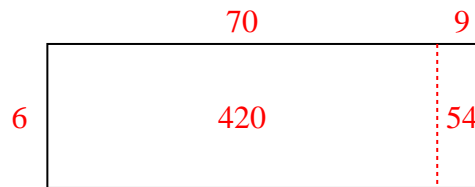
4) $84 \div 3 =$



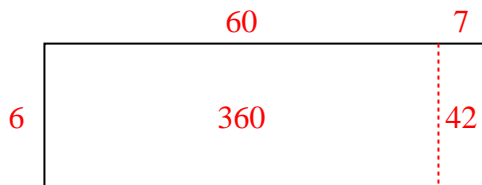
5) $297 \div 3 =$



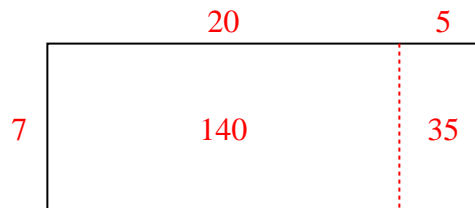
6) $474 \div 6 =$



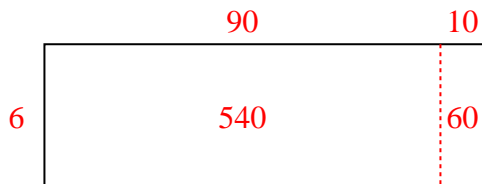
7) $402 \div 6 =$




8) $175 \div 7 =$



9) $600 \div 6 =$



10) $864 \div 9 =$

Answers1. **80**2. **46**3. **68**4. **28**5. **99**6. **79**7. **67**8. **25**9. **100**10. **96**