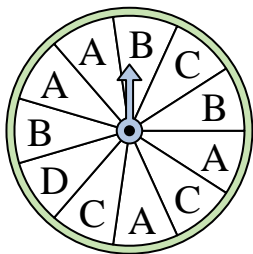


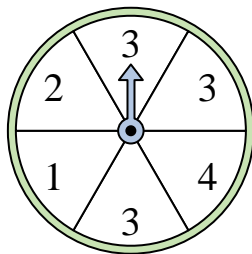


Solve each problem.

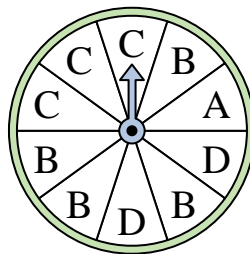
- 1) Which letter is the spinner least likely to land on?




- 2) Which number is the spinner most likely to land on?



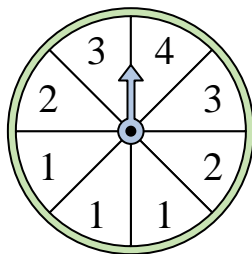
- 3) Which letter is the spinner most likely to land on?



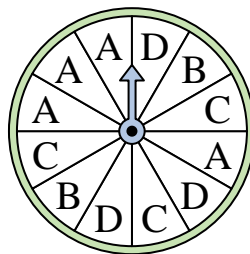
- 4) Which number is the spinner most likely to land on?



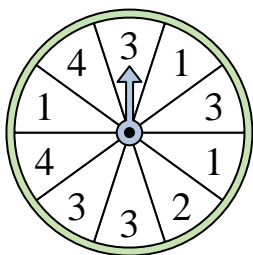
- 5) Which number is the spinner most likely to land on?



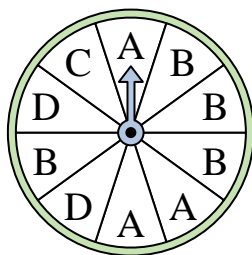
- 6) Which letter is the spinner least likely to land on?



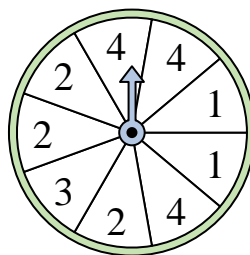
- 7) Which number is the spinner least likely to land on?




- 8) Which letter is the spinner least likely to land on?




- 9) Which two numbers is the spinner equally likely to land on?



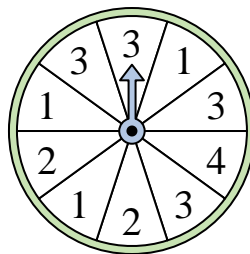
- 10) Which number is the spinner least likely to land on?



- 11) Which two numbers is the spinner equally likely to land on?



- 12) Which number is the spinner most likely to land on?



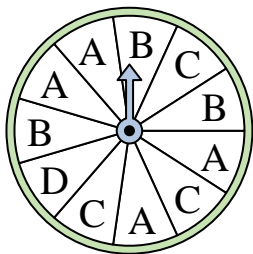
Answers

- 1. _____
- 2. _____
- 3. _____
- 4. _____
- 5. _____
- 6. _____
- 7. _____
- 8. _____
- 9. _____
- 10. _____
- 11. _____
- 12. _____

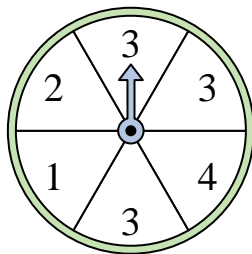


Solve each problem.

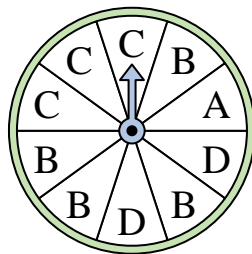
- 1) Which letter is the spinner least likely to land on?




- 2) Which number is the spinner most likely to land on?



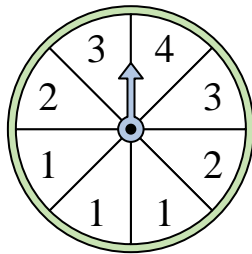
- 3) Which letter is the spinner most likely to land on?



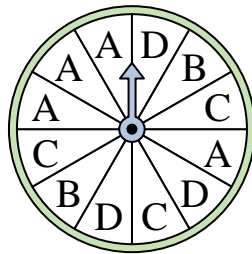
- 4) Which number is the spinner most likely to land on?




- 5) Which number is the spinner most likely to land on?



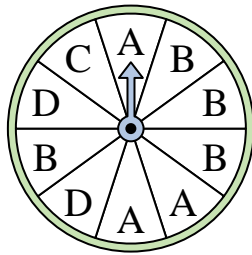
- 6) Which letter is the spinner least likely to land on?




- 7) Which number is the spinner least likely to land on?




- 8) Which letter is the spinner least likely to land on?




- 9) Which two numbers is the spinner equally likely to land on?




- 10) Which number is the spinner least likely to land on?



- 11) Which two numbers is the spinner equally likely to land on?



- 12) Which number is the spinner most likely to land on?



Answers

- 1. **D**
- 2. **3**
- 3. **B**
- 4. **4**
- 5. **1**
- 6. **B**
- 7. **2**
- 8. **C**
- 9. **2 & 4**
- 10. **4**
- 11. **2 & 3**
- 12. **3**