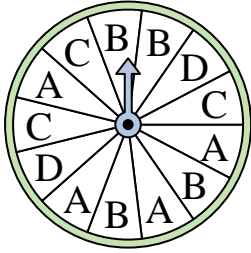




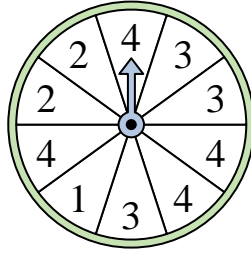
Solve each problem.

Answers

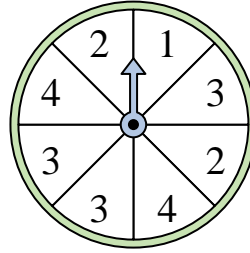
- 1) Which letter is the spinner least likely to land on?



- 2) Which number is the spinner least likely to land on?



- 3) Which number is the spinner most likely to land on?



1. _____

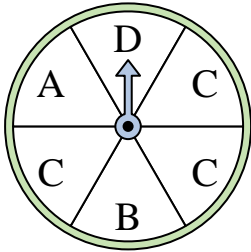
2. _____

3. _____

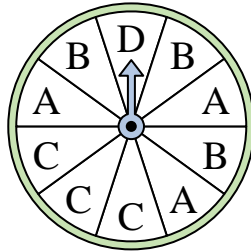
4. _____

5. _____

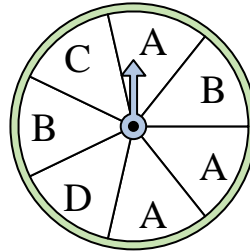
- 4) Which letter is the spinner most likely to land on?



- 5) Which letter is the spinner least likely to land on?



- 6) Which two letters is the spinner equally likely to land on?




6. _____

7. _____


8. _____

9. _____

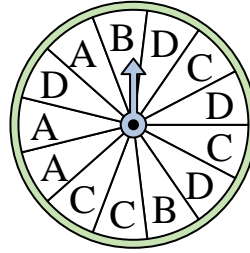
- 7) Which number is the spinner most likely to land on?



- 8) Which number is the spinner most likely to land on?



- 9) Which letter is the spinner least likely to land on?




10. _____

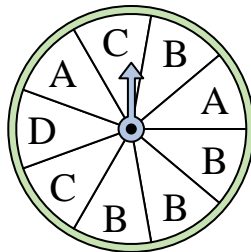
11. _____

12. _____

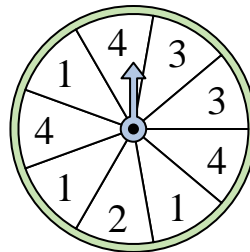
- 10) Which number is the spinner least likely to land on?



- 11) Which letter is the spinner most likely to land on?



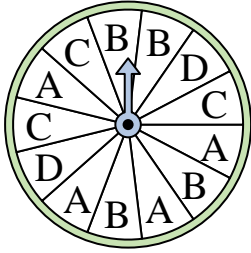
- 12) Which two numbers is the spinner equally likely to land on?



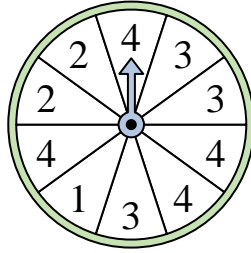


Solve each problem.

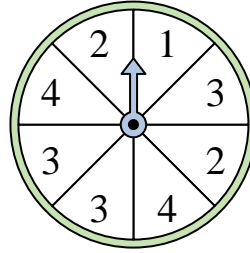
- 1) Which letter is the spinner least likely to land on?



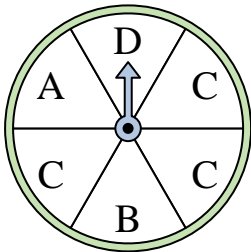
- 2) Which number is the spinner least likely to land on?



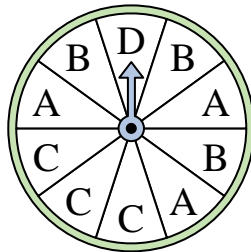
- 3) Which number is the spinner most likely to land on?



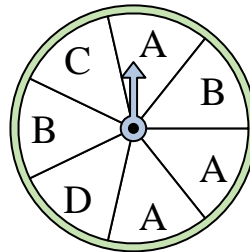
- 4) Which letter is the spinner most likely to land on?




- 5) Which letter is the spinner least likely to land on?




- 6) Which two letters is the spinner equally likely to land on?



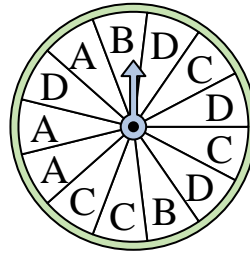
- 7) Which number is the spinner most likely to land on?




- 8) Which number is the spinner most likely to land on?



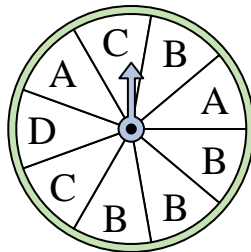
- 9) Which letter is the spinner least likely to land on?



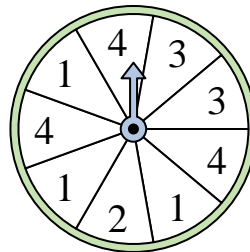
- 10) Which number is the spinner least likely to land on?



- 11) Which letter is the spinner most likely to land on?



- 12) Which two numbers is the spinner equally likely to land on?



Answers

1. **D**

2. **1**

3. **3**

4. **C**

5. **D**

6. **C & D**

7. **3**

8. **3**

9. **B**

10. **3**

11. **B**

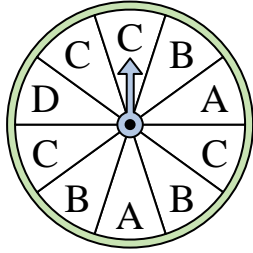
12. **1 & 4**




Solve each problem.

Answers

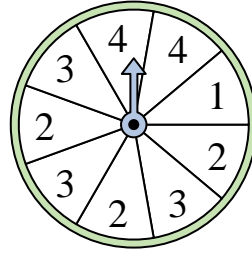
- 1) Which letter is the spinner least likely to land on?



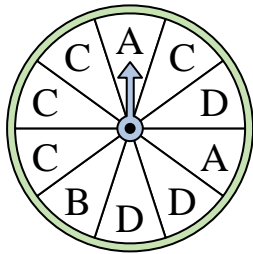
- 2) Which number is the spinner least likely to land on?




- 3) Which two numbers is the spinner equally likely to land on?



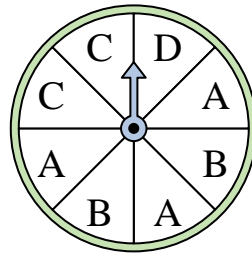
- 4) Which letter is the spinner least likely to land on?



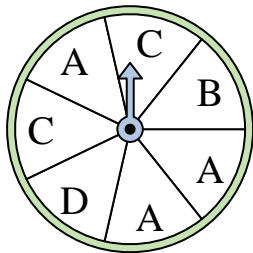
- 5) Which number is the spinner most likely to land on?



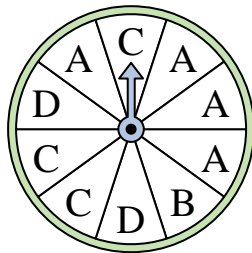
- 6) Which two letters is the spinner equally likely to land on?




- 7) Which letter is the spinner most likely to land on?




- 8) Which letter is the spinner most likely to land on?



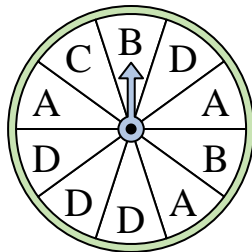
- 9) Which number is the spinner least likely to land on?



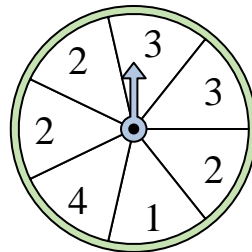
- 10) Which number is the spinner least likely to land on?



- 11) Which letter is the spinner most likely to land on?



- 12) Which two numbers is the spinner equally likely to land on?

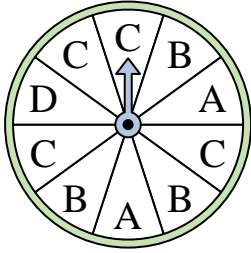


1. _____
2. _____
3. _____
4. _____
5. _____
6. _____
7. _____
8. _____
9. _____
10. _____
11. _____
12. _____




Solve each problem.

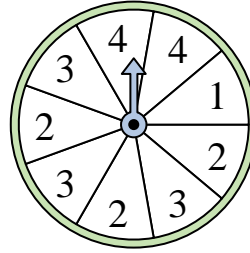
- 1) Which letter is the spinner least likely to land on?



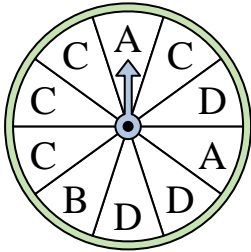
- 2) Which number is the spinner least likely to land on?




- 3) Which two numbers is the spinner equally likely to land on?



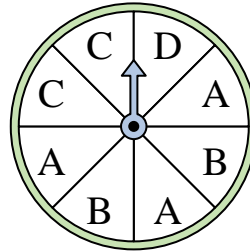
- 4) Which letter is the spinner least likely to land on?



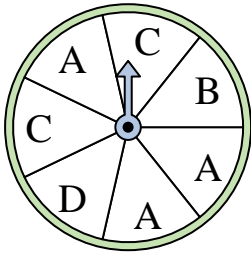
- 5) Which number is the spinner most likely to land on?



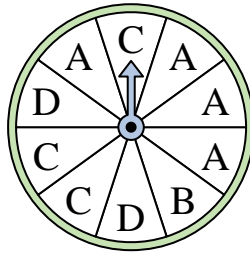
- 6) Which two letters is the spinner equally likely to land on?




- 7) Which letter is the spinner most likely to land on?




- 8) Which letter is the spinner most likely to land on?



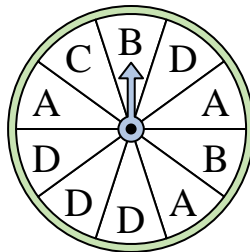
- 9) Which number is the spinner least likely to land on?



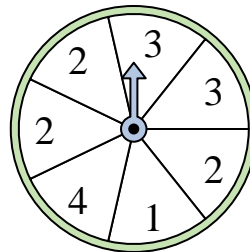
- 10) Which number is the spinner least likely to land on?



- 11) Which letter is the spinner most likely to land on?



- 12) Which two numbers is the spinner equally likely to land on?



Answers

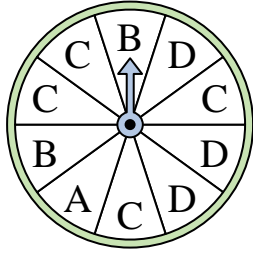
1. **D**
2. **3**
3. **2 & 3**
4. **B**
5. **2**
6. **B & C**
7. **A**
8. **A**
9. **4**
10. **2**
11. **D**
12. **1 & 4**



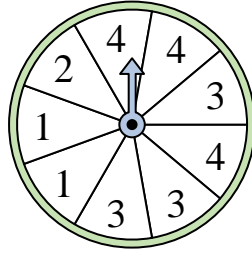
Solve each problem.

Answers

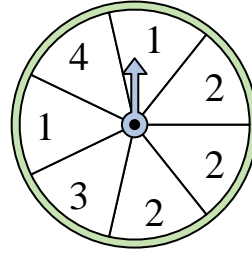
- 1) Which letter is the spinner most likely to land on?



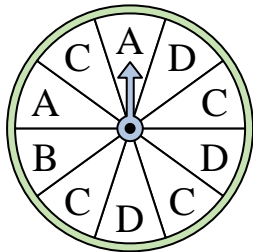
- 2) Which two numbers is the spinner equally likely to land on?



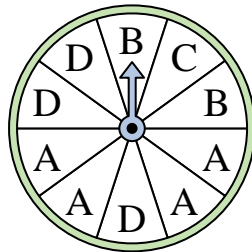
- 3) Which number is the spinner most likely to land on?



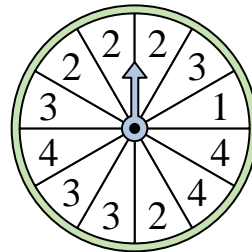
- 4) Which letter is the spinner least likely to land on?




- 5) Which letter is the spinner most likely to land on?




- 6) Which number is the spinner least likely to land on?



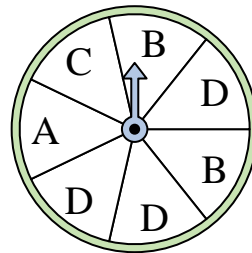
- 7) Which two numbers is the spinner equally likely to land on?



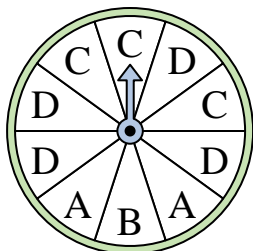
- 8) Which number is the spinner most likely to land on?



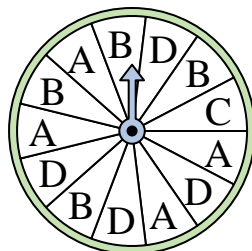
- 9) Which two letters is the spinner equally likely to land on?



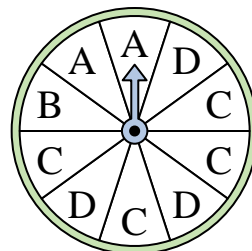
- 10) Which letter is the spinner least likely to land on?



- 11) Which letter is the spinner least likely to land on?



- 12) Which letter is the spinner least likely to land on?

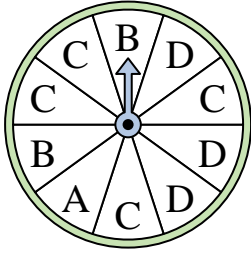


1. _____
2. _____
3. _____
4. _____
5. _____
6. _____
7. _____
8. _____
9. _____
10. _____
11. _____
12. _____

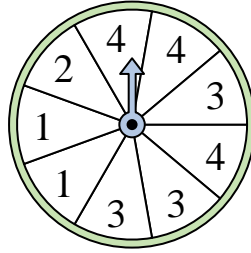


Solve each problem.

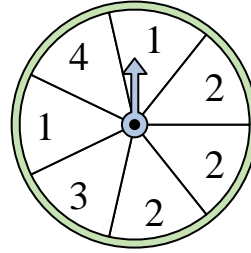
- 1) Which letter is the spinner most likely to land on?



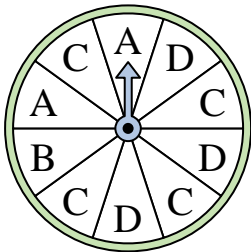
- 2) Which two numbers is the spinner equally likely to land on?



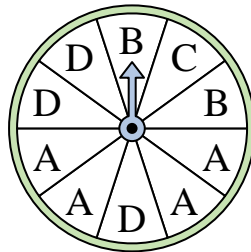
- 3) Which number is the spinner most likely to land on?



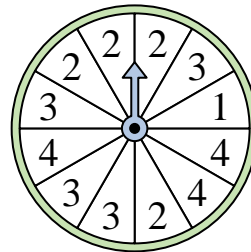
- 4) Which letter is the spinner least likely to land on?




- 5) Which letter is the spinner most likely to land on?



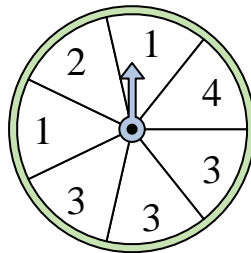
- 6) Which number is the spinner least likely to land on?



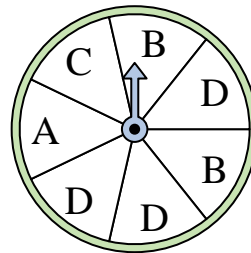
- 7) Which two numbers is the spinner equally likely to land on?



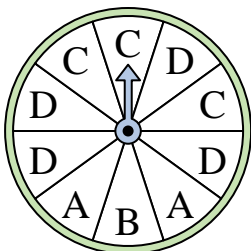
- 8) Which number is the spinner most likely to land on?



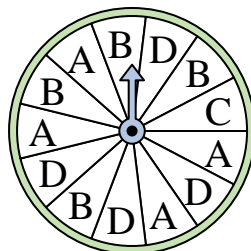
- 9) Which two letters is the spinner equally likely to land on?



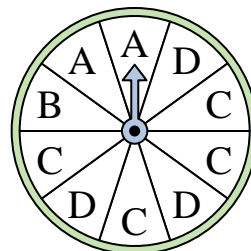
- 10) Which letter is the spinner least likely to land on?



- 11) Which letter is the spinner least likely to land on?



- 12) Which letter is the spinner least likely to land on?



Answers

1. **C**

2. **3 & 4**

3. **2**

4. **B**

5. **A**

6. **1**

7. **1 & 4**

8. **3**

9. **A & C**

10. **B**

11. **C**

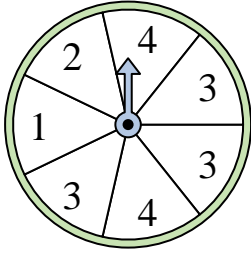
12. **B**




Solve each problem.

Answers


- 1) Which two numbers is the spinner equally likely to land on?



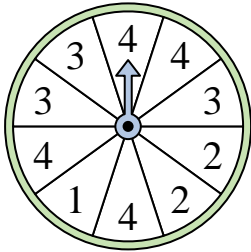
- 2) Which number is the spinner least likely to land on?




- 3) Which number is the spinner least likely to land on?



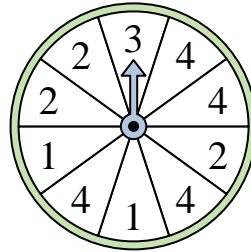
- 4) Which number is the spinner most likely to land on?




- 5) Which two numbers is the spinner equally likely to land on?




- 6) Which number is the spinner least likely to land on?



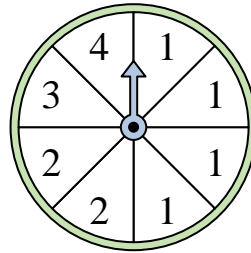
- 7) Which two numbers is the spinner equally likely to land on?



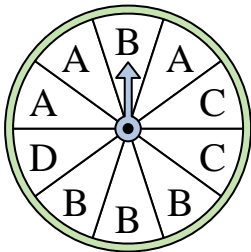
- 8) Which number is the spinner most likely to land on?



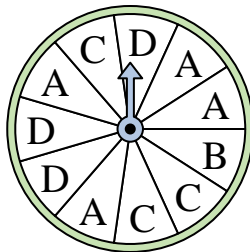
- 9) Which number is the spinner most likely to land on?



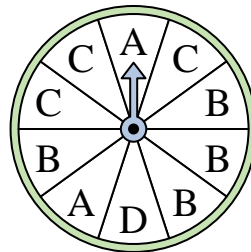
- 10) Which letter is the spinner most likely to land on?



- 11) Which letter is the spinner least likely to land on?



- 12) Which letter is the spinner most likely to land on?

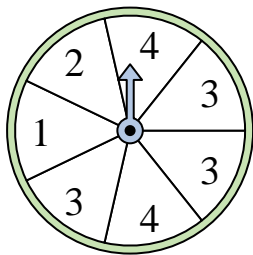


1. _____
2. _____
3. _____
4. _____
5. _____
6. _____
7. _____
8. _____
9. _____
10. _____
11. _____
12. _____




Solve each problem.


- 1) Which two numbers is the spinner equally likely to land on?




- 2) Which number is the spinner least likely to land on?




- 3) Which number is the spinner least likely to land on?



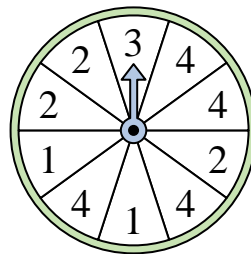
- 4) Which number is the spinner most likely to land on?



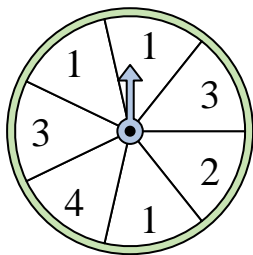
- 5) Which two numbers is the spinner equally likely to land on?




- 6) Which number is the spinner least likely to land on?



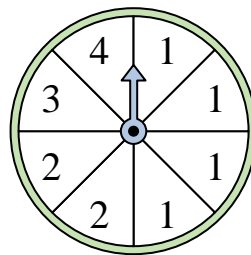
- 7) Which two numbers is the spinner equally likely to land on?



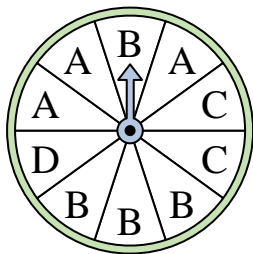
- 8) Which number is the spinner most likely to land on?



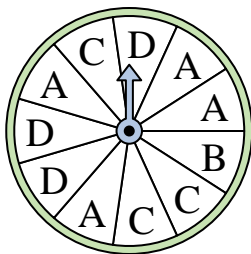
- 9) Which number is the spinner most likely to land on?



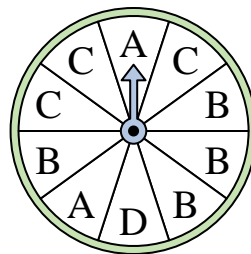
- 10) Which letter is the spinner most likely to land on?



- 11) Which letter is the spinner least likely to land on?



- 12) Which letter is the spinner most likely to land on?



Answers

1. **1 & 2**

2. **4**

3. **4**

4. **4**

5. **2 & 3**

6. **3**

7. **2 & 4**

8. **1**

9. **1**

10. **B**

11. **B**


12. **B**




Solve each problem.

Answers

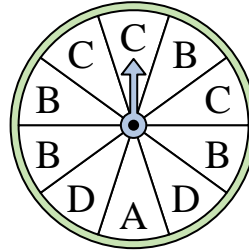
- 1) Which number is the spinner least likely to land on?



- 2) Which number is the spinner least likely to land on?



- 3) Which letter is the spinner least likely to land on?



1. _____

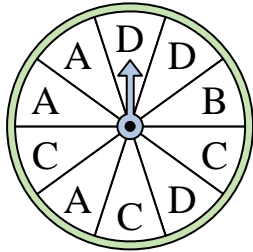
2. _____

3. _____


4. _____

5. _____

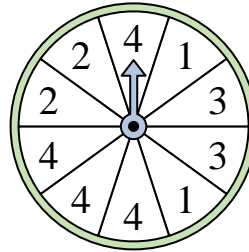
- 4) Which letter is the spinner least likely to land on?



- 5) Which number is the spinner most likely to land on?



- 6) Which number is the spinner most likely to land on?



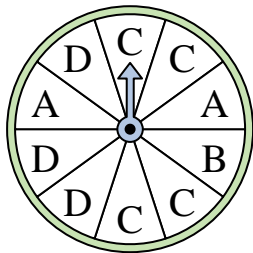
6. _____

7. _____

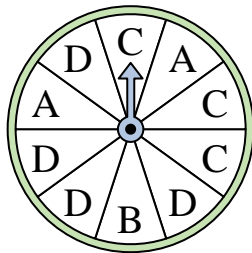
8. _____

9. _____

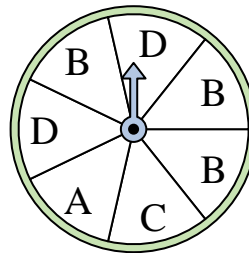
- 7) Which letter is the spinner most likely to land on?



- 8) Which letter is the spinner most likely to land on?



- 9) Which two letters is the spinner equally likely to land on?




10. _____

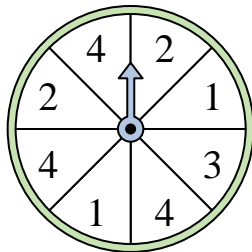
11. _____

12. _____

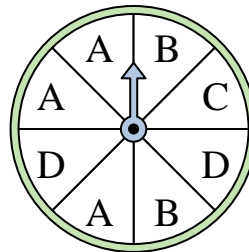
- 10) Which number is the spinner least likely to land on?



- 11) Which two numbers is the spinner equally likely to land on?




- 12) Which two letters is the spinner equally likely to land on?



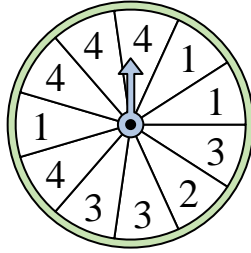


Solve each problem.

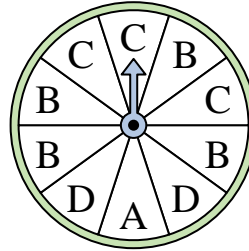
- 1) Which number is the spinner least likely to land on?



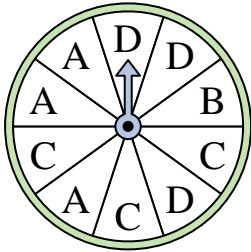
- 2) Which number is the spinner least likely to land on?




- 3) Which letter is the spinner least likely to land on?



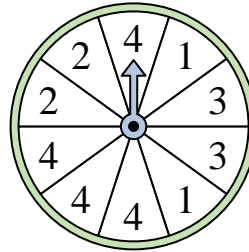
- 4) Which letter is the spinner least likely to land on?



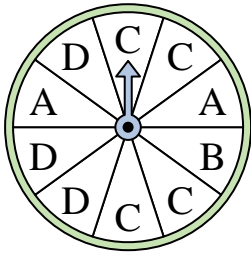
- 5) Which number is the spinner most likely to land on?



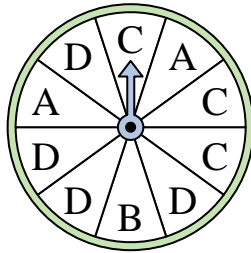
- 6) Which number is the spinner most likely to land on?



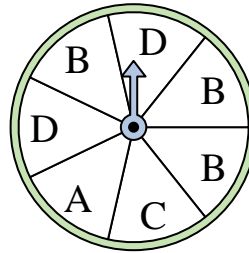
- 7) Which letter is the spinner most likely to land on?




- 8) Which letter is the spinner most likely to land on?



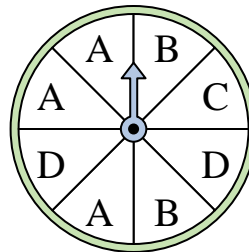
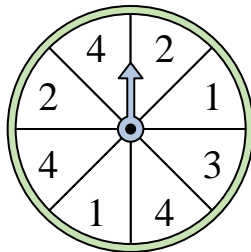
- 9) Which two letters is the spinner equally likely to land on?



- 10) Which number is the spinner least likely to land on?



- 11) Which two numbers is the spinner equally likely to land on?
- 12) Which two letters is the spinner equally likely to land on?



Answers


1. 4
2. 2
3. A
4. B
5. 2
6. 4
7. C
8. D
9. A & C
10. 2
11. 1 & 2
12. B & D




Solve each problem.

Answers


- 1) Which number is the spinner least likely to land on?




- 2) Which number is the spinner least likely to land on?



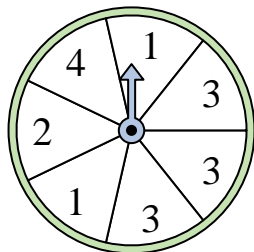
- 3) Which number is the spinner least likely to land on?



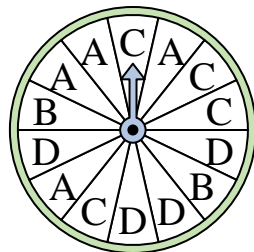
- 4) Which number is the spinner most likely to land on?



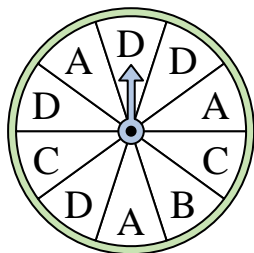
- 5) Which number is the spinner most likely to land on?



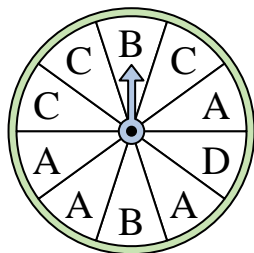
- 6) Which letter is the spinner least likely to land on?



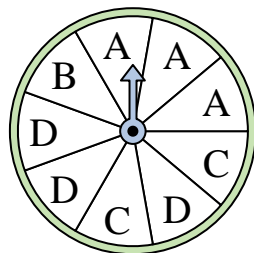
- 7) Which letter is the spinner most likely to land on?




- 8) Which letter is the spinner least likely to land on?




- 9) Which two letters is the spinner equally likely to land on?



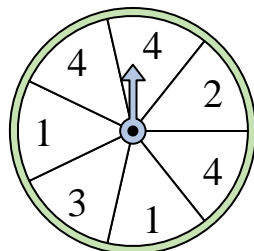
- 10) Which number is the spinner most likely to land on?



- 11) Which number is the spinner most likely to land on?



- 12) Which two numbers is the spinner equally likely to land on?




1. _____
2. _____
3. _____
4. _____
5. _____
6. _____
7. _____
8. _____
9. _____
10. _____
11. _____
12. _____

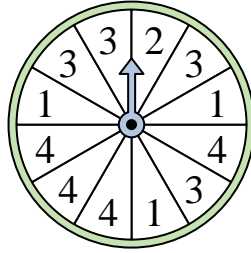


Solve each problem.


- 1) Which number is the spinner least likely to land on?




- 2) Which number is the spinner least likely to land on?



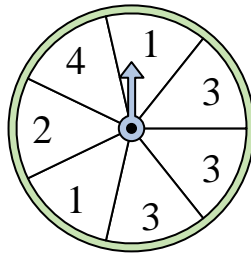
- 3) Which number is the spinner least likely to land on?



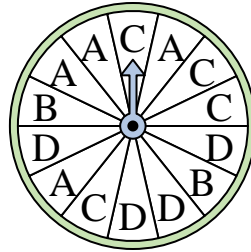
- 4) Which number is the spinner most likely to land on?



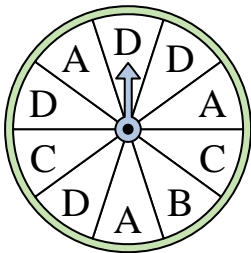
- 5) Which number is the spinner most likely to land on?



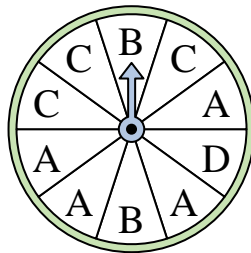
- 6) Which letter is the spinner least likely to land on?



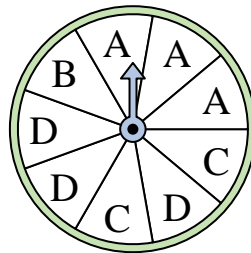
- 7) Which letter is the spinner most likely to land on?




- 8) Which letter is the spinner least likely to land on?



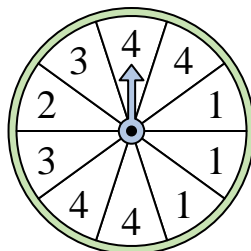
- 9) Which two letters is the spinner equally likely to land on?



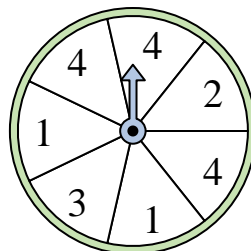
- 10) Which number is the spinner most likely to land on?



- 11) Which number is the spinner most likely to land on?



- 12) Which two numbers is the spinner equally likely to land on?



Answers

1. **3**

2. **2**

3. **4**

4. **2**

5. **3**

6. **B**

7. **D**

8. **D**

9. **A & D**

10. **4**

11. **4**


12. **2 & 3**



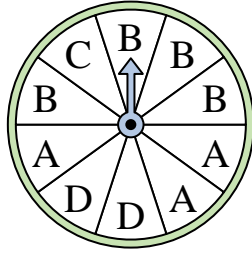
Solve each problem.

Answers


- 1) Which number is the spinner most likely to land on?



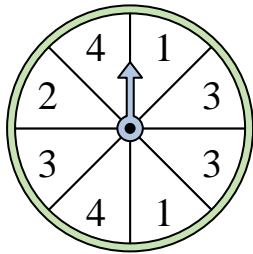
- 2) Which letter is the spinner least likely to land on?



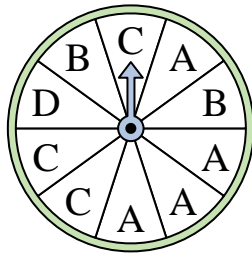
- 3) Which number is the spinner least likely to land on?



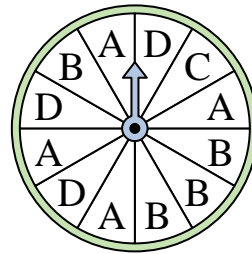
- 4) Which number is the spinner most likely to land on?




- 5) Which letter is the spinner least likely to land on?



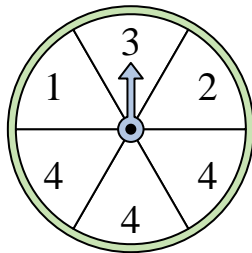
- 6) Which letter is the spinner least likely to land on?



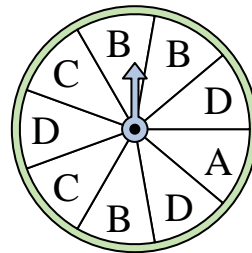
- 7) Which two numbers is the spinner equally likely to land on?



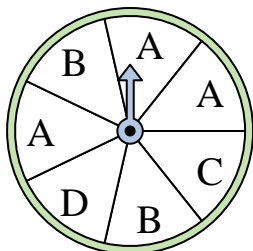
- 8) Which number is the spinner most likely to land on?



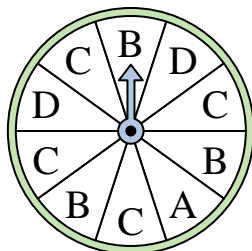
- 9) Which two letters is the spinner equally likely to land on?




- 10) Which two letters is the spinner equally likely to land on?



- 11) Which letter is the spinner least likely to land on?



- 12) Which number is the spinner most likely to land on?




1. _____
2. _____
3. _____
4. _____
5. _____
6. _____
7. _____
8. _____
9. _____
10. _____
11. _____
12. _____

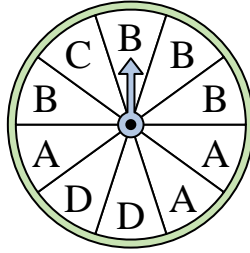


Solve each problem.


- 1) Which number is the spinner most likely to land on?



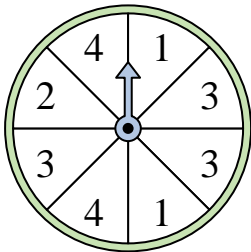
- 2) Which letter is the spinner least likely to land on?



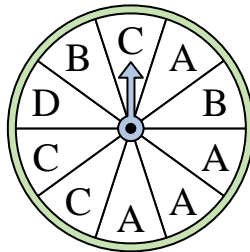
- 3) Which number is the spinner least likely to land on?



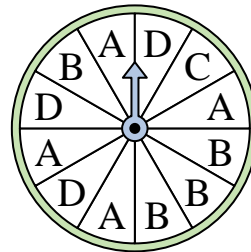
- 4) Which number is the spinner most likely to land on?



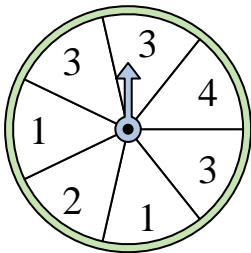
- 5) Which letter is the spinner least likely to land on?



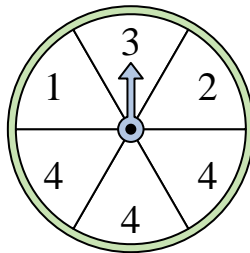
- 6) Which letter is the spinner least likely to land on?



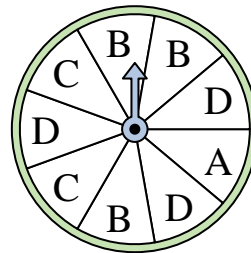
- 7) Which two numbers is the spinner equally likely to land on?



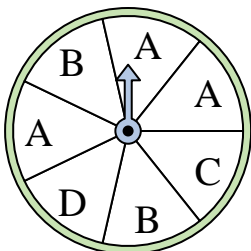
- 8) Which number is the spinner most likely to land on?



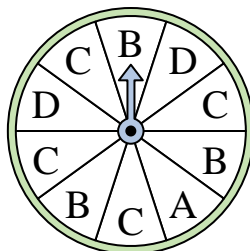
- 9) Which two letters is the spinner equally likely to land on?




- 10) Which two letters is the spinner equally likely to land on?



- 11) Which letter is the spinner least likely to land on?



- 12) Which number is the spinner most likely to land on?



Answers


1. 2
2. C
3. 3
4. 3
5. D
6. C
7. 2 & 4
8. 4
9. B & D
10. C & D
11. A
12. 3



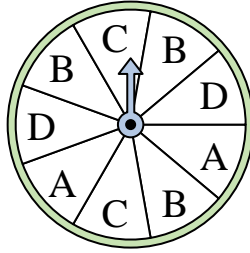
Solve each problem.

Answers

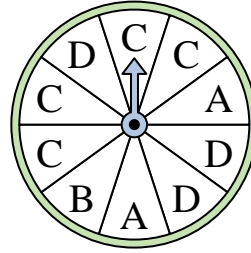
- 1) Which number is the spinner most likely to land on?



- 2) Which letter is the spinner most likely to land on?



- 3) Which letter is the spinner most likely to land on?



1. _____


2. _____

3. _____


4. _____

5. _____

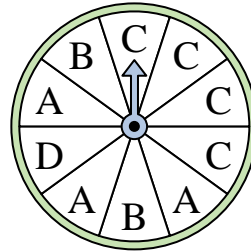
- 4) Which number is the spinner most likely to land on?



- 5) Which number is the spinner least likely to land on?



- 6) Which letter is the spinner least likely to land on?



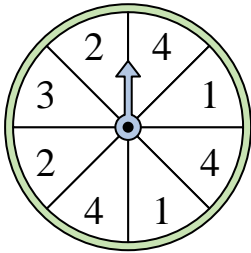
6. _____

7. _____

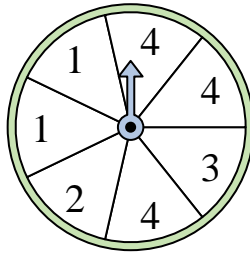
8. _____

9. _____

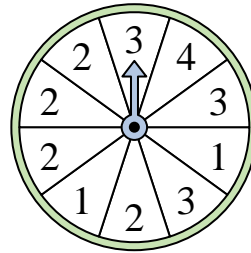
- 7) Which two numbers is the spinner equally likely to land on?



- 8) Which two numbers is the spinner equally likely to land on?



- 9) Which number is the spinner least likely to land on?

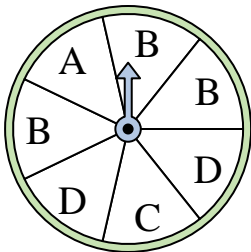


10. _____


11. _____

12. _____

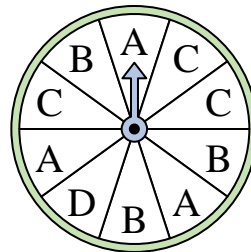
- 10) Which two letters is the spinner equally likely to land on?



- 11) Which number is the spinner least likely to land on?




- 12) Which letter is the spinner least likely to land on?



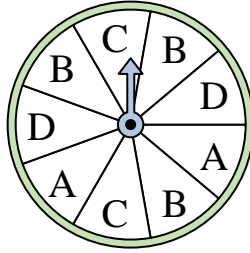


Solve each problem.

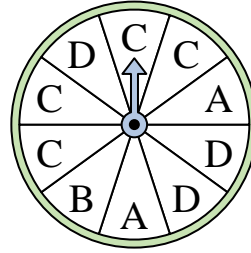
- 1) Which number is the spinner most likely to land on?




- 2) Which letter is the spinner most likely to land on?




- 3) Which letter is the spinner most likely to land on?



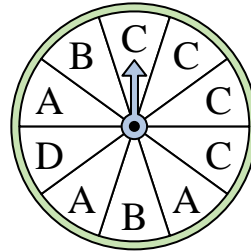
- 4) Which number is the spinner most likely to land on?



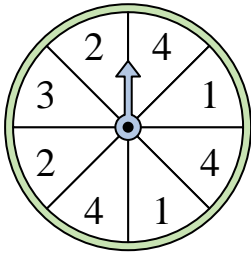
- 5) Which number is the spinner least likely to land on?



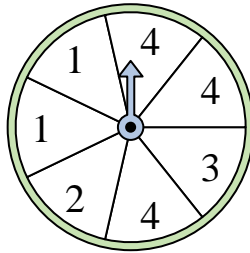
- 6) Which letter is the spinner least likely to land on?



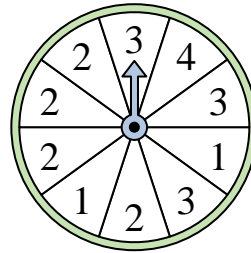
- 7) Which two numbers is the spinner equally likely to land on?



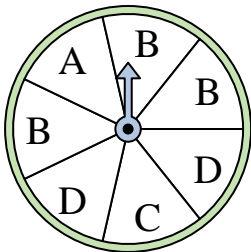
- 8) Which two numbers is the spinner equally likely to land on?




- 9) Which number is the spinner least likely to land on?



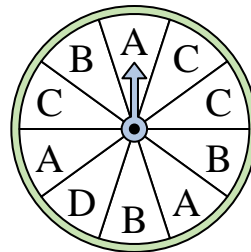
- 10) Which two letters is the spinner equally likely to land on?



- 11) Which number is the spinner least likely to land on?



- 12) Which letter is the spinner least likely to land on?



Answers

1. **4**

2. **B**

3. **C**

4. **3**

5. **2**

6. **D**

7. **1 & 2**

8. **2 & 3**

9. **4**

10. **A & C**

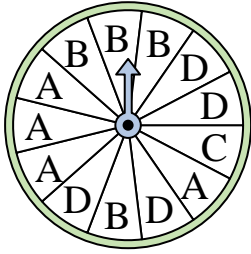
11. **3**

12. **D**

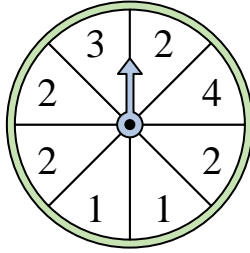


Solve each problem.

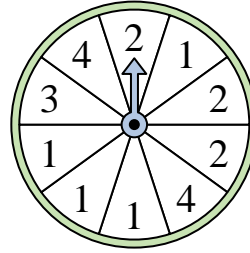
1) Which letter is the spinner least likely to land on?




2) Which number is the spinner most likely to land on?



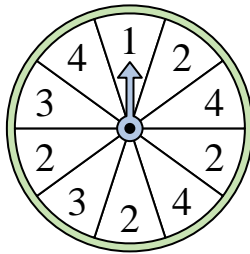
3) Which number is the spinner most likely to land on?



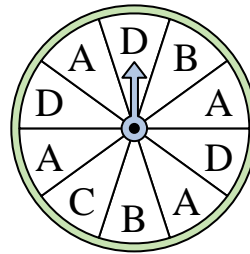
4) Which number is the spinner most likely to land on?




5) Which number is the spinner least likely to land on?




6) Which letter is the spinner least likely to land on?



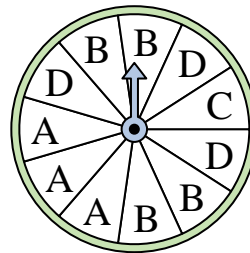
7) Which number is the spinner most likely to land on?



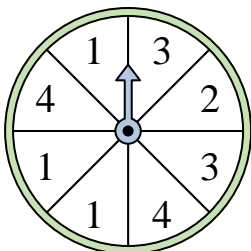
8) Which number is the spinner least likely to land on?




9) Which letter is the spinner least likely to land on?



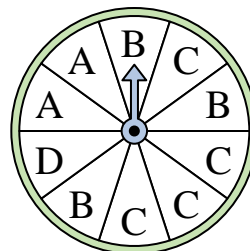
10) Which two numbers is the spinner equally likely to land on?



11) Which number is the spinner least likely to land on?



12) Which letter is the spinner most likely to land on?



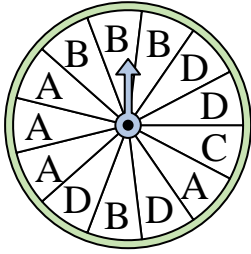
Answers

1. _____
2. _____
3. _____
4. _____
5. _____
6. _____
7. _____
8. _____
9. _____
10. _____
11. _____
12. _____

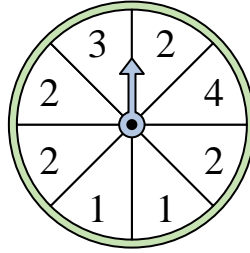


Solve each problem.

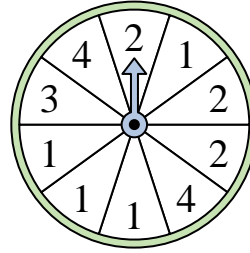
1) Which letter is the spinner least likely to land on?




2) Which number is the spinner most likely to land on?



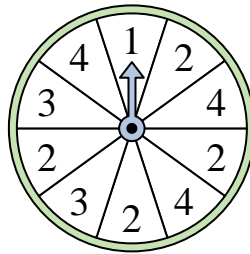
3) Which number is the spinner most likely to land on?



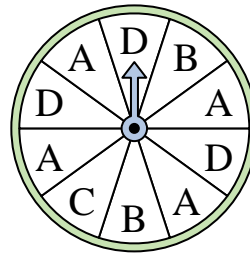
4) Which number is the spinner most likely to land on?




5) Which number is the spinner least likely to land on?



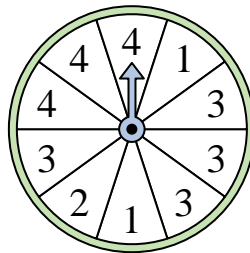
6) Which letter is the spinner least likely to land on?



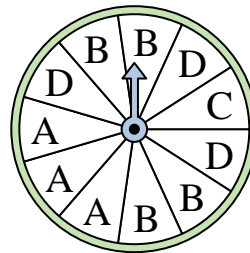
7) Which number is the spinner most likely to land on?



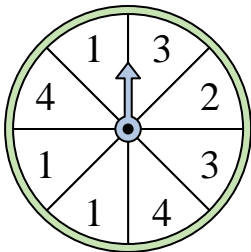
8) Which number is the spinner least likely to land on?




9) Which letter is the spinner least likely to land on?



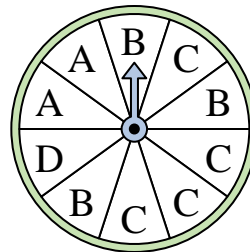
10) Which two numbers is the spinner equally likely to land on?



11) Which number is the spinner least likely to land on?



12) Which letter is the spinner most likely to land on?



Answers

1. **C**

2. **2**

3. **1**

4. **4**

5. **1**

6. **C**

7. **3**

8. **2**

9. **C**

10. **3 & 4**

11. **4**

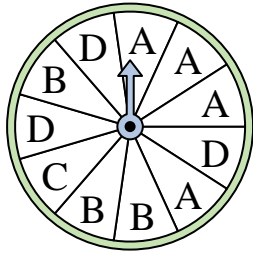
12. **C**



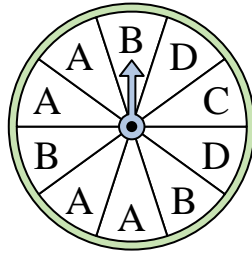
Solve each problem.

Answers


- 1) Which letter is the spinner least likely to land on?




- 2) Which letter is the spinner least likely to land on?



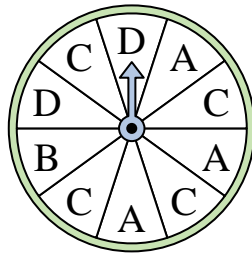
- 3) Which number is the spinner least likely to land on?



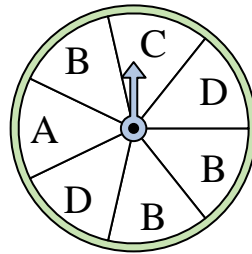
- 4) Which number is the spinner least likely to land on?




- 5) Which letter is the spinner most likely to land on?



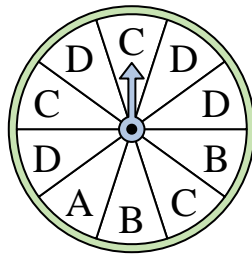
- 6) Which two letters is the spinner equally likely to land on?



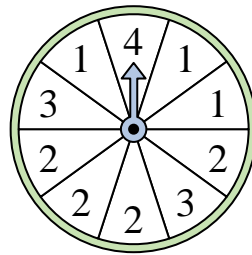
- 7) Which number is the spinner least likely to land on?



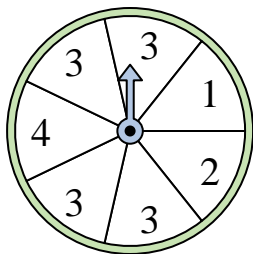
- 8) Which letter is the spinner most likely to land on?



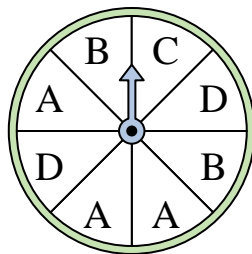
- 9) Which number is the spinner most likely to land on?



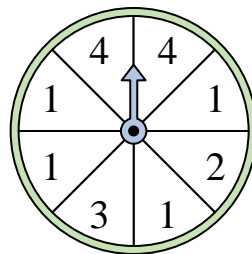
- 10) Which number is the spinner most likely to land on?



- 11) Which two letters is the spinner equally likely to land on?



- 12) Which number is the spinner most likely to land on?

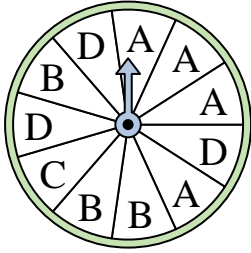


1. _____
2. _____
3. _____
4. _____
5. _____
6. _____
7. _____
8. _____
9. _____
10. _____
11. _____
12. _____

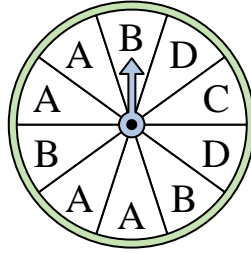


Solve each problem.


- 1) Which letter is the spinner least likely to land on?




- 2) Which letter is the spinner least likely to land on?



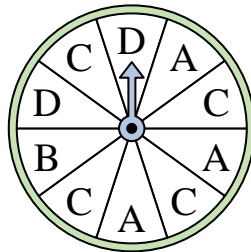
- 3) Which number is the spinner least likely to land on?



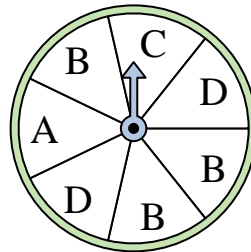
- 4) Which number is the spinner least likely to land on?




- 5) Which letter is the spinner most likely to land on?



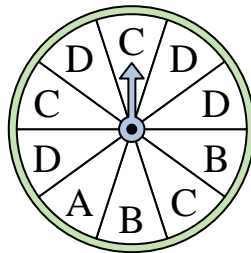
- 6) Which two letters is the spinner equally likely to land on?



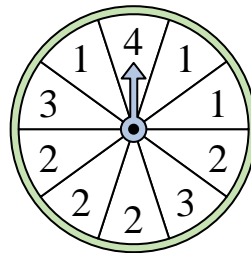
- 7) Which number is the spinner least likely to land on?



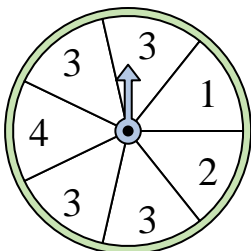
- 8) Which letter is the spinner most likely to land on?



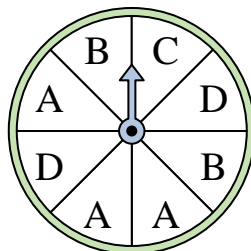
- 9) Which number is the spinner most likely to land on?



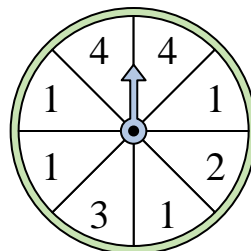
- 10) Which number is the spinner most likely to land on?



- 11) Which two letters is the spinner equally likely to land on?



- 12) Which number is the spinner most likely to land on?



Answers

1. **C**

2. **C**

3. **2**

4. **3**

5. **C**

6. **A & C**

7. **4**

8. **D**

9. **2**

10. **3**

11. **B & D**

12. **1**