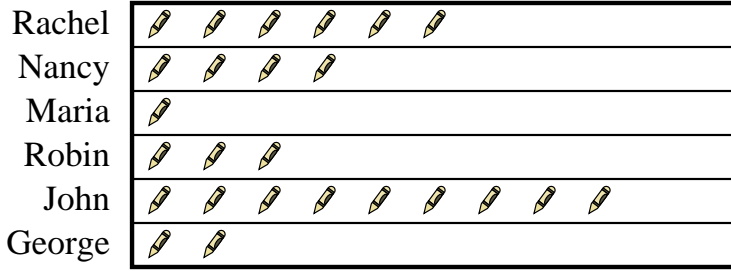




Solve each problem.

Several students were helping to decorate the school halls by drawing pictures to hang up. The pictograph below shows the number of pictures each student drew.

Pictures Drawn



= 7 pictures drawn

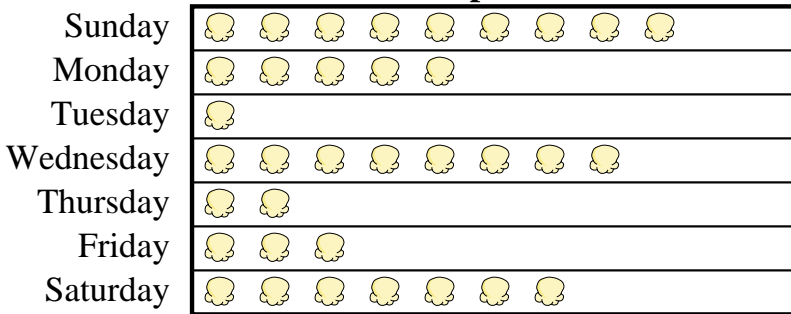
- 1) Who drew the most pictures?
- 2) Who drew the fewest pictures?
- 3) Did George or Robin draw more pictures?
- 4) How many pictures did Rachel draw?
- 5) How many pictures did Robin draw?

Answers

1. _____
2. _____
3. _____
4. _____
5. _____
6. _____
7. _____
8. _____
9. _____
10. _____

A movie theater was tracking the number of small popcorns they sold each day. They organized the information in the pictograph below.

Small Popcorns Sold



= 4 Bags Sold


- 6) Which day did they sell the most popcorn?
- 7) Which day did they sell the least amount of popcorn?
- 8) Which day did they sell more popcorn, Thursday or Friday?
- 9) How many bags did they sell on Tuesday?
- 10) How many bags did they sell on Thursday?



Solve each problem.

Several students were helping to decorate the school halls by drawing pictures to hang up. The pictograph below shows the number of pictures each student drew.

Pictures Drawn



= 7 pictures drawn

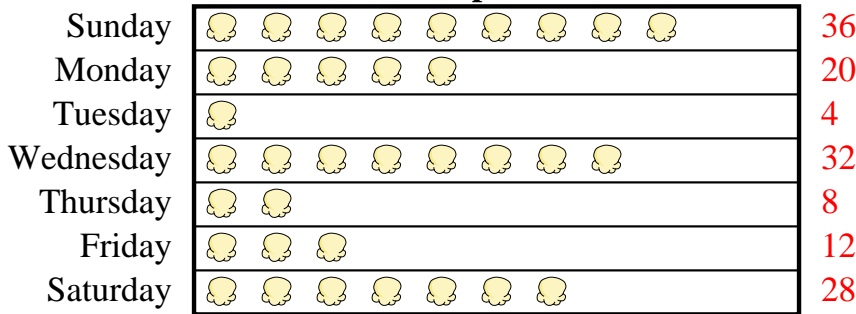
- Who drew the most pictures?
- Who drew the fewest pictures?
- Did George or Robin draw more pictures?
- How many pictures did Rachel draw?
- How many pictures did Robin draw?

Answers

- John**
- Maria**
- Robin**
- 42**
- 21**
- Sunday**
- Tuesday**
- Friday**
- 4**
- 8**

A movie theater was tracking the number of small popcorns they sold each day. They organized the information in the pictograph below.

Small Popcorns Sold



= 4 Bags Sold

- Which day did they sell the most popcorn?
- Which day did they sell the least amount of popcorn?
- Which day did they sell more popcorn, Thursday or Friday?
- How many bags did they sell on Tuesday?
- How many bags did they sell on Thursday?