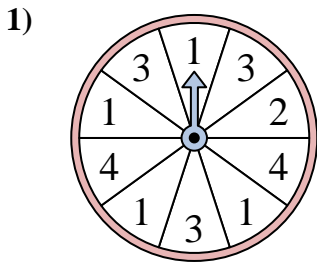


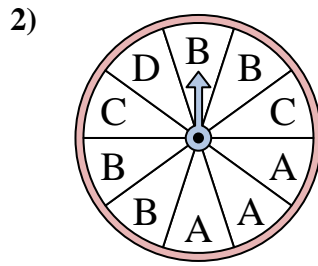


Solve each problem. Round your answer to the nearest tenth.

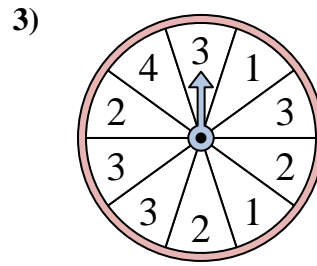
Answers



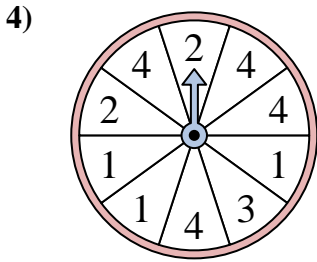
The spinner has a _____% chance of landing on a 1.



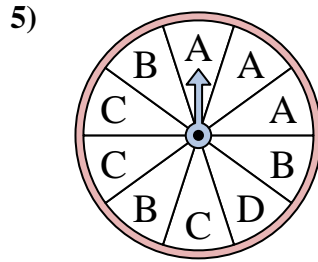
The spinner has a _____% chance of landing on a D.



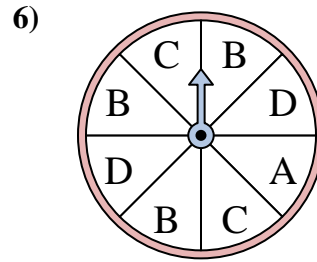
The spinner has a _____% chance of landing on a 1.



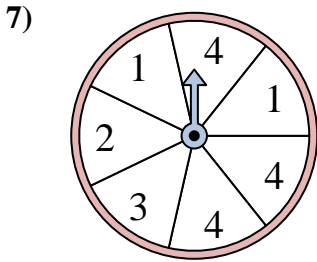
The spinner has a _____% chance of landing on a 3.



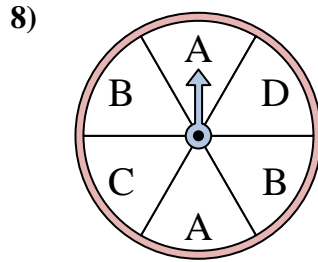
The spinner has a _____% chance of landing on a C.



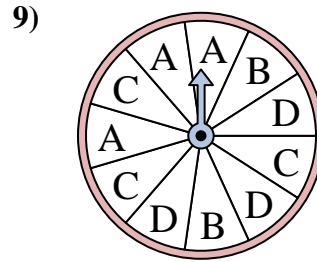
The spinner has a _____% chance of landing on a A.



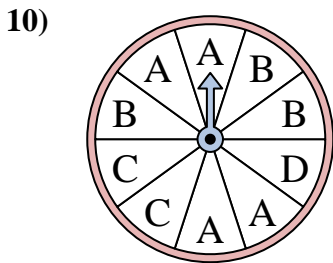
The spinner has a _____% chance of landing on a 1.



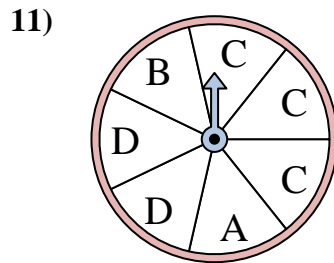
The spinner has a _____% chance of landing on a D.



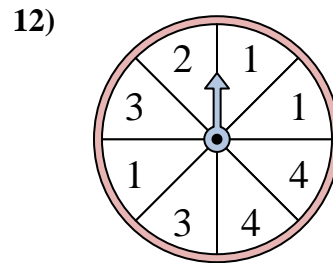
The spinner has a _____% chance of landing on a D.



The spinner has a _____% chance of landing on a A.



The spinner has a _____% chance of landing on a B.

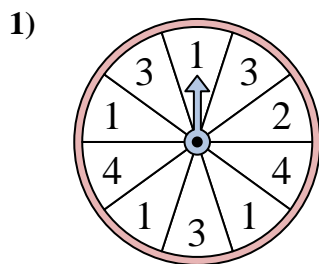


The spinner has a _____% chance of landing on a 2.

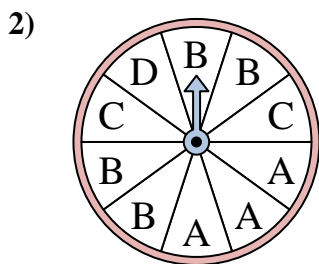
1. _____
2. _____
3. _____
4. _____
5. _____
6. _____
7. _____
8. _____
9. _____
10. _____
11. _____
12. _____



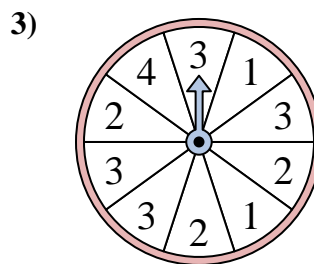
Solve each problem. Round your answer to the nearest tenth.



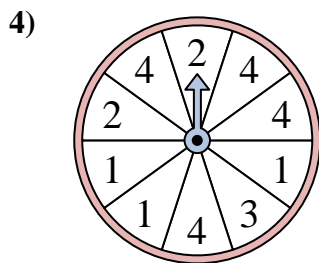
The spinner has a _____% chance of landing on a 1.



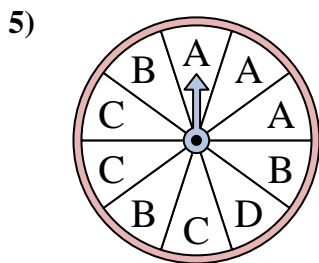
The spinner has a _____% chance of landing on a D.



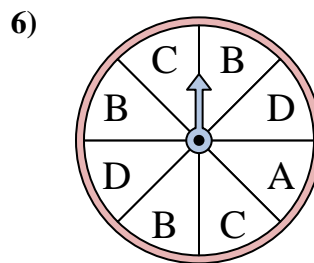
The spinner has a _____% chance of landing on a 1.



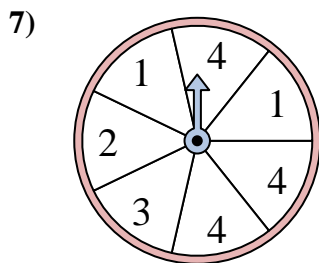
The spinner has a _____% chance of landing on a 3.



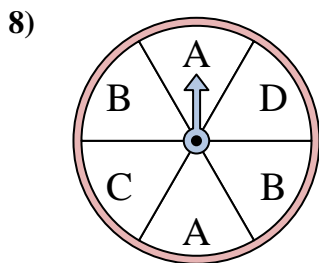
The spinner has a _____% chance of landing on a C.



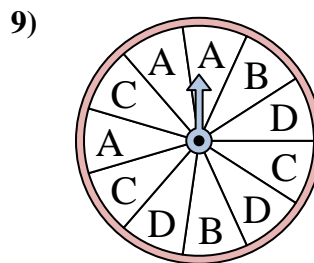
The spinner has a _____% chance of landing on a A.



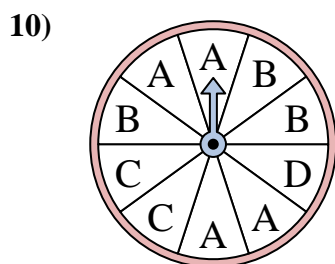
The spinner has a _____% chance of landing on a 1.



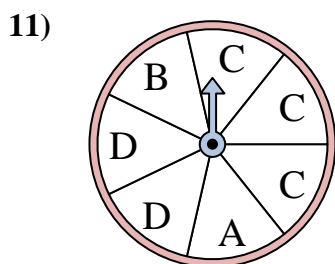
The spinner has a _____% chance of landing on a D.



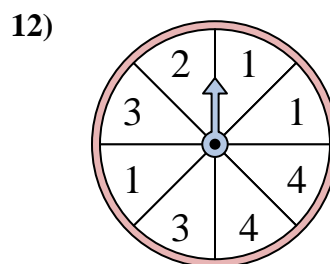
The spinner has a _____% chance of landing on a D.



The spinner has a _____% chance of landing on a A.



The spinner has a _____% chance of landing on a B.



The spinner has a _____% chance of landing on a 2.

Answers

1. 40
2. 10
3. 20
4. 10
5. 30
6. 12.5
7. 28.6
8. 16.7
9. 27.3
10. 40
11. 14.3
12. 12.5