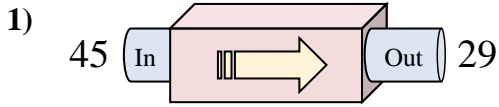
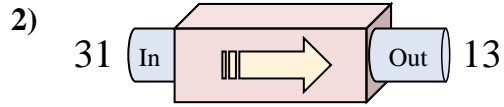




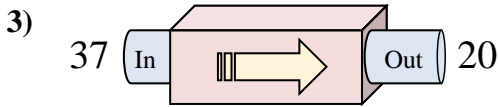
Determine which rule the function machine is using.



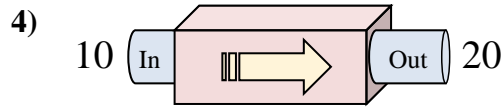
- A. Subtract 16
- B. Add 11
- C. Add 20
- D. Subtract 18



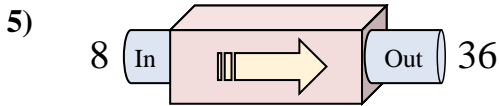
- A. Subtract 18
- B. Subtract 13
- C. Subtract 21
- D. Add 14



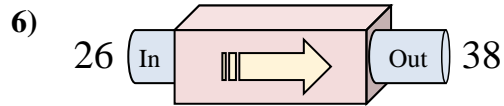
- A. Subtract 17
- B. Subtract 22
- C. Subtract 14
- D. Add 13



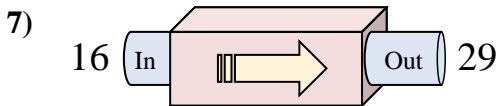
- A. Add 10
- B. Add 5
- C. Add 9
- D. Add 13



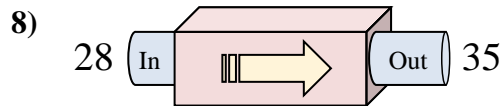
- A. Subtract 25
- B. Add 29
- C. Add 31
- D. Add 28



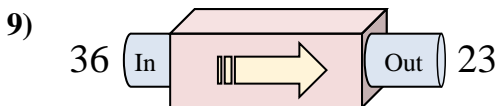
- A. Add 13
- B. Add 12
- C. Subtract 14
- D. Add 10



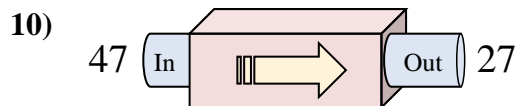
- A. Subtract 11
- B. Add 9
- C. Add 13
- D. Add 16



- A. Subtract 6
- B. Add 10
- C. Add 4
- D. Add 7



- A. Subtract 12
- B. Add 11
- C. Subtract 13
- D. Subtract 16



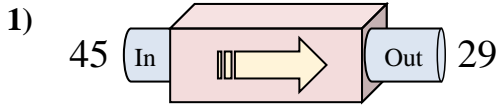
- A. Add 15
- B. Add 25
- C. Subtract 17
- D. Subtract 20

Answers

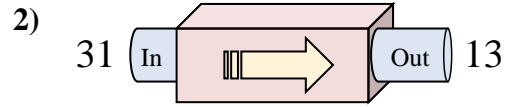
1. _____
2. _____
3. _____
4. _____
5. _____
6. _____
7. _____
8. _____
9. _____
10. _____



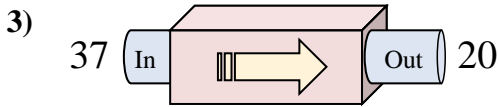
Determine which rule the function machine is using.



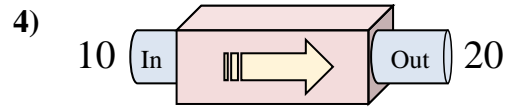
- A. Subtract 16
- B. Add 11
- C. Add 20
- D. Subtract 18



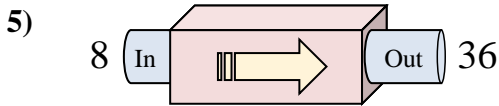
- A. Subtract 18
- B. Subtract 13
- C. Subtract 21
- D. Add 14



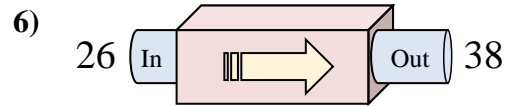
- A. Subtract 17
- B. Subtract 22
- C. Subtract 14
- D. Add 13



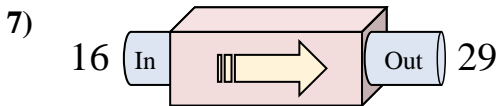
- A. Add 10
- B. Add 5
- C. Add 9
- D. Add 13



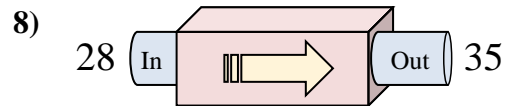
- A. Subtract 25
- B. Add 29
- C. Add 31
- D. Add 28



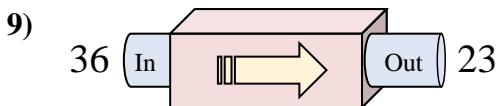
- A. Add 13
- B. Add 12
- C. Subtract 14
- D. Add 10



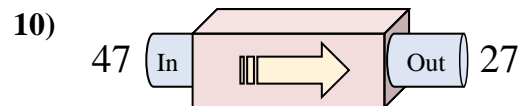
- A. Subtract 11
- B. Add 9
- C. Add 13
- D. Add 16



- A. Subtract 6
- B. Add 10
- C. Add 4
- D. Add 7



- A. Subtract 12
- B. Add 11
- C. Subtract 13
- D. Subtract 16



- A. Add 15
- B. Add 25
- C. Subtract 17
- D. Subtract 20

Answers

- 1. **A**
- 2. **A**
- 3. **A**
- 4. **A**
- 5. **D**
- 6. **B**
- 7. **C**
- 8. **D**
- 9. **C**
- 10. **D**