



Use the numberlines to find the absolute value.

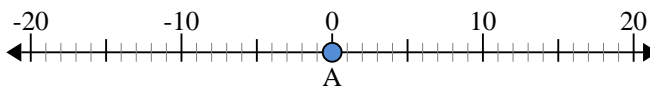
Answers

- 1) a. What is the value of 'A'?
 b. How far is 'A' from 0 (absolute value)?



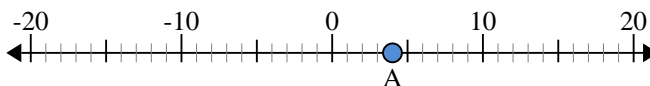
1. _____

- 2) a. What is the value of 'A'?
 b. How far is 'A' from 0 (absolute value)?



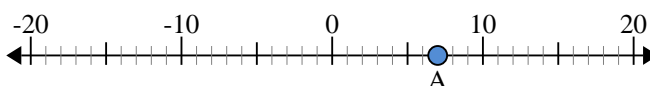
2. _____

- 3) a. What is the value of 'A'?
 b. How far is 'A' from 0 (absolute value)?



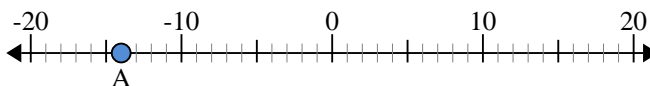
3. _____

- 4) a. What is the value of 'A'?
 b. How far is 'A' from 0 (absolute value)?



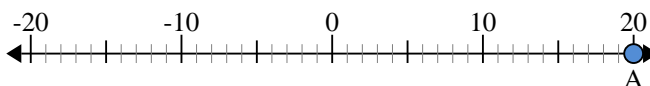
4. _____

- 5) a. What is the value of 'A'?
 b. How far is 'A' from 0 (absolute value)?



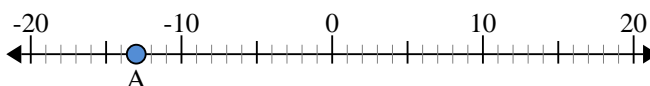
5. _____

- 6) a. What is the value of 'A'?
 b. How far is 'A' from 0 (absolute value)?



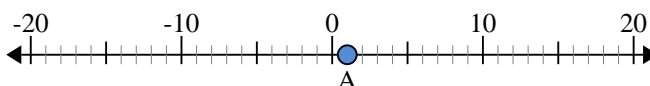
6. _____

- 7) a. What is the value of 'A'?
 b. How far is 'A' from 0 (absolute value)?



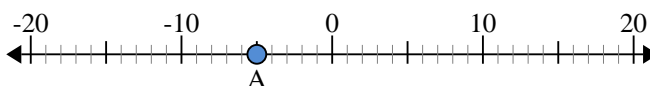
7. _____

- 8) a. What is the value of 'A'?
 b. How far is 'A' from 0 (absolute value)?



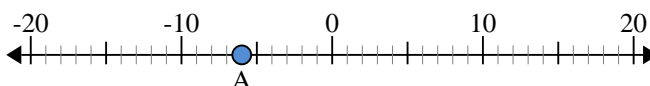
8. _____

- 9) a. What is the value of 'A'?
 b. How far is 'A' from 0 (absolute value)?



9. _____

- 10) a. What is the value of 'A'?
 b. How far is 'A' from 0 (absolute value)?

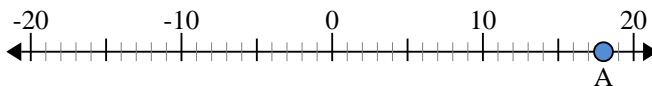


10. _____

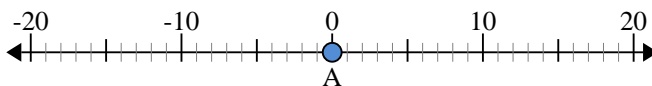


Use the numberlines to find the absolute value.

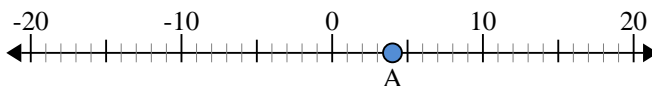
- 1) a. What is the value of 'A'?
b. How far is 'A' from 0 (absolute value)?



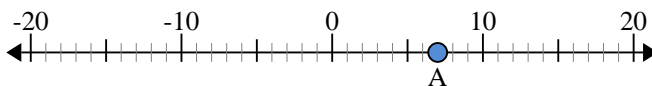
- 2) a. What is the value of 'A'?
b. How far is 'A' from 0 (absolute value)?



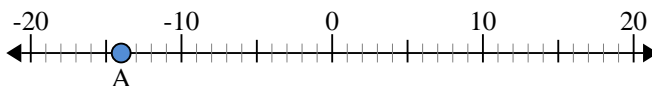
- 3) a. What is the value of 'A'?
b. How far is 'A' from 0 (absolute value)?



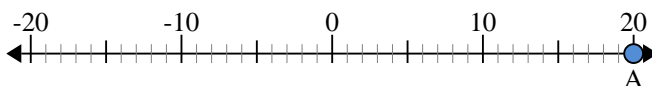
- 4) a. What is the value of 'A'?
b. How far is 'A' from 0 (absolute value)?



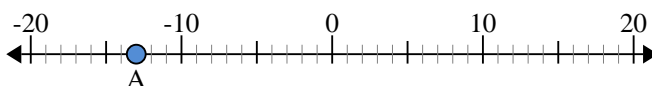
- 5) a. What is the value of 'A'?
b. How far is 'A' from 0 (absolute value)?



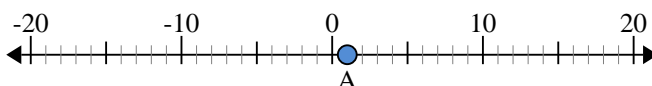
- 6) a. What is the value of 'A'?
b. How far is 'A' from 0 (absolute value)?



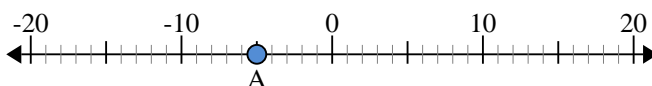
- 7) a. What is the value of 'A'?
b. How far is 'A' from 0 (absolute value)?



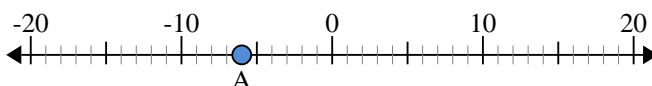
- 8) a. What is the value of 'A'?
b. How far is 'A' from 0 (absolute value)?



- 9) a. What is the value of 'A'?
b. How far is 'A' from 0 (absolute value)?



- 10) a. What is the value of 'A'?
b. How far is 'A' from 0 (absolute value)?



Answers

1.	<u>18</u>	<u>18</u>
2.	<u>0</u>	<u>0</u>
3.	<u>4</u>	<u>4</u>
4.	<u>7</u>	<u>7</u>
5.	<u>-14</u>	<u>14</u>
6.	<u>20</u>	<u>20</u>
7.	<u>-13</u>	<u>13</u>
8.	<u>1</u>	<u>1</u>
9.	<u>-5</u>	<u>5</u>
10.	<u>-6</u>	<u>6</u>



Use the numberlines to find the absolute value.

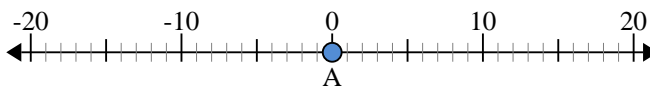
Answers

- 1) a. What is the value of 'A'?
 b. How far is 'A' from 0 (absolute value)?



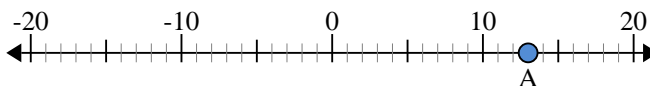
1. _____

- 2) a. What is the value of 'A'?
 b. How far is 'A' from 0 (absolute value)?



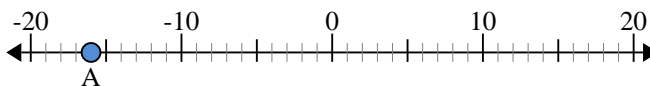
2. _____

- 3) a. What is the value of 'A'?
 b. How far is 'A' from 0 (absolute value)?



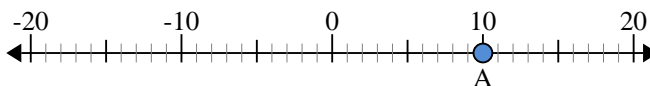
3. _____

- 4) a. What is the value of 'A'?
 b. How far is 'A' from 0 (absolute value)?



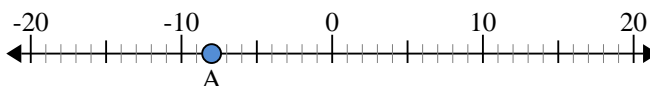
4. _____

- 5) a. What is the value of 'A'?
 b. How far is 'A' from 0 (absolute value)?



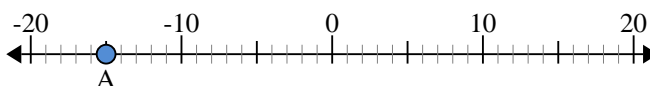
5. _____

- 6) a. What is the value of 'A'?
 b. How far is 'A' from 0 (absolute value)?



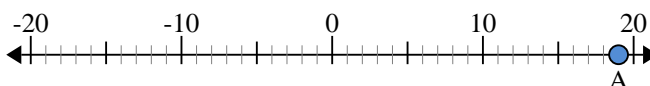
6. _____

- 7) a. What is the value of 'A'?
 b. How far is 'A' from 0 (absolute value)?



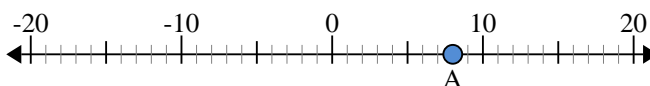
7. _____

- 8) a. What is the value of 'A'?
 b. How far is 'A' from 0 (absolute value)?



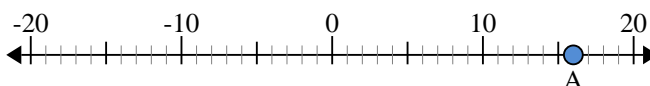
8. _____

- 9) a. What is the value of 'A'?
 b. How far is 'A' from 0 (absolute value)?



9. _____

- 10) a. What is the value of 'A'?
 b. How far is 'A' from 0 (absolute value)?

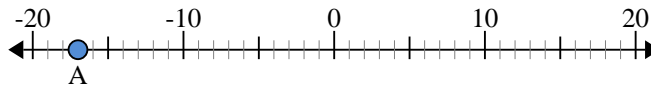


10. _____

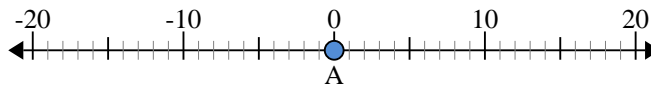


Use the numberlines to find the absolute value.

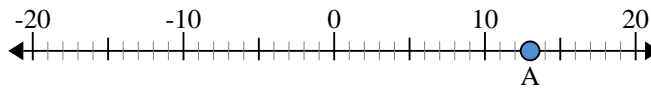
- 1) a. What is the value of 'A'?
b. How far is 'A' from 0 (absolute value)?



- 2) a. What is the value of 'A'?
b. How far is 'A' from 0 (absolute value)?



- 3) a. What is the value of 'A'?
b. How far is 'A' from 0 (absolute value)?



- 4) a. What is the value of 'A'?
b. How far is 'A' from 0 (absolute value)?



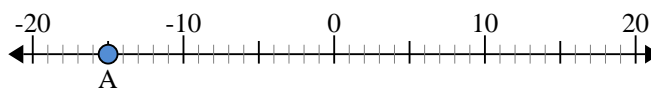
- 5) a. What is the value of 'A'?
b. How far is 'A' from 0 (absolute value)?



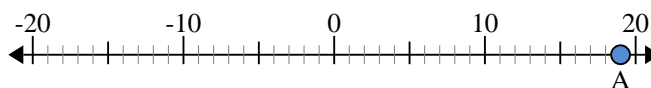
- 6) a. What is the value of 'A'?
b. How far is 'A' from 0 (absolute value)?



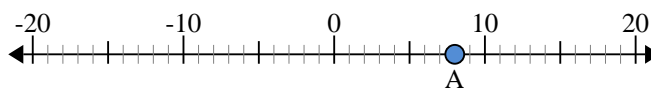
- 7) a. What is the value of 'A'?
b. How far is 'A' from 0 (absolute value)?



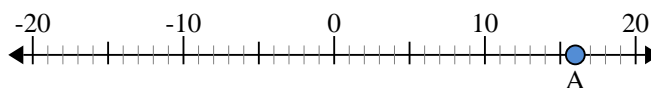
- 8) a. What is the value of 'A'?
b. How far is 'A' from 0 (absolute value)?



- 9) a. What is the value of 'A'?
b. How far is 'A' from 0 (absolute value)?



- 10) a. What is the value of 'A'?
b. How far is 'A' from 0 (absolute value)?



Answers

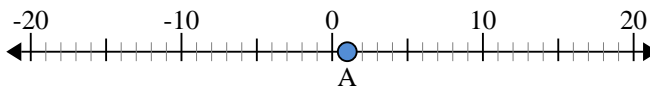
- | | | |
|-----|------------|-----------|
| 1. | <u>-17</u> | <u>17</u> |
| 2. | <u>0</u> | <u>0</u> |
| 3. | <u>13</u> | <u>13</u> |
| 4. | <u>-16</u> | <u>16</u> |
| 5. | <u>10</u> | <u>10</u> |
| 6. | <u>-8</u> | <u>8</u> |
| 7. | <u>-15</u> | <u>15</u> |
| 8. | <u>19</u> | <u>19</u> |
| 9. | <u>8</u> | <u>8</u> |
| 10. | <u>16</u> | <u>16</u> |



Use the numberlines to find the absolute value.

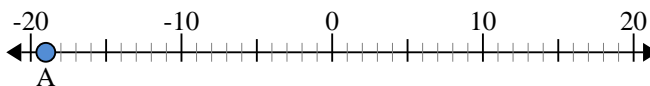
Answers

- 1) a. What is the value of 'A'?
- b. How far is 'A' from 0 (absolute value)?



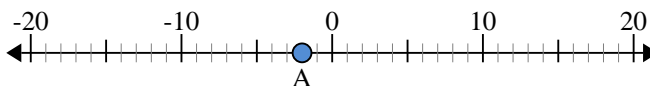
1. _____

- 2) a. What is the value of 'A'?
- b. How far is 'A' from 0 (absolute value)?



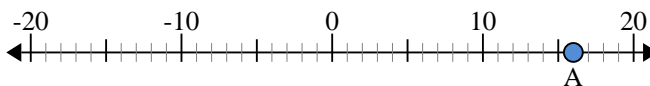
2. _____

- 3) a. What is the value of 'A'?
- b. How far is 'A' from 0 (absolute value)?



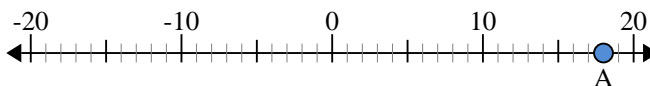
3. _____

- 4) a. What is the value of 'A'?
- b. How far is 'A' from 0 (absolute value)?



4. _____

- 5) a. What is the value of 'A'?
- b. How far is 'A' from 0 (absolute value)?



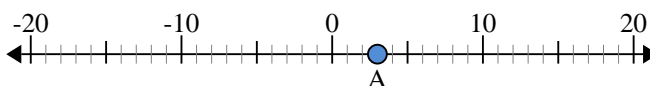
5. _____

- 6) a. What is the value of 'A'?
- b. How far is 'A' from 0 (absolute value)?



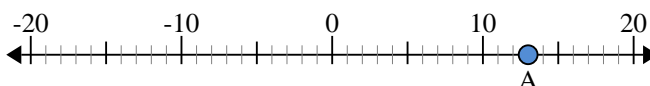
6. _____

- 7) a. What is the value of 'A'?
- b. How far is 'A' from 0 (absolute value)?



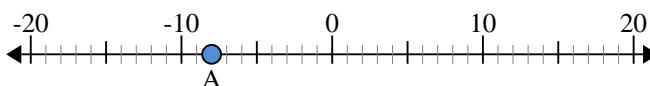
7. _____

- 8) a. What is the value of 'A'?
- b. How far is 'A' from 0 (absolute value)?



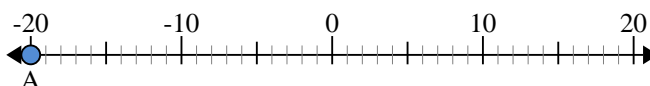
8. _____

- 9) a. What is the value of 'A'?
- b. How far is 'A' from 0 (absolute value)?



9. _____

- 10) a. What is the value of 'A'?
- b. How far is 'A' from 0 (absolute value)?

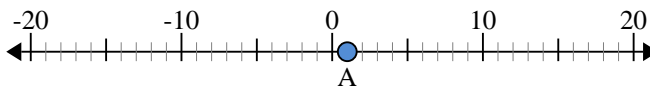


10. _____

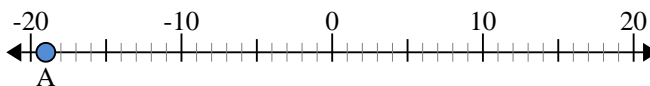


Use the numberlines to find the absolute value.

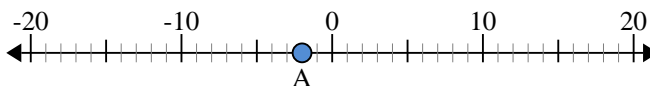
- 1) a. What is the value of 'A'?
b. How far is 'A' from 0 (absolute value)?



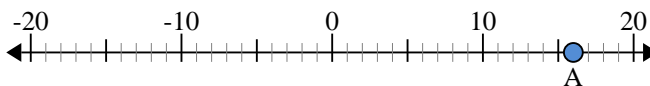
- 2) a. What is the value of 'A'?
b. How far is 'A' from 0 (absolute value)?



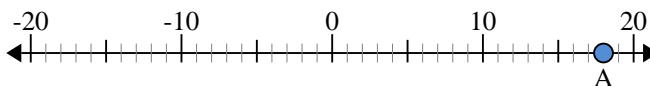
- 3) a. What is the value of 'A'?
b. How far is 'A' from 0 (absolute value)?



- 4) a. What is the value of 'A'?
b. How far is 'A' from 0 (absolute value)?



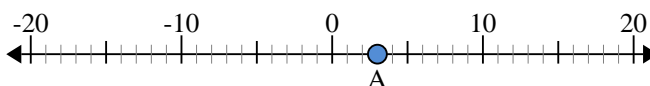
- 5) a. What is the value of 'A'?
b. How far is 'A' from 0 (absolute value)?



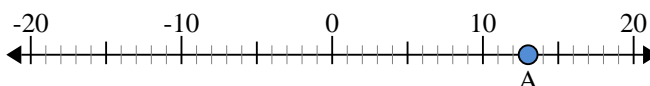
- 6) a. What is the value of 'A'?
b. How far is 'A' from 0 (absolute value)?



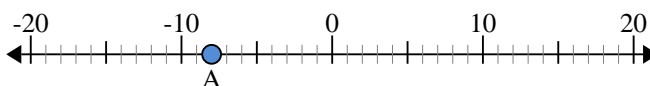
- 7) a. What is the value of 'A'?
b. How far is 'A' from 0 (absolute value)?



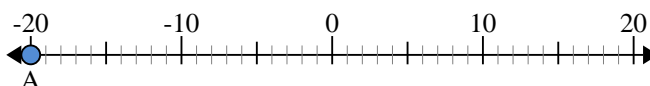
- 8) a. What is the value of 'A'?
b. How far is 'A' from 0 (absolute value)?



- 9) a. What is the value of 'A'?
b. How far is 'A' from 0 (absolute value)?



- 10) a. What is the value of 'A'?
b. How far is 'A' from 0 (absolute value)?



Answers

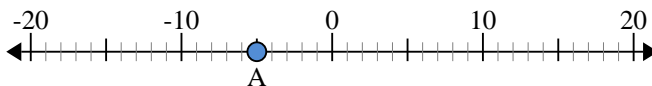
- | | | |
|-----|------------|-----------|
| 1. | <u>1</u> | <u>1</u> |
| 2. | <u>-19</u> | <u>19</u> |
| 3. | <u>-2</u> | <u>2</u> |
| 4. | <u>16</u> | <u>16</u> |
| 5. | <u>18</u> | <u>18</u> |
| 6. | <u>-3</u> | <u>3</u> |
| 7. | <u>3</u> | <u>3</u> |
| 8. | <u>13</u> | <u>13</u> |
| 9. | <u>-8</u> | <u>8</u> |
| 10. | <u>-20</u> | <u>20</u> |



Use the numberlines to find the absolute value.

Answers

- 1) a. What is the value of 'A'?
- b. How far is 'A' from 0 (absolute value)?



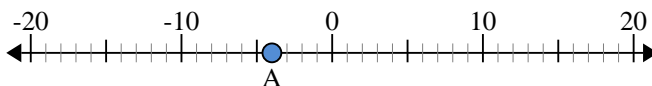
1. _____

- 2) a. What is the value of 'A'?
- b. How far is 'A' from 0 (absolute value)?



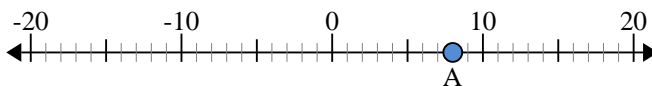
2. _____

- 3) a. What is the value of 'A'?
- b. How far is 'A' from 0 (absolute value)?



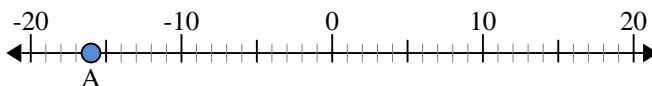
3. _____

- 4) a. What is the value of 'A'?
- b. How far is 'A' from 0 (absolute value)?



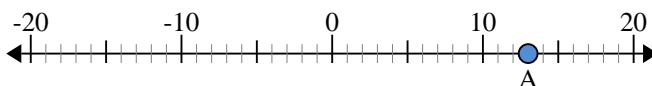
4. _____

- 5) a. What is the value of 'A'?
- b. How far is 'A' from 0 (absolute value)?



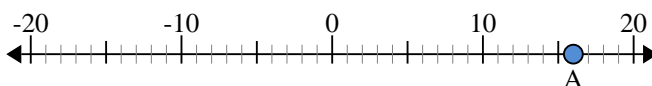
5. _____

- 6) a. What is the value of 'A'?
- b. How far is 'A' from 0 (absolute value)?



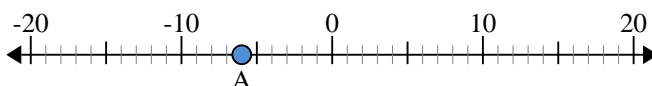
6. _____

- 7) a. What is the value of 'A'?
- b. How far is 'A' from 0 (absolute value)?



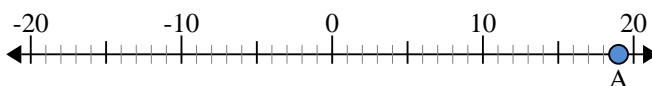
7. _____

- 8) a. What is the value of 'A'?
- b. How far is 'A' from 0 (absolute value)?



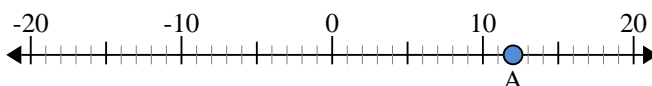
8. _____

- 9) a. What is the value of 'A'?
- b. How far is 'A' from 0 (absolute value)?



9. _____

- 10) a. What is the value of 'A'?
- b. How far is 'A' from 0 (absolute value)?

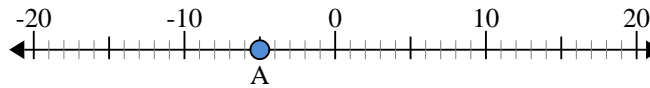


10. _____

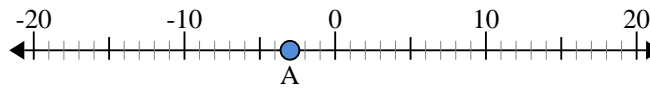


Use the numberlines to find the absolute value.

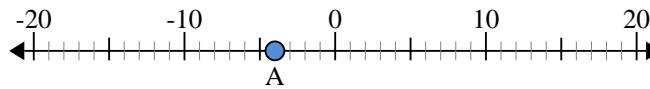
- 1) a. What is the value of 'A'?
b. How far is 'A' from 0 (absolute value)?



- 2) a. What is the value of 'A'?
b. How far is 'A' from 0 (absolute value)?



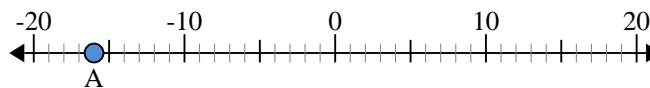
- 3) a. What is the value of 'A'?
b. How far is 'A' from 0 (absolute value)?



- 4) a. What is the value of 'A'?
b. How far is 'A' from 0 (absolute value)?



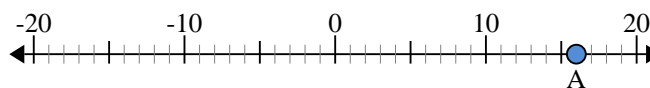
- 5) a. What is the value of 'A'?
b. How far is 'A' from 0 (absolute value)?



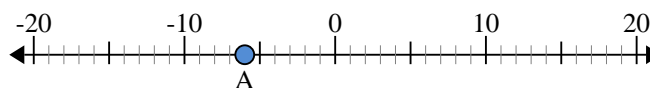
- 6) a. What is the value of 'A'?
b. How far is 'A' from 0 (absolute value)?



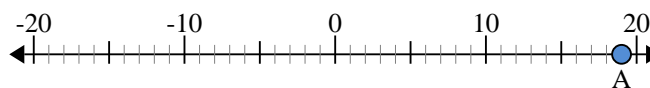
- 7) a. What is the value of 'A'?
b. How far is 'A' from 0 (absolute value)?



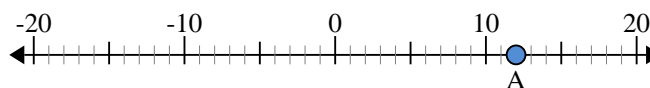
- 8) a. What is the value of 'A'?
b. How far is 'A' from 0 (absolute value)?



- 9) a. What is the value of 'A'?
b. How far is 'A' from 0 (absolute value)?



- 10) a. What is the value of 'A'?
b. How far is 'A' from 0 (absolute value)?



Answers

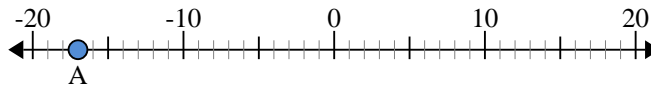
- | | | |
|-----|------------|-----------|
| 1. | <u>-5</u> | <u>5</u> |
| 2. | <u>-3</u> | <u>3</u> |
| 3. | <u>-4</u> | <u>4</u> |
| 4. | <u>8</u> | <u>8</u> |
| 5. | <u>-16</u> | <u>16</u> |
| 6. | <u>13</u> | <u>13</u> |
| 7. | <u>16</u> | <u>16</u> |
| 8. | <u>-6</u> | <u>6</u> |
| 9. | <u>19</u> | <u>19</u> |
| 10. | <u>12</u> | <u>12</u> |



Use the numberlines to find the absolute value.

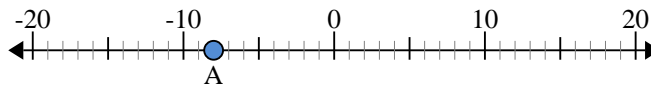
Answers

- 1) a. What is the value of 'A'?
- b. How far is 'A' from 0 (absolute value)?



1. _____

- 2) a. What is the value of 'A'?
- b. How far is 'A' from 0 (absolute value)?



2. _____

- 3) a. What is the value of 'A'?
- b. How far is 'A' from 0 (absolute value)?



3. _____

- 4) a. What is the value of 'A'?
- b. How far is 'A' from 0 (absolute value)?



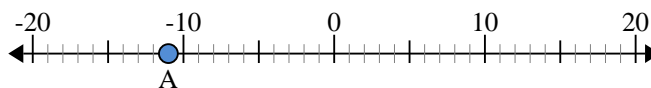
4. _____

- 5) a. What is the value of 'A'?
- b. How far is 'A' from 0 (absolute value)?



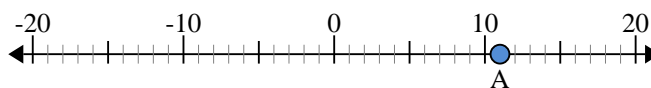
5. _____

- 6) a. What is the value of 'A'?
- b. How far is 'A' from 0 (absolute value)?



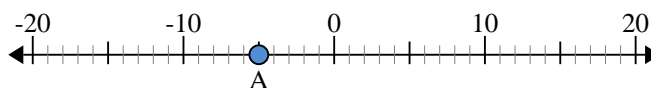
6. _____

- 7) a. What is the value of 'A'?
- b. How far is 'A' from 0 (absolute value)?



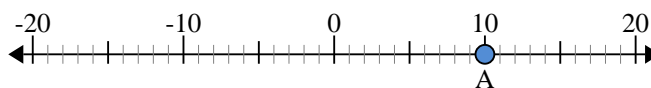
7. _____

- 8) a. What is the value of 'A'?
- b. How far is 'A' from 0 (absolute value)?



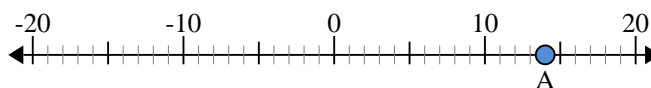
8. _____

- 9) a. What is the value of 'A'?
- b. How far is 'A' from 0 (absolute value)?



9. _____

- 10) a. What is the value of 'A'?
- b. How far is 'A' from 0 (absolute value)?

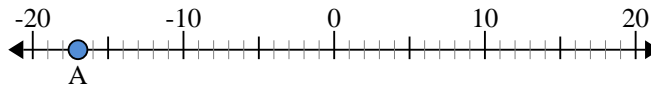


10. _____

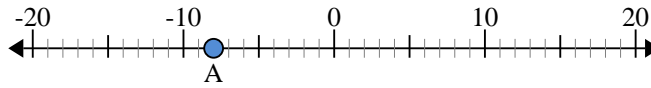


Use the numberlines to find the absolute value.

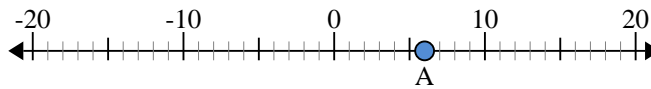
- 1) a. What is the value of 'A'?
b. How far is 'A' from 0 (absolute value)?



- 2) a. What is the value of 'A'?
b. How far is 'A' from 0 (absolute value)?



- 3) a. What is the value of 'A'?
b. How far is 'A' from 0 (absolute value)?



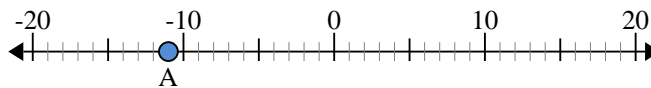
- 4) a. What is the value of 'A'?
b. How far is 'A' from 0 (absolute value)?



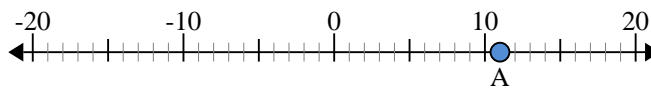
- 5) a. What is the value of 'A'?
b. How far is 'A' from 0 (absolute value)?



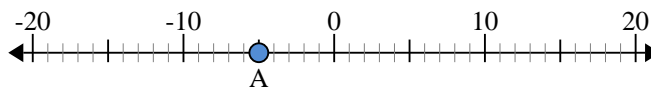
- 6) a. What is the value of 'A'?
b. How far is 'A' from 0 (absolute value)?



- 7) a. What is the value of 'A'?
b. How far is 'A' from 0 (absolute value)?



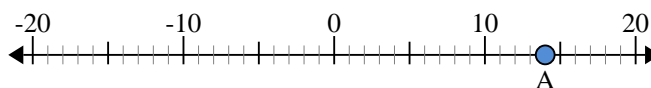
- 8) a. What is the value of 'A'?
b. How far is 'A' from 0 (absolute value)?



- 9) a. What is the value of 'A'?
b. How far is 'A' from 0 (absolute value)?



- 10) a. What is the value of 'A'?
b. How far is 'A' from 0 (absolute value)?



Answers

- | | | |
|-----|------------|-----------|
| 1. | <u>-17</u> | <u>17</u> |
| 2. | <u>-8</u> | <u>8</u> |
| 3. | <u>6</u> | <u>6</u> |
| 4. | <u>15</u> | <u>15</u> |
| 5. | <u>4</u> | <u>4</u> |
| 6. | <u>-11</u> | <u>11</u> |
| 7. | <u>11</u> | <u>11</u> |
| 8. | <u>-5</u> | <u>5</u> |
| 9. | <u>10</u> | <u>10</u> |
| 10. | <u>14</u> | <u>14</u> |



Use the numberlines to find the absolute value.

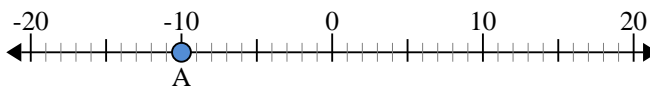
Answers

- 1) a. What is the value of 'A'?
- b. How far is 'A' from 0 (absolute value)?



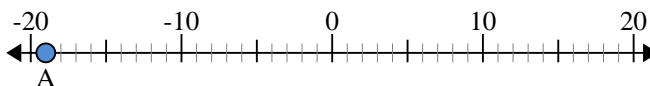
1. _____

- 2) a. What is the value of 'A'?
- b. How far is 'A' from 0 (absolute value)?



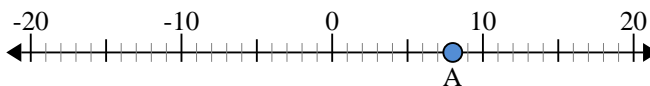
2. _____

- 3) a. What is the value of 'A'?
- b. How far is 'A' from 0 (absolute value)?



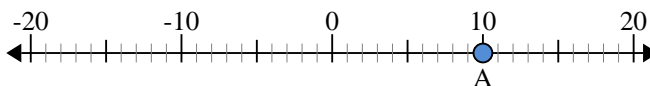
3. _____

- 4) a. What is the value of 'A'?
- b. How far is 'A' from 0 (absolute value)?



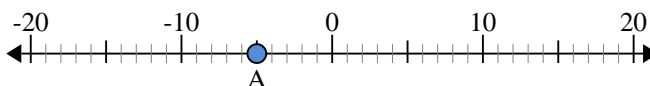
4. _____

- 5) a. What is the value of 'A'?
- b. How far is 'A' from 0 (absolute value)?



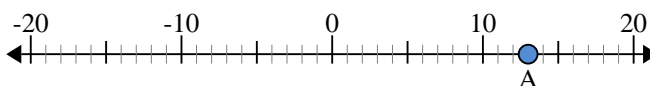
5. _____

- 6) a. What is the value of 'A'?
- b. How far is 'A' from 0 (absolute value)?



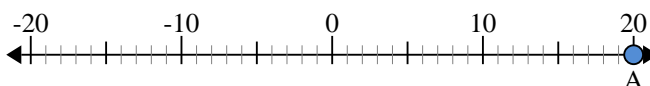
6. _____

- 7) a. What is the value of 'A'?
- b. How far is 'A' from 0 (absolute value)?



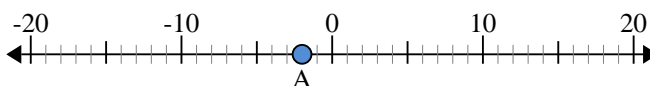
7. _____

- 8) a. What is the value of 'A'?
- b. How far is 'A' from 0 (absolute value)?



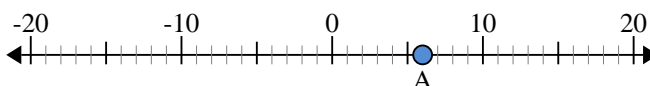
8. _____

- 9) a. What is the value of 'A'?
- b. How far is 'A' from 0 (absolute value)?



9. _____

- 10) a. What is the value of 'A'?
- b. How far is 'A' from 0 (absolute value)?

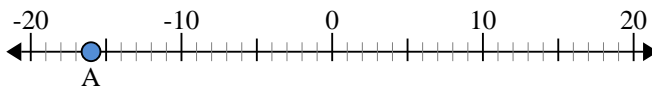


10. _____

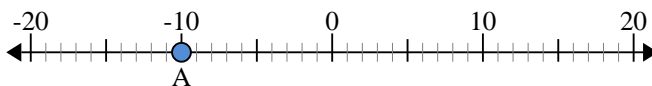


Use the numberlines to find the absolute value.

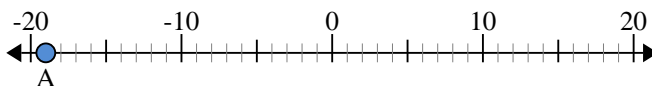
- 1) a. What is the value of 'A'?
b. How far is 'A' from 0 (absolute value)?



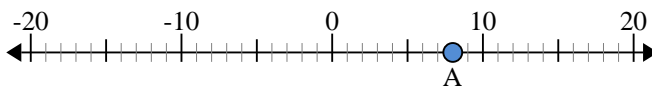
- 2) a. What is the value of 'A'?
b. How far is 'A' from 0 (absolute value)?



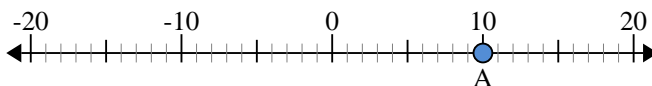
- 3) a. What is the value of 'A'?
b. How far is 'A' from 0 (absolute value)?



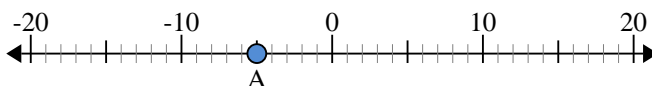
- 4) a. What is the value of 'A'?
b. How far is 'A' from 0 (absolute value)?



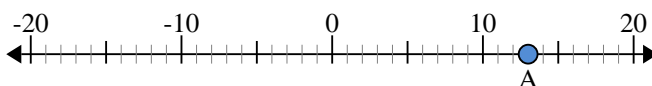
- 5) a. What is the value of 'A'?
b. How far is 'A' from 0 (absolute value)?



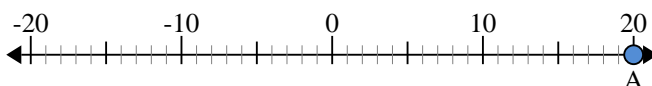
- 6) a. What is the value of 'A'?
b. How far is 'A' from 0 (absolute value)?



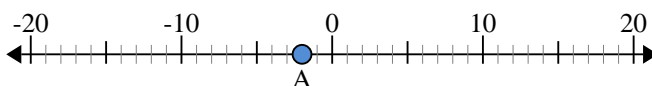
- 7) a. What is the value of 'A'?
b. How far is 'A' from 0 (absolute value)?



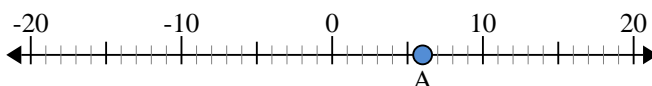
- 8) a. What is the value of 'A'?
b. How far is 'A' from 0 (absolute value)?



- 9) a. What is the value of 'A'?
b. How far is 'A' from 0 (absolute value)?



- 10) a. What is the value of 'A'?
b. How far is 'A' from 0 (absolute value)?



Answers

- | | | |
|-----|------------|-----------|
| 1. | <u>-16</u> | <u>16</u> |
| 2. | <u>-10</u> | <u>10</u> |
| 3. | <u>-19</u> | <u>19</u> |
| 4. | <u>8</u> | <u>8</u> |
| 5. | <u>10</u> | <u>10</u> |
| 6. | <u>-5</u> | <u>5</u> |
| 7. | <u>13</u> | <u>13</u> |
| 8. | <u>20</u> | <u>20</u> |
| 9. | <u>-2</u> | <u>2</u> |
| 10. | <u>6</u> | <u>6</u> |



Use the numberlines to find the absolute value.

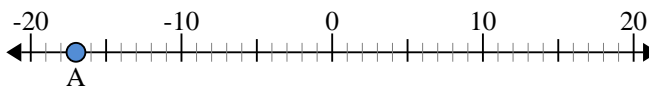
Answers

- 1) a. What is the value of 'A'?
- b. How far is 'A' from 0 (absolute value)?



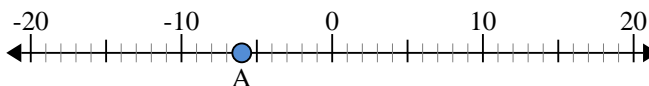
1. _____

- 2) a. What is the value of 'A'?
- b. How far is 'A' from 0 (absolute value)?



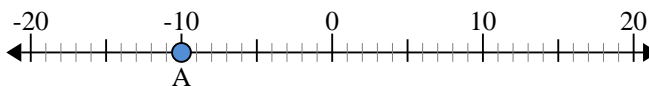
2. _____

- 3) a. What is the value of 'A'?
- b. How far is 'A' from 0 (absolute value)?



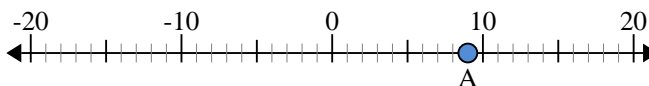
3. _____

- 4) a. What is the value of 'A'?
- b. How far is 'A' from 0 (absolute value)?



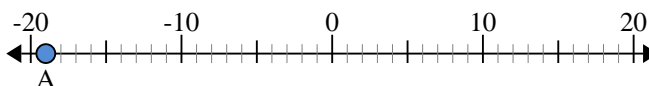
4. _____

- 5) a. What is the value of 'A'?
- b. How far is 'A' from 0 (absolute value)?



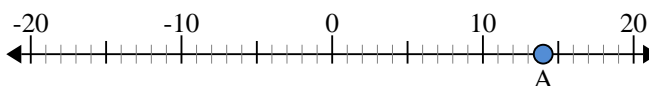
5. _____

- 6) a. What is the value of 'A'?
- b. How far is 'A' from 0 (absolute value)?



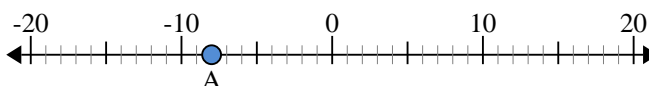
6. _____

- 7) a. What is the value of 'A'?
- b. How far is 'A' from 0 (absolute value)?



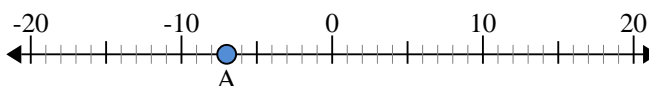
7. _____

- 8) a. What is the value of 'A'?
- b. How far is 'A' from 0 (absolute value)?



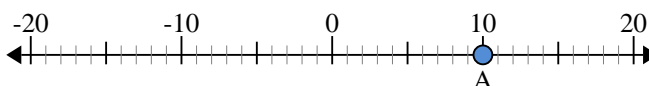
8. _____

- 9) a. What is the value of 'A'?
- b. How far is 'A' from 0 (absolute value)?



9. _____

- 10) a. What is the value of 'A'?
- b. How far is 'A' from 0 (absolute value)?

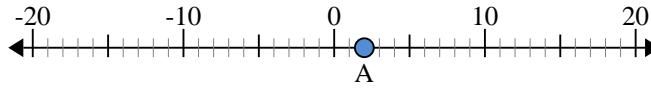


10. _____

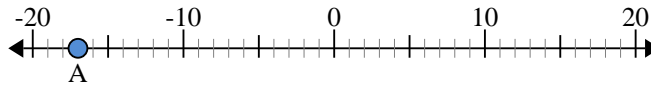


Use the numberlines to find the absolute value.

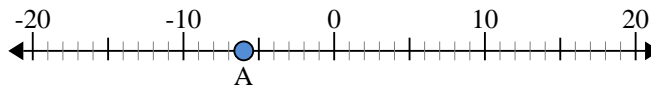
- 1) a. What is the value of 'A'?
b. How far is 'A' from 0 (absolute value)?



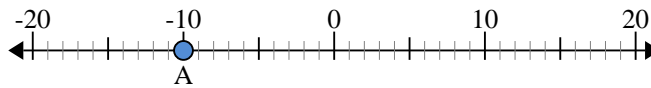
- 2) a. What is the value of 'A'?
b. How far is 'A' from 0 (absolute value)?



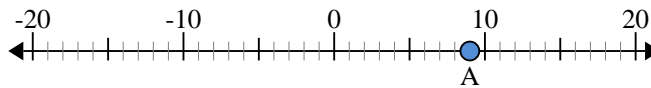
- 3) a. What is the value of 'A'?
b. How far is 'A' from 0 (absolute value)?



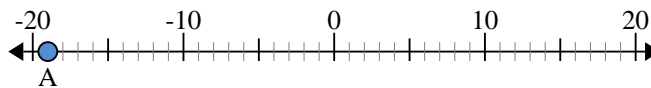
- 4) a. What is the value of 'A'?
b. How far is 'A' from 0 (absolute value)?



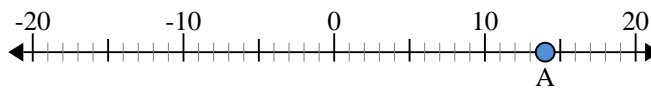
- 5) a. What is the value of 'A'?
b. How far is 'A' from 0 (absolute value)?



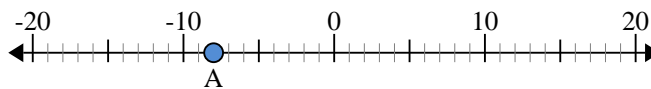
- 6) a. What is the value of 'A'?
b. How far is 'A' from 0 (absolute value)?



- 7) a. What is the value of 'A'?
b. How far is 'A' from 0 (absolute value)?



- 8) a. What is the value of 'A'?
b. How far is 'A' from 0 (absolute value)?



- 9) a. What is the value of 'A'?
b. How far is 'A' from 0 (absolute value)?



- 10) a. What is the value of 'A'?
b. How far is 'A' from 0 (absolute value)?



Answers

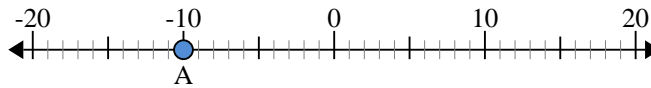
- | | | |
|-----|------------|-----------|
| 1. | <u>2</u> | <u>2</u> |
| 2. | <u>-17</u> | <u>17</u> |
| 3. | <u>-6</u> | <u>6</u> |
| 4. | <u>-10</u> | <u>10</u> |
| 5. | <u>9</u> | <u>9</u> |
| 6. | <u>-19</u> | <u>19</u> |
| 7. | <u>14</u> | <u>14</u> |
| 8. | <u>-8</u> | <u>8</u> |
| 9. | <u>-7</u> | <u>7</u> |
| 10. | <u>10</u> | <u>10</u> |



Use the numberlines to find the absolute value.

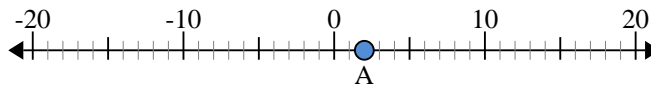
Answers

- 1) a. What is the value of 'A'?
- b. How far is 'A' from 0 (absolute value)?



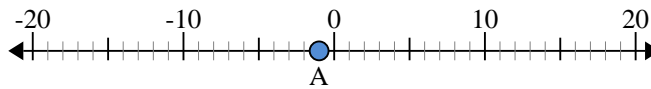
1. _____

- 2) a. What is the value of 'A'?
- b. How far is 'A' from 0 (absolute value)?



2. _____

- 3) a. What is the value of 'A'?
- b. How far is 'A' from 0 (absolute value)?



3. _____

- 4) a. What is the value of 'A'?
- b. How far is 'A' from 0 (absolute value)?



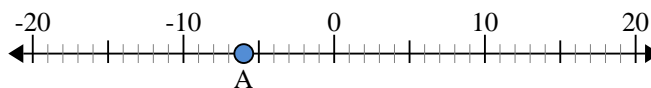
4. _____

- 5) a. What is the value of 'A'?
- b. How far is 'A' from 0 (absolute value)?



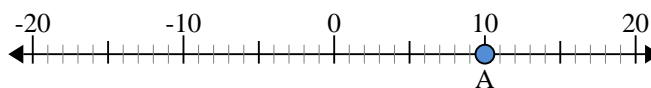
5. _____

- 6) a. What is the value of 'A'?
- b. How far is 'A' from 0 (absolute value)?



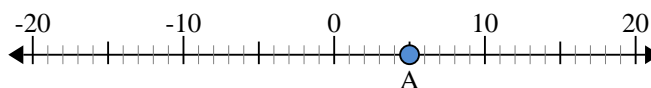
6. _____

- 7) a. What is the value of 'A'?
- b. How far is 'A' from 0 (absolute value)?



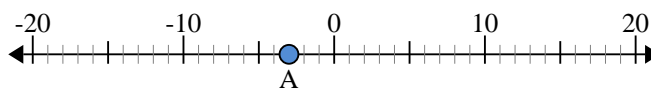
7. _____

- 8) a. What is the value of 'A'?
- b. How far is 'A' from 0 (absolute value)?



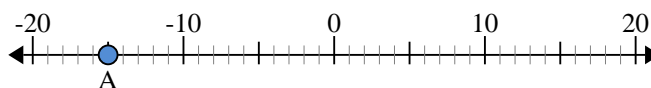
8. _____

- 9) a. What is the value of 'A'?
- b. How far is 'A' from 0 (absolute value)?



9. _____

- 10) a. What is the value of 'A'?
- b. How far is 'A' from 0 (absolute value)?

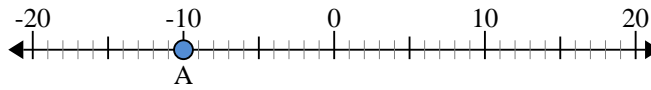


10. _____

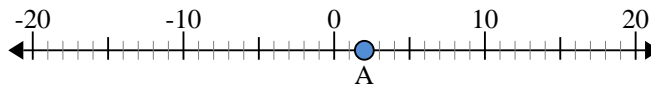


Use the numberlines to find the absolute value.

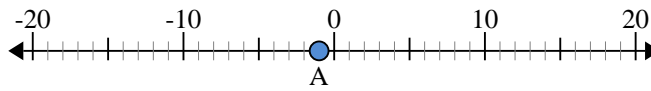
- 1) a. What is the value of 'A'?
b. How far is 'A' from 0 (absolute value)?



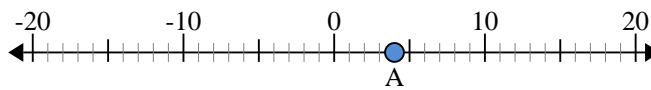
- 2) a. What is the value of 'A'?
b. How far is 'A' from 0 (absolute value)?



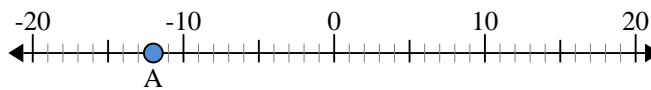
- 3) a. What is the value of 'A'?
b. How far is 'A' from 0 (absolute value)?



- 4) a. What is the value of 'A'?
b. How far is 'A' from 0 (absolute value)?



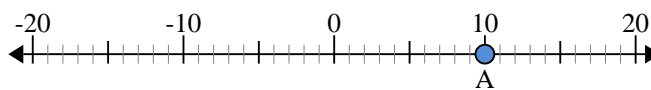
- 5) a. What is the value of 'A'?
b. How far is 'A' from 0 (absolute value)?



- 6) a. What is the value of 'A'?
b. How far is 'A' from 0 (absolute value)?



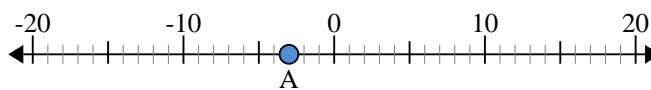
- 7) a. What is the value of 'A'?
b. How far is 'A' from 0 (absolute value)?



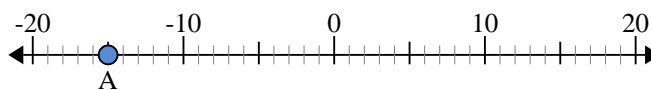
- 8) a. What is the value of 'A'?
b. How far is 'A' from 0 (absolute value)?



- 9) a. What is the value of 'A'?
b. How far is 'A' from 0 (absolute value)?



- 10) a. What is the value of 'A'?
b. How far is 'A' from 0 (absolute value)?



Answers

1.	<u>-10</u>	<u>10</u>
2.	<u>2</u>	<u>2</u>
3.	<u>-1</u>	<u>1</u>
4.	<u>4</u>	<u>4</u>
5.	<u>-12</u>	<u>12</u>
6.	<u>-6</u>	<u>6</u>
7.	<u>10</u>	<u>10</u>
8.	<u>5</u>	<u>5</u>
9.	<u>-3</u>	<u>3</u>
10.	<u>-15</u>	<u>15</u>



Use the numberlines to find the absolute value.

Answers

- 1) a. What is the value of 'A'?
- b. How far is 'A' from 0 (absolute value)?



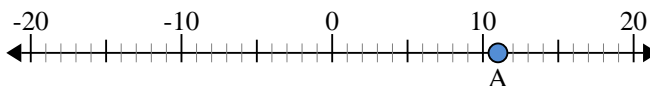
1. _____

- 2) a. What is the value of 'A'?
- b. How far is 'A' from 0 (absolute value)?



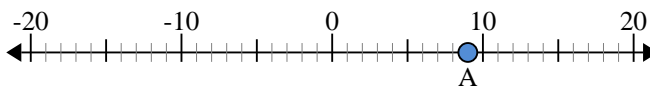
2. _____

- 3) a. What is the value of 'A'?
- b. How far is 'A' from 0 (absolute value)?



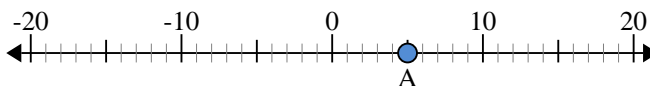
3. _____

- 4) a. What is the value of 'A'?
- b. How far is 'A' from 0 (absolute value)?



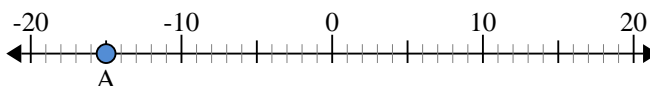
4. _____

- 5) a. What is the value of 'A'?
- b. How far is 'A' from 0 (absolute value)?



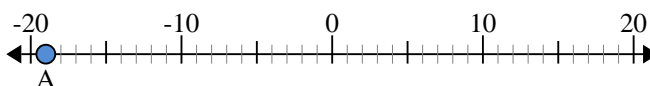
5. _____

- 6) a. What is the value of 'A'?
- b. How far is 'A' from 0 (absolute value)?



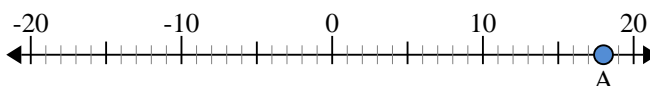
6. _____

- 7) a. What is the value of 'A'?
- b. How far is 'A' from 0 (absolute value)?



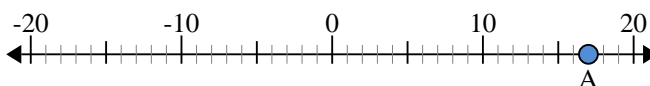
7. _____

- 8) a. What is the value of 'A'?
- b. How far is 'A' from 0 (absolute value)?



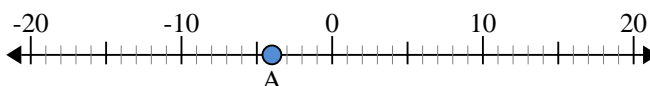
8. _____

- 9) a. What is the value of 'A'?
- b. How far is 'A' from 0 (absolute value)?



9. _____

- 10) a. What is the value of 'A'?
- b. How far is 'A' from 0 (absolute value)?

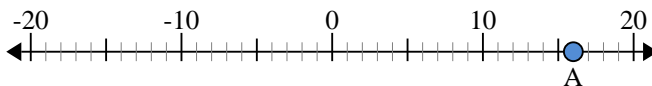


10. _____

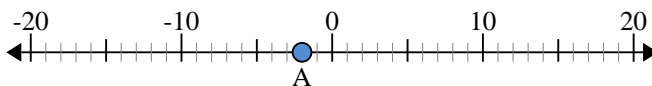


Use the numberlines to find the absolute value.

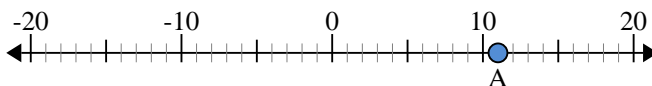
- 1) a. What is the value of 'A'?
 b. How far is 'A' from 0 (absolute value)?



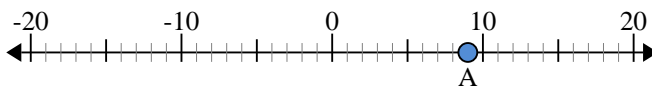
- 2) a. What is the value of 'A'?
 b. How far is 'A' from 0 (absolute value)?



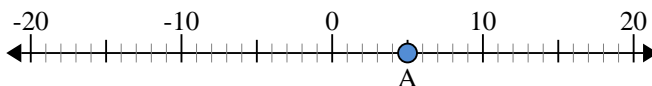
- 3) a. What is the value of 'A'?
 b. How far is 'A' from 0 (absolute value)?



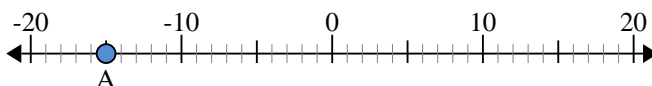
- 4) a. What is the value of 'A'?
 b. How far is 'A' from 0 (absolute value)?



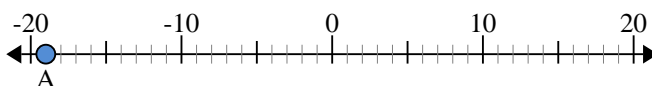
- 5) a. What is the value of 'A'?
 b. How far is 'A' from 0 (absolute value)?



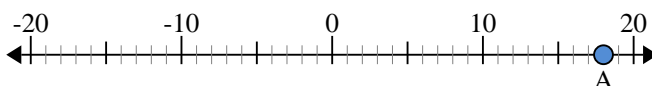
- 6) a. What is the value of 'A'?
 b. How far is 'A' from 0 (absolute value)?



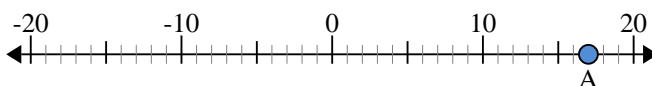
- 7) a. What is the value of 'A'?
 b. How far is 'A' from 0 (absolute value)?



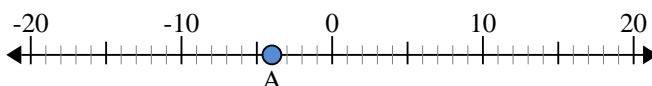
- 8) a. What is the value of 'A'?
 b. How far is 'A' from 0 (absolute value)?



- 9) a. What is the value of 'A'?
 b. How far is 'A' from 0 (absolute value)?



- 10) a. What is the value of 'A'?
 b. How far is 'A' from 0 (absolute value)?



Answers

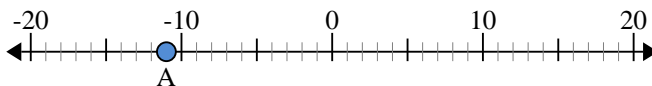
- | | | |
|-----|------------|-----------|
| 1. | <u>16</u> | <u>16</u> |
| 2. | <u>-2</u> | <u>2</u> |
| 3. | <u>11</u> | <u>11</u> |
| 4. | <u>9</u> | <u>9</u> |
| 5. | <u>5</u> | <u>5</u> |
| 6. | <u>-15</u> | <u>15</u> |
| 7. | <u>-19</u> | <u>19</u> |
| 8. | <u>18</u> | <u>18</u> |
| 9. | <u>17</u> | <u>17</u> |
| 10. | <u>-4</u> | <u>4</u> |



Use the numberlines to find the absolute value.

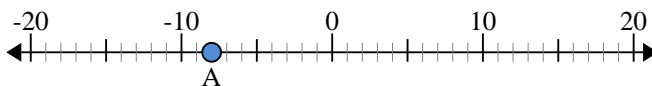
Answers

- 1) a. What is the value of 'A'?
- b. How far is 'A' from 0 (absolute value)?



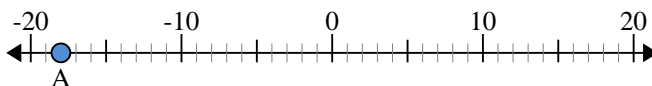
1. _____

- 2) a. What is the value of 'A'?
- b. How far is 'A' from 0 (absolute value)?



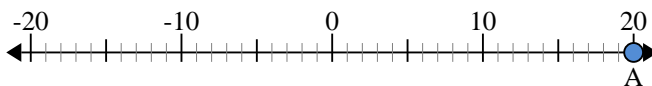
2. _____

- 3) a. What is the value of 'A'?
- b. How far is 'A' from 0 (absolute value)?



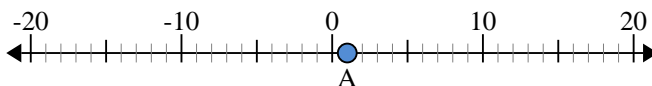
3. _____

- 4) a. What is the value of 'A'?
- b. How far is 'A' from 0 (absolute value)?



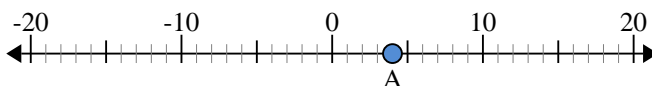
4. _____

- 5) a. What is the value of 'A'?
- b. How far is 'A' from 0 (absolute value)?



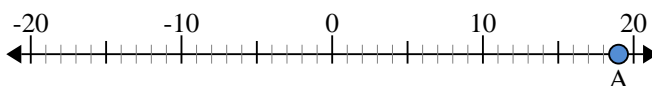
5. _____

- 6) a. What is the value of 'A'?
- b. How far is 'A' from 0 (absolute value)?



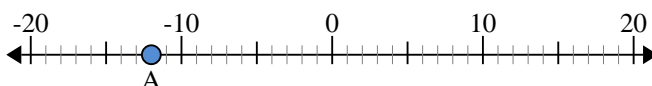
6. _____

- 7) a. What is the value of 'A'?
- b. How far is 'A' from 0 (absolute value)?



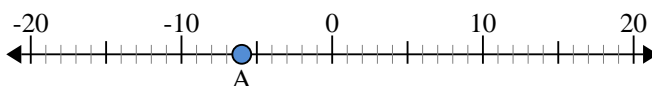
7. _____

- 8) a. What is the value of 'A'?
- b. How far is 'A' from 0 (absolute value)?



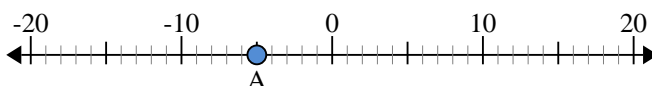
8. _____

- 9) a. What is the value of 'A'?
- b. How far is 'A' from 0 (absolute value)?



9. _____

- 10) a. What is the value of 'A'?
- b. How far is 'A' from 0 (absolute value)?

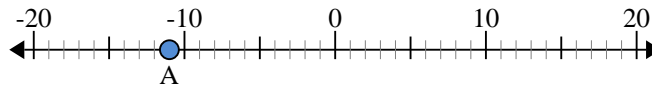


10. _____

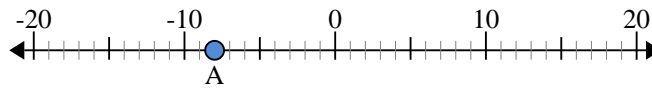


Use the numberlines to find the absolute value.

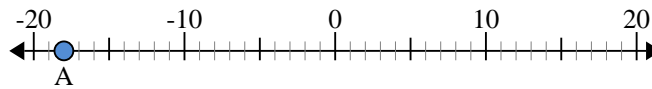
- 1) a. What is the value of 'A'?
b. How far is 'A' from 0 (absolute value)?



- 2) a. What is the value of 'A'?
b. How far is 'A' from 0 (absolute value)?



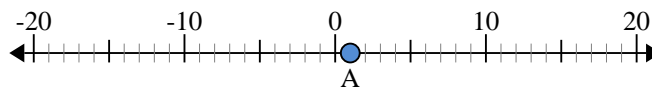
- 3) a. What is the value of 'A'?
b. How far is 'A' from 0 (absolute value)?



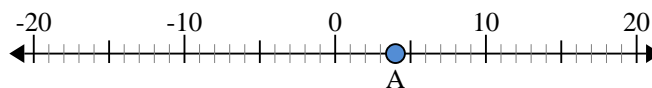
- 4) a. What is the value of 'A'?
b. How far is 'A' from 0 (absolute value)?



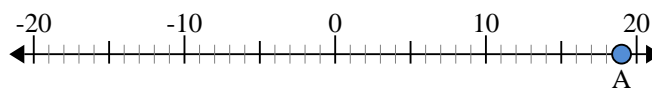
- 5) a. What is the value of 'A'?
b. How far is 'A' from 0 (absolute value)?



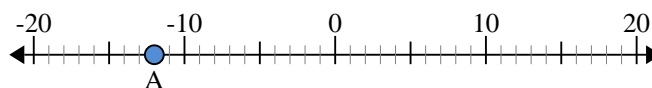
- 6) a. What is the value of 'A'?
b. How far is 'A' from 0 (absolute value)?



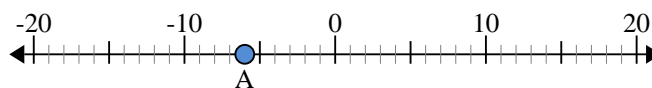
- 7) a. What is the value of 'A'?
b. How far is 'A' from 0 (absolute value)?



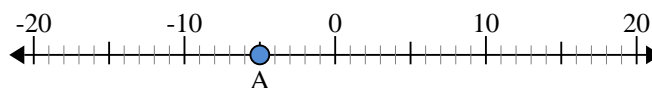
- 8) a. What is the value of 'A'?
b. How far is 'A' from 0 (absolute value)?



- 9) a. What is the value of 'A'?
b. How far is 'A' from 0 (absolute value)?



- 10) a. What is the value of 'A'?
b. How far is 'A' from 0 (absolute value)?



Answers

1.	<u>-11</u>	<u>11</u>
2.	<u>-8</u>	<u>8</u>
3.	<u>-18</u>	<u>18</u>
4.	<u>20</u>	<u>20</u>
5.	<u>1</u>	<u>1</u>
6.	<u>4</u>	<u>4</u>
7.	<u>19</u>	<u>19</u>
8.	<u>-12</u>	<u>12</u>
9.	<u>-6</u>	<u>6</u>
10.	<u>-5</u>	<u>5</u>