



Use the numberlines to find the absolute value.

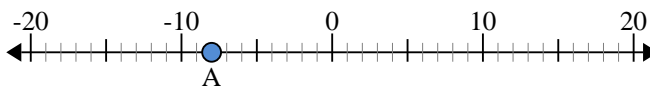
Answers

- 1) a. What is the value of 'A'?
- b. How far is 'A' from 0 (absolute value)?



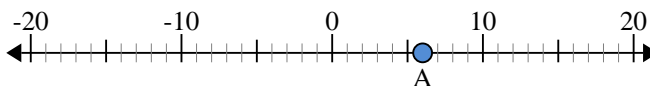
1. _____

- 2) a. What is the value of 'A'?
- b. How far is 'A' from 0 (absolute value)?



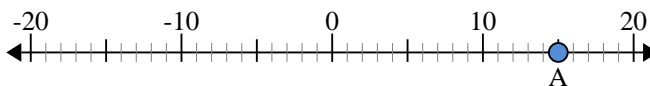
2. _____

- 3) a. What is the value of 'A'?
- b. How far is 'A' from 0 (absolute value)?



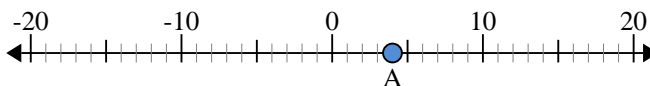
3. _____

- 4) a. What is the value of 'A'?
- b. How far is 'A' from 0 (absolute value)?



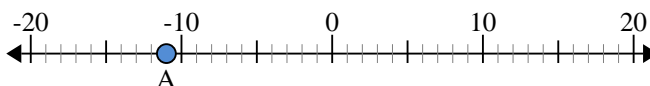
4. _____

- 5) a. What is the value of 'A'?
- b. How far is 'A' from 0 (absolute value)?



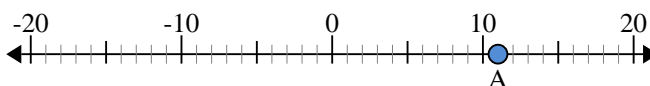
5. _____

- 6) a. What is the value of 'A'?
- b. How far is 'A' from 0 (absolute value)?



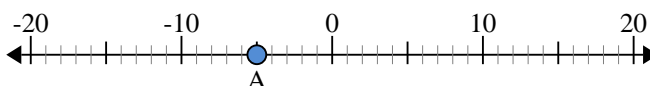
6. _____

- 7) a. What is the value of 'A'?
- b. How far is 'A' from 0 (absolute value)?



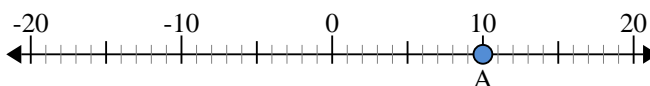
7. _____

- 8) a. What is the value of 'A'?
- b. How far is 'A' from 0 (absolute value)?



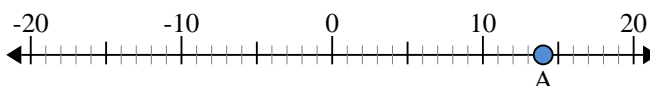
8. _____

- 9) a. What is the value of 'A'?
- b. How far is 'A' from 0 (absolute value)?



9. _____

- 10) a. What is the value of 'A'?
- b. How far is 'A' from 0 (absolute value)?

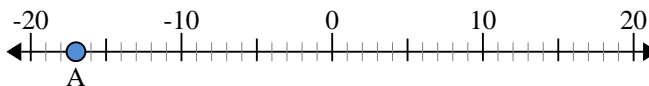


10. _____

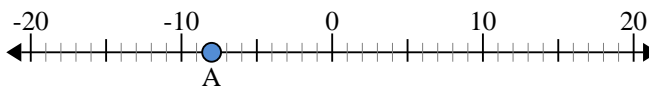


Use the numberlines to find the absolute value.

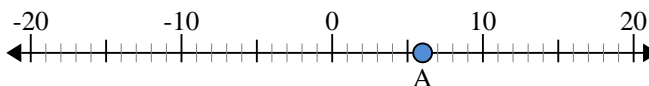
- 1) a. What is the value of 'A'?
b. How far is 'A' from 0 (absolute value)?



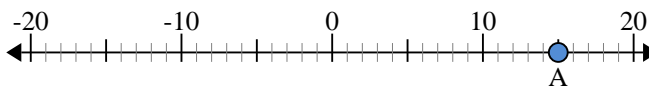
- 2) a. What is the value of 'A'?
b. How far is 'A' from 0 (absolute value)?



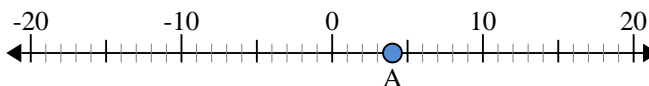
- 3) a. What is the value of 'A'?
b. How far is 'A' from 0 (absolute value)?



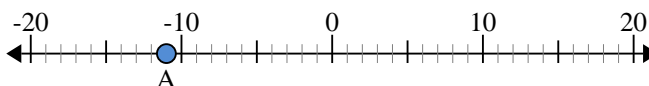
- 4) a. What is the value of 'A'?
b. How far is 'A' from 0 (absolute value)?



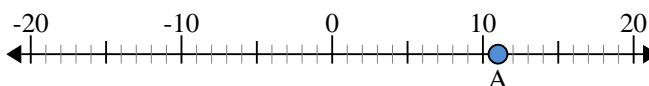
- 5) a. What is the value of 'A'?
b. How far is 'A' from 0 (absolute value)?



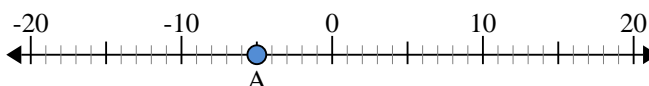
- 6) a. What is the value of 'A'?
b. How far is 'A' from 0 (absolute value)?



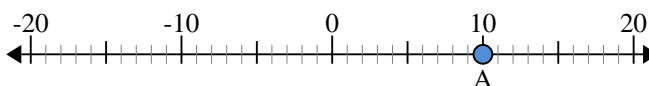
- 7) a. What is the value of 'A'?
b. How far is 'A' from 0 (absolute value)?



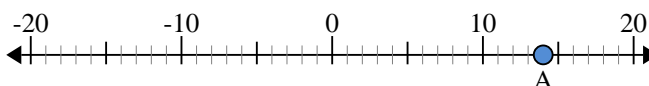
- 8) a. What is the value of 'A'?
b. How far is 'A' from 0 (absolute value)?



- 9) a. What is the value of 'A'?
b. How far is 'A' from 0 (absolute value)?



- 10) a. What is the value of 'A'?
b. How far is 'A' from 0 (absolute value)?



Answers

- | | | |
|-----|------------|-----------|
| 1. | <u>-17</u> | <u>17</u> |
| 2. | <u>-8</u> | <u>8</u> |
| 3. | <u>6</u> | <u>6</u> |
| 4. | <u>15</u> | <u>15</u> |
| 5. | <u>4</u> | <u>4</u> |
| 6. | <u>-11</u> | <u>11</u> |
| 7. | <u>11</u> | <u>11</u> |
| 8. | <u>-5</u> | <u>5</u> |
| 9. | <u>10</u> | <u>10</u> |
| 10. | <u>14</u> | <u>14</u> |