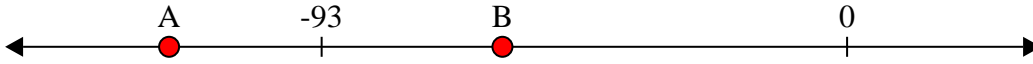




Solve each problem.

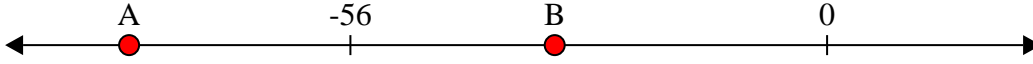
Answers

1) Which letter best shows -120?




1. _____

2) Which letter best shows -82?




2. _____

3) Which letter best shows -84?



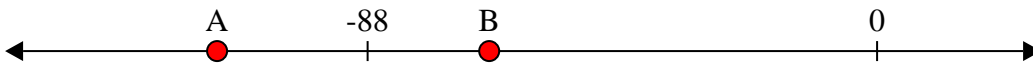
3. _____

4) Which letter best shows -17?




4. _____

5) Which letter best shows -67?




5. _____

6) Which letter best shows -30?




6. _____

7) Which letter best shows -27?




7. _____

8) Which letter best shows -93?




8. _____

9) Which letter best shows -18?



9. _____

10) Which letter best shows -99?

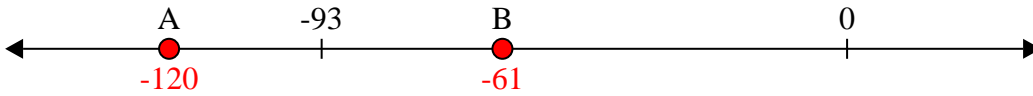


10. _____

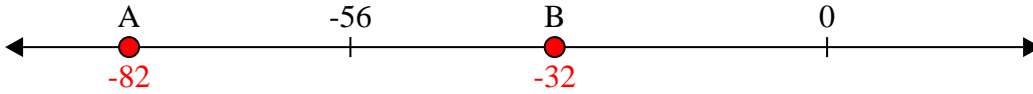


Solve each problem.

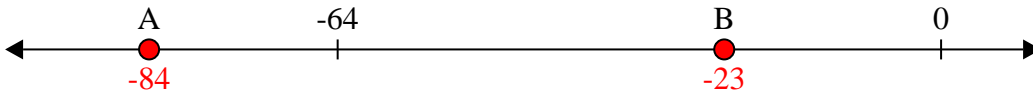
1) Which letter best shows -120?




2) Which letter best shows -82?



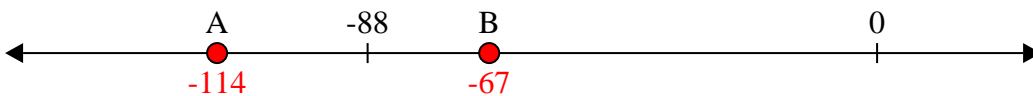
3) Which letter best shows -84?




4) Which letter best shows -17?




5) Which letter best shows -67?



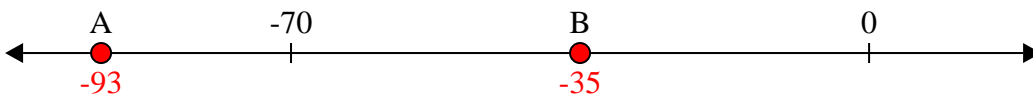
6) Which letter best shows -30?




7) Which letter best shows -27?




8) Which letter best shows -93?



9) Which letter best shows -18?



10) Which letter best shows -99?



Answers

1. **A**
2. **A**
3. **A**
4. **B**
5. **B**
6. **B**
7. **B**
8. **A**
9. **B**
10. **A**