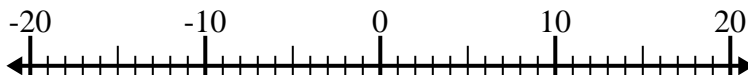


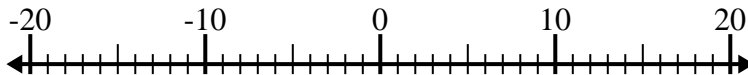


Solve each problem. Use the numberline if needed.

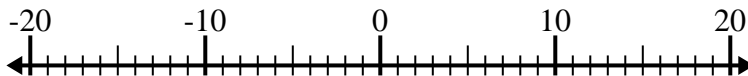
1) $(-7) + (-8) =$ _____



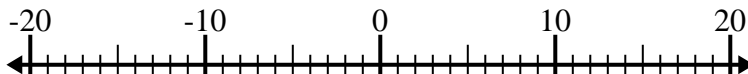
2) $1 + (-5) =$ _____



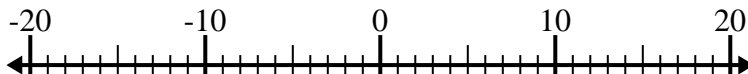
3) $(-15) + 9 =$ _____



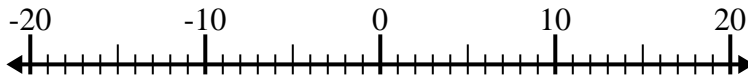
4) $(-1) + 8 =$ _____



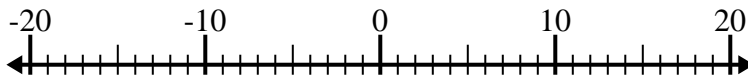
5) $6 - (-2) =$ _____



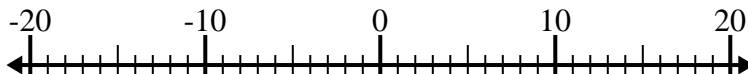
6) $(-7) - (-9) =$ _____



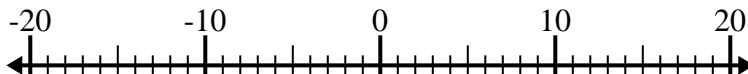
7) $14 - (-4) =$ _____



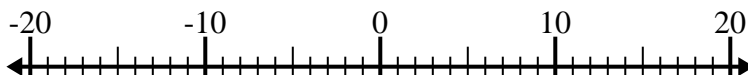
8) $6 - (-9) =$ _____



9) $(-8) + (-7) =$ _____



10) $(-13) + 4 =$ _____



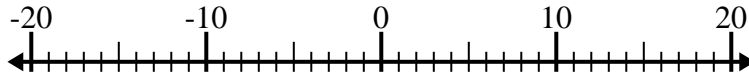
Answers

1. _____
2. _____
3. _____
4. _____
5. _____
6. _____
7. _____
8. _____
9. _____
10. _____

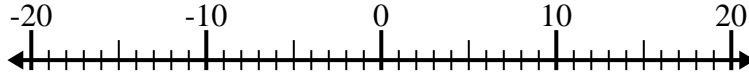


Solve each problem. Use the numberline if needed.

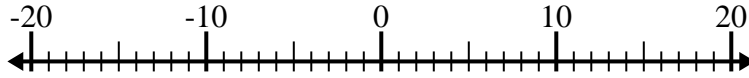
1) $(-7) + (-8) = \underline{-15}$



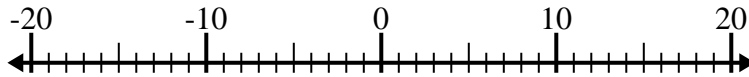
2) $1 + (-5) = \underline{-4}$



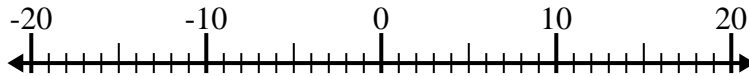
3) $(-15) + 9 = \underline{-6}$



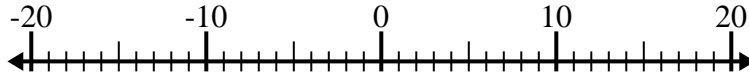
4) $(-1) + 8 = \underline{7}$



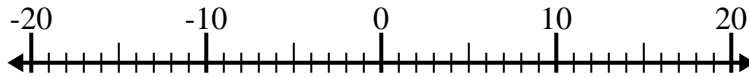
5) $6 - (-2) = \underline{8}$



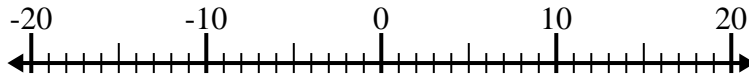
6) $(-7) - (-9) = \underline{2}$



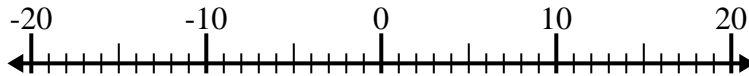
7) $14 - (-4) = \underline{18}$



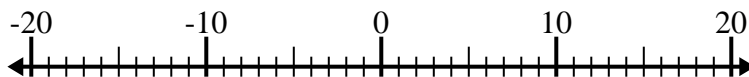
8) $6 - (-9) = \underline{15}$



9) $(-8) + (-7) = \underline{-15}$



10) $(-13) + 4 = \underline{-9}$



Answers

1. **-15**

2. **-4**

3. **-6**

4. **7**

5. **8**

6. **2**

7. **18**

8. **15**

9. **-15**

10. **-9**