




Express each set as a multiplication problem.


Ex)



Answers

Ex. $7 \times 6 = 42$

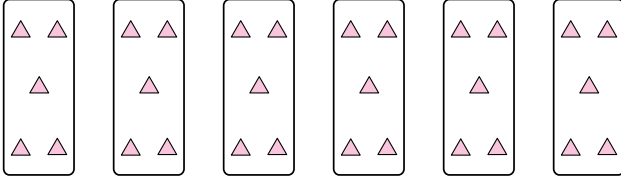
1)



1. _____

2. _____


2)



3. _____

4. _____

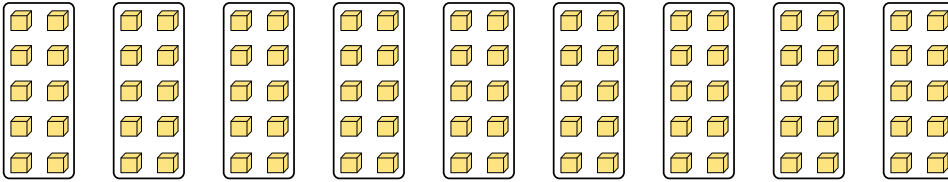
3)



5. _____

6. _____


4)



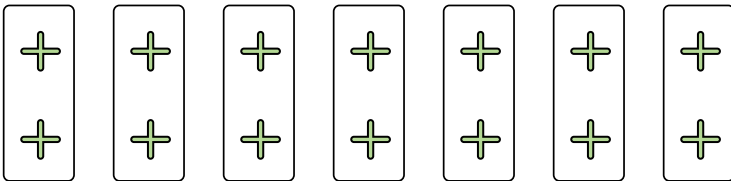
7. _____

8. _____

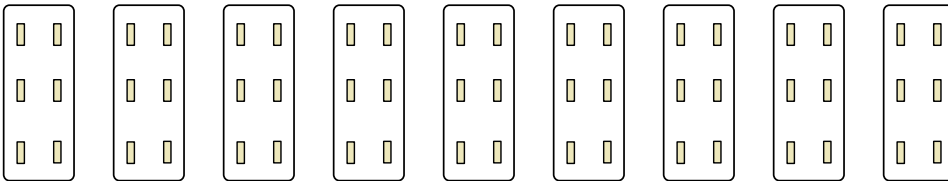
5)



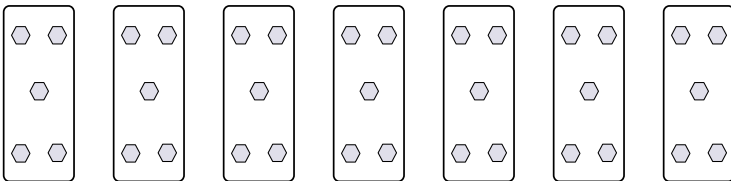
6)



7)



8)





Express each set as a multiplication problem.

Ex)

Answers

Ex. $7 \times 6 = 42$

1)

1. $3 \times 10 = 30$

2)

2. $6 \times 5 = 30$

3)

3. $3 \times 4 = 12$

4)

4. $9 \times 10 = 90$

5)

5. $8 \times 3 = 24$

6)

6. $7 \times 2 = 14$

7)

7. $9 \times 6 = 54$

8)

8. $7 \times 5 = 35$