



Express each set as a multiplication problem.

Answers

Ex)

Ex. $8 \cdot 10 = 80$

1)

1. _____

2. _____

2)

3. _____

4. _____

3)

5. _____

6. _____

4)

7. _____

8. _____

5)

6)


7)

8)




Express each set as a multiplication problem.

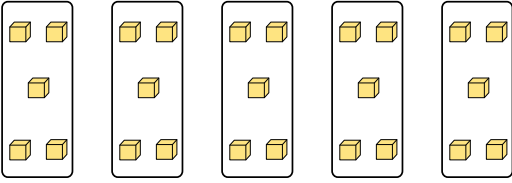
Ex)



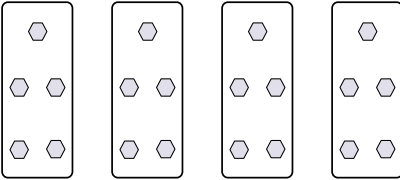
1)




2)



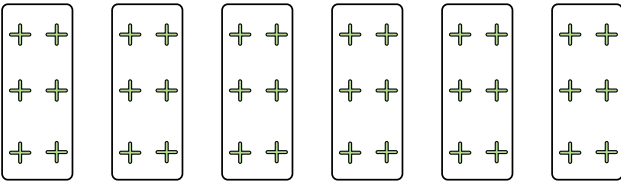
3)




4)



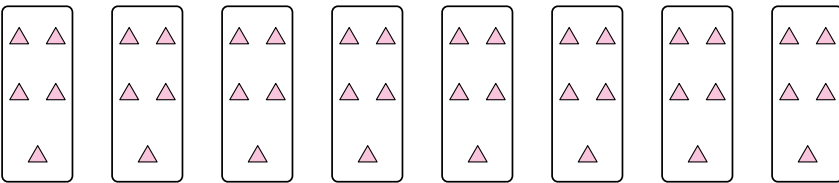
5)



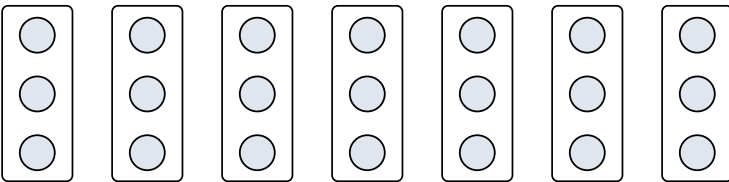
6)



7)



8)



Answers

Ex. $8 \cdot 10 = 80$

1. $9 \cdot 8 = 72$

2. $5 \cdot 5 = 25$

3. $4 \cdot 5 = 20$

4. $6 \cdot 7 = 42$

5. $6 \cdot 6 = 36$

6. $10 \cdot 6 = 60$

7. $8 \cdot 5 = 40$

8. $7 \cdot 3 = 21$