



Express each set as a multiplication problem.

Answers

Ex)

Ex.  $4 \cdot 6 = 24$

1)

1. \_\_\_\_\_

2)

2. \_\_\_\_\_

3)

3. \_\_\_\_\_

4)

4. \_\_\_\_\_

5)

5. \_\_\_\_\_

6)

6. \_\_\_\_\_

7)

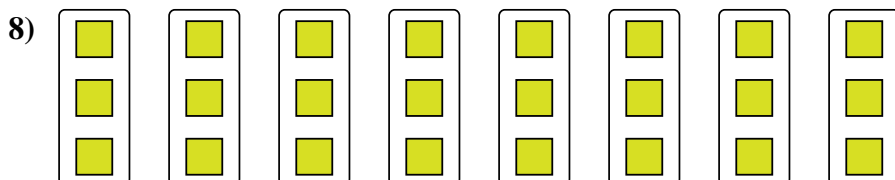

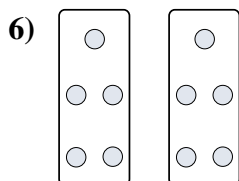
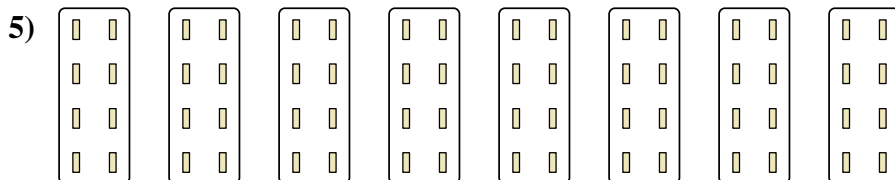
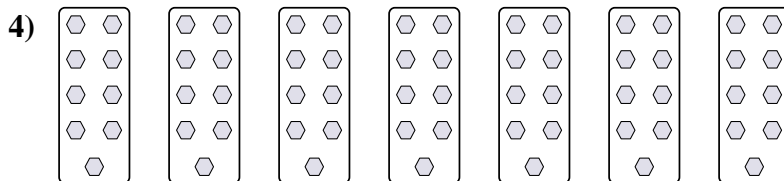

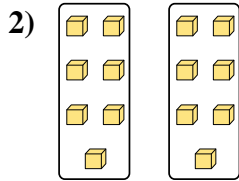
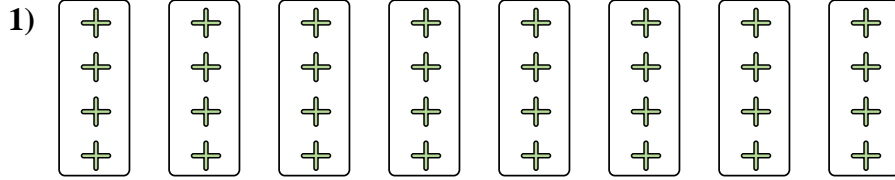

7. \_\_\_\_\_

8)

8. \_\_\_\_\_



Express each set as a multiplication problem.



Answers

Ex. 4•6=24

1. 8•4=32

2. 2•7=14

3. 7•4=28

4. 7•9=63

5. 8•8=64

6. 2•5=10

7. 3•8=24

8. 8•3=24