

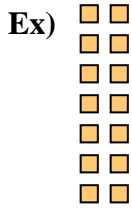




Write each array as a multiplication problem and solve.



Answers

Ex. 7 • 2 = 14

1. _____

2. _____

3. _____

4. _____

5. _____

6. _____







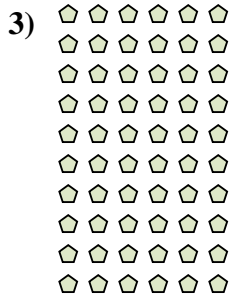
7. _____

8. _____

9. _____



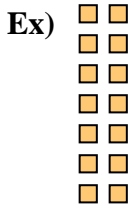
10. _____

11. _____





Write each array as a multiplication problem and solve.



Answers

Ex. 7 • 2 = 14

1. 2 • 8 = 16

2. 9 • 8 = 72

3. 10 • 6 = 60

4. 8 • 6 = 48

5. 4 • 3 = 12

6. 10 • 4 = 40

7. 8 • 8 = 64

8. 6 • 7 = 42

9. 6 • 10 = 60

10. 8 • 10 = 80

11. 6 • 9 = 54

