



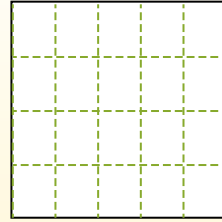
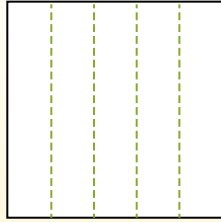

Partition the shape as described and then count to find the number of boxes.

Rows go left to right.

Columns go up and down.

This has 4 rows and 5 columns.


There are 20 boxes total.




Answers

- 1. _____
- 2. _____
- 3. _____
- 4. _____
- 5. _____
- 6. _____
- 7. _____
- 8. _____
- 9. _____


1) 3 rows
4 columns




2) 3 rows
2 columns




3) 4 rows
4 columns



4) 5 rows
3 columns




5) 5 rows
5 columns




6) 4 rows
2 columns



7) 5 rows
4 columns



8) 3 rows
3 columns



9) 2 rows
3 columns





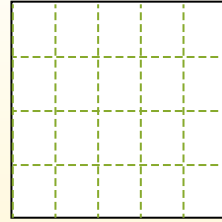
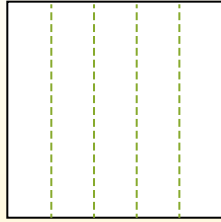

Partition the shape as described and then count to find the number of boxes.

Rows go left to right.

Columns go up and down.

This has 4 rows and 5 columns.

There are 20 boxes total.



Answers

1. 12

2. 6

3. 16

4. 15

5. 25

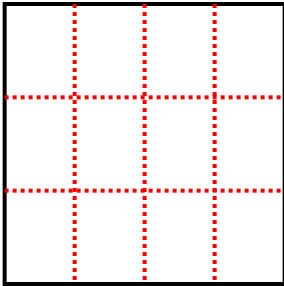
6. 8

7. 20

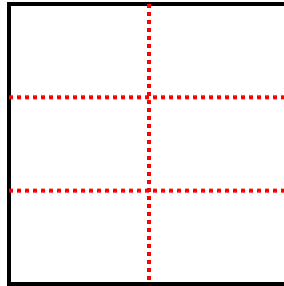
8. 9

9. 6

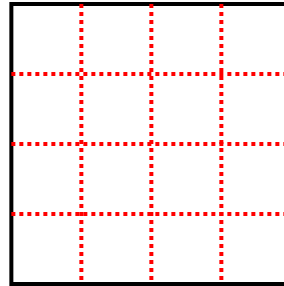
1) 3 rows
4 columns



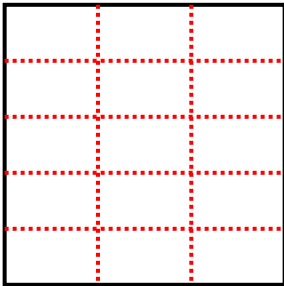
2) 3 rows
2 columns



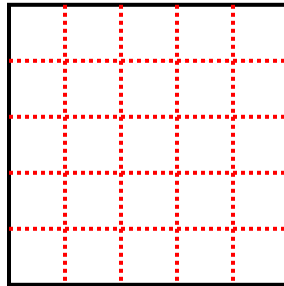
3) 4 rows
4 columns



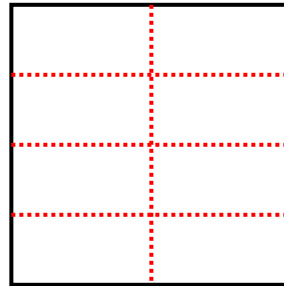
4) 5 rows
3 columns




5) 5 rows
5 columns



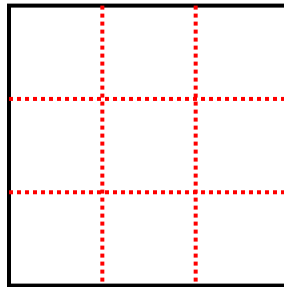
6) 4 rows
2 columns



7) 5 rows
4 columns



8) 3 rows
3 columns



9) 2 rows
3 columns

