

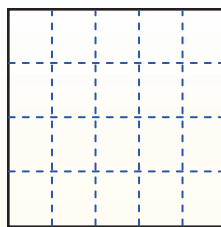
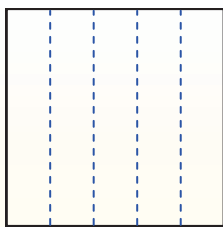
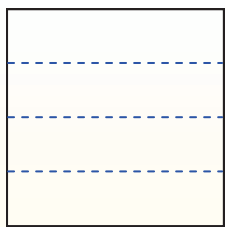


Partition the shape as described and then count to find the number of boxes.


Rows go left and right.

Columns go up and down.


This has 4 rows and 5 columns.
There are 20 boxes total.




1) 3 rows
5 columns




2) 2 rows
3 columns




3) 5 rows
5 columns




4) 2 rows
2 columns




5) 4 rows
2 columns




6) 5 rows
2 columns




7) 5 rows
4 columns



8) 2 rows
4 columns



9) 3 rows
2 columns



Answers

1. _____
2. _____
3. _____
4. _____
5. _____
6. _____
7. _____
8. _____
9. _____

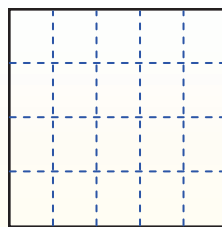
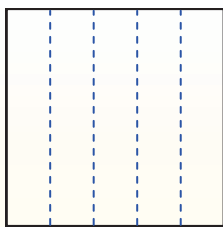
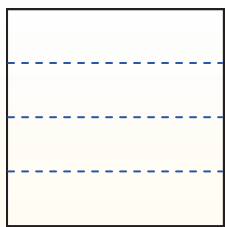


Partition the shape as described and then count to find the number of boxes.


Rows go left and right.

Columns go up and down.


This has 4 rows and 5 columns.
There are 20 boxes total.




1) 3 rows
5 columns




2) 2 rows
3 columns




3) 5 rows
5 columns




4) 2 rows
2 columns




5) 4 rows
2 columns




6) 5 rows
2 columns




7) 5 rows
4 columns



8) 2 rows
4 columns



9) 3 rows
2 columns



Answers

1. 15

2. 6

3. 25

4. 4

5. 8

6. 10

7. 20

8. 8

9. 6