





Use the array provided to solve each problem.


1) $33 \times 22 =$




2) $33 \times 12 =$




3) $39 \times 14 =$



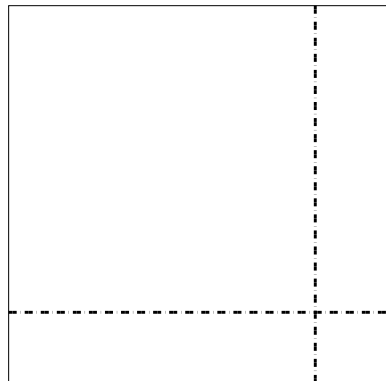
4) $32 \times 34 =$



5) $36 \times 35 =$



6) $37 \times 38 =$



Answers

1. _____

2. _____

3. _____

4. _____

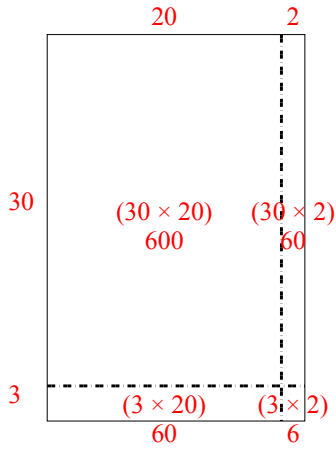
5. _____

6. _____

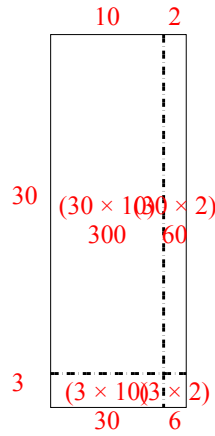


Use the array provided to solve each problem.

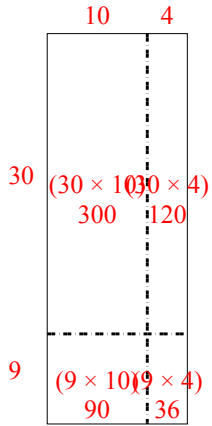
1) $33 \times 22 =$



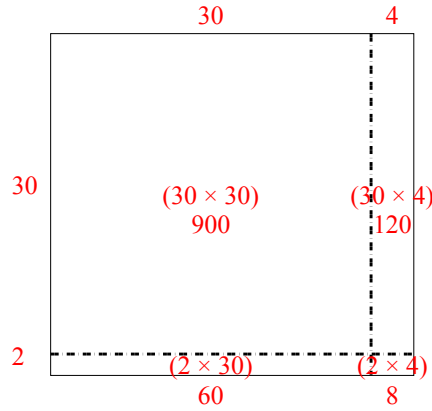
2) $33 \times 12 =$



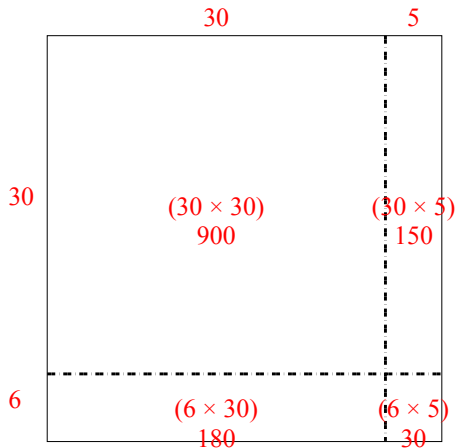
3) $39 \times 14 =$



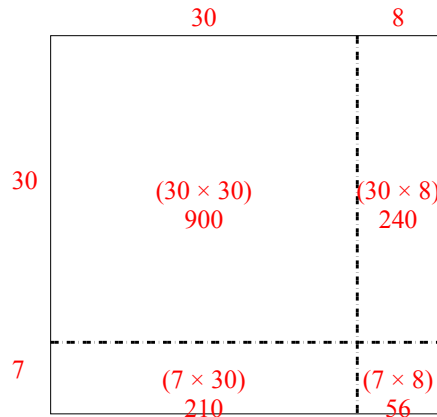
4) $32 \times 34 =$



5) $36 \times 35 =$



6) $37 \times 38 =$



Answers

1. 726

2. 396

3. 546

4. 1,088

5. 1,260

6. 1,406