


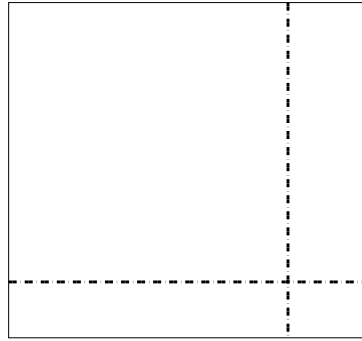


Use the array provided to solve each problem.


1) $34 \times 18 =$



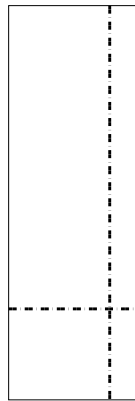
2) $36 \times 39 =$




3) $39 \times 23 =$




4) $39 \times 13 =$



5) $37 \times 42 =$



6) $34 \times 47 =$



Answers

1. _____

2. _____

3. _____

4. _____

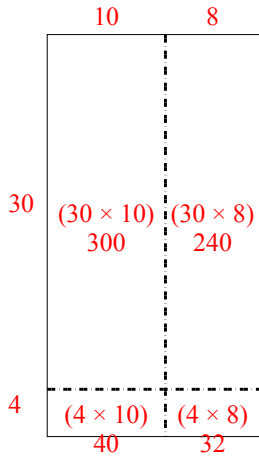
5. _____

6. _____

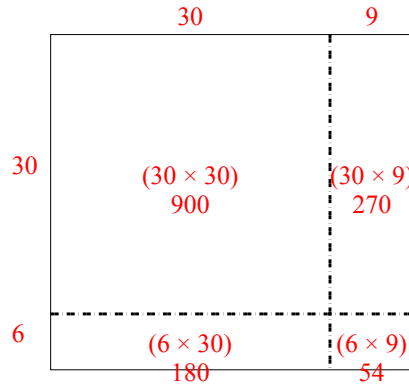


Use the array provided to solve each problem.

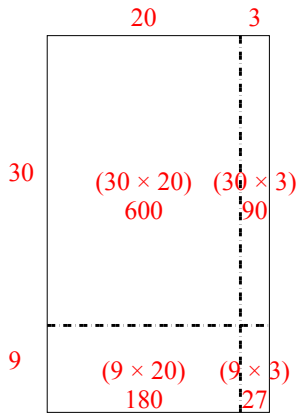
1) $34 \times 18 =$



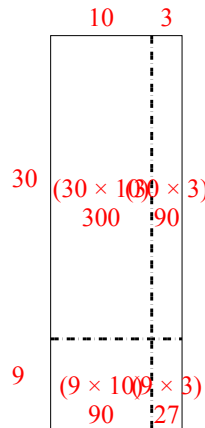
2) $36 \times 39 =$



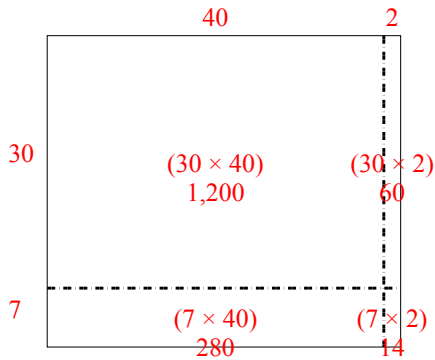
3) $39 \times 23 =$



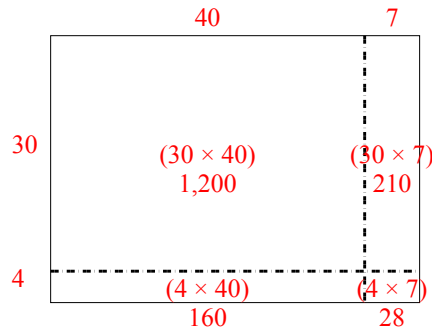
4) $39 \times 13 =$



5) $37 \times 42 =$



6) $34 \times 47 =$



Answers

1. 612

2. 1,404

3. 897

4. 507

5. 1,554

6. 1,598