





Use the array provided to solve each problem.

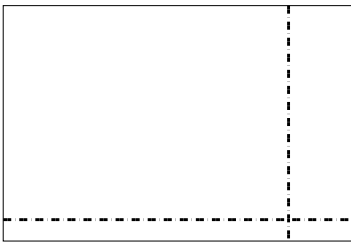
1)  $34 \times 25 =$




2)  $34 \times 22 =$



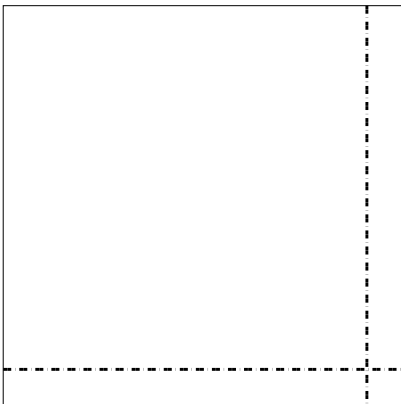
3)  $33 \times 49 =$




4)  $42 \times 26 =$



5)  $33 \times 33 =$



6)  $39 \times 22 =$



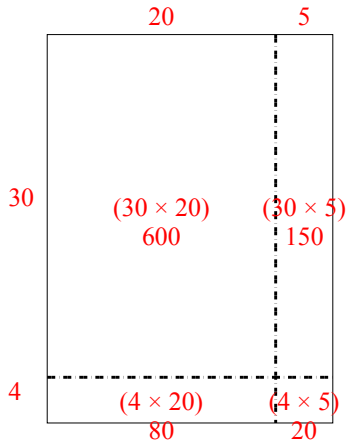
Answers

- 1. \_\_\_\_\_
- 2. \_\_\_\_\_
- 3. \_\_\_\_\_
- 4. \_\_\_\_\_
- 5. \_\_\_\_\_
- 6. \_\_\_\_\_

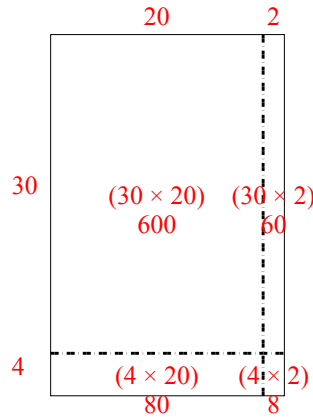


Use the array provided to solve each problem.

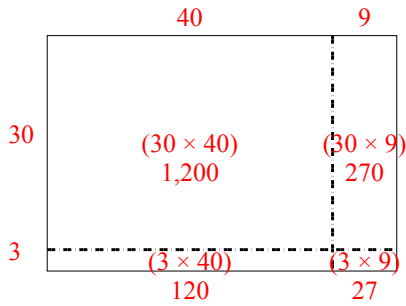
1)  $34 \times 25 =$



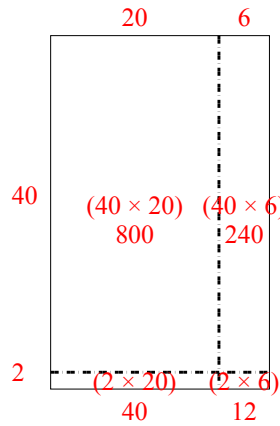
2)  $34 \times 22 =$



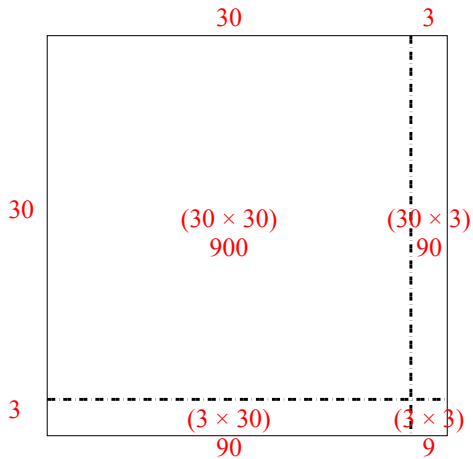
3)  $33 \times 49 =$



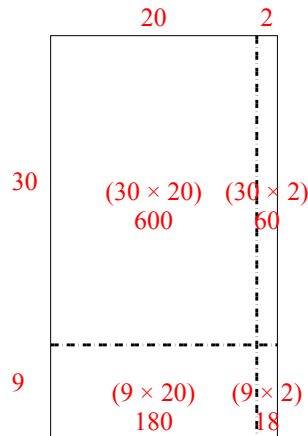
4)  $42 \times 26 =$



5)  $33 \times 33 =$



6)  $39 \times 22 =$



Answers

1. **850**

2. **748**

3. **1,617**

4. **1,092**

5. **1,089**

6. **858**