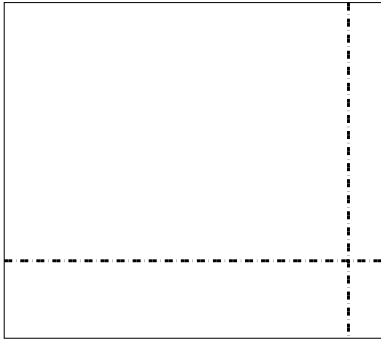





Use the array provided to solve each problem.


1) $39 \times 44 =$




2) $43 \times 33 =$




3) $42 \times 59 =$



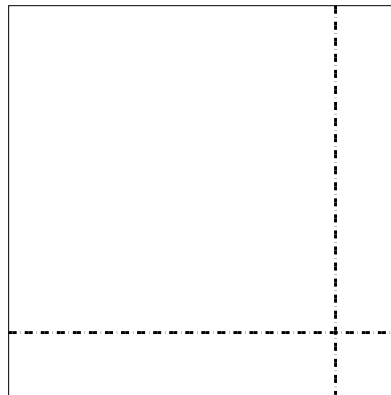
4) $34 \times 33 =$



5) $35 \times 47 =$



6) $36 \times 36 =$



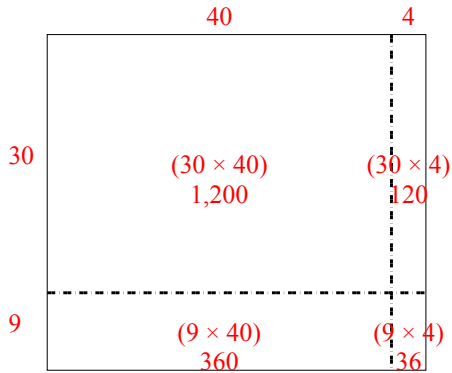
Answers

- 1. _____
- 2. _____
- 3. _____
- 4. _____
- 5. _____
- 6. _____

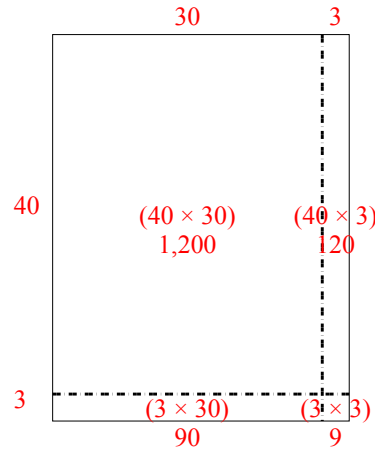


Use the array provided to solve each problem.

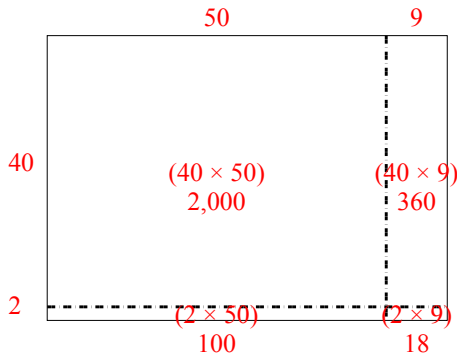
1) $39 \times 44 =$



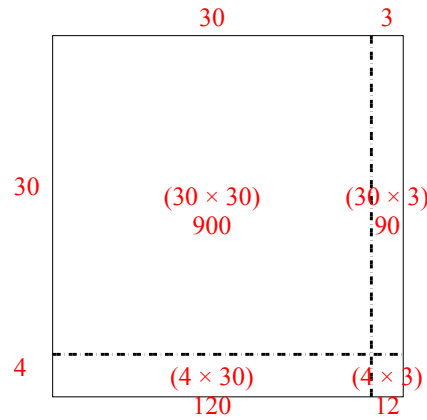
2) $43 \times 33 =$



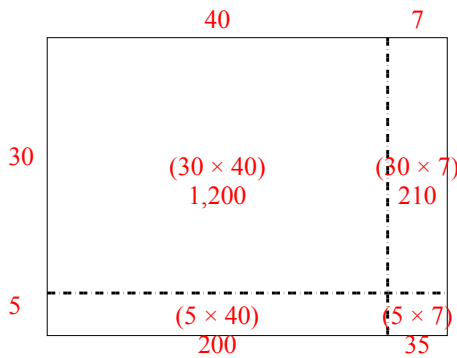
3) $42 \times 59 =$



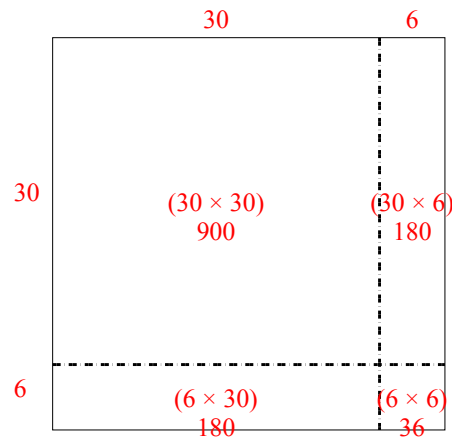
4) $34 \times 33 =$



5) $35 \times 47 =$



6) $36 \times 36 =$



Answers

1. 1,716
2. 1,419
3. 2,478
4. 1,122
5. 1,645
6. 1,296