





Use the array provided to solve each problem.


1)  $23 \times 20 =$




2)  $20 \times 26 =$




3)  $20 \times 23 =$




4)  $20 \times 25 =$



5)  $20 \times 22 =$



6)  $27 \times 20 =$



**Answers**

1. \_\_\_\_\_

2. \_\_\_\_\_

3. \_\_\_\_\_

4. \_\_\_\_\_

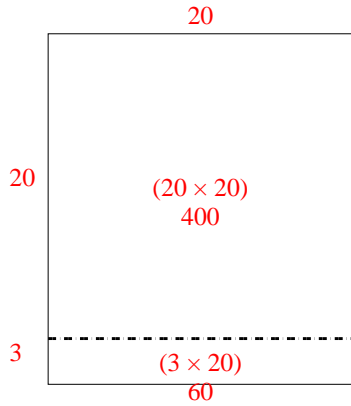
5. \_\_\_\_\_

6. \_\_\_\_\_

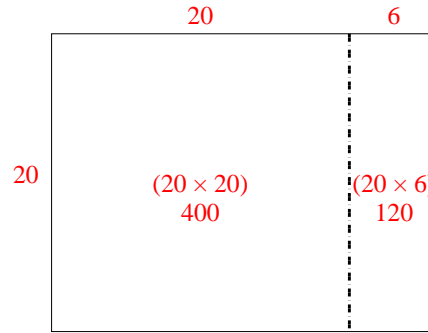


Use the array provided to solve each problem.

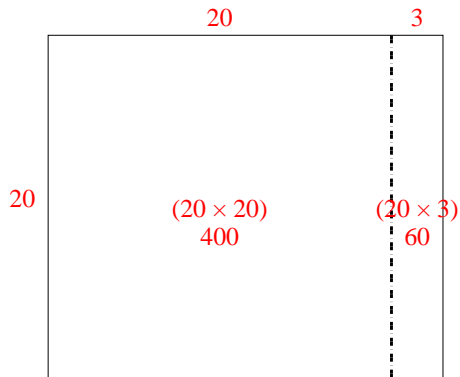
1)  $23 \times 20 =$



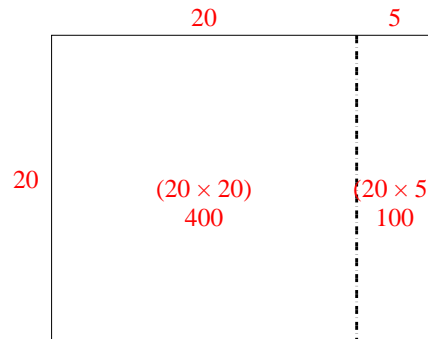
2)  $20 \times 26 =$



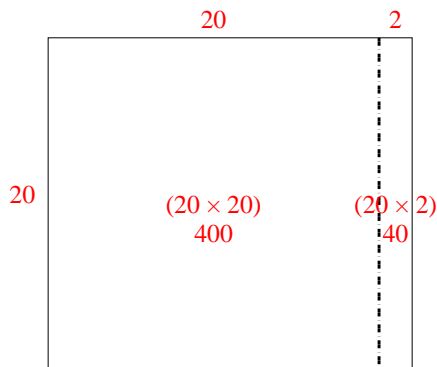
3)  $20 \times 23 =$



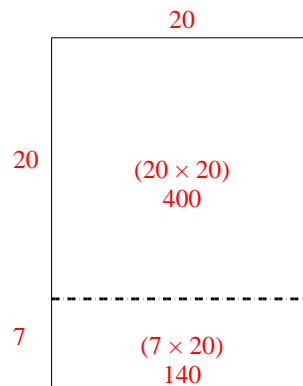
4)  $20 \times 25 =$



5)  $20 \times 22 =$



6)  $27 \times 20 =$



Answers

1. 460
2. 520
3. 460
4. 500
5. 440
6. 540