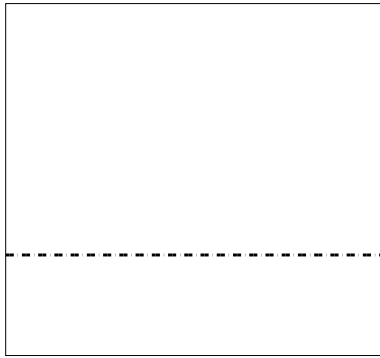





Use the array provided to solve each problem.

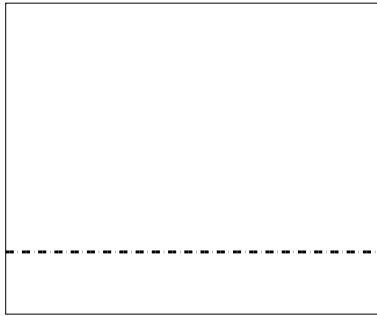
1) $28 \cdot 30 =$




2) $20 \cdot 35 =$




3) $25 \cdot 30 =$




4) $20 \cdot 25 =$



5) $20 \cdot 26 =$



6) $20 \cdot 24 =$



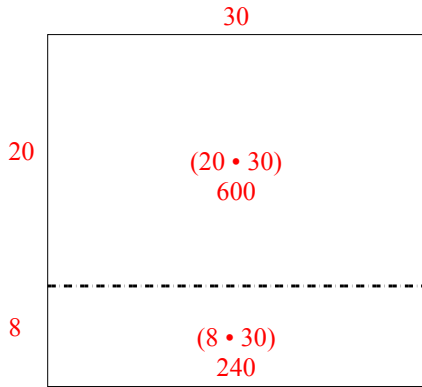
Answers

- 1. _____
- 2. _____
- 3. _____
- 4. _____
- 5. _____
- 6. _____

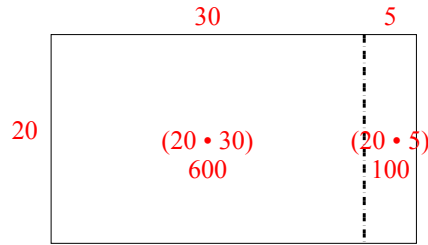


Use the array provided to solve each problem.

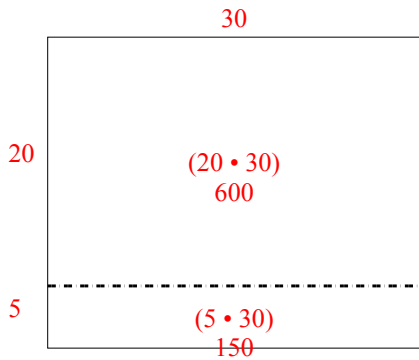
1) $28 \cdot 30 =$



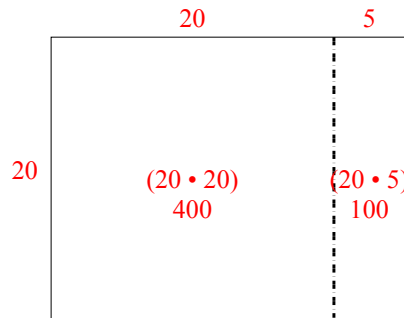
2) $20 \cdot 35 =$



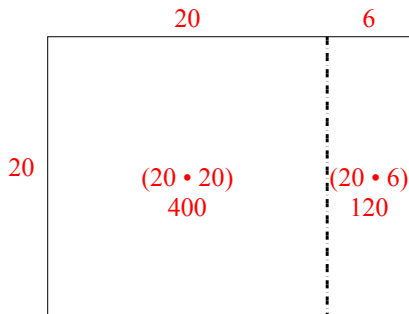
3) $25 \cdot 30 =$



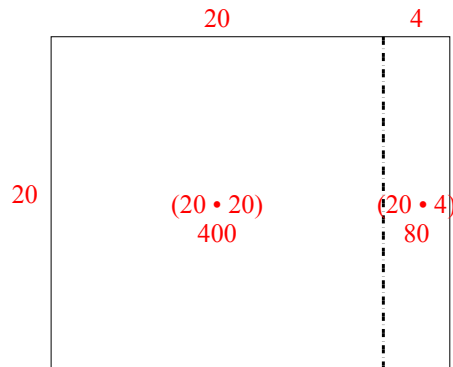
4) $20 \cdot 25 =$



5) $20 \cdot 26 =$



6) $20 \cdot 24 =$



Answers

1. 840
2. 700
3. 750
4. 500
5. 520
6. 480