




Use the array provided to solve each problem.


1) $30 \cdot 34 =$




2) $30 \cdot 27 =$




3) $20 \cdot 29 =$




4) $20 \cdot 26 =$



5) $22 \cdot 20 =$



6) $20 \cdot 27 =$



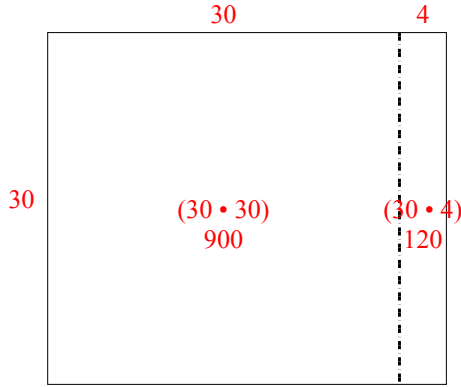
Answers

- 1. _____
- 2. _____
- 3. _____
- 4. _____
- 5. _____
- 6. _____

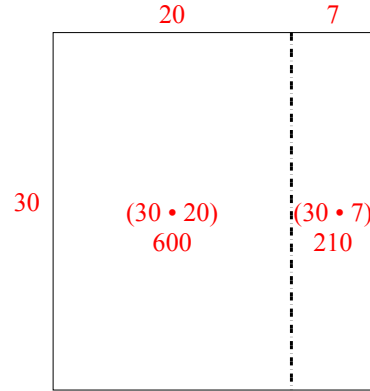


Use the array provided to solve each problem.

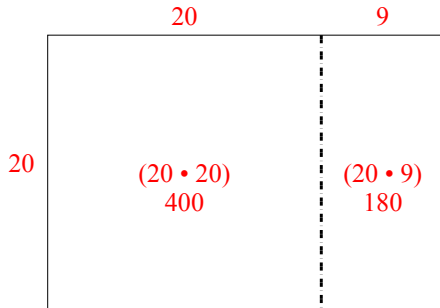
1) $30 \cdot 34 =$



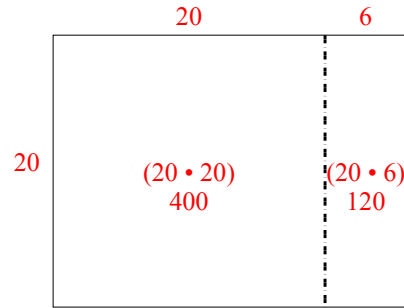
2) $30 \cdot 27 =$



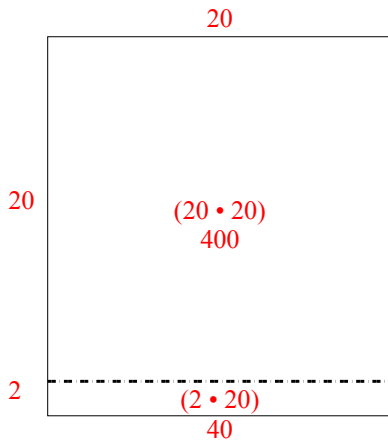
3) $20 \cdot 29 =$



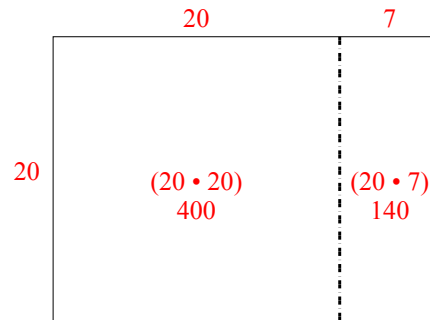
4) $20 \cdot 26 =$



5) $22 \cdot 20 =$



6) $20 \cdot 27 =$



Answers

1. 1,020
2. 810
3. 580
4. 520
5. 440
6. 540