





Use the array provided to solve each problem.


1) $30 \times 28 =$




2) $27 \times 20 =$




3) $23 \times 20 =$




4) $24 \times 20 =$



5) $25 \times 20 =$



6) $20 \times 28 =$



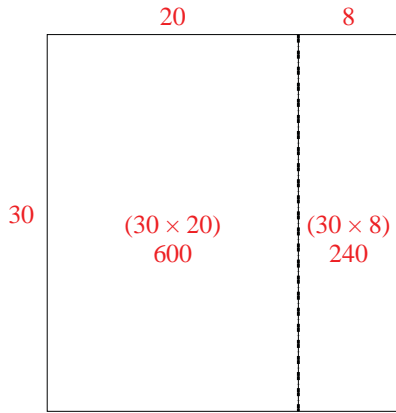
Answers

- 1. _____
- 2. _____
- 3. _____
- 4. _____
- 5. _____
- 6. _____

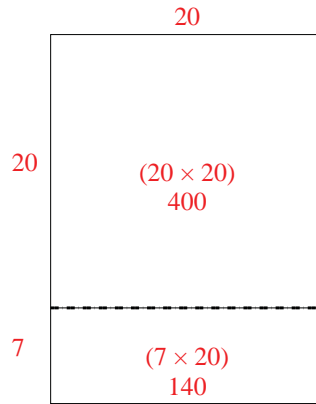


Use the array provided to solve each problem.

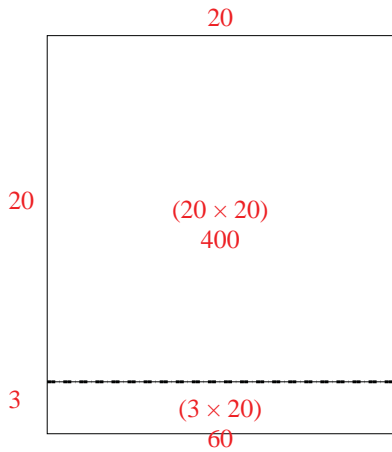
1) $30 \times 28 =$



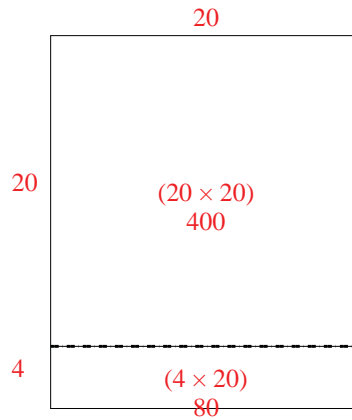
2) $27 \times 20 =$



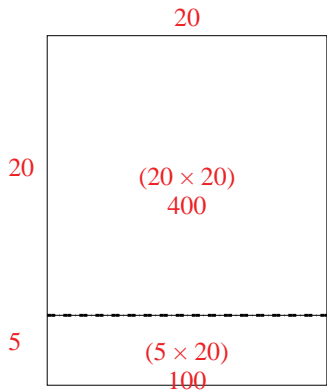
3) $23 \times 20 =$



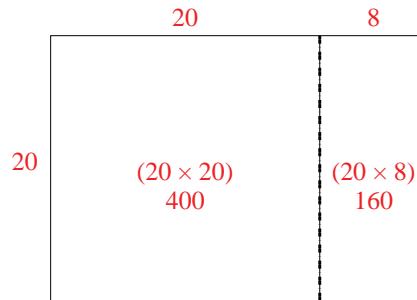
4) $24 \times 20 =$



5) $25 \times 20 =$



6) $20 \times 28 =$



Answers

1. 840

2. 540

3. 460

4. 480

5. 500

6. 560